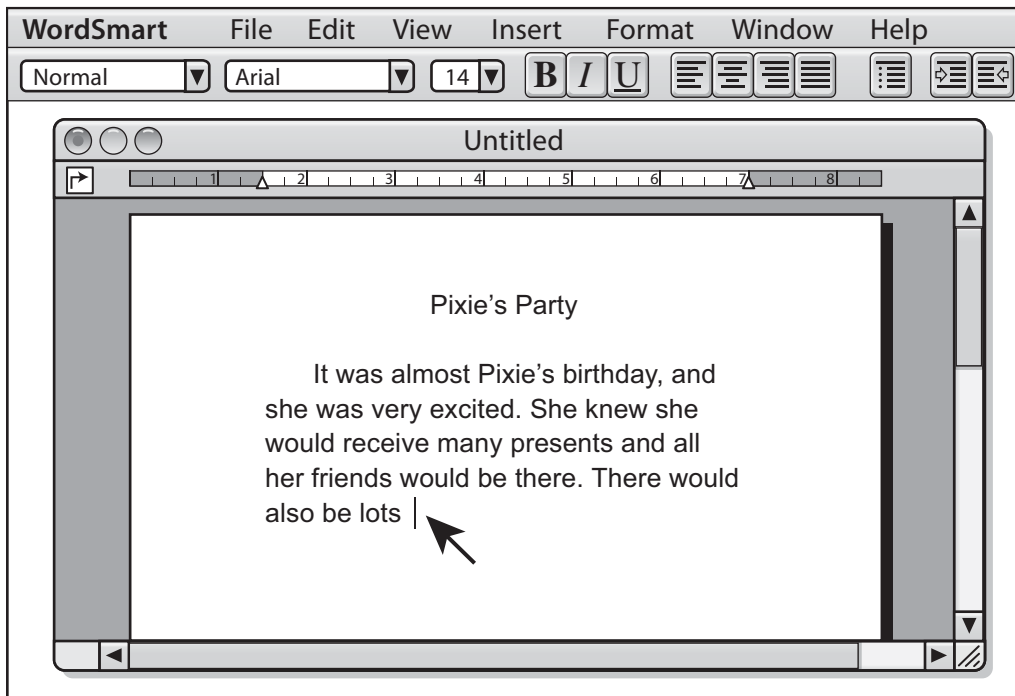


4th Grade Computer Literacy Questions

Your User Identification Number _____

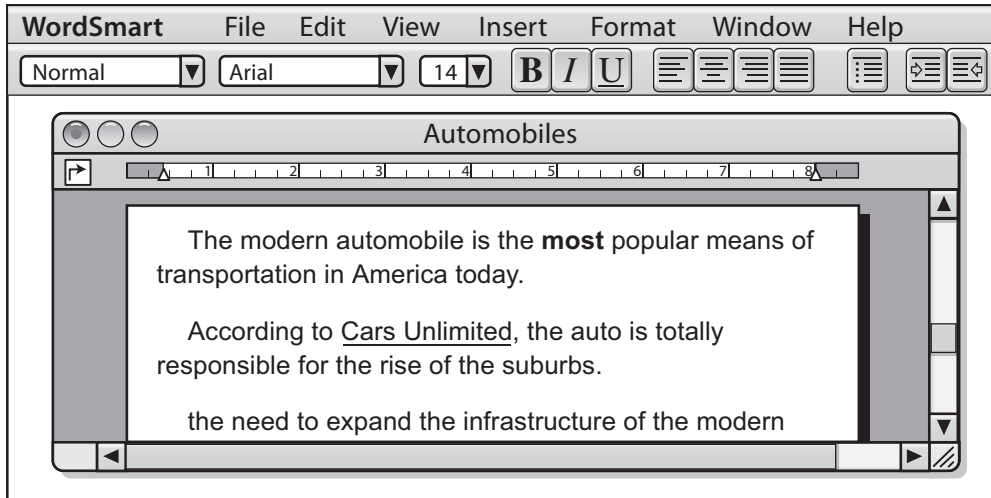
Your Name: _____

The following questions ask you about computers and technology. Please answer each of the questions below. For each question use a pen or pencil to “bubble in” the box for the response that is most correct. Thank You!



1. The arrow above is pointing to what common word processing tool?
 - ☐ 1 Cursor
 - ☐ 2 Shift key
 - ☐ 3 Monitor
 - ☐ 4 Scroll bar

2. Trisha needs to take pictures of the basketball team to place in tomorrow's school newspaper. The *fastest* way to do this would be to use a -
 - ☐ 1 Drawing program
 - ☐ 2 Scanner
 - ☐ 3 Digital camera
 - ☐ 4 35mm camera



3. Which button did Kenyatta use to make the style change to the word “most” in the first paragraph?




4. Tuan found a small drawing in a magazine that he wanted to use as a full-size cover for a report. Using the computer, how might he do this?

- ☐ 1 Scan the picture, resize, print
- ☐ 2 Print the report and glue the picture
- ☐ 3 Save the report and load the picture
- ☐ 4 Load the report, add clip art, print

5. To move a graphic into a word processing document, Tom should follow which procedures?

- ☐ 1 Select, Paste, Print
- ☐ 2 Select, Copy, Paste
- ☐ 3 Select, Paste, Copy
- ☐ 4 Select, Print, Paste



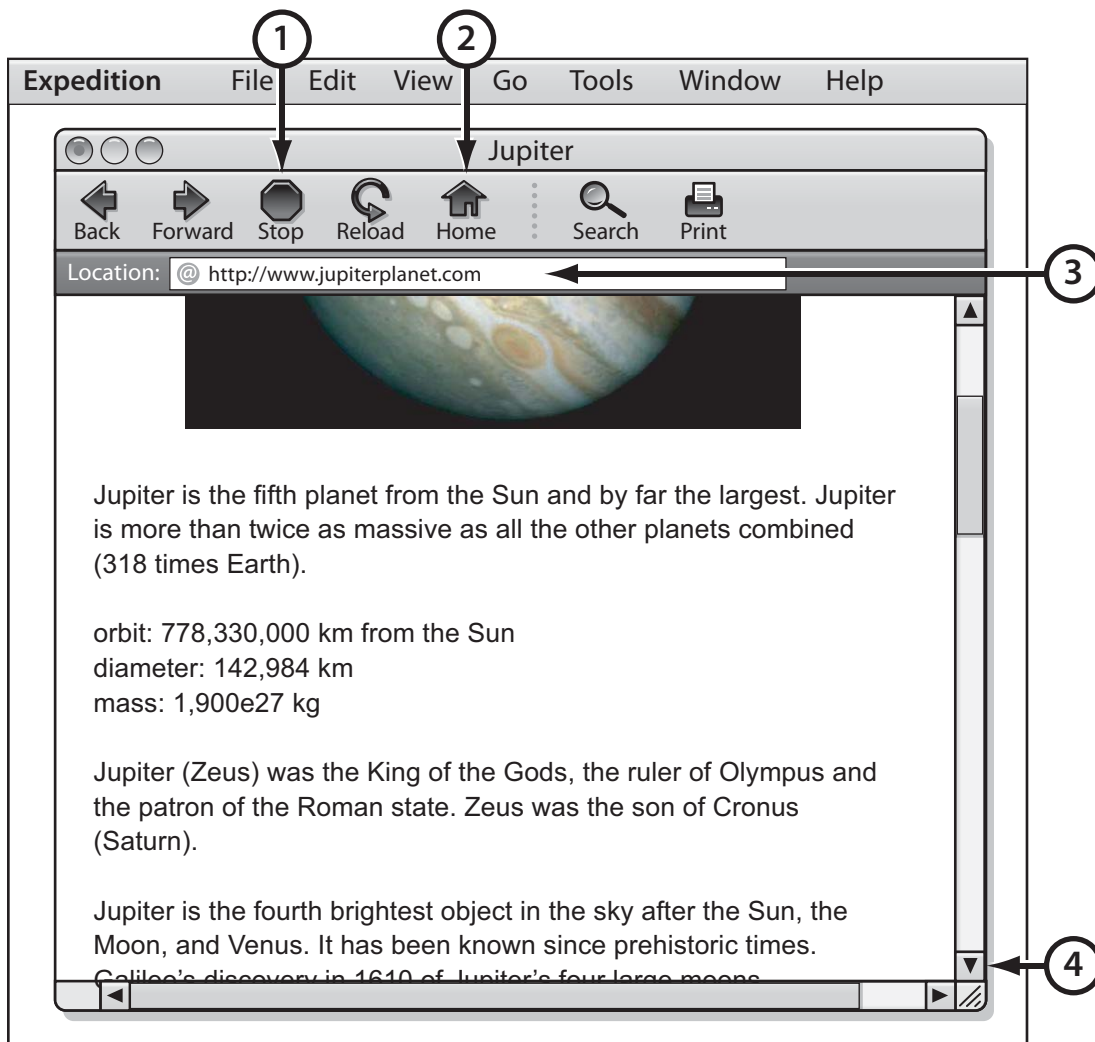
6. Maya's teacher brought some new software, which is shown above. Where in the computer will she put this in order to run the new software?

- ☐ 1 Hard drive
- ☐ 2 CD-ROM drive
- ☐ 3 Memory
- ☐ 4 Cursor

7. In order to send e-mail to another class on the school's local area network, Jessica must first know the class's -

- ☐ 1 Classroom teacher
- ☐ 2 E-mail password
- ☐ 3 Computer type

☐ 4 E-mail address



8. In the above window, the web address is indicated by number -

- ☐ 1
- ☐ 2
- ☐ 3
- ☐ 4

9. Who of the following owns the artwork created in a school computer lab using commercial software?

- ☐ 1 The student artist
- ☐ 2 The school principal
- ☐ 3 The school superintendent

☐ 4 The software developer

10. Why is a web site an effective way to present a report on an animal that you are studying?

☐ 1 People like to read reports on computers.

☐ 2 People can follow links to additional information, pictures, or animal sounds.

☐ 3 People do not have to read the report; they can just look at the pictures and listen to the sounds.

☐ 4 People can read a long report on one page by scrolling down so they do not have to go to another web page.

11. Doing research by using an online database instead of a printed set of similar information offers which advantage?

☐ 1 Easier to access information

☐ 2 Better charts

☐ 3 Easier to understand tables

☐ 4 More legible diagrams

Thank you for completing our test! 😊