

6.7 Simple Interest

Essential Question How can you find the amount of simple interest earned on a savings account? How can you find the amount of interest owed on a loan?

Simple interest is money earned on a savings account or an investment. It can also be money you pay for borrowing money.

Write the annual interest rate in decimal form.

$$\begin{array}{ccccccc}
 \boxed{\text{Simple interest}} & = & \boxed{\text{Principal}} & \times & \boxed{\text{Annual interest rate}} & \times & \boxed{\text{Time}} \\
 (\$) & & (\$) & & (\% \text{ per yr}) & & (\text{Years}) \\
 I = Prt
 \end{array}$$

1 ACTIVITY: Finding Simple Interest

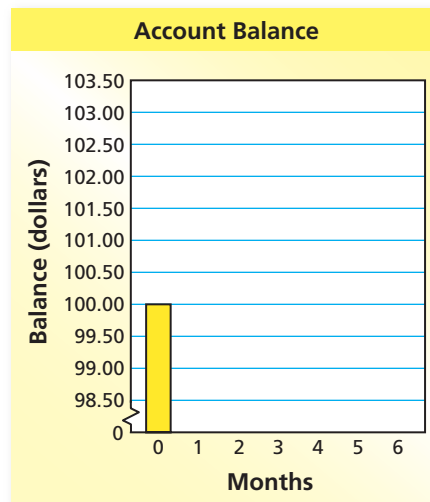
Work with a partner. You put \$100 in a savings account. The account earns 6% simple interest per year. (a) Find the interest earned and the balance at the end of 6 months. (b) Copy and complete the table. Then make a bar graph that shows how the balance grows in 6 months.

- a. $I = Prt$ Write simple interest formula.
 = Substitute values.
 = Multiply.

At the end of 6 months, you earn \$ in interest. So, your balance is \$.

b.

Time	Interest	Balance
0 month	\$0	\$100
1 month		
2 months		
3 months		
4 months		
5 months		
6 months		



COMMON CORE Percents


In this lesson, you will

- use the simple interest formula to find interest earned or paid, annual interest rates, and amounts paid on loans.

Learning Standard 7.RP.3

2 ACTIVITY: Financial Literacy

Work with a partner. Use the following information to write a report about credit cards. In the report, describe how a credit card works. Include examples that show the amount of interest paid each month on a credit card.



Math Practice 5

Use Other Resources

What resources can you use to find more information about credit cards?


U.S. Credit Card Data

- A typical household with credit card debt in the United States owes about \$16,000 to credit card companies.
- A typical credit card interest rate is 14% to 16% per year. This is called the annual percentage rate.

3 ACTIVITY: The National Debt

Work with a partner. In 2012, the United States owed about \$16 trillion in debt. The interest rate on the national debt is about 1% per year.

- Write \$16 trillion in decimal form. How many zeros does this number have?
- How much interest does the United States pay each year on its national debt?
- How much interest does the United States pay each day on its national debt?
- The United States has a population of about 314 million people. Estimate the amount of interest that each person pays per year toward interest on the national debt.



What Is Your Answer?

- IN YOUR OWN WORDS** How can you find the amount of simple interest earned on a savings account? How can you find the amount of interest owed on a loan? Give examples with your answer.

Practice

Use what you learned about simple interest to complete Exercises 4–7 on page 256.

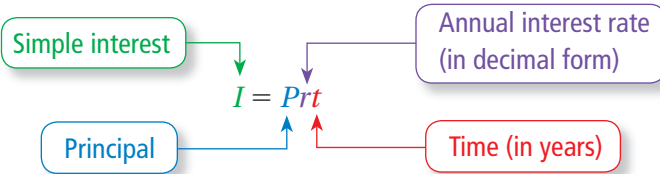
Key Vocabulary

interest, p. 254
 principal, p. 254
 simple interest,
 p. 254

Interest is money paid or earned for the use of money. The **principal** is the amount of money borrowed or deposited.

Key Idea
Simple Interest

Words **Simple interest** is money paid or earned only on the principal.

Algebra

EXAMPLE 1 Finding Interest Earned

You put \$500 in a savings account. The account earns 3% simple interest per year. (a) What is the interest earned after 3 years?
 (b) What is the balance after 3 years?

- a. $I = Prt$ Write simple interest formula.
 $= 500(0.03)(3)$ Substitute 500 for P , 0.03 for r , and 3 for t .
 $= 45$ Multiply.

∴ So, the interest earned is \$45 after 3 years.

- b. To find the balance, add the interest to the principal.

∴ So, the balance is $\$500 + \$45 = \$545$ after 3 years.

EXAMPLE 2 Finding an Annual Interest Rate

You put \$1000 in an account. The account earns \$100 simple interest in 4 years. What is the annual interest rate?

- $I = Prt$ Write simple interest formula.
 $100 = 1000(r)(4)$ Substitute 100 for I , 1000 for P , and 4 for t .
 $100 = 4000r$ Simplify.
 $0.025 = r$ Divide each side by 4000.

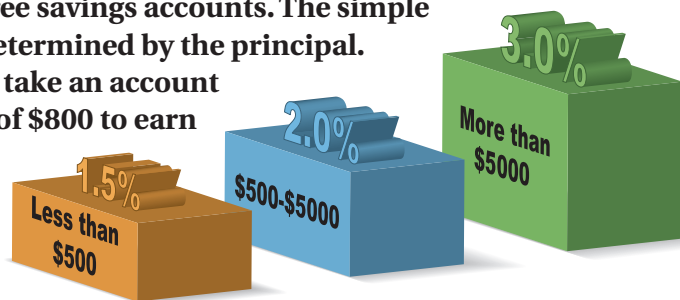
∴ So, the annual interest rate of the account is 0.025, or 2.5%.

On Your Own

- In Example 1, what is the balance of the account after 9 months?
- You put \$350 in an account. The account earns \$17.50 simple interest in 2.5 years. What is the annual interest rate?

EXAMPLE 3 Finding an Amount of Time

A bank offers three savings accounts. The simple interest rate is determined by the principal. How long does it take an account with a principal of \$800 to earn \$100 in interest?



The pictogram shows that the interest rate for a principal of \$800 is 2%.

$$I = Prt$$

Write simple interest formula.

$$100 = 800(0.02)(t)$$

Substitute 100 for I , 800 for P , and 0.02 for r .

$$100 = 16t$$

Simplify.

$$6.25 = t$$

Divide each side by 16.

∴ So, the account earns \$100 in interest in 6.25 years.

EXAMPLE 4 Finding an Amount Paid on a Loan

You borrow \$600 to buy a violin. The simple interest rate is 15%. You pay off the loan after 5 years. How much do you pay for the loan?



$$I = Prt$$

Write simple interest formula.

$$= 600(0.15)(5)$$

Substitute 600 for P , 0.15 for r , and 5 for t .

$$= 450$$

Multiply.

To find the amount you pay, add the interest to the loan amount.

∴ So, you pay $\$600 + \$450 = \$1050$ for the loan.

On Your Own

- In Example 3, how long does it take an account with a principal of \$10,000 to earn \$750 in interest?
- WHAT IF?** In Example 4, you pay off the loan after 2 years. How much money do you save?

Vocabulary and Concept Check

- VOCABULARY** Define each variable in $I = Prt$.
- WRITING** In each situation, tell whether you would want a *higher* or *lower* interest rate. Explain your reasoning.
 - you borrow money
 - you open a savings account
- REASONING** An account earns 6% simple interest. You want to find the interest earned on \$200 after 8 months. What conversions do you need to make before you can use the formula $I = Prt$?

Practice and Problem Solving

An account earns simple interest. (a) Find the interest earned. (b) Find the balance of the account.

- \$600 at 5% for 2 years
 - \$1500 at 4% for 5 years
 - \$350 at 3% for 10 years
 - \$1800 at 6.5% for 30 months
 - \$700 at 8% for 6 years
 - \$1675 at 4.6% for 4 years
 - \$925 at 2% for 2.4 years
 - \$5200 at 7.36% for 54 months

- ERROR ANALYSIS** Describe and correct the error in finding the simple interest earned on \$500 at 6% for 18 months.

X
$$I = (500)(0.06)(18)$$
$$= \$540$$

Find the annual interest rate.

- $I = \$24, P = \$400, t = 2$ years
 - $I = \$562.50, P = \$1500, t = 5$ years
 - $I = \$54, P = \$900, t = 18$ months
 - $I = \$160.67, P = \$2000, t = 8$ months

Find the amount of time.

- $I = \$30, P = \$500, r = 3\%$
 - $I = \$720, P = \$1000, r = 9\%$
 - $I = \$54, P = \$800, r = 4.5\%$
 - $I = \$450, P = \$2400, r = 7.5\%$

- BANKING** A savings account earns 5% simple interest per year. The principal is \$1200. What is the balance after 4 years?
- SAVINGS** You put \$400 in an account. The account earns \$18 simple interest in 9 months. What is the annual interest rate?
- CD** You put \$3000 in a CD (certificate of deposit) at the promotional rate. How long will it take to earn \$336 in interest?




Find the amount paid for the loan.

- 4 24. \$1500 at 9% for 2 years 25. \$2000 at 12% for 3 years
 26. \$2400 at 10.5% for 5 years 27. \$4800 at 9.9% for 4 years

Copy and complete the table.

	Principal	Interest Rate	Time	Simple Interest
28.	\$12,000	4.25%	5 years	
29.		6.5%	18 months	\$828.75
30.	\$15,500	8.75%		\$5425.00
31.	\$18,000		54 months	\$4252.50



Zoo Trip

Tickets	67.70
Food	62.34
Gas	<u>45.50</u>
Total Cost	?

32. **ZOO** A family charges a trip to the zoo on a credit card. The simple interest rate is 12%. The charges are paid after 3 months. What is the total amount paid for the trip?
 33. **MONEY MARKET** You deposit \$5000 in an account earning 7.5% simple interest. How long will it take for the balance of the account to be \$6500?



11.8% Simple Interest
 Equal monthly
 payments for 2 years

34. **LOANS** A music company offers a loan to buy a drum set for \$1500. What is the monthly payment?
 35. **REASONING** How many years will it take for \$2000 to double at a simple interest rate of 8%? Explain how you found your answer.
 36. **PROBLEM SOLVING** You have two loans, for 2 years each. The total interest for the two loans is \$138. On the first loan, you pay 7.5% simple interest on a principal of \$800. On the second loan, you pay 3% simple interest. What is the principal for the second loan?

37. **Critical Thinking** You put \$500 in an account that earns 4% annual interest. The interest earned each year is added to the principal to create a new principal. Find the total amount in your account after each year for 3 years.



Fair Game Review What you learned in previous grades & lessons

Solve the inequality. Graph the solution. (Section 4.2)

38. $x + 5 < 2$ 39. $b - 2 \geq -1$ 40. $w + 6 \leq -3$

41. **MULTIPLE CHOICE** What is the solution of $4x + 5 = -11$? (Section 3.5)

- (A) $x = -4$ (B) $x = -1.5$ (C) $x = 1.5$ (D) $x = 4$