



# A Celestial Navigation Primer

by

Ron Davidson

## Introduction

The study of celestial navigation, whether for blue water sailing, the taking of a navigation class (like the United States Power Squadron's JN or N classes), or for pure intellectual pursuit, is often considered to be a daunting subject. In part, that is because there are so many details associated with position finding. There are abbreviations, corrections, formulas, tables, and some challenging diagrams that may be difficult to understand. All of these (and more) serve to confuse the student, particularly if the study delves deep into the details before giving perspective and understanding of basic principles.

Many of the available publications on the subject tend to focus on a “cookbook” how-to approach focused on the mechanics of sight reduction without providing an overview of the critical, clear-cut scientific basis of how and why celestial navigation works.

It is the purpose of this primer to give that perspective and an understanding of basic celestial navigation principles so that the student's subsequent study will be more grounded and informed and perhaps, easier. The author of this primer does not wish to replace the student's study materials. Those have definite value for their detail, diagrams, problem exercises, plotting conventions, and more.

The author of this primer is hopeful that the student will refer back to this treatise periodically, so as to retain the "big picture" of celestial navigation.

## Steps required for Standard Navigation:

1. Keep a deduced reckoning (DR) track on a chart using course steered and the Distance-Speed-Time formula  $60D = ST$ .
2. Periodically verify DR by other means.

## Additional steps required of Celestial Navigation:

1. Take a sight of a celestial body using a sextant.
2. Establish, via mathematics, a second sight; called a “reference sight”.
3. Compare the actual sight altitude reading to the reference sight altitude calculated.
4. Plot the result of the comparison on a plotting sheet.

## The Three Essentials That Are Required:

1. Knowledge of the positions of celestial bodies with respect to time.
2. Precise measurement of the time of observation.
3. Angular measurements (altitudes) between the celestial body and a known reference. The reference used in marine navigation is the visible horizon.
  - a. A scientific calculator is extremely helpful in solving trigonometry equations.

# The Nautical Almanac

At the heart of celestial navigation is the Nautical Almanac. The Nautical Almanac is produced each year jointly by *Her Majesty's Nautical Almanac Office* and the *Nautical Almanac Office* of the U. S. Naval Observatory, and contains astronomical data of the Sun, Moon, Venus, Mars, Jupiter, and Saturn, et al, tabulated in 3-day sections for each whole hour of each day of the almanac year.

What the Nautical Almanac can do is provide the data necessary to allow the navigator to identify the altitude above the horizon and azimuth (true bearing) of each celestial body for each second of each hour for any position on earth. This is done through the use of spherical trigonometry, whose formulas are already established. The student need not be concerned with the derivation of the formulas, but rather with the proper input of the pertinent elements into the formulas.

Having observed the altitude of a celestial body at a specific time, the Nautical Almanac can also provide the data that can be used to help determine a position on earth. This, again, is through the use of spherical trigonometry. The observer records the altitude measured of a celestial body above the horizon, and records the time of observation (to the second), and is able to use the data from the Nautical Almanac to create an "observed altitude" from that position on earth. Additional almanac data is then extracted to create a "calculated altitude" for position, used for comparison to determine the observer's estimated position at the time of the sight. Again, this is done through the formulaic solution of spherical trigonometry.

Thus, the Nautical Almanac is the "go to" reference to establish the inputs for the formulas that will solve for location on earth.

A caveat: the student must understand the layout of the Nautical Almanac, the data included therein, the abbreviations used, and the application of various adjustments or corrections. In addition, the use of "Aries" as a reference point for navigational stars will be another topic of study.

Key understandings for the use of Nautical Almanac:

1. Given a specific location on earth, the Almanac will provide the data necessary for the navigator to determine a celestial body's altitude above the horizon and the true bearing (azimuth) of a celestial body at any time (down to the second) from that location.

2. Given a specifically measured altitude of a celestial body at a specific time (down to the second) the Almanac will provide the data used to determine the position of the observer.

Each of the above understandings assumes the use of spherical trigonometry and the associated formulas to give the proper results. These are topics covered later in this Primer. It is important to note that the principles of spherical trigonometry and the associated formulas are not the essentials of study here. Nevertheless, the *derivation of the inputs* to the formulas is key to successful outcomes and positioning.

## The Fundamental Celestial Navigation Procedure:

1. Determine your present deduced reckoning (DR) position.
  - a. A specific latitude and longitude pin-pointed; this is not your *actual* location; we've yet to determine that. It is your *best guess* based on your navigation principles employed.
2. Measure the observed altitude angle of an identified celestial body above the horizon.
3. Record the name of the body sighted, the measured altitude, and the precise time of observation.
4. Make corrections to measurements for sextant Instrument Error and Dip (horizon error).
5. Establish the reference sight, based on the DR location by extracting the tabulated ephemeris data from the nautical almanac and recording.
6. Utilize a calculation algorithm and apply mathematics such as the Law of Cosines formulas to solve.
7. Plot the results on a plotting sheet to identify and record the position determined nearest your DR position.

## Time

The observation of a celestial body to determine position is dependent on the time of the observation. For practical purposes, the celestial bodies are fixed in the sky, but the earth is rotating at approximately 1000 mph! That suggests that every second, the celestial body's location in the sky, relative to our position, is moving. (Actually, we are moving.) Thus, when we observe an altitude of a celestial body from Earth, its longitudinal position is changing every second! This renders the precision in the measurement of time associated with an altitude observation of a celestial body of utmost importance.

Beyond precision, there are the conventions of time measurement to be considered. For example, there are 24 time zones across the globe. These are typically established by political entities for various purposes, including ease of commerce and communication, i.e., to help our societies function more efficiently. Time, across a particular time zone, is constant, regardless of the relationship of the sun or celestial bodies. This is an issue for the navigator, given the precision that is required to track celestial bodies.

The solution to the challenge of time precision and specificity is the use of Universal Time (UT). The Nautical Almanac utilizes UT in pinpointing celestial bodies. Therefore, it is the responsibility of the student/navigator to learn how to convert local time to UT in order to extract the appropriate data from the Almanac.

## Time, a Further Discussion

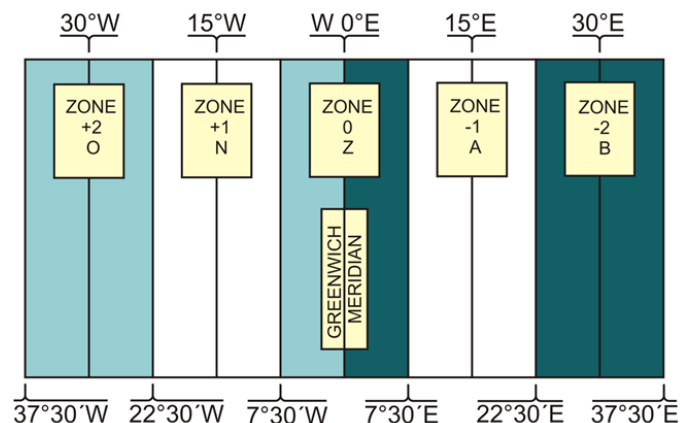
The Earth's orbit around the Sun is a slightly elliptical one, with a mean distance from the Sun equal to 1 Astronomical Unit (AU = 80,795,193 nautical miles). This means that the Earth is sometimes a little closer to and sometimes a little farther from the Sun than 1 AU. When it is closer, the gravitational forces between Earth and Sun are greater and it is like going downhill where the Earth travels a little faster thru its orbital path. When it is farther away, the gravitational forces are less and it is like going uphill where the Earth travels a little slower.

Because the Earth's orbit is not perfectly circular and its orbital velocity is not constant, the precise measurement of time is affected. We keep time by the movement of the Sun called *solar time*. For keeping time on our clocks, the movement of the Sun across the sky is averaged to become an imaginary *mean* Sun (establishing mean time) where every day is exactly 24 hours long and noon occurs at 1200 every day. However, the real or *apparent* Sun (establishing apparent time) is not constant and leads us to the time-related event that may be most familiar, the leap year, where we must add a day to our calendar every four years to keep our calendar time synchronized.

Navigators keep watch time like the rest of the world, using mean solar time however they also must learn about and use appropriate apparent time, the Sun's *actual* movement. Throughout the year "noon", when the Sun is directly over the observer's meridian of longitude, actually varies from occurring 16 minutes early at 1144 watch time around early November to 14 minutes late at 1214 watch time around mid-February. This difference in time between *mean* time and *apparent* time is called the *Equation of Time* and is listed on the Daily pages of the Nautical Almanac. We typically ignore this difference for day-to-day living but to the mariner, it can mean the difference between a pleasant cruise and loss of the vessel or worse!

The Earth is a sphere<sup>1</sup> with 360° of circumference and sunrise occurs every 24 hours. The Sun travels 360° every 24 hours. Therefore, the Sun must move across the sky at an average of 15° per hour (360° ÷ 24) or 1° every 4 minutes (60 ÷ 15). Mathematicians have determined that, at the Equator, 1° = 60 nautical miles. If a mariner's time were incorrect by 16 minutes a position error of 4° or 240 nautical miles could result! Mariners must be able to determine apparent time as well as mean time.

In addition to mean and apparent time, the Earth's circumference is divided into 24 one-hour (15°) time zones. See the figure below right. The time zones begin (or end) at the Greenwich Meridian (0° longitude), the "Z" or "Zulu" time zone, spanning 7½° east and west of the 0° meridian and progress both easterly and westerly from Greenwich every 15° (1 hour) to meet at the *International Date Line* at 180° longitude.



Midnight at Greenwich occurs when the Sun is over the 180° meridian (International Date Line). Noon at Greenwich occurs when the Sun is directly over the 0° meridian. The "world time" kept at Greenwich is called *Universal Time* (UT), formerly "*Greenwich Mean Time*". The times of celestial body movements recorded in the Nautical Almanac for each hour of each day are listed in UT. The mariner must also have the skill to convert local time (Zone Time (ZT)) of his/her time zone to UT in order to extract appropriate data from the almanac. Remember, the Sun rises in the east and sets in the west. The time on a clock in a time zone to the east is ahead of the time on a clock of another time zone to the west.

For example, if a mariner were located at 128° W longitude and zone time is 1045, what is UT? First, divide the longitude 128° by 15 to get 8.5333; and round to the nearest integer of 9 as the time zone.

<sup>1</sup> Actually an oblate spheroid; a sphere slightly flattened at the poles.

The mariner is 9 time zones west of Greenwich. Greenwich is 9 time zones east of the mariner and 9 hours *ahead* of the mariner's ZT. Therefore, UT is:  $1045 + 9 = 1945$  UT at Greenwich. If the mariner were at  $37^\circ$  E longitude at ZT 1045, what is UT?  $37 \div 15 = 2.4666$  rounded to 2. Greenwich is two time zones west of the mariner therefore UT is 2 hours *behind* ZT,  $UT = 1045 - 2 = 0845$  UT. If a mariner's position is in west longitude, one hour per time zone is added to local time to determine UT; if a mariner's position is in east longitude, one hour per time zone is subtracted from local time to determine UT. Noon in any time zone occurs when the Sun is directly over the central meridian of the zone. Mariners keep Standard Time aboard ship; daylight time is ignored.

Time is longitude! The Earth rotates one revolution ( $360^\circ$  of longitude) in one day. It therefore turns one degree of longitude in  $1/360^{\text{th}}$  of a day, or every four minutes.  $24 \text{ hours per day} \times 60 \text{ minutes per hour} = 1440 \text{ minutes} \div 360^\circ = 4 \text{ minutes per degree}$ . To calculate your longitude, you simply need to determine the time difference between time at your location and time at the Greenwich ( $0^\circ$ ) Meridian.

## Local Mean Time

Another time topic that a mariner's knowledge requires is called *Local Mean Time* (LMT). LMT accounts for the difference in longitude between a mariner's position and the central meridian of his/her time zone. We learned above that for each degree of longitude time differs by 4 minutes. Time zones are  $15^\circ$  wide with  $\frac{1}{2}$  the zone ( $7\frac{1}{2}^\circ$  or 30 minutes) to the east and  $\frac{1}{2}$  ( $7\frac{1}{2}^\circ$  or 30 minutes) to the west of the central meridian of the zone and noon for a time zone is when the Sun is directly over the central meridian of the time zone.

Here's an example to demonstrate LMT: A mariner is located at  $133^\circ$  W longitude. At what time will the Sun be over the mariner's meridian (local noon at that position)? We know that noon for the time zone is when the Sun is over the central meridian of the time zone. Which meridian is the central meridian? Divide the longitude of  $133^\circ$ W by  $15^\circ$  per zone and the result is 8.8667 rounded to 9. The mariner's time zone is 9 time zones west of Greenwich and  $9 * 15$  yields  $135^\circ$  W as the central meridian of the time zone. However, the mariner at  $133^\circ$ W is located  $2^\circ$  east of the central meridian of  $135^\circ$ W. The Sun will cross  $133^\circ$ W before it will cross  $135^\circ$ W. Therefore, Local Apparent Noon (LAN) at  $133^\circ$  W must occur earlier than 1200. How much earlier? We learned earlier that the Sun moves  $1^\circ$  every 4 minutes. We are  $2^\circ$  east of the zone meridian of  $135^\circ$  W so local noon must occur 8 minutes *before* noon at the central meridian or at 1152 ZT. Thus the LMT of noon at  $133^\circ$  W is 1152. Had the mariner waited until 1200 ZT to take a "noon sight for latitude", he/she would have "missed" local noon by 8 minutes or 120 miles!

Now suppose the mariner were at  $137^\circ$ W. At what time would local noon occur? Did you get 1208? Remember, zone time is average (mean) time and we as a society agree that all clocks within the zone read 1200 when the Sun is over the central meridian of our time zone. However, this demonstration highlights the fact that Local Apparent Noon (LAN) occurs earlier for those east of the central meridian and later for those west of the central meridian. The mariner must account for his/her difference in longitude from the central meridian when taking (noon) sights.  **$DLo = Lo - ZM$**  the difference in longitude (DLo) is our longitude minus the longitude of the central meridian (Zone Meridian (ZM)).

Consider the following example:

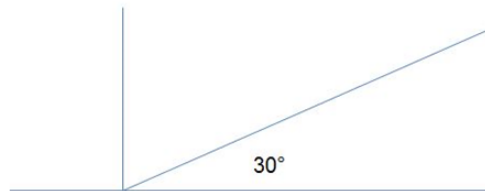
At what time must a mariner be ready to take a noon sight for latitude if the mariner is located at Lo 55° 25'W? The mariner must determine the LMT of noon. Solution: Determine the ZM of the time zone:  $Lo = 55 + (25/60) = 55.41667^\circ \div 15 = 3.69444$  rounded to 4. The mariner is 4 time zones west of Greenwich; central meridian (ZM) is  $4 * 15 = 60^\circ W$ .  $DLo = 55.41667^\circ - 60^\circ = -4.5833^\circ$ . The time difference is  $-4.5833^\circ * 4 \text{ min per } ^\circ = -18.33332 = -18 \text{ minutes } 20 \text{ seconds}$ . The LMT of noon =  $12-00-00 - 18 \text{ m } 20 \text{ s} = 11-41-40$ . The mariner's longitude is  $4.5833^\circ$  east of the ZM so LMT of noon is 18 minutes and 20 seconds earlier than noon at the ZM. The mariner must be prepared to begin taking sights before 11-41-40.

## Altitudes and Co-Altitudes

**Background:** Those interested in celestial navigation understand that knowledge of working with angles (degrees, minutes, and tenths of minutes) is required and many find that alarming or intimidating. Yes, angles are involved and spherical trigonometry is ultimately employed to obtain the results, however, navigators do not need to study the theory behind spherical trigonometry, they just need to know some basic arithmetic and how to use the two formulas provided. It is easier to understand the celestial navigation process if we first understand a few basic concepts being employed.

**Concept #1:** Angles and Complements. The figure below shows a  $90^\circ$  angle between the vertical and horizontal lines and also shows an angle of  $30^\circ$  from horizontal and asks for the complement of the angle. The complement of an angle is the difference between the angle shown and  $90^\circ$  i.e.  $90^\circ - \text{the angle}$ , in this case,  $90^\circ - 30^\circ = 60^\circ$ .

### ANGLES AND COMPLEMENTS

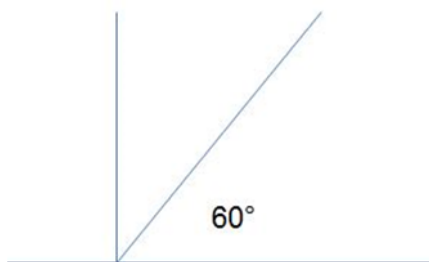


What is the complement of  $30^\circ$ ?

$$90^\circ - 30^\circ = 60^\circ$$

This next figure shows another example of finding the complement of an angle.

### ANGLES AND COMPLEMENTS

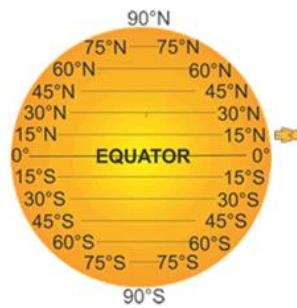


What is the complement of  $60^\circ$ ?

$$90^\circ - 60^\circ = 30^\circ$$

Here are two more examples although these examples are using a person's location and Earth's latitude as the angle the concept, however, remains the same. You should have little trouble identifying the complements.

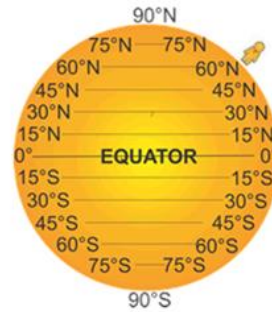
### ANGLES AND COMPLEMENTS



What is the complement?

$$90^\circ - 15^\circ = 75^\circ$$

### ANGLES AND COMPLEMENTS



What is the complement?

$$90^\circ - 60^\circ = 30^\circ$$

**Concept #2:** Distances: Mathematicians have determined that 1° of latitude equals 60 nautical miles (nm) and 01' is 1 nm. Based on that knowledge and knowledge of complements, we can calculate the distance between a person's location and another known point. For instance, if two persons were separated by 3° we could calculate the distance between them by 3° X 60nm per degree = 180 nautical miles distance.

Based on the two figures above we could then calculate our distance from the North Pole (Pn):

If we were located at 15° N Latitude, how far are we from the Pn?

$$90^\circ - 15^\circ = 75^\circ = 75 \times 60 = 4500 \text{ nm.}$$

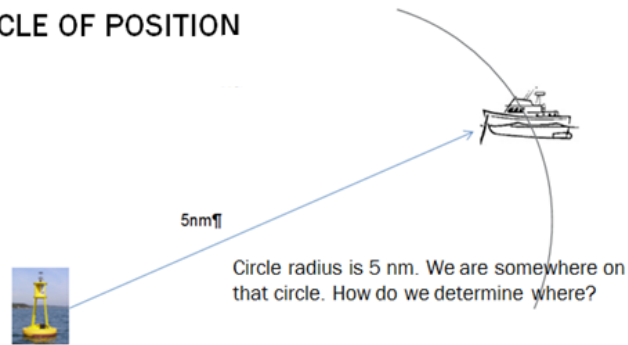
If we were located at 60° N Latitude, how far are we from the Pn?

$$90^\circ - 60^\circ = 30^\circ = 30 \times 60 = 1800 \text{ nm.}$$

The complement of our latitude tells us the distance to the North Pole! The complement of latitude is called Co-Latitude.


**Concept #3:** Circle of Position. The distance between our location and some known point creates a "Circle of Position" (COP). The figure below shows a vessel that has detected via radar, a buoy at a range of 5nm. If the navigator located that buoy on a chart and, using a drawing compass set to the 5nm distance, the navigator could place the point of the compass on the buoy and draw a circle around that buoy creating a circle of position with a radius of 5nm. The navigator would know that the vessel is located somewhere on that circle. To determine where on the circle, the navigator would read the radar bearing to the buoy and plot that bearing on the chart. Where the bearing and the COP intersect would be the vessel's location.

## CIRCLE OF POSITION



**Concept #4:** Measuring altitude using a sextant. A navigator observes a celestial body in the sky and uses a sextant to measure the altitude of the body above the horizon. The horizon constitutes the horizontal reference line and the measured angle provides, indirectly, the complement angle as shown in the figure below:

## OBSERVED ALTITUDE FROM SEXTANT



If we measure the altitude of the sun at 32°, how far are we from the GP?

$$90^\circ - 32^\circ = 58^\circ = 58 \times 60 = 3480 \text{ nm}$$

For celestial navigation, the COP concept from above, is employed. The celestial body's Geographical Position (GP) is the "buoy" and the 3,480nm is the radius of the circle of position from the GP of the celestial body. The mariner is located somewhere on that COP. Plotting that large circle on a chart as we did the radar COP, is impractical because the circle's radius is so huge! Even if we had a chart of small enough scale to plot the circle, the scale of the chart would make it impossible to plot an accurate position. The solution to this dilemma is a mathematical one versus a mechanical one and will be covered in more detail later.

The distance of 3,480nm is the distance between the mariner's location and the location of the GP. An imaginary line connecting the celestial body to the Earth's center passes through the Earth's surface at the GP. The navigator determines the precise location (latitude and longitude) of the GP from the data recorded in the Nautical Almanac. The complement of the measured altitude measures the distance between the mariner's location and the location of the GP. In the figure above that distance is 3,480nm. The actual sextant measurement (with some corrections applied) of a body's altitude is called the "Observed Altitude" and is abbreviated Ho; H for height or altitude and o for observed. Once a sextant measurement of the altitude of a celestial body is made and an Observed Altitude (Ho) determined, the Co-Altitude ( $90^\circ - \text{Ho}$ ) determines the radius of the COP from the mariner's position to the body's GP.

**Concept #5:** The Calculated Altitude. To determine additional position information, the mariner needs a "known value" of altitude to compare to the "observed altitude". The mariner selects a "reference position" (a latitude and longitude) in the vicinity of the deduced reckoning (DR) position.



Mariners typically use the DR position however any position within 30nm of the DR will work just as well. Many celestial navigation texts refer to this reference position as an “Assumed Position” (AP) but that is a misnomer. The mariner is not assuming he/she is located there; it is just a position chosen as a reference point.

*Many students get confused at this point because they view the DR position as nebulous and uncertain. That is not true; the DR is a specific point of latitude and longitude that can be accurately plotted. What is uncertain is the mariner’s location; he/she may be located at the DR or may not. The mariner’s location is uncertain and is what must be determined.*

Using the reference position chosen and data from the almanac related to the celestial body observed the latitude and longitude of the GP of the celestial body can be determined. The altitude of the celestial body that would be measured from the reference position can then be calculated. The altitude calculated is labelled Hc. The altitude calculated provides, indirectly, the complement (Co-Altitude) of the angle and therefore, provides the distance between the GP and the reference position.

There are now two distances to the GP: 1) the distance based upon the measured Observed Altitude (Ho) and 2) the distance based upon the Calculated Altitude (Hc) from the reference position. A comparison of Ho to Hc is then made to find the difference. The difference between Ho and Hc is called the *Intercept* and is the distance the mariner’s location was offset from the reference position at the moment the mariner measured the observed altitude.

For example, if the mariner measured a Ho of 32° 28.0’ and then calculated an altitude (Hc) of 32° 26.5’ from a reference position, the difference of 01.5’ tells the mariner that his/her location was offset 01.5nm from the reference position at the time they measured Ho.

*The Co-Altitude of Ho is  $90^\circ - 32^\circ 28.0' = 57^\circ 32.0' = 3452\text{nm}$  from the GP.*

*The Co-Altitude of Hc is  $90^\circ - 32^\circ 26.5' = 57^\circ 33.5' = 3453.5\text{nm}$  from the GP.*

Ho	32° 28.0’	Co-Alt	57° 32.0’	Distance from GP (radius of COP)	3452.0nm
Hc	<u>32° 26.5’</u>	Co-Alt	<u>57° 33.5’</u>	Distance from GP (radius of COP)	<u>3453.5nm</u>
Diff	01.5’		01.5’		01.5nm

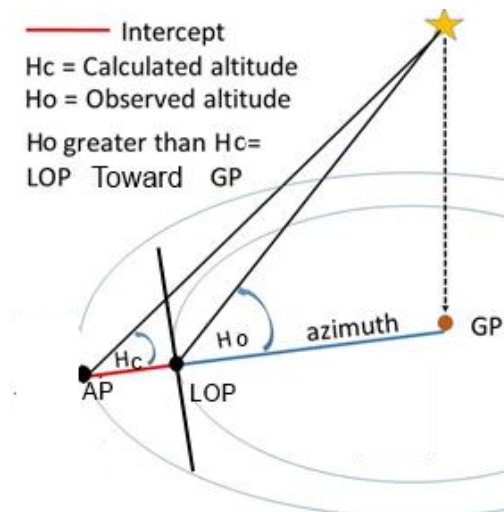
Notice the same answer of 01.5 is achieved whether we compare Ho to Hc, Co-Altitude to Co-Altitude, or Co-Altitude distance to Co-Altitude distance. No matter which calculation is chosen, the result is 01.5nm. Notice also that we arrive at the 01.5nm difference just by comparing Ho to Hc, so we can determine the Intercept by that method alone and ignore the other calculations. This is the mathematical solution that eliminates the need to plot huge Circles of Position. We have determined that *had* we drawn the two huge COPs they would have created two arcs in our vicinity with 01.5nm separation between them. This phenomenon was first discovered by the French navigator Marcq de St. Hilaire in the 1870’s and has become known as the **Altitude-Intercept method** of sight reduction.

Also note that, in this example, Ho is *greater* than Hc and that the Co-Ho distance from the GP is *less* than the Co-Hc distance from GP. If Ho is greater than Hc the mariner’s position must be plotted closer to (*toward*) the GP from the reference position. If Ho were less than Hc the mariner’s position must be plotted farther *away* from the GP than the reference position.

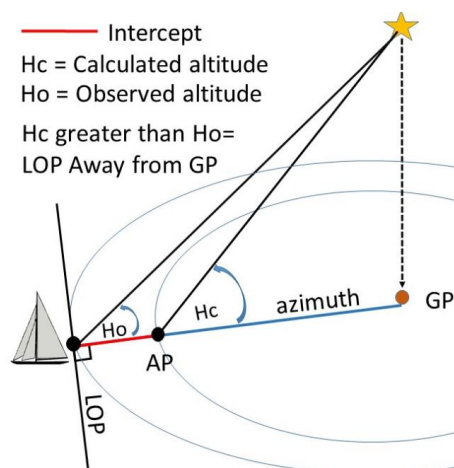
*How do we know if we need to plot TOWARD the GP or AWAY from the GP? Find a ceiling light or fan in your home. Stand near a wall and point at the light or fan. Step toward the light or fan while*

continuing to point. See how you have to raise your arm to a greater angle as you near the light or fan? The nearer you are to the spot directly below the light or fan the greater the angle. So, if  $H_o$  is greater than  $H_c$  we must have been closer (toward) to the GP at the time of the sight than the reference position. If  $H_o < H_c$  we must have been farther away. It's that simple.

The following figure illustrates an example where  $H_o > H_c$ . AP is the reference position chosen, the Intercept is the difference in nautical miles, between  $H_o$  &  $H_c$ , and LOP is the resultant Line of Position that is plotted at  $90^\circ$  to the azimuth to the GP. The LOP is the line the mariner must have been on at the time of the sighting and is actually a small segment of the COP from the GP. It can be drawn as a straight line because the circle is so large. The ship's position at the time of the sight is where the azimuth to the GP and the segment of the  $H_o$  COP intersect. The vessel's estimated position is where the LOP and azimuth intersect.



The next figure illustrates an example where  $H_o < H_c$ . Again, the AP is the reference position chosen, the Intercept is the difference in nautical miles between  $H_o$  &  $H_c$ , and LOP is the resultant Line of Position that is plotted at  $90^\circ$  to the azimuth to the GP. The LOP is the line the mariner must have been on at the time of the sighting. The ship's position at the time of the sight is where the azimuth to the GP and the segment of the  $H_o$  COP intersect. As can be readily seen in the figure, the vessel's position is "Away" from the AP (GP) by the Intercept distance.

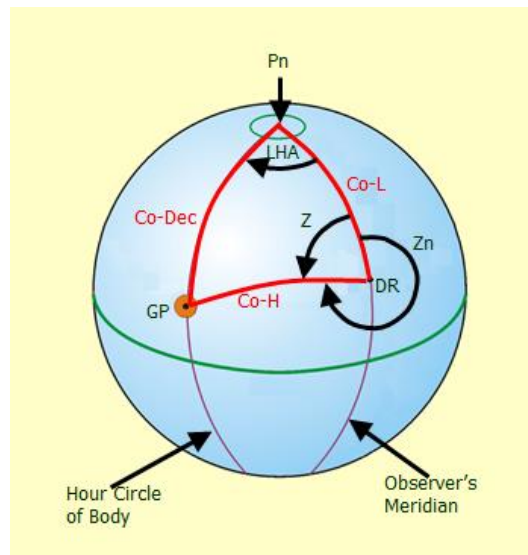


This important observation creates a plotting rule:

**$H_o > H_c$  = "Toward";  $H_o < H_c$  = "Away".**

**Concept #6:** The Navigational Triangle. The narrative above has, I hope, raised a significant question: “How did we arrive at a calculated altitude (Hc) used to achieve the resultant Intercept?” The answer is, by solving the Navigational Triangle, commonly referred to as the process of *Sight Reduction*. The Navigational Triangle is a large spherical triangle and the Law of Cosines formulas we’ll use to solve it will ensure an accurate solution.

The three vertices of the Navigational Triangle are: 1) The reference (or DR) position chosen. 2) The “elevated” pole; the pole of the Earth nearest the mariner’s location. 3) The Geographical Position (GP) of the celestial body, determined from Nautical Almanac data extracted based on the body observed. The figure below shows the Navigational Triangle in action. Study it closely.



The sides of the triangle are **Co-L** (90 – latitude of the reference position); **Co-Dec** (90 – declination of the celestial body). Declination is the term used in the almanac to describe a celestial body’s latitude above or below the celestial equator and is recorded in the almanac, and **Co-H** the Co-Altitude of the altitude we’ll calculate (Hc). Co-L is an easily determined value. Co-Dec is also an easily determined value (derived from almanac data). Co-H is the unknown side and the value for which we are solving.

The longitude of the reference position is also known and the “Hour Circle of Body” (derived from the almanac data) provides the longitude of the body’s GP. The difference in longitude between the DR and the GP is called the *Local Hour Angle* (LHA), always measured westerly, and is also easily calculated by comparing the two longitudes. We now have a triangle with two known sides and an angle between two sides and that is enough information to solve for the unknown side.

We’ll also solve for angle Z and, from that angle, we can deduce angle Zn. Zn is the true azimuth (measured from True North) from the reference position to the GP of the body. Look closely at the figure above and you’ll see that, in this case,  $Z_n = 360^\circ - Z$ .

We mathematically solve the navigational triangle using the Law of Cosines formulas below:

$$\sin Hc = (\cos LHA * \cos Lat * \cos Dec) + (\sin Lat * \sin Dec)$$

$$\cos Z = (\sin Dec - (\sin Lat * \sin Hc)) \div (\cos Lat * \cos Hc)$$

Although these formulas may look intimidating, using them is straight-forward; we just place the appropriate values into the formulas using a scientific calculator and let it do the work.

When using these formulas we must follow another rule:

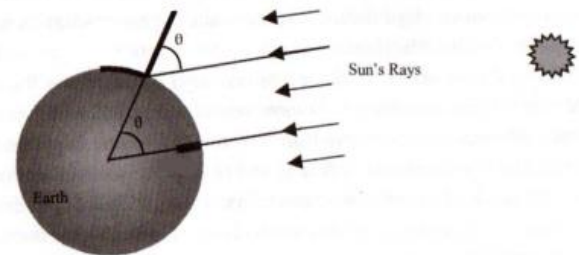
*Latitude (North or South) is always entered as a positive value; declination is entered as positive if it has the same name as latitude (both North or both South), negative otherwise.*

The results of the calculations provide the calculated altitude ( $H_c$ ) which is then compared to  $H_o$  to determine the Intercept and angle  $Z$  which is used to determine the true azimuth ( $Z_n$ ) from the DR to the celestial body's GP. We can then plot the reference position on a Constant Latitude Scale Small Area Plotting Sheet (CLS SAPS) and plot the intercept along azimuth  $Z_n$  either "Toward" the GP or "Away" from the GP as indicated by the rule  $H_o > H_c = \text{Toward}$  or  $H_o < H_c = \text{Away}$ . The point plotted is an Estimated Position (EP). It is an EP because it is the result of only a single sight. If we took a sight on a second celestial body within 20 minutes of the first sight then solved and plotted the second sight we could establish a "fix" of our position; provided that the longitudinal separation of the bodies were large enough to create a "good" crossing angle of the resulting Lines of Position (LOPs).

## The Concepts at Work

Because the Earth is rotating at 900 knots ( $15^\circ$  per hour  $\times$  60nm per degree = 900), the recording of the precise time of observation is vitally important and allows the appropriate nautical almanac data to be extracted for the precise time recorded.

The light rays from the celestial bodies travel to the Earth essentially, as parallel rays as shown in the figure at right. The task of the celestial navigator is to determine the angle between the light rays and vertical at the navigator's location (angle  $\phi$  in the figure). For a mariner aboard a moving vessel with no vertical



reference, this angle proves too difficult to measure. To overcome this dilemma, the navigator instead measures the altitude angle from the horizon to the body and then by subtracting the angle measured from  $90^\circ$  determines the Co-Altitude, which is the angle of interest ( $\phi$ ). Learning the Co-Altitude provides the mariner with the distance between the navigator's location and the celestial body's GP, creating a huge Circle of Position which is then compared to a "reference sight" distance, once the reference sight is reduced by extracting appropriate data from the nautical almanac and, after some arithmetic is performed, the navigator's position is determined from the result.

## Use of the Nautical Almanac

As stated earlier, the almanac is published yearly and the mariner must have possession of the almanac for the current year in order to accurately determine his/her position. For the following explanation, any edition of the almanac may be used. If one is not available, you can click on "[online nautical almanac<sup>2</sup>](#)" to download a pdf version and use it to follow along. Note, however, the *Increment and Corrections* pages (explained below) and some other printed almanac data are not shown in the online version and the layout and values may differ slightly from the printed almanac.

The following page is an example that shows the left-hand and right-hand daily pages of the Nautical Almanac for April 9, 10, & 11 of 2004.

<sup>2</sup> <https://thenauticalalmanac.com/2017%20Nautical%20Almanac.pdf>

Table with columns for UT, Planets (ARIES, VENUS, MARS, JUPITER, SATURN), and STARS. Includes sub-tables for GHA, Dec, and Name/SHA/Dec. Includes a Mer. Pass table at the bottom.

Table with columns for UT, SUN, MOON, and Moonrise. Includes sub-tables for GHA, Dec, HP, and Moonrise times. Includes a Mer. Pass table at the bottom.

These pages are called the “Daily pages”. Note that 3 days are covered across both the left and right-hand daily pages. The left-hand daily page tabulates Greenwich Hour Angle (GHA) for each whole hour UT of Aries (explained later), the GHA and Declination of the navigational planets, and alphabetically lists data for 57 navigational stars. GHA is the hourly longitudinal position of the celestial bodies measured *westerly* from the Greenwich Meridian through 360°. The bottom of the left-hand page also shows the time of local time zone central meridian passage of Aries and the planets, and the *v* and *d* values used to determine small corrections to be applied to your sight based on minutes and seconds of your sight time.

The right-hand daily page tabulates hourly UT data for the Sun and Moon and solar phenomena of Twilight times, Sunrise, Sunset, Moonrise, and Moonset at various latitudes. On the lower right of the right-hand page the Equation of Time (shaded if the apparent Sun is later than the mean Sun, clear otherwise), Time of the Sun’s meridian passage (noon at your local time zone’s central meridian), and Moon data are listed for each of the three days covered. This 3 day UT hourly tabulated format continues throughout the entire year of the almanac.

Mariners may take sextant sightings at any convenient time, not just on the hour. So, the almanac also contains a set of *Increments and Corrections* pages (pages ii to xxxi) (not available in the online almanac) near the back of the almanac. These pages list the incremental change in GHA for Sun & Planets, Aries, and Moon for each second of each minute within an hour. Also listed within each minute are the *v* or *d corr* which are small corrections to GHA (*v*) and declination (*d*) that may be required to be applied to your sextant sighting. The *Increments and Corrections* pages remain unchanged year to year and are the same regardless of the edition of the almanac you may have.

Twilight times are periods of incomplete darkness when it may be possible to view stars and planets and still be able to discern the horizon. The midpoint for optimal sights of the stars and planets is the beginning of Civil Twilight in the morning and the end of Civil Twilight in the evening.

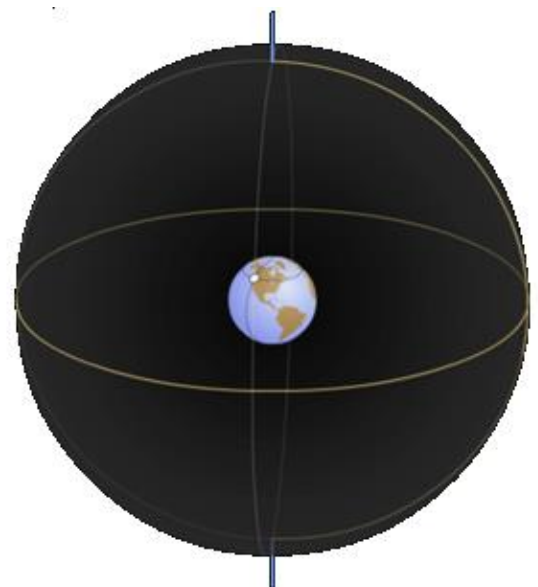
The Nautical Almanac contains a plethora of other celestial related data and you can learn much by browsing but, that is another topic and will not cover here.

## Celestial Bodies and Their Geographical Position (GP)

### The Celestial Sphere

The mariner’s view of the cosmos for celestial navigation imagines a huge transparent celestial sphere, like a bubble, with the Earth at its center as shown in the figure at right. The celestial sphere is our star map where the fixed stars and moving planets are mapped on the inside of this sphere like a planetarium.

We realize that the stars and planets have a three-dimensional location in space, but for the purposes of navigation, we only need to know their direction and altitude in the sky. We are located on the Earth’s surface inside of the sphere looking out. The celestial sphere has an equatorial plane called the Celestial Equator, it is the Earth’s

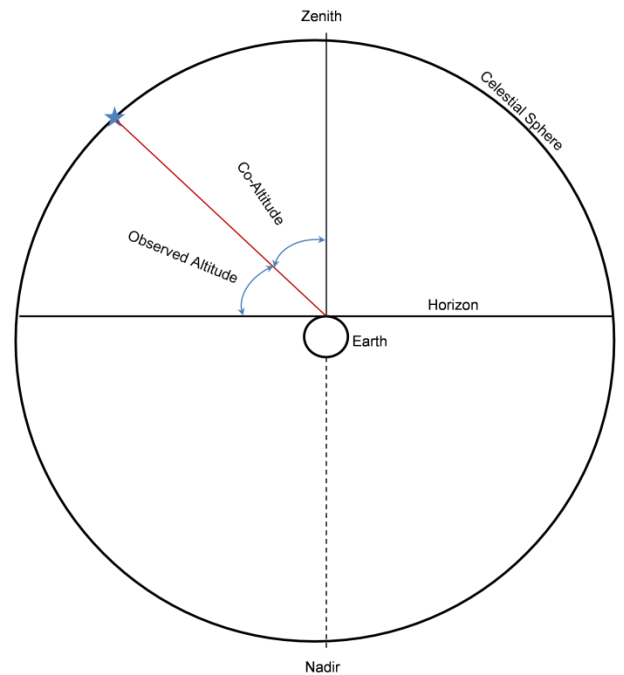


equator projected outward onto the sphere. The Earth's poles are also extended to the sphere as north and south celestial poles. The sphere does not spin. It is fixed in space while the Earth rotates inside it.

When we take a sextant sight of a celestial body to measure the altitude of the body, we imagine a line passing through our body, head to toe, extending to the celestial sphere. The spot directly over our head on the sphere is called the *zenith* and the spot directly below our feet is the *nadir*. This, along with the horizon, aids us in creating a triangle that we can use to determine other values.

The figure at right depicts a 2D graphical representation of a sextant sight. Note the Zenith to Horizon angle is  $90^\circ$  and the Observed Altitude measured plus the Co-Altitude span the entire  $90^\circ$ . We record the sextant observation data and the Co-Altitude tells us the distance from the GP of the body.

For example, if we measured an observed altitude of  $50^\circ$ , the Co-Altitude would be  $90^\circ - 50^\circ = 40^\circ$  and  $40^\circ$  at 60 nm per degree = 2400 nm distant from the Geographical Position (GP) of the body. Again, the Geographical Position of the body is a point on the Earth's surface where a line connecting the Earth's center to the celestial body passes through the Earth's surface.



## What is Aries, and How Does It Relate to Celestial Bodies?

### The Seasons

Each year as the Earth revolves around the Sun we experience the four seasons. Each season begins at the time of either an equinox or a solstice. A solstice begins the Northern Hemisphere summer ~June 21<sup>st</sup> when the declination of the Sun's GP is  $\sim 23.5^\circ$  north of the equator at the Tropic of Cancer. Another solstice begins the Northern Hemisphere winter ~December 21<sup>st</sup> when the declination of the Sun's GP is  $\sim 23.5^\circ$  south of the equator at the Tropic of Capricorn. Equinoxes begin the Northern Hemisphere spring and fall when the declination of the Sun's GP is at  $0.0^\circ$  on the equator. The Vernal Equinox occurs ~ March 21<sup>st</sup> and the Autumnal Equinox occurs ~ September 21<sup>st</sup> each year. Again, because the Earth's actual movement is not constant, dates of solstices and equinoxes may vary between the 20<sup>th</sup> to the 22<sup>nd</sup> of the months indicated.

Return to page 14 and take another look at the image of the Celestial Sphere. Now imagine in your mind's eye, the stars on the sphere as if you were viewing a planetarium and gazing at a sky full of stars. From Earth, the stars appear fixed in position on the sphere which is why you can see the same constellations year after year that move as the Earth rotates.

With the planetarium image in mind think of how you might identify the precise location of each visible star in the sky. Based on your learning so far you might think of measuring GHA and Declination as we did with the Sun and planets and you would be correct! Now think again, how many stars do you

see? Imagine if you will, compiling an almanac with a column for each star recording the GHA & Declination for each hour of each day for a year. How many columns would it have and how many pages long would it be? Could you conveniently carry it around?

The solution to this dilemma is straightforward. Because the stars seem fixed in the sky, we choose a single “start point” on the sphere and measure each star’s longitudinal position from that point and measure each star’s declination above or below the Celestial Equator normally. But what start point do we use? Enter *Aries* or also called the “*First Point of Aries*”!

Aries is the Vernal Equinox (March) when the Sun’s GP is on the equator and the Sun’s declination is 0.0°, projected onto the celestial sphere. It is used as the start (zero) point to measure each star’s longitudinal position on the sphere. The longitudinal position, from Aries to each star is called the star’s Sidereal Hour Angle (SHA). Each star’s declination north or south of the celestial equator has been measured and recorded normally. Declination of each star changes very slowly over time eliminating the need to record declination for each hour. If you select a star from the list on a left-hand page of the almanac for a specific date then look for that star’s declination in later pages you’ll see the slow declination change for yourself.

Open your almanac to any date daily page and look on the right side of the left-hand page. Here you’ll find an alphabetical listing of 57 stars chosen for navigation due to their distribution across the sky and their brightness making them visible to the naked eye. Note that each star listed has a SHA and declination recorded. Also, on the left side of the left-hand page is a column showing GHA Aries. There is no declination recorded because Aries is not a visible body and is always on the equator.

The GHA of a star is found using the formula  **$GHA\ Star = GHA\ Aries + SHA\ star$**  ( $\pm 360^\circ$  as may be necessary). Here’s how that is accomplished.

A sextant sighting is taken of the star Deneb on February 12, 2017, at 18-00-30 from a DR position of 47° 24.0’N 122° 20.1’W. What would be Deneb’s GHA? First, convert 18-00-30 12 Feb to UT. The time zone of Lo 122° 20.1’W becomes  $122.335^\circ / 15 = 8.1556$  rounded to 8. The DR is west of Greenwich so 8 hours must be added to get UT. 18-00-30 becomes 26-00-30 12 Feb. There is no hour 26 so, subtract 24 hours and add 1 day; the UT is 02-00-30 13 Feb.

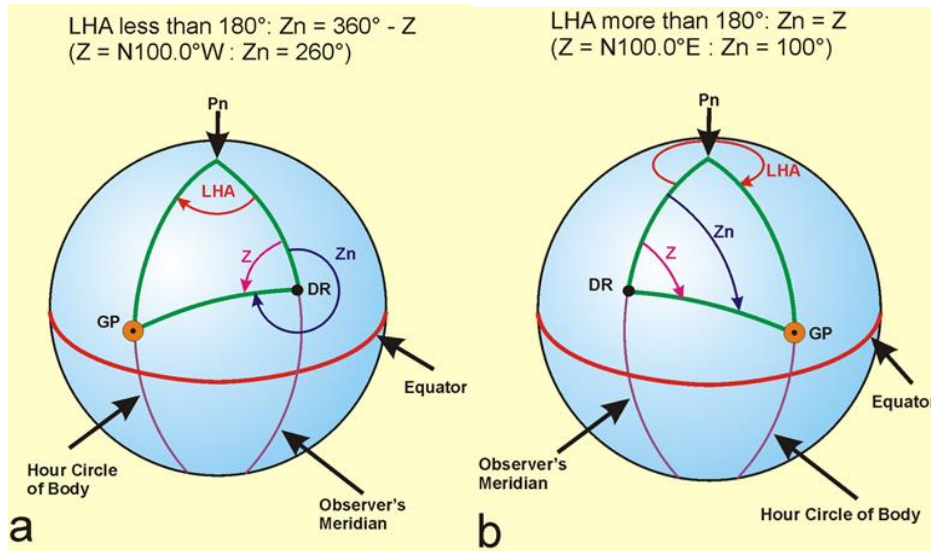
From the almanac, for 13 Feb extract the SHA Deneb of 49° 30.2’ and for hour 02, add GHA Aries of 173° 18.1’ then add to that 0° 07.5’ from the Aries column of the *Increments and Corrections* page for minute 0 second 30. The Total GHA becomes 222° 55.8’. Deneb’s longitudinal position at 02-00-30 on 13 Feb is 222° 55.8’ west of the Greenwich meridian at a declination (latitude) of 45° 20.5’ N. We have precisely located the GP of Deneb at the time of the sextant sight.

## The Navigational Triangle: Possible Orientations

Now take a closer look at the navigational triangle to gain a better understanding. The navigational triangle can have different orientations based on whether the DR is in the Northern or Southern Hemisphere and whether the celestial body viewed is east or west of the DR, as shown in the figures below. The orientation will determine the correct method of determining the true azimuth ( $Z_n$ ) from the DR to the GP based on the result of the Law of Cosines formula for angle Z.

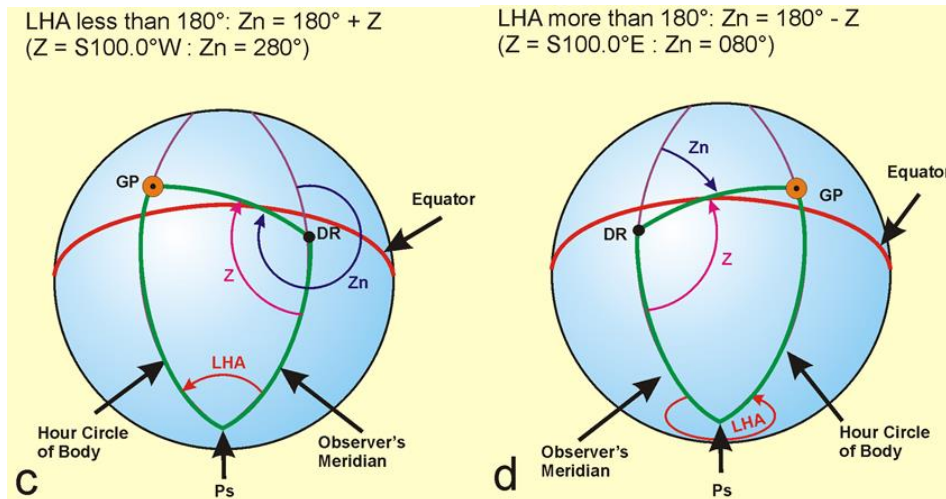


## North Latitude



In North latitude, the azimuth  $Z_n$  is determined by either  $Z_n = 360^\circ - Z$  or  $Z_n = Z$  depending upon whether the GP is west of the observer when LHA is  $< 180^\circ$  or east of the observer when LHA is  $> 180^\circ$ . The azimuth  $Z$  is labeled N XXX.X W when the latitude of the DR is north and the GP lies west of the DR or N XXX.X E when the latitude of the DR is north and the GP lies east of the DR.

## South Latitude



In South latitude, the azimuth  $Z_n$  is determined by either  $Z_n = 180^\circ + Z$  or  $Z_n = 180^\circ - Z$  depending upon whether the GP is west of the observer when LHA is  $< 180^\circ$  or east of the observer when LHA is  $> 180^\circ$ . The azimuth  $Z$  is labeled S XXX.X W when the DR latitude is south and the GP lies west of the DR or S XXX.X E when the DR latitude is south and the GP lies east of the DR.

## The Navigational Triangle: Solving for Unknowns - the Law of Cosines

A Sighting of the Sun at Meridian Passage or Transit – A Noon Sight for Latitude


When taking a sextant sighting, a mariner collects and records data about the sighting for later solving of the navigational triangle, called "*Sight Reduction*", to obtain position data. The data

recorded must be organized and categorized properly so, the mariner typically uses a “Sight Reduction form”. You can find one for download to follow along here [SR-96A](#)<sup>3</sup>.

Here’s how a sight is recorded and solved. Example #1:

*On January 5, 2017, from a DR position of 47° 24.0’N 122° 20.1’ W at watch time 12-14-59 a sight is taken on the lower limb of the Sun and a sextant altitude (Hs) of 19° 55.1’ is measured. The height of eye above sea level is 15 feet; sextant Index Error (IE) is 01.5’ off the arc. There is no watch error.*

Let us first dissect this example. The Sun is large and appears (when viewed using sextant Sun shades!) as a disk. To measure the altitude using a sextant, the operator must view the Sun and, using the sextant moveable arm (index arm), bring the reflected Sun down to the horizon such that either the bottom edge (Lower Limb) or top edge (Upper Limb) just touches on the visible horizon as shown at right.




Half Mirrored Field

At that moment, the operator calls “Mark” and an assistant records the watch time: seconds first, then minutes, then hours. The watch used may be fast or slow (determined beforehand) and if it is, watch error is also recorded. The observer then reads the sextant and records the altitude measured and the limb aligned (LL or UL).

When taking a sextant sight, the height of your eyes will be above sea level by your height plus the height of the platform upon which you are standing. The higher your eyes, the farther away the horizon appears. We must account for this “horizon error”, called “Dip of the Horizon” or just Dip for short. On the right-hand side of page A2 of the almanac is a Dip table that shows the correction required for various heights. Find the values that bracket your height and record the value shown. Or calculate it yourself using the formula:  $Dip\ correction = 0.97 * \sqrt{height\ in\ feet}$ . For example, if the height of your eye is 15 feet: the square root of 15 is 3.87; multiplied by 0.97 is 3.75 rounded to 3.8’. Dip correction is always negative and subtracts from your sextant measurement.

Also, sextants (particularly plastic sextants) may have “Index Error”. Index error is determined beforehand by setting the sextant to 0° 0.0’ and sighting the horizon then adjusting the micrometer drum such that both the viewed and reflected horizons align as shown at right. The sextant reading is the index error. The reading may be above zero (on the arc) or below zero (off the arc (60’ – reading)). If it is “on the arc” that amount must be subtracted from the sextant reading, if it is “off the arc”, add that amount to the sextant reading.



Half Mirrored Field

Now, back to the example: *On January 5, 2017, from a DR position of 47° 24.0’N 122° 20.1’ W at watch time 12-14-59 a sight is taken on the lower limb of the Sun and a sextant altitude (Hs) of 19° 55.1’ is measured. The height of eye above sea level is 15 feet; sextant Index Error (IE) is 01.5’ off the arc. There is no watch error.*

<sup>3</sup> <http://www.usps.org/eddept/n/downloads.htm#forms15>

**Step 1: The observed sight:** Record the date, time, watch error, the DR, the name of the body observed, the height of eye above sea level, the sextant measurement (Hs), and Index Error. Next, determine the observed altitude (Ho) of the sighting. That is done by first applying the Index Correction (IC) to the sextant measurement (Hs). IC is the opposite of IE; added if off the arc or subtracted if on the arc. Next, apply the Dip correction for the height of the eye horizon error. The result is called our apparent altitude (Ha). Using the Ha as the entering argument, enter the

ALTITUDE CORRECTION TABLES 10°-90°--SUN, STARS, PLANETS on page A2 of the almanac or the ALTITUDE CORRECTION TABLES 0°-10°--SUN, STARS, PLANETS on page A3 of the almanac. Follow down the column until Ha values are found that bracket the Ha value and extract the “Main” correction to add to Ha, if positive, or subtract from Ha, if negative. This main correction corrects for semi-diameter (we sighted the edge (LL or UL)), parallax, and refraction errors caused by viewing the celestial body through Earth’s atmosphere. The resulting

Time			Sight Data				Altitude	
Date	MM 01	DD 05	YYYY 2017	Sight No.	3		Ht of eye	15.0 feet
WT	HH 12	MM 14	SS 59	Body	Sun	LL	Hs	19 55.1
WE	WE Seconds	DST Y/N	N	DR L	47	24.0	Degrees	Min
				DR Lo	-122	-20.1		
							+	-
							IC	1.5
							Dip	XXXXX 3.8
							Total	1.5 3.8
							Corr (-)	0.0 2.3
							Ha	19 52.8
							HP C	
							+	-
							Main	13.6
							Add'l C, PL	
							UL C - 30.0'	XXXXX
							Add'l Ref	
							Total	13.6 0.0
							Corr (+)	13.6 0.0
							Ho	20 06.4

value is the observed altitude (Ho) and now the observed sighting is completed. The figure at right shows the “Observed Sight” data as recorded on the sight reduction form.

*Again, the process for determining the observed altitude (Ho) value is: Measure and record Hs using the sextant, correct Hs for IC & Dip to obtain Ha, extract the appropriate almanac correction based on Ha, and adding (if LL was sighted) or subtracting (if UL was sighted) the main correction to Ha to obtain the resulting Ho.*

**Step 2: The calculated sight:** Called “Sight Reduction”. This is done by first selecting a reference position, latitude and longitude. Many celestial navigation texts refer to this location as an “Assumed Position” but that is a misnomer, we are not assuming we are located there. It is just a location in our vicinity that is used as a reference. Typically the DR position is used, however, any location within 30’ of our DR will work. The reference position along with data extracted from the almanac about the celestial body is used to construct a *Navigational Triangle*. We’ll not actually create the triangle the scientific calculator will do that for us as we solve the Law of Cosines formula. The formula will calculate the altitude of the celestial body that would have measured if we were actually located at the reference position at the time of the sighting. Once we have calculated the altitude (Hc), we compare the altitude we observed (Ho) to the altitude calculated (Hc) to find the difference. The resulting difference tells us how far our location at the time of the sight was “offset” from the reference position but not the direction. Using the second Law of Cosines formula, the azimuth Z from the reference position to the GP of the body is calculated. The two Law of Cosines formulas are shown below.

$$\sin H_c = (\cos LHA * \cos Lat * \cos Dec) + (\sin Lat * \sin Dec)$$

$$\cos Z = (\sin Dec - (\sin Lat * \sin H_c)) / (\cos Lat * \cos H_c)$$

As can be seen in the 1<sup>st</sup> formula, the LHA, latitude of the reference position, and Declination are used to find the value of Hc. In the 2<sup>nd</sup> formula, declination, latitude, and Hc are used to solve for

angle Z. To solve the “Calculated Sight” local time must be converted to UT, LHA determined from longitude and GHA data from the almanac, and declination data extracted from the almanac.

The following figures show a completed Sight Reduction form SR-96a for the example.

Time				Sight Data				Altitude			
Date	MM	DD	YYYY	Sight No.				Ht of eye	15.0	feet	
WT	HH	MM	SS	Body	Sun	LL	LIMB	Hs	19	55.1	
WE	WE Seconds		DST Y/N	DR L	47	24.0	N	IC	1.5		
ZT	12	14	59	DR Lo	-122	-20.1	W	Dip	XXXXX	3.8	
ZD +	+ 8	W						Total	1.5	3.8	
UT	20	14	59					Corr( - )	0.0	2.3	
G Day/Mo	05	01	2017					Ha	19	52.8	
<b>ALMANAC - LHA</b>				<b>ALMANAC - Dec</b>				HP C			
SHA ☆				Dec	20	Hr	-22.0	-30.8	S	Main	13.6
GHA Sun	Degrees	Min		d( - )				Add'l C, PL			
20 hr	118	35.0		d corr( - )				UL C - 30.0'	XXXXX		
14 m 59 s	03	44.8		Dec S	-22	-30.7	S	Add'l Ref			
v( )								Total	13.6	0.0	
v corr( )								Corr( + )	13.6	0.0	
Total GHA	122	19.8						Ho	20	06.4	
DR Lo ( - )	-122	-20.1	W								
LHA	359	59.7	E								


**Step 1: The observed sight:** At the time of the sighting, record the precise date and time of the sight and any watch error, the Sight Data as shown, the Altitude Hs measured, the height of eye, and index correction. Then apply IC and Dip corrections to Hs to arrive at Ha. Use the Ha value and enter the almanac (page A2) to find the Main correction and apply to Ha to obtain Ho.

**Step 2: The calculated sight:** Convert the local time of the sight to UT for extracting almanac data to locate the GP of the celestial body at the time of the sight. Open the almanac to the date of the sight and extract the GHA of the body at the whole hour of UT. Using the minutes and seconds of the sight, enter the *Increments and Corrections* pages and extract the appropriate change in GHA corresponding to the minutes and seconds and add that to the whole hour GHA extracted earlier to arrive at Total GHA. Then combine the Total GHA with the reference position longitude (subtract if west, add if east ( $\pm 360$  if necessary)) to determine Local Hour Angle (LHA).

Return to the daily page and extract the declination (N or S) of the body at the whole hour and the d value at the bottom of the column. Record the whole hour declination and return to the same minutes and seconds page of the *Increments and Corrections* pages used earlier. In the *v* or *d corr* column find the *d* value taken from the daily page and extract the correction from the *corr* column. We need to know if this correction is added or subtracted. Return to the daily page and look at the declination of the body for the next whole hour of UT. If the declination is increasing, either further N or further S, add the correction, otherwise, subtract the correction to arrive at Total Declination.

The LHA depicts the longitudinal position of the GP relative to the reference position longitude and the Total Declination depicts the latitude of the GP at the time of the sight. We now have the values required for solving the Law of Cosines formulas. This example shows a noon sight (also called

Meridian Transit) and you may have noticed that the Navigational Triangle has collapsed. The LHA of 359° 59.7' places the GP of the Sun only 0.3' from our longitude. For all intents, the elevated pole, our reference position, and the GP of the Sun are all on the same meridian of longitude! We have a straight N-S line, not a triangle. That's OK, we can still solve, in fact, it makes it easier to solve. The results (bottom portion of the SR-96a) for the example are shown below. Note that we convert the values of LHA, Latitude, and Declination to 5-decimal place decimal degrees for accuracy before inserting the values into the formulas.

Intercept and Azimuth by the Law of Cosines for Sides					
LHA	359	59.7	----->	LHA	359.99500 °
Lat N	47	24.0	----->	Lat ( + )	47.40000 °
Dec S	-22	-30.7	----->	Dec ( - )	-22.51167 °
$H_c = \text{ASIN}[(\text{COS}(\text{LHA}) * \text{COS}(\text{Lat}) * \text{COS}(\text{Dec})) + (\text{SIN}(\text{Lat}) * \text{SIN}(\text{Dec}))]$					
$Z = \text{ACOS}[(\text{SIN}(\text{Dec}) - (\text{SIN}(\text{Lat}) * \text{SIN}(\text{Hc})) \div (\text{COS}(\text{Lat}) * \text{COS}(\text{Hc}))]$					
Hc	20.08833	=	20°	05.3	' 
Ho	20.10667	=	20°	06.4	'
<b>Intercept-&gt; 1.1 nm TOWARD</b>					
Z----->	180.0	=	179	59'	N 180° E
Zn----->	180° True				

Note the true azimuth (DR to GP) Zn is 180° True. Compare the reference position latitude to the Sun's declination and knowing that they are positioned on the same meridian an azimuth of 180° should make sense. The Sun is directly south of the reference position. Also, compare the values of Ho and Hc. In this case, Ho > Hc by 1.1' and is labeled TOWARD. This means that at the time of the sight we were located 1.1' (nm) closer to the GP than the reference position is located.

### A Star Sight

How do we solve a star sighting? Let's continue with the Deneb example from above. Example #2:


*A sextant sighting is taken of the star Deneb on February 12, 2017, at 18-00-30 from a DR position of 47° 24.0'N 122° 20.1'W. Sextant altitude is 25° 57.5'; height of eye is 15 feet; IE is 01.5' off the arc; there is no watch error.*

At right is the SR-96a:

Apply the Dip of -3.8' and our IC of +01.5'

Time				Sight Data				Altitude						
Date	MM	DD	YYYY	Sight No.				Ht of eye	15.0	feet				
WT	HH	MM	SS	Body	Deneb			Degrees		Min				
WE	WE Seconds			DST Y/N	Degrees			Min						
ZT	18	0	30	DR L	47	24.0	N							
ZD +	+8	W		DR Lo	-122	-20.1	W							
UT	02	0	30											
G Day/Mo	13	02	2017											
ALMANAC - LHA				ALMANAC - Dec				HP C						
SHA	49	30.2		Degrees		Min								
GHA Aries	Degrees		Min	Dec 2 Hr	45.0	20.5	N							
2 hr	173		18.1	d ( )										
0 m 30 s	0		07.5	d corr( )										
v ( )	0.0			Dec N	45	20.5	N							
v corr( )	0.0													
Total GHA	222		55.8											
DR Lo ( - )	-122		-20.1	W										
LHA	100		35.7	W										
								Main		+ -		02.0		
								Add'l C, PL						
								UL C - 30.0'		XXXXX				
								Add'l Ref						
								Total		0.0		2.0		
								Corr( - )		0.0		2.0		
								Ho		25		53.2		

to Hs of 25° 57.5' to arrive at a Ha of 25° 55.2'. Turn to page A2 of the almanac using Ha as the entering argument in the STARS AND PLANETS column and extract the main correction of -2.0' and apply that correction to Ha to arrive at a Ho of 25° 53.2'. Record SHA Deneb, GHA Aries, and the correction to Aries for 30 seconds as we did above for a Total GHA of 222° 55.8'. Then combine Total GHA with the reference position longitude (subtract if west; add if east) for an LHA of 100° 35.7'. Record the declination of Deneb of 45° 20.5'N from the daily page (there is no v or d correction for stars). Now execute the Law of Cosines formulas, as shown below, to arrive at angle Z of N 50.2° W yielding a Zn of 310° True (360° - Z) and Hc of 25° 51.4'. The intercept (comparing Ho to Hc) is 1.8 nm Toward (Ho > Hc). Plot the reference position and then mark the Estimated Position along Zn at a point 1.8 nm toward the GP from the reference position. To plot a fix of position we would need to take a sight on a second celestial body (~30° or greater separating the two (90° ideal)) within 20 minutes of our 1<sup>st</sup> sight and solve and plot both results to obtain a fix.

Intercept and Azimuth by the Law of Cosines for Sides					
LHA	100	35.7	----->	LHA	100.59500 °
Lat N	47	24.0	----->	Lat ( + )	47.40000 °
Dec N	45	20.5	----->	Dec ( + )	45.34167 °
$Hc = \text{ASIN}[(\text{COS}(\text{LHA}) * \text{COS}(\text{Lat}) * \text{COS}(\text{Dec})) + (\text{SIN}(\text{Lat}) * \text{SIN}(\text{Dec}))]$					
$Z = \text{ACOS}[(\text{SIN}(\text{Dec}) - (\text{SIN}(\text{Lat}) * \text{SIN}(\text{Hc})) + (\text{COS}(\text{Lat}) * \text{COS}(\text{Hc}))]$					
Hc	25.85644	=	25°	51.4	'
Ho	25.88667	=	25°	53.2	'
					
Intercept->	1.8	nm	TOWARD		
Z----->	50.2	=	050°	9'	N 50.2° W
Zn----->	310°	True			

## The Planets

Unlike the fixed stars, the planets move among the stars throughout the year. This makes locating planets that may be visible for sights a bit more challenging. The chart on page 9 of the almanac shows the LOCAL MEAN TIME OF MERIDIAN PASSAGE of the planets throughout the year. The narrative on page 8 is helpful in deciphering the chart. To interpret the chart, for the Northern Hemisphere (turn the chart upside down for the Southern Hemisphere and directions are opposite), is to set the (2017) almanac in front of you in portrait orientation (have the sun shaded area going directly away from you; you are facing south); East is to the left and West is to the right. Now imagine it is noon on the 20th of July. From the chart, you can see that Venus is to the right (west) of the Sun so it sets before the Sun and therefore will not be available at evening twilight but may be available at morning twilight as it rises before the Sun.

Jupiter is East of the Sun so it sets well after the Sun as it crosses your meridian at ~1700, five hours (75°) after the Sun so will be available at evening twilight in the SW.

Saturn is also East of the Sun (and East of Jupiter) and crosses your meridian ~2145 so it may be available at evening twilight to the SE as it is well after the Sun.

If you could roll this diagram into a tube along the Sun axis, and rotate it westerly, the planet actions become even easier to imagine.

Note that Mercury is shown on the chart but is too close to the Sun most of the time to be of use to the navigator. It is included in the chart so the navigator can determine when it is in conjunction with other planets (where their tracks cross) and can eliminate the possibility of confusion of the sight between Mercury and the planet of interest.

Another way to help locate planets is to use the SHA and LMT of meridian passage of each planet that is shown on the lower right of the left-hand daily page of the almanac. Planets whose meridian passage time is more than an hour away from the Sun's meridian passage time are potentially visible during morning or evening twilight. If a planet's meridian passage is earlier than the Sun's, the planet will set ahead of the Sun and will not be visible after sunset but may be available before sunrise. If a planet's meridian passage is near midnight it rises near sunset and will be visible all night.

The altitude of the planet (any celestial body) is a function of (the planet's) declination and your latitude. Altitude at meridian passage (Transit) can be predicted with the following formula:

$$\text{Altitude at MT} = \text{Co-Latitude} \pm \text{Declination}$$

Where Co-Latitude is  $90^\circ - \text{your latitude}$  and declination are added if declination and co-latitude have the same name (both north or both south), subtracted otherwise. Co-Latitude is north if the body's GP is south of the observer. Knowing this altitude can assist you in estimating when the planet will rise or set and whether it may be available for morning or evening twilight.

Here's an example of a planet sight. Example #3


*On February 15, 2017, from a DR position of  $47^\circ 24.0'N$   $122^\circ 20.1'W$  at 18-05-00, a sight of Mars is taken. The height of the eye is 15 feet; IE is 01.5' off the arc; Hs is  $34^\circ 41.5'$ ; there is no watch error.*

Here's the completed SR-96a:

Time				Sight Data				Altitude			
Date	MM	DD	YYYY	Sight No.				Ht of eye	15.0 feet		
WT	HH	MM	SS	Body	LIMB			Degrees		Min	
	18	5	0	Mars				Hs	34	41.5	
WE	WE Seconds		DST Y/N	DR L	Degrees	Min					
			N	47	24.0	N					
ZT	18	05	0	DR Lo	-122	-20.1	W	IC	1.5		
ZD +	+ 8	W						Dip	XXXXX	3.8	
UT	02	05	0					Total	1.5	3.8	
G Day/Mo	16	02	2017					Corr (-)	0.0	2.3	
ALMANAC - LHA				ALMANAC - Dec				Ha	34	39.2	
SHA ☆				Degrees		Min		HP C			
GHA Mars	Degrees	Min		Dec 2_Hr	05.0	22.6	N	Main		01.4	
2 hr	163	19.5		d( + )	0.7			Add'l C, PL	0.1		
5 m 0 s	01	15.0		d corr( + )	0.1			UL C - 30.0'	XXXXX		
v( + )	0.8			Dec N	5	22.7	N	Add'l Ref			
	v corr( + )	0.1						Total	0.1	1.4	
Total GHA	164	34.6						Corr (-)	0.0	1.3	
DR Lo (-)	-122	-20.1						Ho	34	37.9	
LHA	042	14.5									

To increase your proficiency, print a blank SR-96a and, using an almanac and following the details shown in previous examples, try solving this sight. It's fine if you need to refer back often, just give it a try. If you do not have a current almanac, you can use the one you have for practice, keeping in mind the extracted data will not match precisely.

Here's the Mars Sight Reduction solution:

Intercept and Azimuth by the Law of Cosines for Sides					
LHA	42	14.5	----->	LHA	42.24167 °
Lat N	47	24.0	----->	Lat ( + )	47.40000 °
Dec N	05	22.7	----->	Dec ( + )	5.37833 °
$Hc = \text{ASIN}[(\text{COS}(\text{LHA}) * \text{COS}(\text{Lat}) * \text{COS}(\text{Dec})) + (\text{SIN}(\text{Lat}) * \text{SIN}(\text{Dec}))]$					
$Z = \text{ACOS}[(\text{SIN}(\text{Dec}) - (\text{SIN}(\text{Lat}) * \text{SIN}(\text{Hc})) + (\text{COS}(\text{Lat}) * \text{COS}(\text{Hc}))]$					
Hc	34.60334	=	34°	36.2	'
Ho	34.63167	=	34°	37.9	'
					
Intercept->	1.7	nm	TOWARD		
Z----->	125.6	=	125	35'	N 125.6° W
Zn----->	234	° True			

You may also find it interesting to note the mathematical relationship of sines to cosines used by the formulas. We learned in the Navigational Triangle that we are solving for the Co-H side, yet the 1<sup>st</sup> formula results in the Sine of Hc. In the solution above, Hc is 34° 36.2' or 34.60333°. The Co-Altitude (Co-H) is then 90° - 34.60333° = 55.39667°.

Use your calculator cosine function to find the cos(55.39667°) and store the result. Now use your calculator's sin<sup>-1</sup> (ASin) function and using the cosine stored, find the resultant angle, sin<sup>-1</sup>(cosine 55.39667). Did you get (Hc) 34.60333°? The sine of an angle is equal to the cosine of the angle's complement! Sine 34.60333° = cosine 55.39667°. The formula really has solved for the cosine of Co-H but used the sin<sup>-1</sup> function to find its Hc complement.

## Summary

There are many topics and details to learn in order to solve for a position using Celestial Navigation however, they are not particularly difficult to learn and apply with a bit of persistence on your part.

Perhaps the easiest part of learning Celestial Navigation is the use of a sextant to take the "observed sight". Using the instruction manual, a friend with the knowledge, or by watching a "YouTube" video, and practicing, in less than an hour you'll be well on your way to becoming proficient!

The difficulty of celestial lies in the details of creating and solving the "reference or calculated sight" using data extracted from the Nautical Almanac, and the Law of Cosines formulas.

Using a sextant and the Law of Cosines formulas enables you to purchase and carry no more than a current Nautical Almanac and a scientific calculator. There is no need to purchase and carry volumes of tabulated, pre-calculated navigational triangle solutions used for sight reduction such as Pub (formerly H.O.) 229 - *Sight Reduction Tables for Marine Navigation* or Pub (formerly H.O.) 249 - *Sight Reduction Tables for Air Navigation*.



## Bibliography:

The American Practical Navigator by Nathaniel Bowditch  
Celestial Navigation in the GPS Age by John Karl  
Celestial Navigation in a Nutshell by Hewitt Schlereth  
Dutton's Navigation & Piloting by Elbert S. Maloney  
Marine Navigation Celestial and Electronic by Richard R. Hobbs  
The Primer of Navigation by George W. Mixer  
The USPS® Junior Navigation and Navigation student manuals past (pre 2006) and present editions.

## Image Credits:

Sextant page 1 – United States Power Squadrons®  
Time Zones page 4 – United States Power Squadrons®  
Angles & Complements pages 7 & 8 – Author  
Radar COP page 8 – Author  
Graphical COP's pages 10 & 11 – [www.blueplanetcruisingschool.com](http://www.blueplanetcruisingschool.com)  
Navigational Triangles pages 11, & 17 – United States Power Squadrons®  
Nautical Almanac Example page 13 – Author scan  
Celestial Sphere page 14 – the University of Nebraska-Lincoln - Astronomy  
Simplified Horizon Diagram page 15 – Author  
Sextant Views page 18 – United States Power Squadrons®  
Law of Cosines page 19 – Author  
Sight Reductions SR-96a pages 19, 20, 21, 22, 23, & 24 – Created in Excel® by the Author