



Cambridge IGCSE™

CANDIDATE
NAME

--

CENTRE
NUMBER

--	--	--	--	--

CANDIDATE
NUMBER

--	--	--	--



MATHEMATICS

0580/12

Paper 1 (Core)

February/March 2020

1 hour

You must answer on the question paper.

You will need: Geometrical instruments

INSTRUCTIONS

- Answer **all** questions.
- Use a black or dark blue pen. You may use an HB pencil for any diagrams or graphs.
- Write your name, centre number and candidate number in the boxes at the top of the page.
- Write your answer to each question in the space provided.
- Do **not** use an erasable pen or correction fluid.
- Do **not** write on any bar codes.
- You should use a calculator where appropriate.
- You may use tracing paper.
- You must show all necessary working clearly.
- Give non-exact numerical answers correct to 3 significant figures, or 1 decimal place for angles in degrees, unless a different level of accuracy is specified in the question.
- For π , use either your calculator value or 3.142.

INFORMATION

- The total mark for this paper is 56.
- The number of marks for each question or part question is shown in brackets [].

This document has **12** pages. Blank pages are indicated.


1 (a) Write 3.25 pm in the 24-hour clock.

..... [1]

(b) Work out the time 7 hours and 36 minutes before 13 26.

..... [1]

2



(a) Measure the length of the line AB in millimetres.

..... mm [1]

(b) AB is the diameter of a circle.

Draw this circle.

[2]

- 3 (a) The temperature on Monday was -7°C .
 The temperature on Tuesday was 5°C lower than on Monday.
 The temperature on Wednesday was 8°C higher than on Tuesday.

Find the temperature on Wednesday.

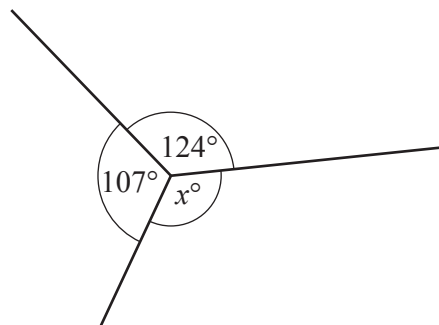
..... $^{\circ}\text{C}$ [2]

- (b) Kyra has a faulty thermometer.
 It always shows the temperature as 2°C higher than the actual temperature.
 The temperature on the thermometer is $T^{\circ}\text{C}$.

Write an expression, in terms of T , for the actual temperature.

..... $^{\circ}\text{C}$ [1]

4

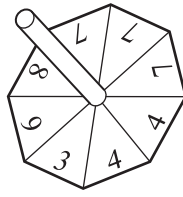


NOT TO
SCALE

Work out the value of x .
 Give a geometrical reason for your answer.

$x =$ because [2]

- 5 The diagram shows a fair 8-sided spinner.



The numbers on the spinner are 3, 4, 4, 7, 7, 7, 8 and 9.

- (a) The spinner is spun once.

Write down the probability that the spinner lands on

- (i) the number 7,

..... [1]

- (ii) a number greater than 2.

..... [1]

- (b) The spinner is spun 160 times.

Work out the expected number of times the spinner lands on the number 7.

..... [1]


- 6 The month of July has 31 days.

Calculate the number of seconds in the month of July.

..... seconds [2]

- 7 A cuboid has length 3 cm, width 2 cm and height 1 cm.

On the 1 cm^2 grid, draw a net of the cuboid.



[3]

- 8 (a) Write down the reciprocal of 40.

..... [1]

- (b) Calculate $\sqrt[3]{40}$.
Give your answer correct to 4 decimal places.

..... [2]

- (c) Write the number 40 in standard form.

..... [1]

- 9 (a) Write down the gradient of the line $y = 2x - 3$.

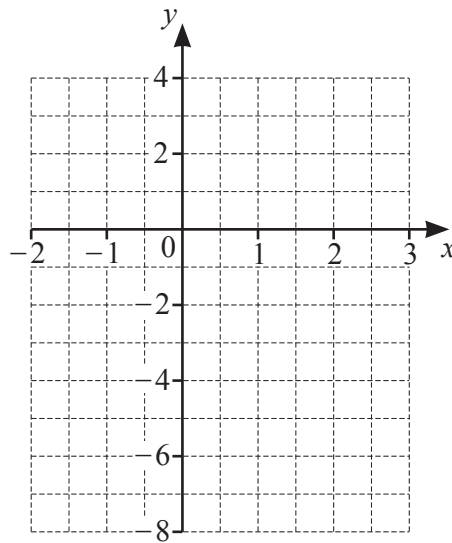
..... [1]

- (b) Complete the table of values for $y = 2x - 3$.

x	-2	0	3
y			

[2]

- (c) On the grid, draw the graph of $y = 2x - 3$ for $-2 \leq x \leq 3$.



[1]

- 10 Point A has coordinates $(6, 4)$ and point B has coordinates $(2, 7)$.

Write \vec{AB} as a column vector.

$$\vec{AB} = \begin{pmatrix} \\ \end{pmatrix} \quad [1]$$

- 11 The number of people swimming in a pool is recorded each day for 12 days.

24 28 13 38 15 26
 45 21 48 36 18 38

- (a) Complete the stem-and-leaf diagram.

1	
2	
3	
4	

Key: 1|3 represents 13 swimmers

[2]

- (b) Find the median number of swimmers.

..... [1]

- 12 A bag contains red marbles, green marbles and blue marbles only.
 The ratio of the number of marbles of each colour is

$$\text{red} : \text{green} : \text{blue} = 12 : 5 : 2.$$

There are 112 more red marbles than green marbles.

Work out the number of blue marbles.

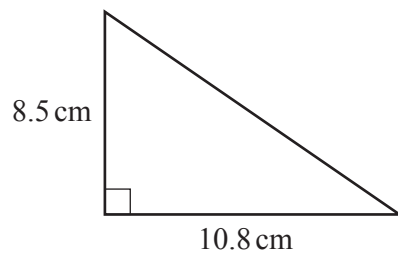
..... [2]

13 Without using a calculator, work out $\frac{15}{28} \div \frac{4}{7}$.

You must show all your working and give your answer as a fraction in its simplest form.

..... [3]

14



NOT TO
SCALE

The diagram shows a right-angled triangle.

(a) Calculate the area.

..... cm² [2]

(b) Calculate the perimeter.

..... cm [3]

- 15 Riya invests \$30 000 at a rate of 2.5% per year compound interest.

Calculate the value of her investment at the end of 7 years.
Give your answer correct to the nearest dollar.

\$ [3]

- 16 (a) Simplify.

$$5 \times x^0$$

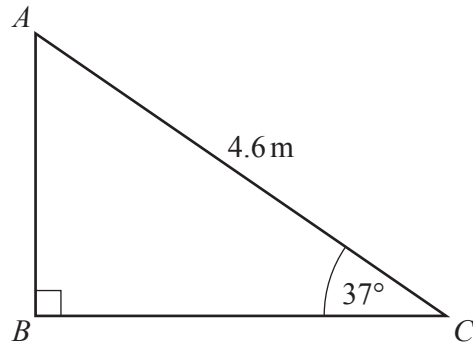
..... [1]

- (b) $9^{12} \div 9^w = 9^4$

Find the value of w .

$w =$ [1]

17



NOT TO SCALE

The diagram shows a right-angled triangle ABC .

Calculate AB .

$AB = \dots\dots\dots\text{ m}$ [2]

18 (a) Factorise completely.

$$3x^2 - 12xy$$

$\dots\dots\dots$ [2]

(b) Expand and simplify.

$$(m - 3)(m + 2)$$

$\dots\dots\dots$ [2]

- 19 A car travels at a constant speed of 45 kilometres per hour for 5 minutes.
Each wheel of the car has radius 25 centimetres.

Calculate the number of complete revolutions that a wheel makes during the 5 minutes.

..... [5]

BLANK PAGE

Permission to reproduce items where third-party owned material protected by copyright is included has been sought and cleared where possible. Every reasonable effort has been made by the publisher (UCLES) to trace copyright holders, but if any items requiring clearance have unwittingly been included, the publisher will be pleased to make amends at the earliest possible opportunity.

To avoid the issue of disclosure of answer-related information to candidates, all copyright acknowledgements are reproduced online in the Cambridge Assessment International Education Copyright Acknowledgements Booklet. This is produced for each series of examinations and is freely available to download at www.cambridgeinternational.org after the live examination series.

Cambridge Assessment International Education is part of the Cambridge Assessment Group. Cambridge Assessment is the brand name of the University of Cambridge Local Examinations Syndicate (UCLES), which itself is a department of the University of Cambridge.