

DAV PUBLIC SCHOOL, WEST PATEL NAGAR

ENGLISH WORKSHEET CLASS 5

Q.1. Read the passage and answer the questions given below:

Rehaan ran into his house, slamming the door behind him. He threw his bag on the floor and sat on the couch. After six hours of TV. watching , he ate some pizza and fell asleep with a slice on his stomach and his feet on his book bag. When Rehaan came home from school the next day, he was noticeably distraught. He crumpled his report card and placed it inside a soup can in the garbage. He then flipped the soup can upside down in the garbage can and arranged loose pieces of trash over it. As he sat on his couch, he let out a sigh and started watching T.V. again.

Q.1.1 Why is Rehaan distraught? How do you know this?

Q.1.2 Why does Rehaan put his report card in a soup can?

Q.1.3 Was Rehaan's report card good or bad and why was it like that?

Q.2. Read the following story and fill in the blanks with appropriate adverbs:

It was Christmas eve and pretty girls and boys were _____(hunger) waiting for Santa's arrival. The elves worked _____(eager) working to put the finishing touches on all the toys. The shiny reindeer ran _____(quick) into position at the head of Santa's sleigh. They soared into the midnight sky, high above the pointy rooftops. Santa laughed _____(happy) as he delivered the presents. _____(love) wrapped gifts glistened under the trees. Children around the world _____(careful) tip-toed out of their beds to see if Santa had come.

Q.3. Read the poem given below and answer the questions that follow by choosing the most appropriate option.

I'm staying home from school today.

I'd rather be in bed

pretending that I have a pain

that's pounding in my head.

I'll say I have a stomach ache.

I'll claim I've got the flu.
I'll shiver like I'm cold
and hold my breath until I'm blue.
I'll fake a cough. I'll fake a sneeze.
I'll say my throat is sore.
If necessary I can throw
a tantrum on the floor.
I'm sure I'll get away with it.
Of that, there's little doubt.
But, even so, I really hope
my students don't find out.

--Kenn Nesbitt

1. Use the information in the above poem and complete the following by putting one word in each blank.

The poet says that he wants to (a) _____ at home today and not go to (b) _____. He would like to be in bed (c) _____ to have a pain in his (d) _____. He will say that he has a (e) _____ or has got the (f) _____.

2. Tick the most appropriate answer.

i) The poet is a _____

a) student b) teacher c) parent d) worker

ii) The poet is sure that he _____

a) will be successful b) will be able to pretend
c) will throw a tantrum d) will have a sore throat

3. Write the word from the passage that means "declare"

4. What is the poet hoping that his students shouldn't find out?

Q.4. Write an application to the Principal of your school requesting her to allow you to change your section. Give the reasons for the same. (5)

CLASS V, MATHEMATICS

Q1. Fill in the following blanks :

- a) 50,00,000 is less than _____
- b $8,00,000 + 50,000 - 4,000 =$ _____
- c. Digit in the Ones place of the product of 486 and 127 is _____
- d. $40,000 \div 40 =$ _____
- e. Sum of the place values of 8 in 8,39,508 is _____
- f. The sum of the greatest 6 digit number and the smallest 3 digit number is 10,00,099 _____ (True/False)
- g. 7,00,000 is 1 more than _____.
- h. $444444 \div 444 = 1001$ _____ (True/ False)
- i. Complete the pattern – 4,21,395; 6,21,395 ; _____ ;

- j. Take away 58,999 from 60,000 = _____

Q2. Find the sum of the following numbers :

8,69,27,428 ; 3,21,33,046 ; 2,95,18,654

Q3. Subtract greatest 8- digit number from the smallest 9 - digit number.

Q4. Find the Product of 10,248 X 569

Q5. Find the quotient and remainder of the given :

$77218 \div 35$

Q6. A bag holds 560 onions. How many onions are there in 114 such bags.

Q7. The sum of 2 numbers is 4,01,694. If one number is 29,167 find the other number.

Q1. Identify the system. Write its name. Label all its parts correctly: -



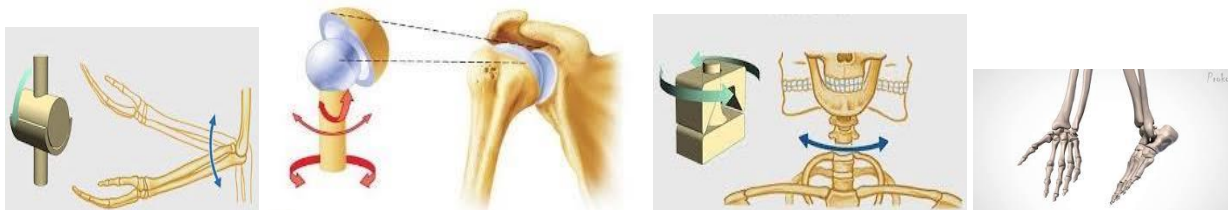
Q2. Identify the system. Write its name. Mark all its four main parts. Write their names: -



Q3. Solve the riddles with the help of clues: -

- I am a body part but I am not a knee. I am found on your face. I am what you use to see. _____
- Two little holes on the sides of a hill just as you come to cherry red mill. _____
- I am the strongest muscle in the body. without me you can not taste anything. _____
- Whether a stove is hot or water icy cold a cat soft, a sharp knife, through me you are told. Which sense am I? _____
- The wail of a siren, the cawing of a crow, crunching leaves, buzzing bees- without me you would not know. Which sense am I? _____

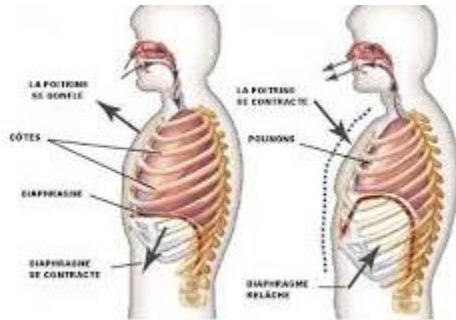
Q4. Identify the joints. Write their names. Give two examples of each: -



Q5. Write the names of breathing organs of the following animals: -

- a) Birds b) Insects c) Mammals d) Reptiles e) Frog

Q6. Look at the figures. Which of the following figure indicates inhalation and which one indicates exhalation. Define them also.



Q7. Which of the skull bones are movable?

Q8. Why do doctors use X-ray images?

Q9. Why should we cover our nose while sneezing?

Q10. On an average an adult human being at rest breathes 12-20 times per minute. The breathing rate however may differ under different conditions. Arrange the following activities in order of increasing breathing rates: - sleeping, cycling, brisk walk, watching TV

Q11. In old age, people often suffer from stiff and inflamed joints. What is this condition called? What are the possible reasons for these symptoms?

Q12. Write the type of joint which is used for each of the following movements: -

- a) A cricket bowler bowls the ball b) A girl moves her head in right and left direction c) A person lifts weights to build up his biceps

Q13. Boojho fell off a tree and hurt his ankle. On examination the doctor confirmed that the ankle was fractured. How was it detected?

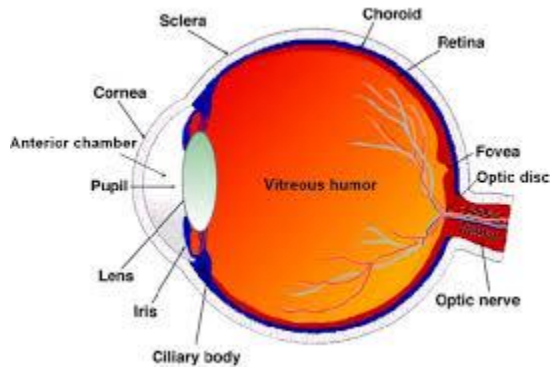
Q14. Bones are hard structures and cannot be bent. But we can still bend our elbow, knee etc. How is this possible?

Q15. Provide one word answers to the statements given below: -

- a) Joint which allows movement in all directions
b) Hard structures that forms the skeleton
c) Part of the body with a fixed joint
d) Help in movement of body by contraction and relaxation
e) Framework of bones which gives shape to our body.
f) Bones that join with chest bone at one end and to the backbone at the other end.
g) Longest bone in our body

- h) Smallest bone in our body
- i) Breathing organs of mammals

Q16. Look at the diagram of inner view of eye and answer the following questions: -



- a) The dark spot in the centre of eye which allows the light to enter the eye- _____
- b) The coloured part of the eye- _____
- c) The screen of eye on which all the images are formed- _____
- d) The white part of the eye- _____
- e) It exists behind the pupil and is responsible for allowing your eyes to focus on small details- _____
- f) The outermost layer of the eye responsible for focussing the light- _____
- g) The nerves which carry impulses to the brain- _____

Q17. Mark the taste buds present on the tongue: -

