


Elapsed Time to the
Minute Within the Hour

Task Cards

3.MD.1

1. What time is it?




2. How much time has passed?

Start Time	End Time
3:23	3:45

3. What is the start time?

Start Time	End Time	Elapsed Time
	2:41	13 minutes


4. How much time has passed?.




5. Solve the problem.

Jenny wants to go to the movies at 4:45. Right now, it is 4:12. How much time does she have before the movie starts.

6. Name one thing you would be doing at this time in the morning.



7. Name one thing you would be doing at this time in the evening.



8. What is the end time?

Start Time	End Time	Elapsed Time
1:26		25 minutes

9. What time is it?




10. How much time has passed?

Start Time	End Time
12:13	12:44

11. What is the start time?

Start Time	End Time	Elapsed Time
	9:46	42 minutes


12. How much time has passed?.



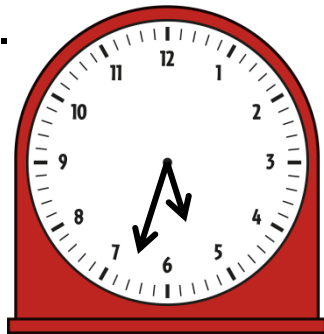
13. Solve the problem.

Ian practices his multiplication facts for fifteen minutes every day. If he starts at 5:07, what time will his practice time end?

14. Name one thing you would be doing at this time in the morning.




15. Name one thing you would be doing at this time in the evening.



16. What is the end time?

Start Time	End Time	Elapsed Time
11:34		18 minutes

17. What time is it?




18. How much time has passed?

Start Time	End Time
7:12	7:54

19. What is the start time?

Start Time	End Time	Elapsed Time
	11:38	29 minutes


20. How much time has passed?.



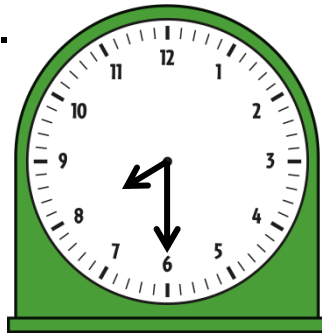
21. Solve the problem.

Charlotte enjoys reading everyday. Today she started reading at 6:11 and finished reading the last chapter of her book at 6:39. How long did she read today?

22. Name one thing you would be doing at this time in the morning.



23. Name one thing you would be doing at this time in the evening.



24. What is the end time?

Start Time	End Time	Elapsed Time
9:14		33 minutes

Elapsed Time to the Minute Recording Sheet

Name _____

1.

2.

3.

4.

5.

6.

7.

8.

9.

10.

11.

12.

13.

14.

15.

16.

17.

18.

19.

20.

21.

22.

23.

24.

Elapsed Time to the Minute Answer Key

Name _____

1. 2:02

2. 22 minutes

3. 2:28

4. 4:07-4:42
35 minutes

5. 33 minutes

6. Any activity that
can be done at
10:32 AM

7. Any activity that
can be done at 2:26
PM

8. 1:51

9. 5:23

10. 31 minutes

11. 9:04

12. 9:21-9:57
36 minutes

13. 5:22

14. Any activity
that can be done at
8:12 AM

15. Any activity
that can be done at
5:33 PM

16. 11:42

17. 12:37

18. 42 minutes

19. 11:09

20. 8:13-8:32
29 minutes

21. 28 minutes

22. Any activity
that can be done at
11:19 AM

23. Any activity
that can be done at
8:30 PM

24. 9:47

Elapsed Time to the Minute Recording Sheet

Name _____

Directions: Write the card number in each box. Write the time to the nearest minute.

Card Number ____	Card Number ____
Card Number ____	Card Number ____
Card Number ____	Card Number ____
Card Number ____	Card Number ____

Elapsed Time to the Minute Recording Sheet

Name _____

Directions: Write the card number in each box. Write the time to the nearest minute.

Card Number ____	Card Number ____
Card Number ____	Card Number ____
Card Number ____	Card Number ____
Card Number ____	Card Number ____

This product is created by

Thank you for your purchase! I hope you and your students find this product helpful. I truly value your feedback, so please let me know how this purchase is working for you. If you would like to see what else I have to offer, please check out my store at

<https://www.teacherspayteachers.com/Store/Keren-Heckathorn>. If you have any questions, or would like me to customize a product to fit your specific needs, please email me at kscreation@yahoo.com. Follow me for updates and new products.



Happy Teaching!
Keren Heckathorn

Thank you to...

Graphics by Katie Dang:

<http://www.teacherspayteachers.com/Store/Katie-Dang>

