

## Experiment 17: Potentiometric Titration

**Objective:** In this experiment, you will use a pH meter to follow the course of acid-base titrations. From the resulting titration curves, you will determine the concentrations of the acidic solutions as well as the acid-ionization constant of a weak acid.


### Introduction

You have performed acid-base titrations in the past to determine the concentration of an acidic or basic solution using a colored indicator. However, there are times when an appropriate indicator does not exist, or where the color of the solution would obscure any color change associated with the endpoint. In such cases, a pH meter can be used to monitor the acidity of the solution throughout the titration. Recall the definition of pH:

$$\text{pH} = -\log[\text{H}_3\text{O}^+]$$

*The pH Meter* (see Tro, p. 806)

A pH meter consists of two electrodes: a glass electrode, which is sensitive to the concentration of hydronium ions in solution, and a reference electrode. The reference electrode is often a **calomel** electrode, which supplies a constant potential ( $E^\circ = +0.24$  V versus the standard hydrogen electrode) as determined by the half-reaction



Calomel is the trivial name for the compound  $\text{Hg}_2\text{Cl}_2$ . When both the reference and glass electrodes are contained in a single unit, it is referred to as a **combination electrode**.


The potential of the glass electrode is proportional to the logarithm of the ratio of  $[\text{H}_3\text{O}^+]$  inside and outside the electrode. The pH meter measures the total potential across the two electrodes and displays this measurement on a scale calibrated in pH units. The pH meter is an accurate and easy-to-use device for determining the pH of a solution. You will be using a pH electrode attached to the LabQuest2 interface and computer as a pH meter in this experiment. The appropriate set-up for a potentiometric titration is shown on Figure Page, Expt. 17, along with the details of glass and calomel electrodes.

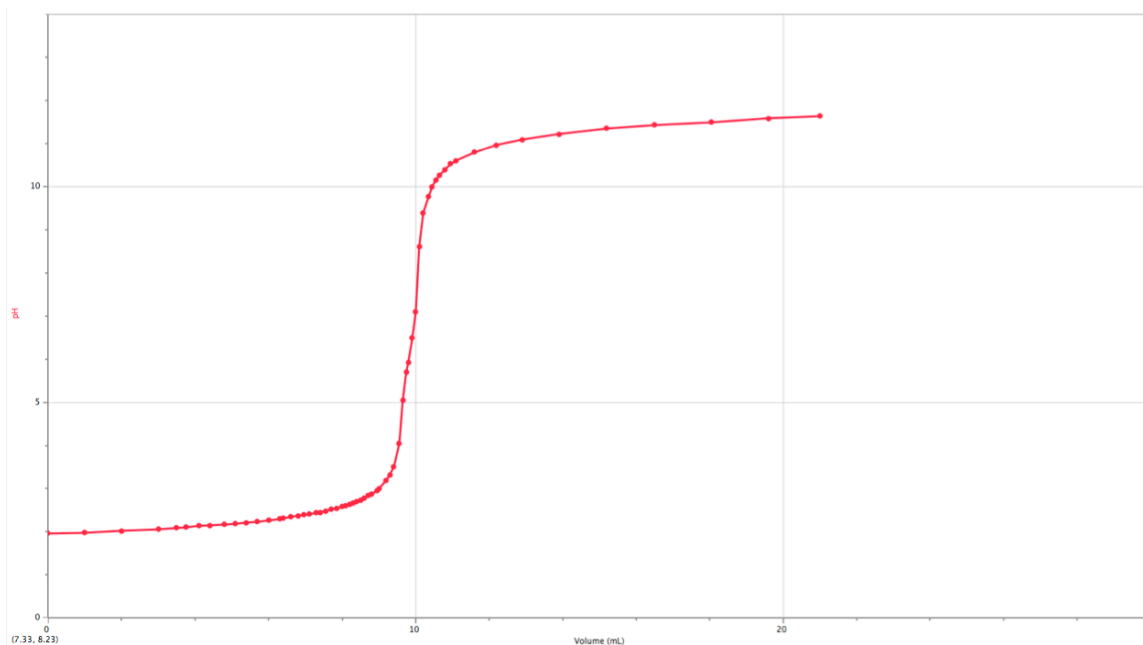
### *Potentiometric titrations*

(See Tro, Chapters 16 and 17, especially pp 795-805.)

Figure 1 on the next page shows a plot of pH versus volume of base added for the titration of a strong acid with a strong base. There is very little change in pH when the base is initially added. Below the equivalence point, the pH is a function of the amount of excess acid present. Above the equivalence point, the pH is a function of the amount of excess base present. The equivalence point for the titration of a strong acid with a strong base occurs when  $[\text{OH}^-]$  exactly equals  $[\text{H}_3\text{O}^+]$  in the solution;  $\text{pH} = 7.0$ .

The situation in the case of the titration of a *weak* acid with a strong base is somewhat different due to the fact that a weak acid is only partially ionized in aqueous solution. A dynamic equilibrium exists, which is represented by the following equation:





**Figure 1.** Titration curve for the titration of a strong acid with a strong base.

The equilibrium expression for this reaction is:

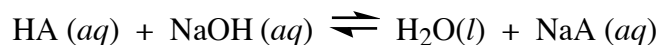
$$K_a = \frac{[\text{H}_3\text{O}^+][\text{A}^-]}{[\text{HA}]}$$

**Eq. 1**

*or*

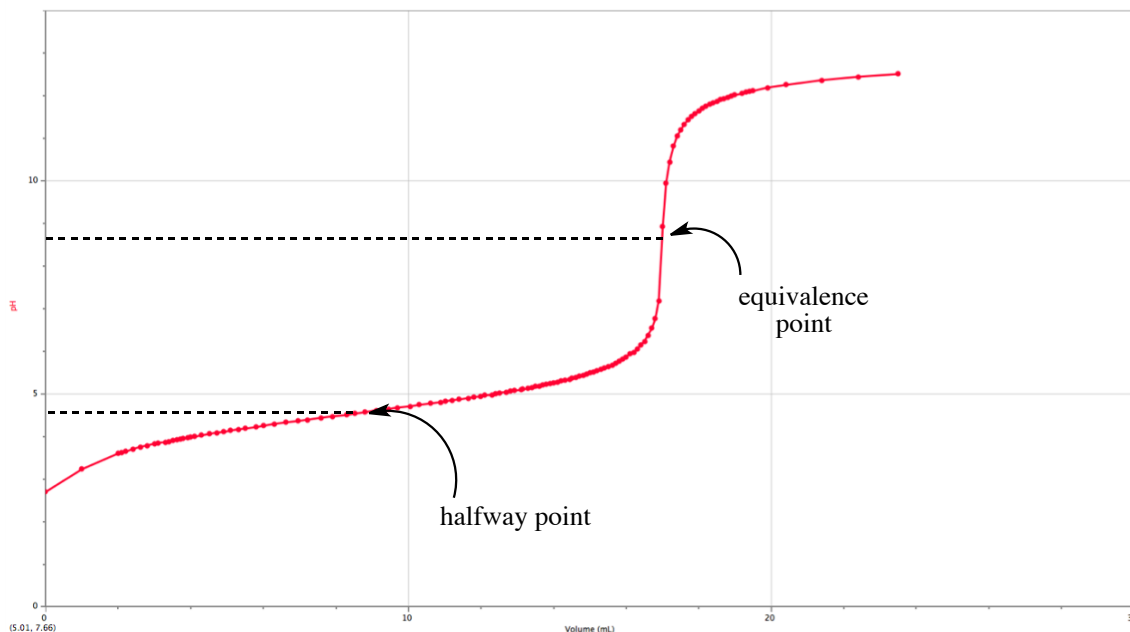
$$[\text{H}_3\text{O}^+] = K_a \left( \frac{[\text{HA}]}{[\text{A}^-]} \right)$$

where  $K_a$  is the acid-ionization constant for the weak acid. Let us assume that the initial dissociation of the weak acid is negligible. The progressive addition of NaOH during the titration decreases the concentration of HA and increases the concentration of its salt, NaA:



The presence of both HA and its salt, NaA, creates a **buffer system**, which resists a large change in pH (see Tro, pp 780-794). The ratio of  $[\text{HA}]/[\text{A}^-]$  changes only slightly; therefore, according to **Eq. 1**, the change in  $[\text{H}_3\text{O}^+]$  (or pH) must also be small. The pH increases slowly until the equivalence point is approached (see Figure 2 on the next page).

At the halfway point in the titration, exactly half of the HA originally present will have been neutralized, and therefore the concentrations of HA and  $\text{A}^-$  will be equal. Substituting this information into **Eq. 1**, we obtain:



**Figure 2.** Titration curve for the titration of a weak acid with a strong base.

$$K_a = \frac{[\text{H}_3\text{O}^+]_{1/2}[\text{A}^-]_{1/2}}{[\text{HA}]_{1/2}}$$

$$K_a = [\text{H}_3\text{O}^+]_{1/2}$$

**Eq. 2**


Thus, the ionization constant of a weak acid is equal to the hydronium ion concentration at the halfway point in the titration;

$$\text{p}K_a = \text{pH}_{1/2}$$

This relationship is valid *only* if the initial dissociation of the acid is negligible. When the degree of dissociation is appreciable, as in the case of a very dilute solution, the pH at the midpoint of the titration bears no relation to the value of  $K_a$ .

The subsequent rapid increase in pH and the inflection in the titration curve at the equivalence point can be accounted for. As the equivalence point is approached, the concentration of unreacted HA becomes progressively smaller so that successive increments of NaOH neutralize a greater fraction of the HA remaining. This produces a large change in the  $[\text{HA}]/[\text{A}^-]$  ratio and, therefore, in the pH of the solution.

At the equivalence point, the acid and base have reacted completely to yield the salt, NaA. The pH at the equivalence point is determined by the strength of the base,  $\text{A}^-$ . The conjugate base of a weak acid is a strong base. It will react with water to produce hydroxide ions (*hydrolysis*):



For this reason, it is not surprising to see a pH that is greater than 7 at the equivalence point.

Beyond the equivalence point, the pH is determined by the ion product for water:

$$K_w = [\text{H}_3\text{O}^+][\text{OH}^-]$$

The first small excess of NaOH greatly increases the concentration of  $\text{OH}^-$ , concomitantly decreasing the  $\text{H}_3\text{O}^+$  concentration, and causing the pH to continue to increase. Well past the equivalence point, the concentration of  $\text{OH}^-$  becomes so large that only slight changes in pH are produced.

You will titrate a solution of HCl with a standardized solution of NaOH while measuring the pH throughout the course of the titration. From your titration curve, you will determine the concentration of the HCl solution.

You will also titrate a sample of a commercial vinegar using a standard solution of NaOH. The active ingredient in vinegar is acetic acid, which is a weak acid.



The acid-ionization constant of acetic acid is:

$$K_a = \frac{[\text{CH}_3\text{COO}^-][\text{H}_3\text{O}^+]}{[\text{CH}_3\text{COOH}]} = 1.74 \times 10^{-5} M$$

From your titration curve, you will be able to determine the concentration of acetic acid in commercial vinegar.

**Procedure** (you do not need to outline instructions for using the LoggerPro software)

### *Part I. Calibrating the pH Electrode*

You will use the computer to both acquire and analyze your data from this experiment. Two students will work on the same computer and will obtain the same set of data. A pH electrode should be plugged into Channel 1 of the interface box.

Click on the **Applications** folder at the bottom of the screen. In the window that opens, click on the button labeled **Logger Pro** to open the Logger Pro software.

Under the **Experiment** menu, choose **Data Collection...**. In the box that appears, click on the drop down menu next to **Mode:** and choose Events With Entry. In this mode, the computer will record a pH measurement (a  $y$  value) every time you click on the mouse. It will then allow you to type in a corresponding  $x$  value (volume) after it records the pH measurement. The number of columns should be 1. Next to **Name:** and **Short Name:**, type in Volume. Next to **Units:**, type in mL. Click on **Done**. The empty graph will now appear with a  $pH$  label on the  $y$ -axis and a *Volume (mL)* label on the  $x$ -axis.

To calibrate the pH electrode, you will need pH 4 and pH 7 buffer solutions. Remove the pH electrode from the bottle in which it is soaking by unscrewing the cap through which the electrode is inserted. You do not need to pull the cap off. Rinse off the pH electrode with a stream of water from a washbottle, shake off the drops and place it in the pH 7 buffer. *Swirl* the bottle thoroughly. Pull down the **Experiment** menu and choose **Calibrate** followed by **LabPro: 1 CH1:pH**. In the box that appears, click on **Calibrate Now**. Watch the channel input voltage reading. When the number stops changing, highlight the box under Reading 1 and type **7.0**. Click on **Keep**. Take the pH electrode out of the pH 7 buffer, rinse it off, place it in the pH 4 buffer and swirl the bottle. Wait until the channel input voltage reading is stable (it should be different from the previous voltage reading), then type in **4.0** under Reading 2, and click on **Keep**. Click **OK**. The pH electrode is now calibrated. If you close this file or quit the program for any reason, the electrode must be re-calibrated.

Click once on the number at the very end of the  $x$ -axis. Type in 30 and press return. This will allow the computer to collect data until a total of 30 mL of titrant has been added (you can stop the data collection before 30 mL, if desired). You are now ready to collect data.

### *Part II. Titration of a Strong Acid*

Into a clean and dry 150 mL beaker, and with a carefully rinsed volumetric pipet, dispense a 10.00 mL aliquot of the 0.5 M HCl solution (do **not** pipet directly from the bottle). Add exactly 75.0 mL of distilled water and 3 drops of phenolphthalein solution. Fill a clean and carefully rinsed buret with the standardized 0.5 M NaOH solution (record the exact molarity from the label). Record the initial buret reading in your notebook. Remember throughout the experiment that you should record buret readings to the nearest one-hundredth of a milliliter.

Remove the pH electrode from the buffer solution. Thoroughly rinse the electrode with distilled water, shake off the drops of water and place it in the acid solution such that the tip is immersed. Stir the acid solution with the pH electrode (be careful not to break the glass tip!). Now arrange the buret over the beaker so that the

NaOH can be dispensed directly into the acid solution (see Figure Page, Expt. 17). The tip of the buret should be close enough to the surface of the solution such that no splashing occurs as the base is being added.

Click once on the **green arrow** button. A circular button that is **blue** will appear next to the **red rectangle**. Watch the pH reading that appears in the lower left corner of the screen (below the table). When the pH is stable, click on the **blue button**. At this point, a box appears into which you must enter a value for “Volume”, that is, the volume of NaOH that has been added as you proceed through the titration. Since you have not added any NaOH at this point, type 0 (zero) and click **OK** or press return.

Begin the titration by adding, with stirring, 1 to 2 mL of NaOH. *Be careful not to splash any liquid out of the beaker.* When the pH reading is stable, stop stirring, then click on the **blue button** to record the pH of the solution. Type in the total volume of NaOH that was added (the volume reading on the buret *minus* the *initial* volume reading that you recorded in your notebook) and hit return. Continue to add base, record the pH by clicking the **blue button** and type in the total volume of NaOH added (the new reading on the buret *minus* the *initial* volume reading). The pH values should increase in approximately 0.2 pH unit increments. Be certain the solution is stirred after each addition of titrant and that the pH is stable before clicking the **blue button**. **Slow down as you approach the equivalence point!** As the pH readings approach 2, reduce the amount of base added to 0.1 mL increments. Record in your notebook the pH reading when the pink phenolphthalein endpoint color persists for 30 seconds. Add increments consisting of several drops of NaOH beyond this endpoint; then increase the increments of base to 1-2 mL until 10 mL more of NaOH has been added. Click on the **red button**.

#### **Important step: Save your data!**

- Save your data by pulling down the **File** menu and selecting **Save As...**
- In the dialog box that appears, the word **Documents** should be displayed in the drop down menu in the middle of the box. If it is not, scroll through the menu on the left, and choose Documents.
- Next to the words **Save as:**, type over the word “untitled” with the name of your file (example: HClNaOHlao). You should include your initials in the name you choose.
- Click on **Save**.
- To find your file later, you will have to go to the **Documents** folder. It should have the suffix .cml at the end of the file name.

**A note regarding “mistakes”:** If at any time during the above procedure you type an incorrect volume reading and hit return, simply make a note of the number of the “mistake” data point in your notebook, along with an explanation of the mistake, and continue with the titration. You can delete unwanted data points or change the volume (*x*) value for a data point *after* you have stopped the data collection.

If you need to change a volume entry for any of the data points due to a mistake in entering the value, click in the appropriate cell of the Table Window and type in the correct value. To delete a data point, click in the appropriate volume cell of the Table Window and press the delete key. While the pH value for that data point cannot be deleted, the point will no longer appear on the graph once the volume value has been erased.

You can adjust the axes on your graph using the AutoScale button in the toolbar or by clicking on the numbers at the ends of the axes and typing in the desired limits.

You can adjust other graph parameters in **Graph Options...** found under the **Options** menu. Because the Logger Pro program does not draw the smoothest curve through data points but instead simply connects the dots, it is best to print this plot *without* Connecting the Points, but *with* Point Symbols. Type an appropriate title for the graph in the box under Title. Your initials should appear in parentheses at the end of the title (so you can identify your printout). Click on **OK**.

To print the graph, pull down the **File** menu and choose **Printing Options...** Click in the box next to Print Footer to make sure a check mark appears, then type in your name (and a comment about the plot, if desired). Print *both* the plot and data table. Use the **Print Graph** and **Print Data Table** commands from the **File** menu.

### *Part III. Titration of vinegar*

Pull down the **Experiment** menu and select **Store Latest Run**. Under the **Data** menu, choose **Hide Data Set** followed by **Run 1**. You can now collect a new data set. Click once on the number at the end of the *x*-axis, type in 30 and press return. Click once on the number at the bottom of the *y*-axis, type 0 and return, then click on the upper limit, type 14 and return.

Refill the buret with the standardized 0.5 M NaOH solution provided. Record the initial volume of NaOH in your notebook. Using a carefully cleaned and rinsed transfer pipet, dispense a 10.00 mL aliquot of vinegar into a *clean, dry* 150 mL beaker (do **not** pipet directly from the bottle). Dilute this aliquot with exactly 75.0 mL of distilled water. Add 3 drops of phenolphthalein solution.

Thoroughly rinse the electrode with distilled water, shake off the drops of water and place it in the vinegar solution. Stir the vinegar with the pH electrode (be careful not to break the glass tip!), and arrange the buret above the beaker for a titration. Click on the **green** button. Titrate the vinegar as you did the HCl solution above. As you approach the equivalence point, decrease the size of the base increments until single drops are being added. Record in your notebook the pH reading when the pink phenolphthalein endpoint color persists for 30 seconds. Continue the titration until a pH of approximately 12 has been reached. Click on the **red** button, then *save* your data.

Adjust the axes and type in a title for your graph. Print out your plot (without Connecting the Points) *and* data table.

To directly compare the shapes of the two titration curves, choose **Show Run 1** from the **Data** menu, and the plot from your first titration will appear. You can display one or both runs simply by using the **Show Run** and **Hide Run** options. You may need to re-adjust axes limits.

All of the solutions in this experiment may be poured down the sink. Clean off your lab bench before you leave and return the rinsed pH electrode to the plastic bottle.

Record the percent acidity of the vinegar from the label on the bottle.

When you are ready to leave, pull down the **Logger Pro** menu and choose **Quit Logger Pro**.

You should leave the laboratory with printouts of all the necessary plots that you produced today. However, you should also store a copy of your data file(s) by e-mailing the file(s) to yourself. If you need to adjust any of your plots after your lab period is

over, you can use the computers in the chemistry teaching labs when the rooms are not occupied (M and W at 9:00 – 1:00 and Tu, Th at 12:00 –1:15).

**Each student must write his/her own Calculations and answers to the Questions for this experiment. Do *not* hand in one report per pair. Do *not* hand in identical reports.**



## Calculations

- On the plot resulting from the titration of HCl with NaOH, draw the best curve through the data points by hand. Locate the equivalence point and determine the pH and volume at this point. Label the point where the phenolphthalein endpoint became visible.
  - Using the molarity and volume of base solution required to reach the equivalence point, calculate the concentration of the HCl solution that was in the bottle in molarity.
- On the plot resulting from the titration of vinegar with NaOH, draw the best curve through the data points by hand. Locate the equivalence point and note the pH and volume at this point. Label the point where the phenolphthalein endpoint became visible.
  - Using the molarity and volume of base solution required to reach the equivalence point, calculate the concentration of acetic acid in the vinegar bottle in molarity.
- The label on the vinegar states its *percent acidity*. This quantity corresponds to the mass percent of acetic acid in vinegar (g acetic acid/100 g vinegar). Convert the molar concentration of acetic acid that you obtained to mass percent (note: density of vinegar is 1.008 g/mL). Compare this value to the one reported on the label and calculate the percent error (see Expt. 8).
- To find the pH at the halfway point of the curve, divide the volume of base needed to reach the equivalence point by 2, and read off the corresponding pH from the titration curve. Determine your experimental value of  $K_a$  for acetic acid.
- Using the concentration of acetic acid that you calculated in question 2.b) above along with the literature value for  $K_a$  given in the introduction ( $1.74 \times 10^{-5}$  M), calculate the initial pH of the vinegar sample (after diluting it with 75.0 mL of water but before any base has been added). [**Hint:** Refer to p. 800 in Tro.]
- Using your calculated concentration of acetic acid and the literature value for  $K_a$ , calculate the pH of the vinegar sample at the equivalence point. For the volume of base added at the equivalence point, use the amount determined from your titration curve. Refer to pp 801-802 in Tro.
- Using your calculated concentration of acetic acid, calculate the pH of the vinegar sample after 25.00 mL of standardized NaOH solution has been added (when the solution is well past the equivalence point). At this point in the titration, you may assume that the pH of the solution depends upon the concentration of  $\text{OH}^-$  ions. See p. 803 in Tro.

## Questions

- Compare the equivalence point of the first titration (hydrochloric acid) with the endpoint determined by phenolphthalein indicator. If you had determined the equivalence point by the color change of the phenolphthalein, would the value calculated for the concentration of the HCl solution have been larger,

smaller or the same as the value you determined by potentiometric titration? Explain.

2. A student was given buffer solutions to calibrate the pH electrode that were labeled incorrectly. The pH's of the buffer solutions were actually *lower* than the pH's shown on the labels. Explain how such an error would affect the result for the  $K_a$  of acetic acid.
3. Discuss possible error sources and how they might affect your results.