


Name: _____

COUNTING

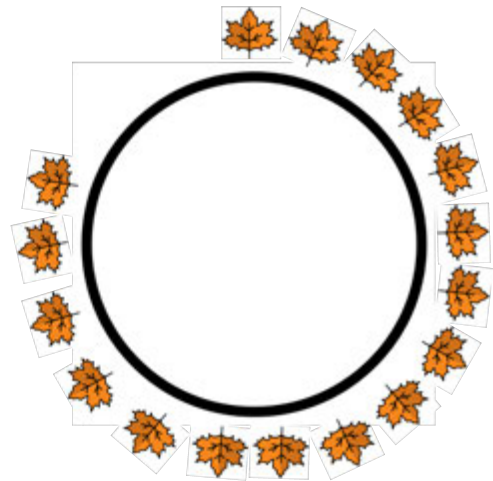
Counting from 5 - 20

Count the number of items around each circle below. Write your answer in the blank.


How Many? _____



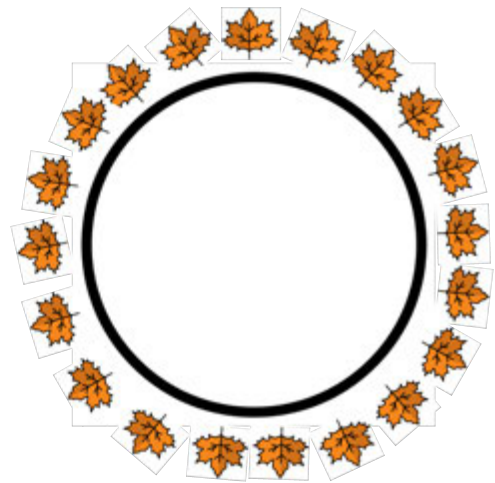
How Many? _____



How Many? _____



How Many? _____



CCSS: K.CC.A.1, K.CC.B.4.a, K.CC.B.4.b, K.CC.B.4.c, K.CC.B.5


Name: _____

COUNTING


Counting from 5 - 20

Count the number of items around each circle below. Write your answer in the blank.


How Many? _____




How Many? _____



How Many? _____



How Many? _____



CCSS: K.CC.A.1, K.CC.B.4.a, K.CC.B.4.b, K.CC.B.4.c, K.CC.B.5

Name: _____

ADDITION

Add Number Pairs with Sums = 6 or 7


Solve each addition problem and write your answer in the box.




3 pears + 3 pears =




1 pear + 5 pears =



4 pears + 3 pears =



5 pears + 2 pears =



2 pears + 4 pears =

CCSS: K.OA.A.1, K.OA.A.2

Name: _____

Addition



Add Number Pairs with Sums = 8 or 9

Solve each addition problem and write your answer in the box.

 +  =

 +  =

 +  =

 +  =


 +  =

Name: _____


COMPARE OBJECTS (1-5)

More than or Less Than?


Count the items in each box. How does the box on the left compare to the one on the right? Circle either **More than** or **Less than**.




is **MORE** than




is **LESS** than




is **MORE** than




is **LESS** than




is **MORE** than



is **LESS** than



is **MORE** than



is **LESS** than


CCSS: K.CC.C.6

Name: _____


COMPARE OBJECTS (1-5)

More than or Less Than?


Count the items in each box. How does the box on the left compare to the one on the right? Circle either **More than** or **Less than**.




is **MORE** than



is **LESS** than



is **MORE** than




is **LESS** than




is **MORE** than



is **LESS** than



is **MORE** than



is **LESS** than

CCSS: K.CC.C.6

Name: _____


COMPARE OBJECTS (1-10)

More than or Less Than?

Count the items in each box. How does the box on the left compare to the one on the right? Circle either **More than** or **Less than**.



is **MORE** than




is **LESS** than




is **MORE** than



is **LESS** than



is **MORE** than



is **LESS** than



is **MORE** than



is **LESS** than

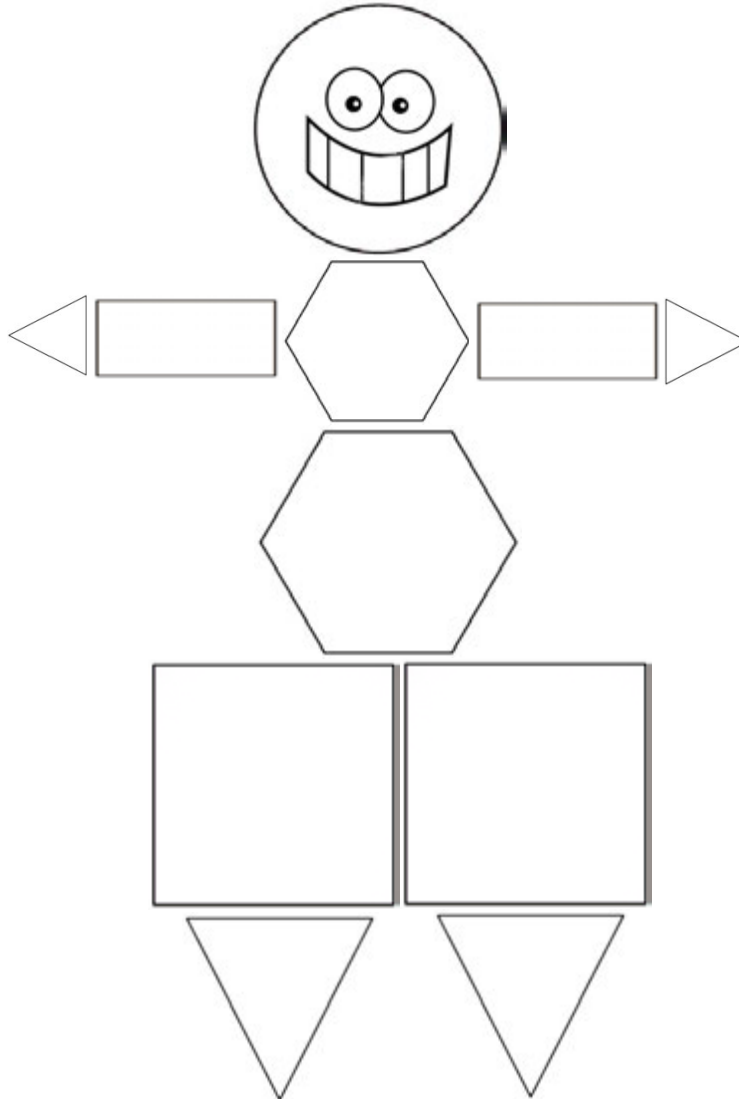
CCSS: K.CC.C.6

Name: _____

GEOMETRY

Recognizing Shapes

Color each shape of the robot using the color guide at the bottom of the page.



SQUARE: GREEN

RECTANGLE: ORANGE

HEXAGON: RED

TRIANGLE: BROWN


CIRCLE: BLUE

CCSS: K.G.A.1, K.G.A.2

Name: _____

Writing Numbers

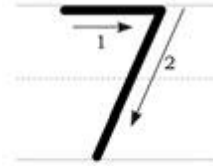
Practice Writing the Numbers 5, 6, 7, and 8



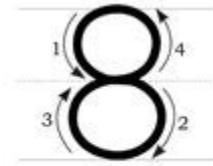
FIVE



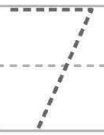
SIX



SEVEN



EIGHT



Practice them together!

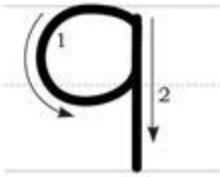
Blank handwriting lines for independent practice, consisting of four sets of three horizontal lines (top, middle, bottom).

CCSS: K.CC.A.3

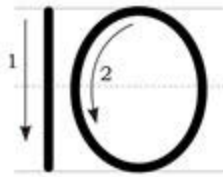
Name: _____

Writing Numbers

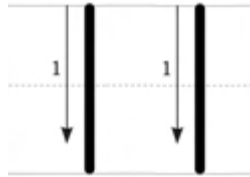
Practice Writing the Numbers 9, 10, 11 and 12



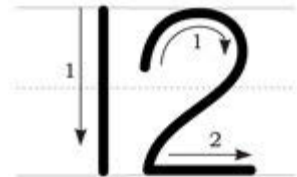
NINE



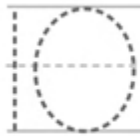
TEN



ELEVEN



TWELVE



Practice them together!

Blank handwriting lines for independent practice, consisting of four sets of three horizontal lines (top, middle, bottom).

CCSS: K.CC.A.3