



Math
Spring Operational 2015

Grade 7
End of Year Released Items

1. A meteorologist was monitoring the temperature outside in degrees Fahrenheit ($^{\circ}\text{F}$) and wrote the expression $78 + (-6) - 5$. Which statement best describes this expression?
- A. The temperature started at 78°F and increased by 6°F . Then the temperature decreased by 5°F .
 - B. The temperature started at 78°F and increased by 6°F . Then the temperature increased by 5°F .
 - C. The temperature started at 78°F and decreased by 6°F . Then the temperature decreased by 5°F .
 - D. The temperature started at 78°F and decreased by 6°F . Then the temperature increased by 5°F .

2. Which expression is equivalent to $2.2 - 2.5$?

- A. $2.5 - 2.2$
- B. $2.2 + 2.5$
- C. $2.2 + (-2.5)$
- D. $2.2 - (-2.5)$

3. Last week, the value of an investment changed at a rate of $-\$3.15$ each day. After how many days was the total change in value $-\$12.60$?

Enter your answer in the box.

4. Indicate whether each expression in the table is equivalent to $\frac{1}{2}x - 1$, equivalent to $x - \frac{1}{2}$, or **not** equivalent to $\frac{1}{2}x - 1$ or $x - \frac{1}{2}$.

Select all appropriate cells in the table.

Expression	Equivalent to $\frac{1}{2}x - 1$	Equivalent to $x - \frac{1}{2}$	Not Equivalent to $\frac{1}{2}x - 1$ or $x - \frac{1}{2}$
$\frac{2}{3} \left(\frac{3}{4}x - \frac{3}{2} \right)$	<input type="checkbox"/>	<input type="checkbox"/>	<input type="checkbox"/>
$(2x + 1) - \left(x + \frac{3}{2} \right)$	<input type="checkbox"/>	<input type="checkbox"/>	<input type="checkbox"/>

5. Jordan's dog weighs p pounds. Emmett's dog weighs 25% more than Jordan's dog.

Which expressions represent the weight, in pounds, of Emmett's dog?

Select **each** correct answer.

- A. $0.25p$
- B. $1.25p$
- C. $p + 0.25$
- D. $p + 1.25$
- E. $p + 0.25p$

6. Ed is a farmer who charges \$3.75 for 5 pounds of cabbage. This table shows the rates charged for cabbage by some other farmers.

Determine whether the unit rate charged for cabbage by the other farmers is less than, equal to, or greater than the unit rate charged by Ed.

Select one cell per row.

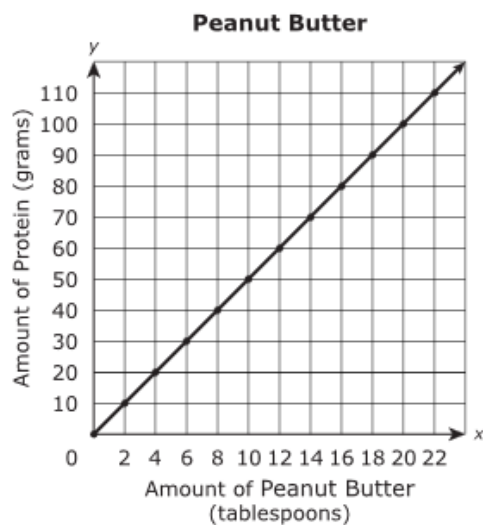
Farmer	Rate	Unit Rate Less than Ed's Unit Rate	Unit Rate Equal to Ed's Unit Rate	Unit Rate Greater than Ed's Unit Rate
A	\$0.50 for $\frac{1}{2}$ pound	<input type="checkbox"/>	<input type="checkbox"/>	<input type="checkbox"/>
B	\$0.75 for 1 pound	<input type="checkbox"/>	<input type="checkbox"/>	<input type="checkbox"/>
C	\$1.75 for $2\frac{1}{2}$ pounds	<input type="checkbox"/>	<input type="checkbox"/>	<input type="checkbox"/>
D	\$6.00 for 8 pounds	<input type="checkbox"/>	<input type="checkbox"/>	<input type="checkbox"/>

7. The amount Troy charges to mow a lawn is proportional to the time it takes him to mow the lawn. Troy charges \$30 to mow a lawn that took him 1.5 hours to mow.

Which equation models the amount in dollars, d , Troy charges when it takes him h hours to mow a lawn?

- A. $d = 20h$
- B. $h = 20d$
- C. $d = 45h$
- D. $h = 45d$

8. The graph shows the amount of protein contained in a certain brand of peanut butter.

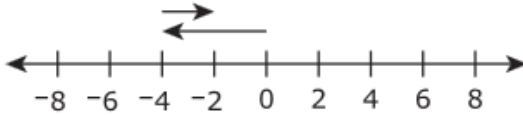
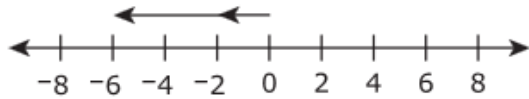


Which statement describes the meaning of the point $(6, 30)$ on the graph?

- A. There are 6 grams of protein per tablespoon of peanut butter.
- B. There are 30 grams of protein per tablespoon of peanut butter.
- C. There are 6 grams of protein in 30 tablespoons of peanut butter.
- D. There are 30 grams of protein in 6 tablespoons of peanut butter.

9. For each expression in the table, select which number line model, if any, can be used to represent the expression.

Select all appropriate cells in the table.

Expression			Neither number line model can be used to represent the expression.
$-2 + 4$	<input type="checkbox"/>	<input type="checkbox"/>	<input type="checkbox"/>
$-2 - 4$	<input type="checkbox"/>	<input type="checkbox"/>	<input type="checkbox"/>
$-2 - (-4)$	<input type="checkbox"/>	<input type="checkbox"/>	<input type="checkbox"/>
$-4 + 2$	<input type="checkbox"/>	<input type="checkbox"/>	<input type="checkbox"/>
$-4 - (-2)$	<input type="checkbox"/>	<input type="checkbox"/>	<input type="checkbox"/>

10. Which situation can be represented by the equation $1\frac{1}{4} \times 6 = 7\frac{1}{2}$?

- A. It took Calvin $1\frac{1}{4}$ hours to run 6 miles. He ran $7\frac{1}{2}$ miles per hour.
- B. Sara read for $1\frac{1}{4}$ hours every day for 6 days. She read for a total of $7\frac{1}{2}$ hours.
- C. Matthew addressed $1\frac{1}{4}$ envelopes in 6 minutes. He addressed $7\frac{1}{2}$ envelopes per minute.
- D. It took Beth $1\frac{1}{4}$ minutes to paint 6 feet of a board. She painted a total of $7\frac{1}{2}$ feet of the board.

11. Determine whether each given expression **is** equivalent to $6 \times 4\frac{1}{2}$ or **is not** equivalent.

Select one cell per row.

Given Expression	Is Equivalent to $6 \times 4\frac{1}{2}$	Is Not Equivalent to $6 \times 4\frac{1}{2}$
$6 \times 4 + \frac{1}{2}$	<input type="checkbox"/>	<input type="checkbox"/>
$6 \times 5 - \frac{1}{2}$	<input type="checkbox"/>	<input type="checkbox"/>
$6 \times 4 + 6 \times \frac{1}{2}$	<input type="checkbox"/>	<input type="checkbox"/>
$6 \times 5 - 6 \times \frac{1}{2}$	<input type="checkbox"/>	<input type="checkbox"/>

12. On Monday, the temperature at 10 a.m. at Sam's house was -6° Fahrenheit. The temperature at 2 p.m. at Sam's house was 2° Fahrenheit.

Select from the drop-down menus to correctly complete the statement.

From 10 a.m. to 2 p.m., the temperature at Sam's house

Choose...

by

Choose...

$^\circ$ Fahrenheit.

M21535

13. Determine which expression is equivalent to $\frac{3}{4} - x \left(\frac{1}{2} - \frac{5}{8} \right) + \left(-\frac{3}{8} x \right)$.

- A. $-\frac{3}{4} x$
- B. $\frac{1}{2} x$
- C. $\frac{1}{8} - \frac{7}{8} x$
- D. $\frac{3}{4} - \frac{1}{4} x$

VF823888

14. Stefanie bought a package of pencils for \$1.75 and some erasers that cost \$0.25 each. She paid a total of \$4.25 for these items, before tax.

Exactly how many erasers did Stefanie buy?

Enter your answer in the box.

15. Anita earns 60 points every time she shops at a grocery store. She needs a total of 2,580 points to receive a free prize. So far, she has earned 480 points. How many more times will Anita have to shop at the grocery store in order to earn the additional points she needs for a free prize?

- A. 8
- B. 35
- C. 43
- D. 51

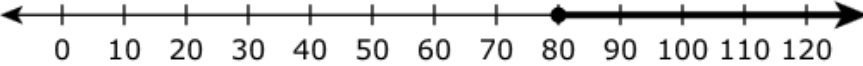
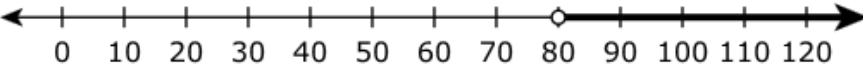
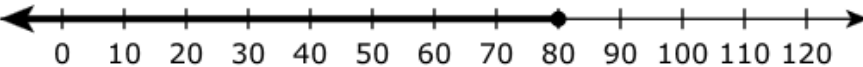
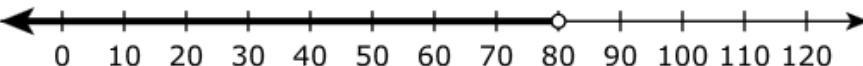
VH01216

16. Ali is collecting signatures for a petition.

- He currently has 520 signatures.
- He has 6 more weeks to collect the remaining signatures he needs.
- He needs a total of at least 1,000 signatures before he can submit the petition.

Ali wants to collect the same number of signatures each week.

Which number line represents all possible numbers of signatures Ali could collect in each of the remaining weeks so that he will have enough signatures to submit the petition?

- A. 
- B. 
- C. 
- D. 

17. Jamal will slice a right circular cylinder into two congruent pieces. Which two-dimensional-plane sections **could result** from the slice Jamal makes?


Select **each** correct answer.

- A. circle
- B. pentagon
- C. hexagon
- D. triangle
- E. rectangle

M21112

18. A national dog show had two types of poodles. This table shows height data, in inches, for the two types of poodles.

Heights of Poodles

 Type of Poodle	Number of Dogs	Mean Height (inches)	Variation in Height (inches)
Miniature Poodle	18	13	2
Standard Poodle	24	23	2

What number completes the sentence?

Enter your answer in the box.

The difference, in inches, between the mean heights for the two types of poodles is

times the variation for either type.

19. Ruben put an empty cup underneath a leaking faucet. After $1\frac{1}{2}$ hours, Ruben had collected $\frac{1}{4}$ cup of water. What is the rate, in cups per hour, at which the water is leaking from the faucet?

- A. $\frac{1}{6}$
- B. $\frac{3}{8}$
- C. $\frac{8}{3}$
- D. $\frac{6}{1}$

VF862854

20. Jonah has a recipe that uses $1\frac{1}{2}$ cups of brown sugar and $2\frac{1}{3}$ cups of flour to make 24 muffins. He has a total of 7 cups of flour. Jonah wants to use all of his flour to make as many muffins as possible using this recipe.

Part A

Exactly how many cups of brown sugar will Jonah use if he uses all 7 cups of flour?

- A. $3\frac{3}{10}$ cups
- B. $4\frac{1}{2}$ cups
- C. $7\frac{5}{6}$ cups
- D. $10\frac{8}{9}$ cups

Part B

Exactly how many muffins will Jonah make if he uses all 7 cups of flour?

Enter your answer in the box.

21. A salesperson earns commission on the sales that she makes each month.

- The salesperson earns a 5% commission on the first \$5,000 she has in sales.
- The salesperson earns a 7.5% commission on the amount of her sales that are greater than \$5,000.

Part A

This month the salesperson had \$8,000 in sales. What amount of commission, in dollars, did she earn?

- A. \$400
- B. \$475
- C. \$525
- D. \$600

Part B

The salesperson earned \$1,375 in commission last month. How much money, in dollars, did she have in sales last month?

Enter your answer in the box.

22. Part A

At Fairview Middle School, 75 band members need to raise a total of \$8,250 for a trip. So far, they have raised \$3,120.

How much money, in dollars, per band member, still needs to be raised for the trip?

Enter your answer in the box.

Part B

The entire band decides to have a concert to raise the money for the trip. Tickets for the concert will cost \$7.50 each. A local business agrees to donate an additional \$0.50 for each \$1.00 in ticket sales to the band for their trip.

What is the **least** number of concert tickets the band must sell in order to raise the rest of the money needed for the trip?

Enter your answer in the box.

23. A furniture store had the following sale:

**Buy one item at the regular price,
get the second item of equal or
lesser value for**

$\frac{1}{2}$ off!

Part A

Mr. Davis bought 2 chairs during the sale. The regular price of each chair was \$168.

What was the total price, in dollars, for both chairs during the sale, not including tax?

Enter your answer in the box.

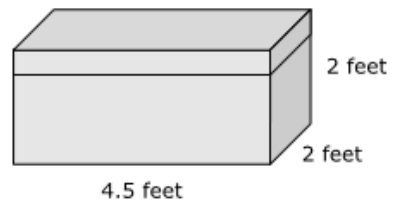
Part B

Ms. Wilcox bought a sofa and a chair during the sale. The regular price of the sofa was \$875 and the regular price of the chair was \$250. After the discount was applied, a sales tax of 6.25% was charged on the total purchase.

How much did Ms. Wilcox pay, in dollars, for the sofa and chair, including tax, during the sale?

Enter your answer in the box.

24. A storage chest is shown.



What are the volume and the surface area of this storage chest?

Enter your answers in the boxes.

Volume = cubic feet

Surface Area = square feet

M20908

25. Angle PQR and angle TQV are vertical angles. The measures of the two angles have a sum of 100° . Write and solve an equation to find x , the measure of angle TQV .

Enter your equation and your solution in the space provided. Enter **only** your equation and solution.

The equation to find x , the measure of angle TQV , is .

The measure of angle TQV is degrees.

	<input type="text" value="+"/> +	<input type="text" value="-"/> -	<input type="text" value="x"/> ×	<input type="text" value="÷"/> ÷	<input type="text" value="1/2"/> $\frac{\square}{\square}$	<input type="text" value="1/3"/> $\frac{\square}{\square}$
	<input type="text" value="y^x"/> y^x	<input type="text" value="sqrt"/> $\sqrt{\square}$	<input type="text" value="cube root"/> $\sqrt[3]{\square}$	<input type="text" value="="/> =	<input type="text" value="(-)"/> (-)	<input style="width: 20px;" type="text" value="%"/> %
	<input type="text" value="v"/> ▼					

26. **Part A**

Which sets of measurements could be the interior angle measures of a triangle?

Select **each** correct answer.

- A. 10° , 10° , 160°
- B. 15° , 75° , 90°
- C. 20° , 80° , 100°
- D. 35° , 35° , 105°
- E. 60° , 60° , 60°


Part B

Which sets of measurements could be the side lengths of a triangle?

Select **each** correct answer.

- A. 3 cm, 3 cm, 3 cm
- B. 4 cm, 8 cm, 13 cm
- C. 5 cm, 9 cm, 14 cm
- D. 6 cm, 7 cm, 8 cm
- E. 7 cm, 7 cm, 10 cm

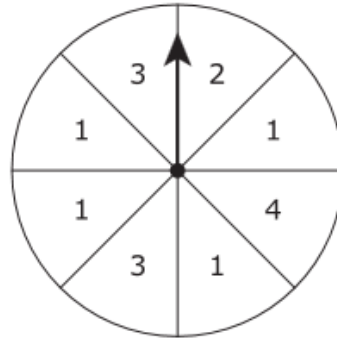
27. The box plot shows the heights of grade 7 students in two random samples from two different schools. The sample from each school is 30% of the student population.



Based on the box plot, which comparison is true?

- A. Grade 7 students from School A are typically shorter than grade 7 students from School B because of the difference in the interquartile ranges of grade 7 student heights at the schools.
- B. Grade 7 students from School A are typically shorter than grade 7 students from School B because of the difference in the medians of grade 7 student heights at the schools.
- C. Grade 7 students from School A are typically taller than grade 7 students from School B because of the difference in the interquartile ranges of grade 7 student heights at the schools.
- D. Grade 7 students from School A are typically taller than grade 7 students from School B because of the difference in the medians of grade 7 student heights at the schools.

28. This spinner is divided into eight equal-sized sections. Each section is labeled with a number.



Jake spins the arrow on the spinner once.

Drag and drop the events into the correct order from least likely to most likely.

Arrow lands on a section labeled with an odd number.

Arrow lands on a section labeled with the number 1.

Arrow lands on a section labeled with a number less than 4.

Least Likely

Most Likely

M21449

29. Students in a math class will be randomly assigned a polygon for a class project. The only types of polygons being assigned are quadrilaterals, pentagons, hexagons, octagons, nonagons, and decagons. If there is an equal number of each type of polygon, what is the probability that the first polygon assigned will be a nonagon?

Enter your answer in the space provided. Enter **only** your answer.

	+	-	×	÷	$\frac{\square}{\square}$	$\frac{\square}{\square}$
	y^x	$\sqrt{\square}$	$\sqrt[3]{\square}$	=	(.)	%

30. George is building a fence. He builds his fence at a constant rate of $\frac{1}{3}$ section of fence every $\frac{1}{2}$ hour. At this rate, what fraction represents the section of fence George can build per hour? Express your answer as a fraction.

Enter your answer in the boxes.

31. Students are playing a game. In the game, students collect and trade building materials. Materials of equal value used for trading are shown in the table.

Materials of Equal Value for Trading

1 stone = 4 logs
1 brick = 10 logs
2 logs = 150 nails

Part A

How many stones are needed to trade for 10 bricks?

Enter your answer in the box.

Part B

How many nails are needed to trade for 1 brick?

Enter your answer in the box.

Part C

It takes 39 stones and 165 logs to build 3 sheds.

What is the exact number of stones needed to build 5 sheds?

- A. 13
- B. 65
- C. 195
- D. 234

Part D

What is the exact number of logs needed to build 5 sheds?

- A. 99
- B. 220
- C. 275
- D. 330

32. Ted bought 4 cans of Soup A for \$6.00.

For each soup in the table, indicate whether or not the soup has the same price per can as Soup A.

Drag and drop the appropriate phrase into each box.

Has the same price per can as Soup A

Does not have the same price per can as Soup A

Soup B: 2 cans for \$5.00

Soup C: 3 cans for \$4.50

Soup D: 5 cans for \$5.50

Soup E: 6 cans for \$9.00

33. Martina read that approximately 10% of all people are left-handed. She wants to design a simulation to approximate the probability of selecting exactly 2 right-handed people when 3 people are randomly selected.

Part A

In the simulation, Martina has a spinner with sections of equal size. One section is labeled "L" (left) and the rest of the sections are labeled "R" (right).

For this simulation to be as accurate as possible, what is the total number of sections that the spinner should have?

Enter your answer in the box.

Part B

Martina spins the arrow on the spinner 3 times and records the resulting letters. Martina performs the simulation 30 times. The results of the simulation are shown.

RRR	RLR	RRR	RRL	RRR	RRR
RRR	RRR	RRR	LRR	RRR	RRR
RRR	RRR	RRR	RRR	RLR	LRL
RRR	RRL	RRR	RRR	LLR	RRR
RRR	RRR	LRR	RRR	RRR	RRR

Select from the drop-down menu to correctly complete the sentence.

Based on the results of this simulation, when 3 people are randomly selected, exactly 2 right-handed people are selected approximately percent of the time.

10
15
20
25

The following pages include the answer key for all machine-scored items, followed by the rubrics for the hand-scored items.

- The rubrics show sample student responses. Other valid methods for solving the problem can earn full credit unless a specific method is required by the item.
- In items where the scores are awarded for full and partial credit, the definition of partial credit will be confirmed during range-finding (reviewing sets of real student work).
- If students make a computation error, they can still earn points for reasoning or modeling.

Item Number	Answer Key	Evidence Statement Key
1.	1.07	7.RP.2b
2.	D	7.RP.2c
3.	24	7.RP.2b
4.	A, D, E	7.EE.1
5.	C	7.NS.1c-1
6.	D	7.NS.2b-2
7.	D	7.RP.1
8.	C	7.RP.2a
9.	<div style="border: 1px solid black; padding: 5px; margin-bottom: 5px;"> Numeric Expression: $14(100) + 6(-30)$ Total number of points the player earned: 1220 </div> NOTE: or equivalent expression	7.EE.3
10.	Part A: <div style="text-align: center; margin: 10px 0;"> 3 <i>g</i> + 2.50 = 13.75 </div> Part B: 3.75	7.EE.4a-1

11.	See rubric	7.D.1
12.	See rubric	7.C.5
13.	See rubric	7.C.5
14.	See rubric	7.C.6.1
15.	Part A: See rubric Part B: See rubric Part C: See rubric Part D: See rubric	7.D.2
16.	Part A: See rubric Part B: See rubric	7.C.8
17.	See rubric	7.D.4

#11 Rubric

Score	Description
3	<p>Student response includes the following 3 elements.</p> <ul style="list-style-type: none"> • Computation component = 1 point <ul style="list-style-type: none"> ○ Correctly calculates how much money was earned on Monday: \$158 • Modeling component = 2 points <ul style="list-style-type: none"> ○ Correctly models a process for determining the total number of hours worked <p style="margin-left: 20px;">Note: It is not necessary to show the total hours of 9.25 if the two correct subtotals are given.</p> <ul style="list-style-type: none"> ○ Correctly models a process for determining the total dollar amount earned, including overtime <p>Sample Student Response</p> <p>Rita worked from 8:15 a.m. to 12:45 p.m., or $4\frac{1}{2}$ hours before lunch. She worked from 1:30 p.m. to 6:15 p.m., or $4\frac{3}{4}$ hours after lunch. The total time Rita worked on Monday was $4\frac{1}{2} + 4\frac{3}{4} = 9\frac{1}{4}$ hours.</p> <p>Rita worked $1\frac{1}{4}$ hours beyond 8 hours, so she is paid overtime for that time. Rita is paid \$16 per hour for the first 8 hours she worked and $(\\$16)(1\frac{1}{2}) = \\24 per hour for the $1\frac{1}{4}$ overtime hours she worked. The total dollar amount she earned on Monday is $\\$16(8) + \\$24(1\frac{1}{4}) = \\$128 + \\$30 = \\$158$.</p> <p>Notes:</p> <ul style="list-style-type: none"> ○ The student may receive a total of 2 modeling points if the modeling processes are correct but the student makes one or two computational errors resulting in an incorrect answer. ○ The student may receive a total of 1 modeling point if the modeling processes are correct but the student makes more than two computational errors resulting in an incorrect answer.
2	Student response includes 2 of the 3 elements.
1	Student response includes 1 of the 3 elements.
0	Student response is incorrect or irrelevant.

#12 Rubric

Score	Description
3	<p>Student response includes the following 3 elements.</p> <ul style="list-style-type: none">• Computation component = 1 point<ul style="list-style-type: none">○ Correctly determines that each sandwich costs \$5.50• Reasoning component = 2 points<ul style="list-style-type: none">○ Correctly describes the error Matt made when he solved the equation○ Shows the corrected steps for solving the equation <p>Sample Student Response</p> <p>“Matt did not correctly use the distributive property when he simplified $4(x + 2)$ and changed it to $4x + 2$. Both the x and the 2 should be multiplied by 4, so he should have written $4x + 8$.”</p> $4(x + 2) = 30$ $4x + 8 = 30$ $4x = 22$ $x = 5.50$ <p>Notes:</p> <ul style="list-style-type: none">○ The student must describe the error made and fix the error in order to receive full reasoning credit.○ If the student only describes the error made or fixes the error without describing it, student will receive at most 1 reasoning point.
2	Student response includes 2 of the 3 elements.
1	Student response includes 1 of the 3 elements.
0	Student response is incorrect or irrelevant.

#13 Rubric

Score	Description
3	<p>Student response includes the following 3 elements.</p> <ul style="list-style-type: none">• Computation component = 1 point<ul style="list-style-type: none">○ Correctly determines the value of x• Reasoning component = 2 points<ul style="list-style-type: none">○ Correctly uses an equation to determine the monthly savings goal○ Correctly writes a sentence to explain the solution <p>Sample Student Response</p> $350 = 12(x + 20)$ $29.\overline{16} = x + 20$ $9.\overline{16} = x$ $\$9.17 \approx x$ <p>The student has to save an additional \$9.17 per month to reach his goal of saving \$350 in 12 months.</p>
2	Student response includes 2 of the 3 elements.
1	Student response includes 1 of the 3 elements.
0	Student response is incorrect or irrelevant.

#14 Rubric

Score	Description
3	<p>Student response includes the following 3 elements.</p> <ul style="list-style-type: none">• Computation component = 1 point<ul style="list-style-type: none">○ Correctly determines the constant of proportionality as 1.25 or equivalent• Reasoning component = 2 points<ul style="list-style-type: none">○ Correctly explains why the student’s reasoning is incorrect○ Correct work or explanation for calculating the constant of proportionality <p>Sample Student Response</p> <p>The student’s reasoning is incorrect because he or she used subtraction between only one quantity to find the constant of proportionality. Since the table is proportional, the ratio between the y and x values will be the same. This will be the constant of proportionality.</p> $y/x = 10/8 = 1.25$ $y/x = 7.5/6 = 1.25$ <p>The constant of proportionality is 1.25.</p> <p>Note: One example of correct work is sufficient for credit.</p>
2	Student response includes 2 of the 3 elements.
1	Student response includes 1 of the 3 elements.
0	Student response is incorrect or irrelevant.

#15 Part A	
Score	Description
1	<p>Student response includes the following element.</p> <ul style="list-style-type: none"> • Modeling component = 1 point <ul style="list-style-type: none"> ○ Machine Scored: Correctly models the equation $y = \frac{1}{4}x$ OR other equivalent equation.
0	Student response is incorrect or irrelevant.
#15 Part B	
Score	Description
2	<p>Student response includes the following 2 elements.</p> <ul style="list-style-type: none"> • Computation component = 2 points <ul style="list-style-type: none"> ○ Machine Scored: 5/4 in the cell corresponding to 5 oranges ○ Machine Scored: 24 in the cell corresponding to 6 cups of juice
1	Student response includes 1 of the 2 elements.
0	Student response is incorrect or irrelevant.
#15 Part C	
Score	Description
1	<p>Student response includes the following 2 elements.</p> <ul style="list-style-type: none"> • Modeling component = 1 point <ul style="list-style-type: none"> ○ Correctly models a strategy to find the unknown number of cups of orange juice in the table ○ Correctly models a strategy to find the unknown number of oranges in the table <p>Note: The same explanation can be used for both parts. The general explanation of each orange being equal to $\frac{1}{4}$ cup is an accurate strategy for determining both unknown numbers in the table.</p> <p>Sample Student Response:</p>

	<p>Using my equation, $y = \frac{1}{4} x$, when $x = 5$ oranges, $y = 5/4$ cups of orange juice.</p> <p>The equation indicates that 4 oranges are squeezed to make 1 cup of juice. To make 6 cups of orange juice, $6(4) = 24$ oranges are squeezed.</p>
0	Student response is incorrect or irrelevant.
#15 Part D	
Score	Description
2	<p>Student response includes the following 2 elements.</p> <ul style="list-style-type: none"> • Computation component = 1 point <ul style="list-style-type: none"> ○ Correctly calculates the number of bags of oranges needed: 4 bags • Modeling component = 1 point <ul style="list-style-type: none"> ○ Correctly models a strategy to determine the number of bags of oranges needed <p>Note: In general, there are three main necessary components for showing a complete strategy: providing the number of cups needed to produce a half gallon [8], the number of oranges needed to produce 8 cups [32], and showing understanding that partial bags cannot be purchased.</p> <p>Sample Student Response:</p> <p>In $\frac{1}{2}$ gallon, there are 2 quarts, or 4 pints, or 8 cups.</p> <p>To make 1 cup of juice, 4 oranges are needed. So, a total of $8(4) = 32$ oranges are needed to make $\frac{1}{2}$ gallon of juice. Each bag contains 10 oranges. When I divide 32 by 10, I get a quotient of 3 and a remainder of 2. This means that Abby needs 4 bags because 3 bags will only contain 30 oranges. She needs the fourth bag to have enough oranges.</p>
1	Student response includes 1 of the 2 elements.
0	Student response is incorrect or irrelevant.

#16 Part A

Score	Description
2	<p>Student response includes the following 2 elements.</p> <ul style="list-style-type: none"> • Computation component = 1 point <ul style="list-style-type: none"> ○ Correct computation, numerical support, or graphical support that is consistent with the student’s reasoning • Reasoning component = 1 point <ul style="list-style-type: none"> ○ Correctly reasons that the lengths of the sides of the quadrilateral $JKLM$ are not all the same, so it cannot be a square <p>Sample Student Response:</p> <p>In a square, the lengths of all four sides are the same. If quadrilateral $JKLM$ is a square, all four of its side lengths would be the same. Since the y-coordinates are the same in points J and K, the side length of JK is the positive difference between the x-coordinates of each point. So, $JK = -4.5 - (-1.2) = -4.5 + 1.2 = -3.3 = 3.3$ units. Similarly, the side length of KL is the positive difference between the y-coordinates of each point. So, $KL = 3 - 8.7 = -5.7 = 5.7$ units. The lengths of two sides of the quadrilateral are not equal, so quadrilateral $JKLM$ is not a square.</p> <p>Notes:</p> <ul style="list-style-type: none"> ○ The student may still receive credit for this part if the student chooses to compute or compare side lengths without using absolute values. ○ The student may receive a total of 1 point for Part A if the reasoning processes are correct but the student makes one or more computational errors resulting in incorrect answers or an incorrect conclusion. ○ Student may receive the 1 computation point if the correct answer is computed but shows no work or insufficient work to indicate a correct reasoning process.
1	Student response includes 1 of the 2 elements.
0	Student response is incorrect or irrelevant.

#16 Part B

Score	Description
2	<p>Student response includes the following 2 elements.</p> <ul style="list-style-type: none">○ Computation component = 1 point<ul style="list-style-type: none">○ Correct new coordinates for points L and M○ Reasoning component = 1 point<ul style="list-style-type: none">○ Correctly reasons why the two new coordinates of points L and M would make quadrilateral JKLM a square <p>Note: Numerical or graphical support that is consistent with the student's reasoning is acceptable for full credit.</p> <p>Sample Student Response:</p> <p>The given coordinates form a rectangle with sides JK and LM both 3.3 units and sides KL and JM both 5.7 units. If the coordinates of points L and M change so that quadrilateral $JKLM$ is a square, they should be lowered on the coordinate plane $5.7 - 3.3$, or 2.4 units. This will change sides KL and JM from 5.7 units to 3.3 units, making the resulting quadrilateral a square. Lowering points on a coordinate plane changes their y-coordinates. So, the new coordinates of point L would be $(-1.2, 6.3)$ since $8.7 - 2.4$, or 6.3. The new coordinates of point M would be $(-4.5, 6.3)$ since $8.7 - 2.4$, or 6.3 units.</p> <p>Notes:</p> <ul style="list-style-type: none">○ The student should receive credit for this part if the student chooses new coordinates for points L and M that are below points J and K, as long as the student shows or explains that the side lengths of all four sides are the same length.○ The student may receive a total of 1 point for Part B if the reasoning processes are correct but the student makes one or more computational errors resulting in incorrect answers or an incorrect conclusion.○ The student may receive the 1 computation point if the correct answer is computed but shows no work or insufficient work to indicate a correct reasoning process.
1	Student response includes 1 of the 2 elements.
0	Student response is incorrect or irrelevant.

#17 Rubric

Score	Description
3	<p>Student response includes the following 3 elements.</p> <ul style="list-style-type: none">• Computation component = 1 point<ul style="list-style-type: none">○ The student correctly determines the approximate number of people who will receive a small prize. Accept a range from 900 to 1,200 people.• Modeling component = 2 points<ul style="list-style-type: none">○ The student correctly models a valid estimation strategy for determining the number of people who will attend this year's fair. Accept a range of 14,000 to 17,000.○ The student correctly models finding the approximate number of people who will receive a prize. <p>Sample Student Response</p> <p>I saw that the attendance was increasing each year and found the average amount that it increased by each year. $(1,087 + 1,763 + 1,176)/3 = 4,026/3$ So I estimate that the attendance this year will increase by about 1,342 people and will be 14,646 people.</p> <p>20% of 14,646 is $0.20(14,468) = 2,929.2$</p> <p>1/3 of 2,929.2 is $(2,929.2) (1/3) = (2929.2)/3 = 976.4$</p> <p>So about 976 people will receive a small prize.</p> <p>Note: Accept other valid estimation strategies for determining this year's attendance.</p>
2	Student response includes 2 of the 3 elements.
1	Student response includes 1 of the 3 elements.
0	Student response is incorrect or irrelevant.