

Name: _____

Unit 2: Native American – Study Guide

What is on this test?

SOL 3a: First Americans

- What is archeology?
- Why is archeology important?
- Where is one of the oldest archaeological sites in the U.S. located?



SOL 3b: Early Native Americans

- In which areas did the American Indians live?
- What are some of the major American Indian tribes?
- Where do American Indians live today?

SOL 3c: Native Americans and Resources

- How did geography and climate affect the way American Indian groups met their basic needs?
- How did American Indians use natural, human and capital resources? (Provide examples of each type of resource)

What are different ways you can study?

1. Complete this study guide! My study guide is due on _____ and my test is on _____.
2. Use your title page (p.29) to quiz yourself.
 - a. Can you answer the questions with no notes? If yes, awesome! If not, use your binder to help you until you can answer all those questions without notes.
3. Review/study all the notes in your binder.
4. Go over your quizzes from this unit (p.35, 48, 49)
5. Make flashcards
6. Use your foldable (p.42)
7. Use the “test review page” on Ms. Boehl’s website to play videos, review games and read comics about the information on the test.
8. Have someone quiz you ☺

****Please see Ms. Boehl if you don’t know how to study and want help!!**

SOL 3a: Archaeology

(Use your notes on pages 32 & 33 to help you complete this section)

1. 18,000 years ago How long ago do archeologists think that Cactus Hill was settled?

2. What is archaeology (what do archaeologists study)?

Archaeology is the study of ancient people; it's the study of human behavior using artifacts

3. Beringia What is the name of the **land bridge** that scientists believe the First Americans used to come to North America?

4. Bering Strait What is the name of the **body of water** that now covers the land bridge that was used by First Americans to come to North America?

5. What do scientists not agree about First Americans?

Scientist do not agree HOW and WHY people first came to North America.

6. North America & Asia What two continents were connected by the land bridge that was used by First Americans?

7. What is an artifact?

An artifact is any object that was made or used by humans that can provide information about human behavior.

8. Why is Cactus Hill so important?

It is believed to be one of the oldest archaeological sites in North America.

9. 18,000 years ago How long ago do archeologists think that Cactus Hill was settled?

10. Where is Cactus Hill located?

Cactus Hill is located in southeastern Virginia near the Nottoway River.

SOL 3b: Native American Tribes

(Use your notes on pages 40 & 41 to help you complete this section)

1. Inuit This tribe lives in the Arctic region, where the temperature is below freezing much of the time.
2. Pueblo This tribe lived in the Southwest, in desert areas and area bordering cliffs and mountains
3. Lakota This tribe lived in houses of buffalo hides called teepees.
4. Iroquois This tribe hunted rabbit, deer and elk, fished and raised corn, squash, and beans.
5. Kwakiutl This tribe lived in the Pacific Northwest coast, characterized by a rainy, mild climate
6. Inuit The only tribe in the list that did NOT use plants and natural fibers for their clothing were the
7. Pueblo This tribe lived in the Southwest, in desert areas and area bordering cliffs and mountains
8. Kwakiutl This tribe lived in homes made of cedar and logs called plank houses.
9. Iroquois This tribe lived in homes made of wood called longhouses.
10. Inuit This tribe hunted reindeer and fished sea animals like whale, seal and walrus'.
11. Lakota This tribe hunted buffalo and used all of its parts.
12. Iroquois This tribe lived in the Eastern Woodlands.
13. Pueblo This tribe lived homes made of stone or bricks called adobes.
14. Lakota This tribe lived in the Great Plains which had dry grasslands.
15. Inuit This tribe made their homes out of blocks of ice called igloos.

****Please be sure to study the food, clothing, shelter, locations & climates of all the tribes. Everything you need to know may not be in your study guide****

True or False:

Circle your choice for each question.

16. The American Indians used natural resources from their environment to create clothing and shelters.

True

False

17. The buffalo was the main animal used by the Iroquois for survival.

True

False

18. Mostly, the Pueblo Indians lived in wigwams.

True

False

19. The Sioux/Lakota were located on the prairie or Great Plains.

True

False

20. The Pueblo were located in the desert in the Southwest of what is now the United States?

True

False

Matching:

Match the tribe with the correct area.

(A) Pueblo	(B) Kwakiutl	(C) Lakota/Sioux	(D) Inuit	(E) Iroquois
------------	--------------	------------------	-----------	--------------

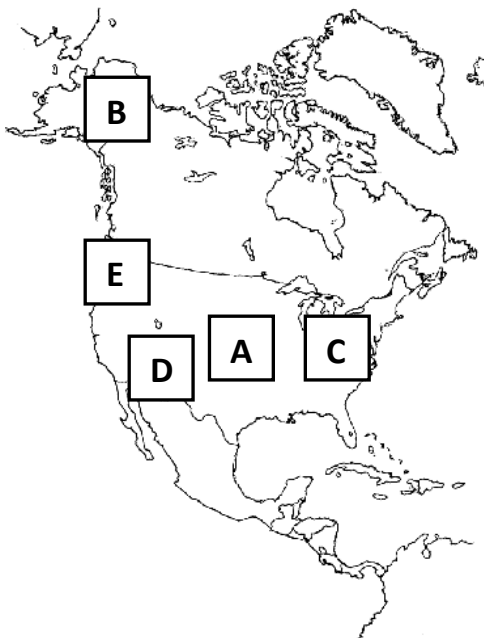
21. D Inhabited present-day Alaska and northern Canada. They lived in Arctic areas where the temperature is below freezing much of the year.

22. B Inhabited the Northwest Pacific coast; characterized by rainy, mild climate.

23. E Inhabited northeastern North America, the Eastern Woodlands, which is heavily forested.

24. C Inhabited the interior of the United States, call the Great Plains and is characterized by dry grasslands.

25. A Inhabited the southwestern United States in present-day New Mexico and Arizona; where they lived in desert areas bordering cliffs and mountains.



Write the name of the tribe that lives next to the letter that is on the map.

A: Lakota

B: Inuit

C: Iroquois

D: Pueblo

E: Kwakiutl



The people in the picture to the left are most likely from which Native American tribe?

Inuit

SOL 3C: Geography, climate & resources

(Use your notes on pages 45 & 46 to help you complete this section)

1. What is a natural resource?

Something that comes directly from nature; not man-made


2. What is a human resource?

A person who works to create a good or a service

3. What is a capital resource?

A good (product) created and used to make other goods and services; tools that can be used multiple times

Directions: Under each picture, write whether it is an example of a natural, human or capital resource.

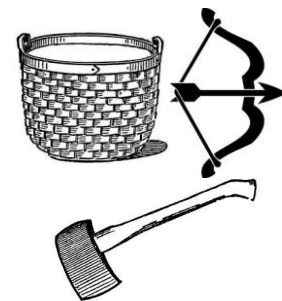


Natural



The person in this picture is what kind of resource?

Human



Capital