

Centre No.						Paper Reference						Surname	Initial(s)		
Candidate No.						5	5	4	0	H	/	3	H	Signature	

Paper Reference(s)

5540H/3H

Edexcel GCSE

Mathematics A (Linear) – 2540

Paper 3 (Non-Calculator)

Higher Tier

Monday 19 May 2008 – Morning

Time: 1 hour 45 minutes

Examiner's use only

--	--	--

Team Leader's use only

--	--	--



Materials required for examination

Ruler graduated in centimetres and millimetres, protractor, compasses, pen, HB pencil, eraser.
Tracing paper may be used.

Items included with question papers

Nil

Instructions to Candidates

In the boxes above, write your centre number, candidate number, your surname, initials and signature.

Check that you have the correct question paper.

Answer ALL the questions. Write your answers in the spaces provided in this question paper.

You must NOT write on the formulae page.

Anything you write on the formulae page will gain NO credit.

If you need more space to complete your answer to any question, use additional answer sheets.

Information for Candidates

The marks for individual questions and the parts of questions are shown in round brackets: e.g. (2).

There are 28 questions in this question paper. The total mark for this paper is 100.

There are 24 pages in this question paper. Any blank pages are indicated.

Calculators must not be used.

Advice to Candidates

Show all stages in any calculations.

Work steadily through the paper. Do not spend too long on one question.

If you cannot answer a question, leave it and attempt the next one.

Return at the end to those you have left out.

This publication may be reproduced only in accordance with Edexcel Limited copyright policy.
©2008 Edexcel Limited.

Printer's Log. No.

N30992A

W850/R5540H/57570 6/6/3/3



Turn over

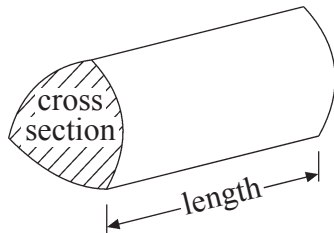
edexcel 
advancing learning, changing lives

GCSE Mathematics (Linear) 2540

Formulae: Higher Tier

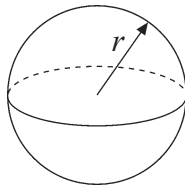
You must not write on this formulae page.
Anything you write on this formulae page will gain NO credit.

Volume of a prism = area of cross section \times length



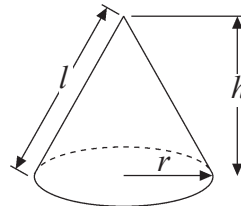
Volume of sphere = $\frac{4}{3}\pi r^3$

Surface area of sphere = $4\pi r^2$

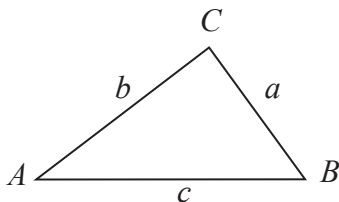


Volume of cone = $\frac{1}{3}\pi r^2 h$

Curved surface area of cone = $\pi r l$



In any triangle ABC



The Quadratic Equation

The solutions of $ax^2 + bx + c = 0$
where $a \neq 0$, are given by

$$x = \frac{-b \pm \sqrt{(b^2 - 4ac)}}{2a}$$

Sine Rule $\frac{a}{\sin A} = \frac{b}{\sin B} = \frac{c}{\sin C}$

Cosine Rule $a^2 = b^2 + c^2 - 2bc \cos A$

Area of triangle = $\frac{1}{2} ab \sin C$



Answer ALL TWENTY EIGHT questions.

Write your answers in the spaces provided.

You must write down all stages in your working.

You must NOT use a calculator.

1. Here are the ingredients needed to make 8 pancakes.

<p style="text-align: center;">Pancakes</p> <p>Ingredients to make 8 pancakes</p> <p>300 ml milk 1 egg 120 g flour 5 g butter</p>

Jacob makes 24 pancakes.

- (a) Work out how much milk he needs.

..... ml
(2)

Cathie makes 12 pancakes.

- (b) Work out how much flour she needs.

..... g
(2)

(Total 4 marks)

Q1



2. Kaysha has a part-time job.
She is paid £5.40 for each hour she works.
Last week Kaysha worked for 24 hours.

Work out Kaysha's total pay for last week.

£

Q2

(Total 3 marks)


3. Here are the ages, in years, of 15 teachers.

35 52 42 27 36

23 31 41 50 34

44 28 45 45 53

Draw an ordered stem and leaf diagram to show this information.
You must include a key.



Key:

Q3

(Total 3 marks)



4. Using the information that

$$4.8 \times 34 = 163.2$$

write down the value of

(a) 48×34

.....
(1)

(b) 4.8×3.4

.....
(1)

(c) $163.2 \div 48$

.....
(1)

(Total 3 marks)

Q4

5.

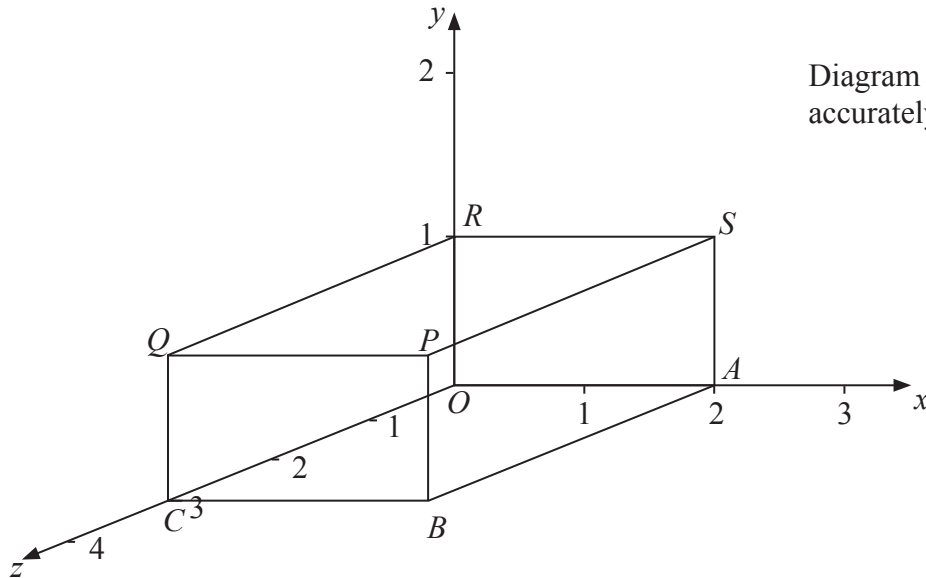


Diagram NOT accurately drawn

A cuboid is shown on a 3-dimensional grid.

(a) Write down the letter of the point with coordinates (2, 1, 0).

.....
(1)

(b) Write down the coordinates of the point P.

(..... , ,)
(1)

(Total 2 marks)

Q5



6. This rule is used to work out the total cost, in pounds, of hiring a carpet cleaner.

Multiply the number of days' hire by 4
Add 6 to your answer

Peter hires a carpet cleaner.
The total cost is £18

(a) Work out for how many days he hires the carpet cleaner.

..... days
(2)

(b) Write down an expression, in terms of n , for the total cost, in pounds, of hiring a carpet cleaner for n days.

.....
(2)

(Total 4 marks)

Q6



7.

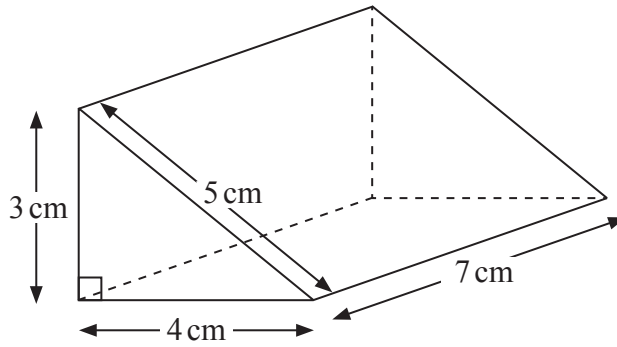


Diagram **NOT** accurately drawn

Work out the total surface area of the triangular prism.
Give the units with your answer.

.....

(Total 4 marks)

Q7

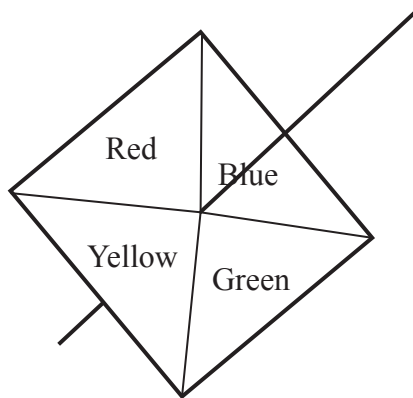


8. Work out an estimate for $\frac{302 \times 9.96}{0.51}$

Q8

(Total 3 marks)

9. Here is a 4-sided spinner.



The sides of the spinner are labelled Red, Blue, Green and Yellow.

The spinner is biased.

The table shows the probability that the spinner will land on each of the colours Red, Yellow and Green.

Colour	Red	Blue	Green	Yellow
Probability	0.2		0.3	0.1

Work out the probability the spinner will land on Blue.

Q9

(Total 2 marks)



10. (a) Simplify $4p \times 5q$

.....
(1)

(b) Simplify $d \times d \times d \times d$

.....
(1)

(c) Expand $4(3a - 7)$

.....
(2)

(d) Expand and simplify $2(2n + 3) + 3(n + 1)$

.....
(2)

(e) Simplify $t \times t^2$

.....
(1)

(f) Simplify $m^5 \div m^3$

.....
(1)

Q10

(Total 8 marks)



11. In the space below, use ruler and compasses to **construct** an equilateral triangle with sides of length 6 centimetres.
You must show all your construction lines.

One side of the triangle has already been drawn for you.



(Total 2 marks)

Q11

12. $-2 \leq x < 3$
 x is an integer.

Write down all the possible values of x .



(Total 2 marks)

Q12



13. (a) Write down the reciprocal of 4

.....
(1)

(b) Work out the value of $2\frac{4}{5} - 1\frac{3}{4}$

Give your answer as a fraction in its simplest form.

.....
(3)

(c) Sundas says that $4\frac{1}{3}$ is equal to 4.3

Sundas is **wrong**.
Explain why.

.....

.....

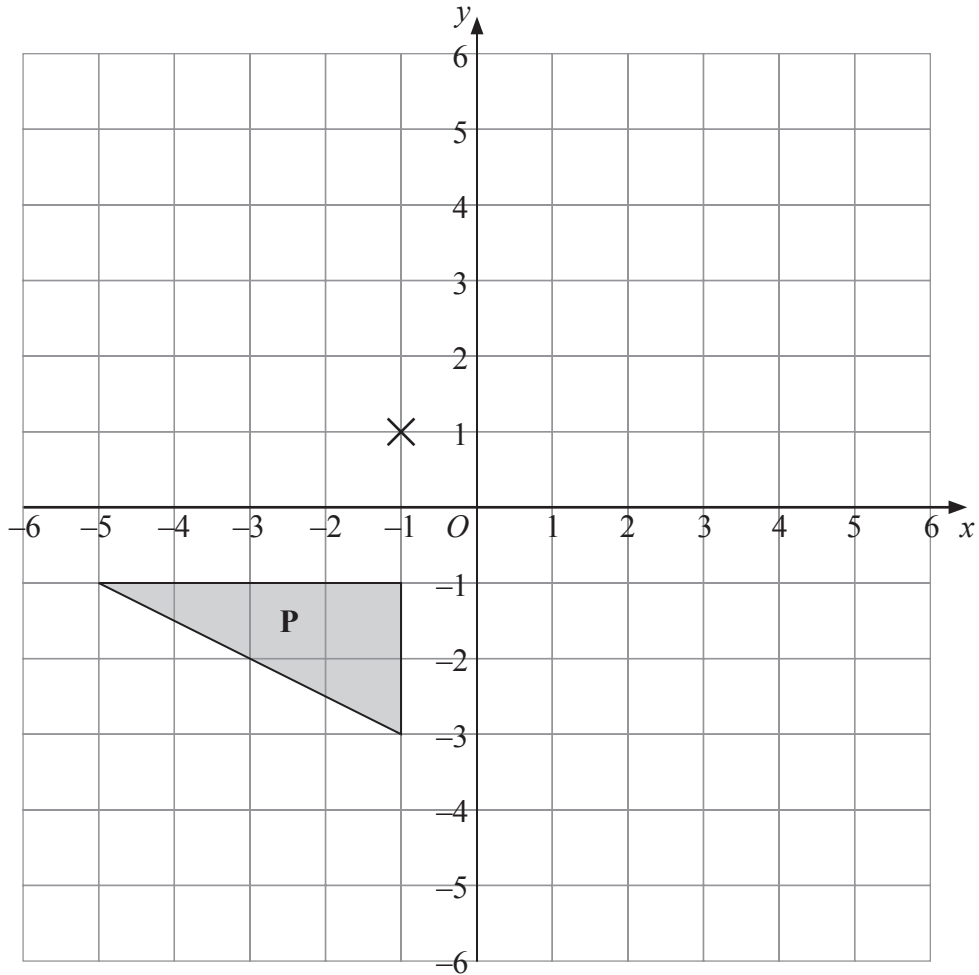
(1)

(Total 5 marks)

Q13



14.



(a) Rotate triangle **P** 180° about the point $(-1, 1)$.

Label the new triangle **A**.

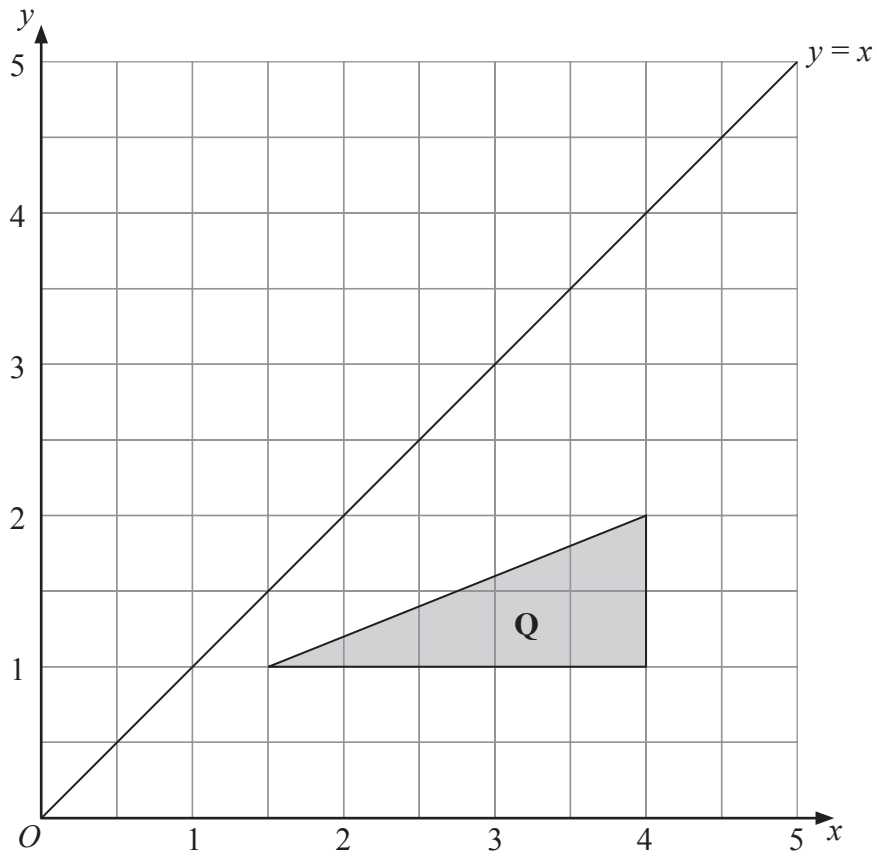
(2)

(b) Translate triangle **P** by the vector $\begin{pmatrix} 6 \\ -1 \end{pmatrix}$.

Label the new triangle **B**.

(1)





(c) Reflect triangle Q in the line $y = x$.

Label the new triangle C .

(2)

Q14

(Total 5 marks)



15. (a) Expand $x(3x - 5y)$

.....
(2)

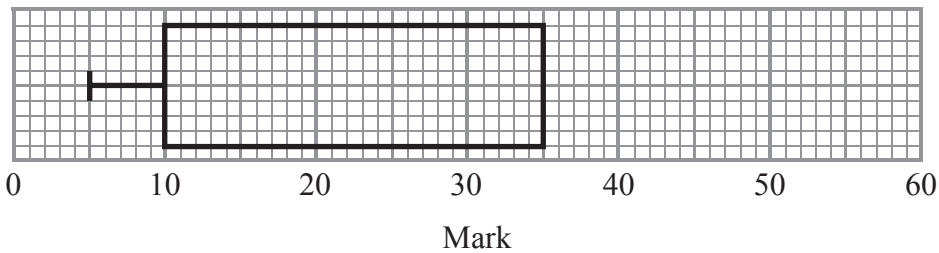
(b) Factorise $x^2 - 36$

.....
(1)

(Total 3 marks)

Q15

16. The incomplete box plot and table show some information about some marks.



	Mark
Lowest mark	5
Lower quartile	
Median	30
Upper quartile	35
Highest mark	55

(a) Use the information in the table to complete the box plot. (2)

(b) Use the information in the box plot to complete the table. (1)

(Total 3 marks)

Q16



17. (a) Write 6.4×10^4 as an ordinary number.

.....
(1)

(b) Write 0.0039 in standard form.

.....
(1)

(c) Write 0.25×10^7 in standard form.

.....
(1)

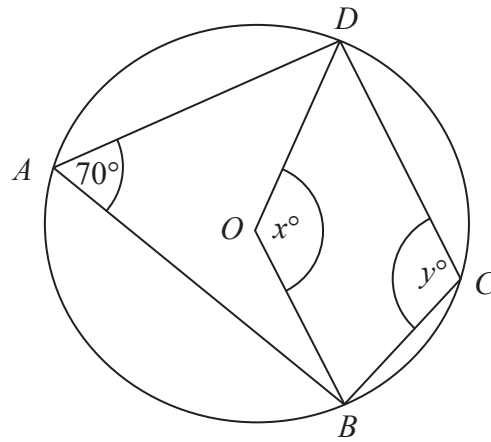
Q17

(Total 3 marks)



18.

Diagram **NOT** accurately drawn



In the diagram, A , B , C and D are points on the circumference of a circle, centre O .
 Angle $BAD = 70^\circ$.
 Angle $BOD = x^\circ$.
 Angle $BCD = y^\circ$.

(a) (i) Work out the value of x .

$x = \dots\dots\dots$

(ii) Give a reason for your answer.

.....

(2)

(b) (i) Work out the value of y .

$y = \dots\dots\dots$

(ii) Give a reason for your answer.

.....

(2)

(Total 4 marks)

Q18



19. Solve the simultaneous equations.

$$\begin{aligned}2x + 3y &= 0 \\ x - 3y &= 9\end{aligned}$$

$x = \dots\dots\dots$, $y = \dots\dots\dots$

(Total 3 marks)

Q19

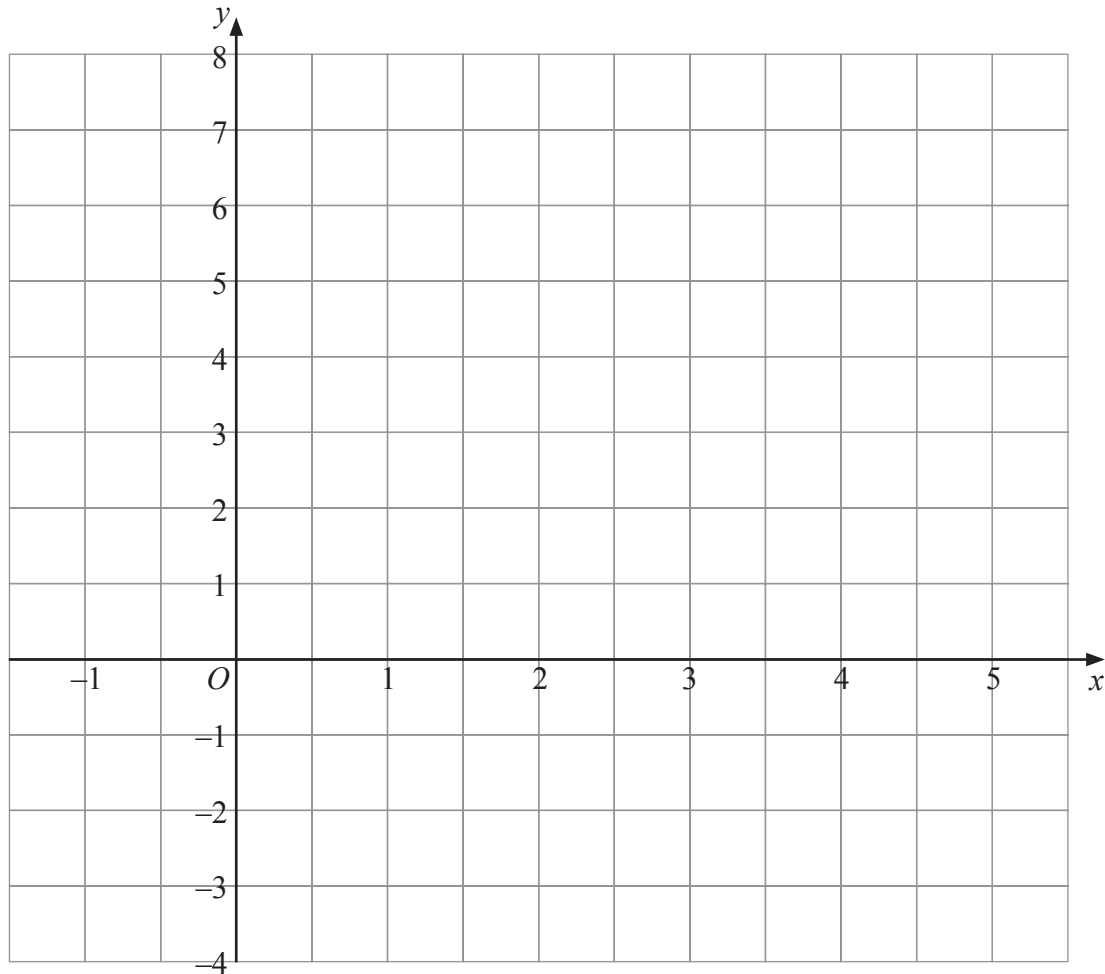


20. (a) Complete the table of values for $y = x^2 - 4x + 2$

x	-1	0	1	2	3	4	5
y		2	-1		-1		7

(2)

(b) On the grid, draw the graph of $y = x^2 - 4x + 2$



(2)

Q20

(Total 4 marks)



22. Make b the subject of the formula $a = \frac{2-7b}{b-5}$

.....

(Total 4 marks)

Q22

23. (a) Rationalise the denominator of $\frac{1}{\sqrt{3}}$

.....

(1)

(b) Expand $(2+\sqrt{3})(1+\sqrt{3})$

Give your answer in the form $a+b\sqrt{3}$, where a and b are integers.

.....

(2)

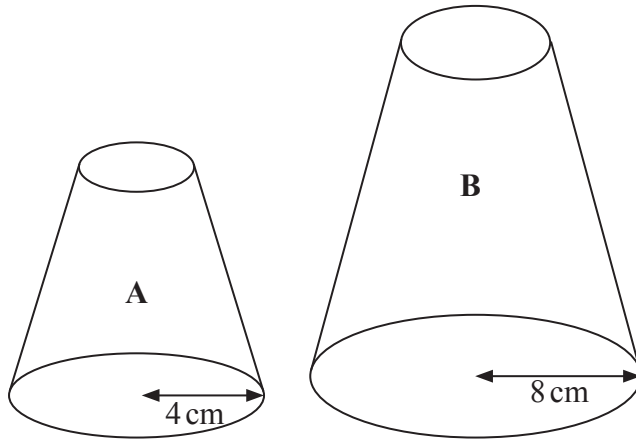
(Total 3 marks)

Q23



24.

Diagrams **NOT** accurately drawn



Two solid shapes, **A** and **B**, are mathematically similar.
 The base of shape **A** is a circle with radius 4 cm.
 The base of shape **B** is a circle with radius 8 cm.

The surface area of shape **A** is 80 cm^2 .

(a) Work out the surface area of shape **B**.

..... cm^2
 (2)

The volume of shape **B** is 600 cm^3 .

(b) Work out the volume of shape **A**.

..... cm^3
 (2)

Q24

(Total 4 marks)



25.

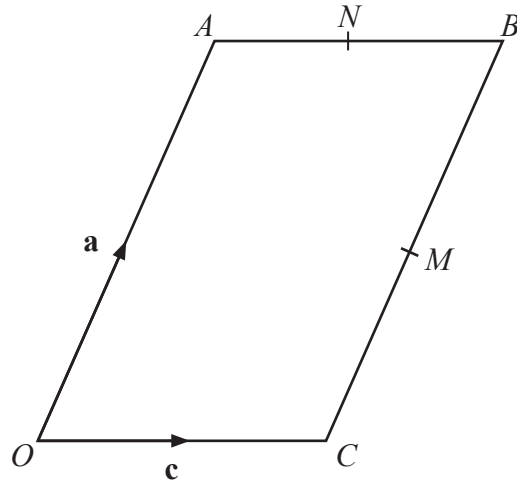


Diagram **NOT** accurately drawn

$OACB$ is a parallelogram.
 M is the midpoint of CB .
 N is the midpoint of AB .

$$\vec{OA} = \mathbf{a}$$

$$\vec{OC} = \mathbf{c}$$

(a) Find, in terms of \mathbf{a} and/or \mathbf{c} , the vectors

(i) \vec{MB} ,

.....

(ii) \vec{MN} .

.....

(2)

(b) Show that CA is parallel to MN .

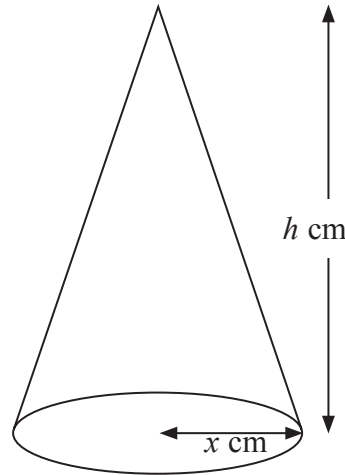
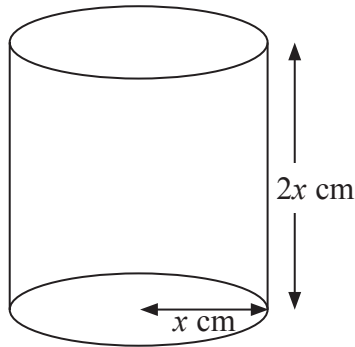
(2)

Q25

(Total 4 marks)



26.



Diagrams **NOT** accurately drawn

A cylinder has base radius x cm and height $2x$ cm.

A cone has base radius x cm and height h cm.

The volume of the cylinder and the volume of the cone are equal.

Find h in terms of x .

Give your answer in its simplest form.

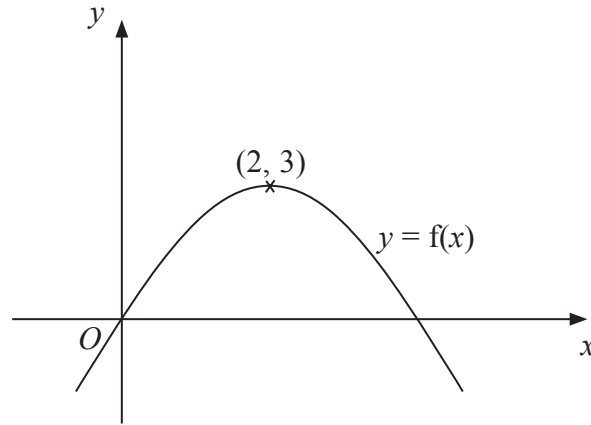
$h = \dots\dots\dots$

(Total 3 marks)

Q26



27.



The diagram shows part of the curve with equation $y = f(x)$.
The coordinates of the maximum point of this curve are $(2, 3)$.

Write down the coordinates of the maximum point of the curve with equation

(a) $y = f(x - 2)$

(.....,)
(1)

(b) $y = 2f(x)$

(.....,)
(1)

Q27

(Total 2 marks)

28. Simplify fully $\frac{x^2 + x - 6}{x^2 - 7x + 10}$

.....

(Total 3 marks)

Q28

TOTAL FOR PAPER: 100 MARKS

END

