



$3 + 1 = 2 + 2 =$



Patterns and Relationships



$= 2 + 2 = 1 + 3$

My name _____



Copyright © 2009 3P Learning. All rights reserved.

First edition printed 2009 in Australia.

A catalogue record for this book is available from 3P Learning Ltd.

ISBN 978-1-921860-11-9

Ownership of content The materials in this resource, including without limitation all information, text, graphics, advertisements, names, logos and trade marks (Content) are protected by copyright, trade mark and other intellectual property laws unless expressly indicated otherwise.

You must not modify, copy, reproduce, republish or distribute this Content in any way except as expressly provided for in these General Conditions or with our express prior written consent.

Copyright Copyright in this resource is owned or licensed by us. Other than for the purposes of, and subject to the conditions prescribed under, the Copyright Act 1968 (Cth) and similar legislation which applies in your location, and except as expressly authorised by these General Conditions, you may not in any form or by any means: adapt, reproduce, store, distribute, print, display, perform, publish or create derivative works from any part of this resource; or commercialise any information, products or services obtained from any part of this resource.

Where copyright legislation in a location includes a remunerated scheme to permit educational institutions to copy or print any part of the resource, we will claim for remuneration under that scheme where worksheets are printed or photocopied by teachers for use by students, and where teachers direct students to print or photocopy worksheets for use by students at school. A worksheet is a page of learning, designed for a student to write on using an ink pen or pencil. This may lead to an increase in the fees for educational institutions to participate in the relevant scheme.

Published 3P Learning Ltd

For more copies of this book, contact us at: www.3plearning.com/contact

Designed 3P Learning Ltd

Although every precaution has been taken in the preparation of this book, the publisher and authors assume no responsibility for errors or omissions. Neither is any liability assumed for damages resulting from the use of this information contained herein.

Series B – Patterns and Relationships

Contents

Topic 1 – Patterns and rules (pp. 1–16)

Date completed

- continuing patterns _____
- repeating patterns _____
- translating patterns _____
- body patterns _____
- number patterns _____
- growing patterns _____
- growing number patterns _____

Topic 2 – Number relationships (pp. 17–32)


- equivalence _____
- equivalent amounts _____
- addition combinations _____
- ordered lists _____
- equivalent statements _____
- turnarounds _____
- zero _____

Series Author:

Rachel Flenley

Patterns and rules – continuing patterns

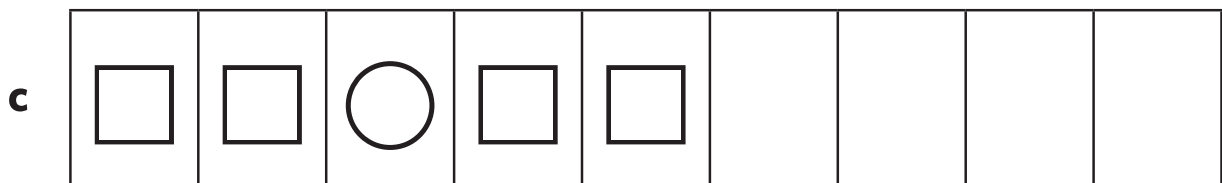
Patterns are all around us in life.



They are also a very important part of math.

- 1 Tell someone what you think a pattern is. You might like to use pattern blocks to help you explain.

- 2 Look at these patterns. Say them out loud. Now continue them.

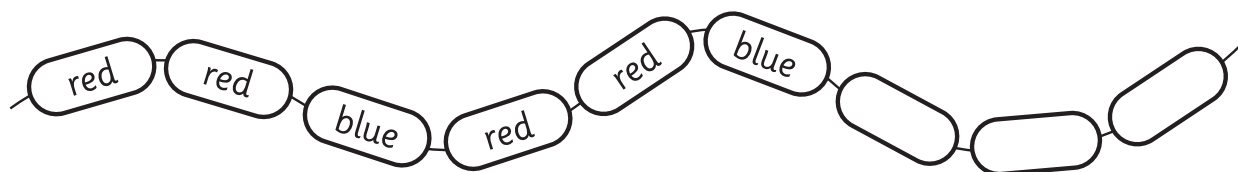


- 3 Make up your own pattern. Record it below.

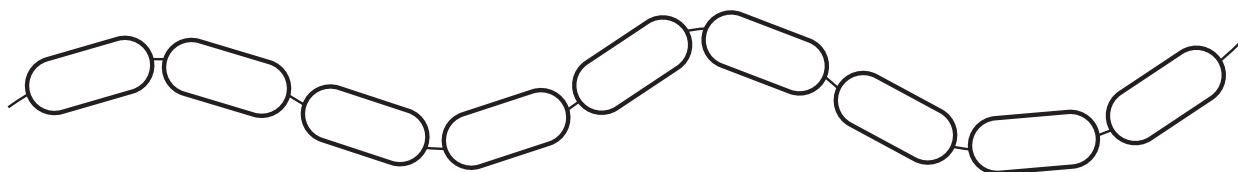
--	--	--	--	--	--	--	--	--

Patterns and rules – continuing patterns

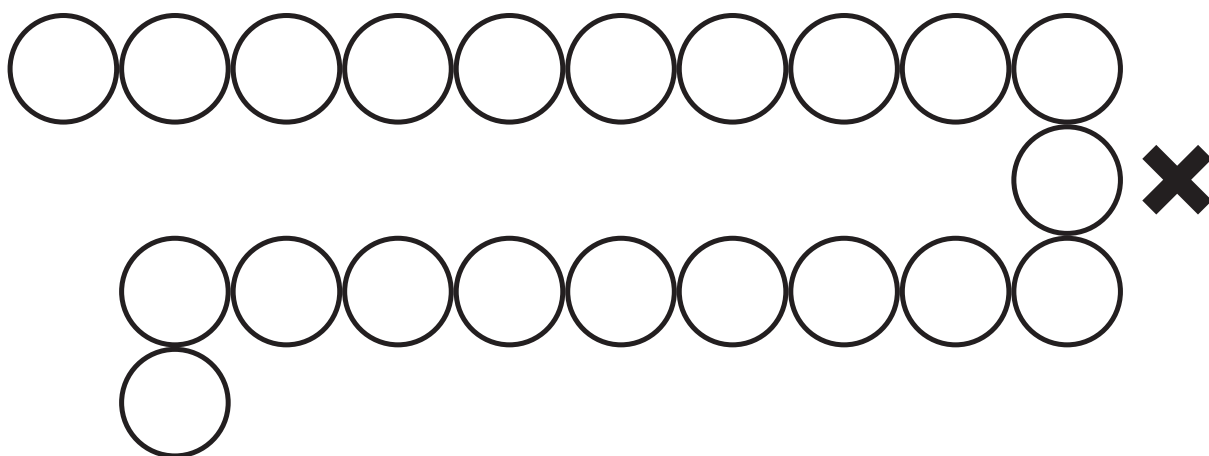
1 Say the pattern out loud. Colour and continue the pattern.



2 Make your own colour pattern.



3 Colour the circles to make a pattern. Stop at the cross.
Ask a partner to continue your pattern.

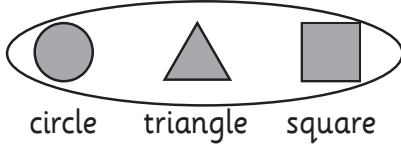


Patterns and rules – repeating patterns

Patterns follow very strict rules. Say the shape pattern out loud.




The rule is



The pattern repeats
this rule over and over.

1 Say the pattern out loud. What is the rule?

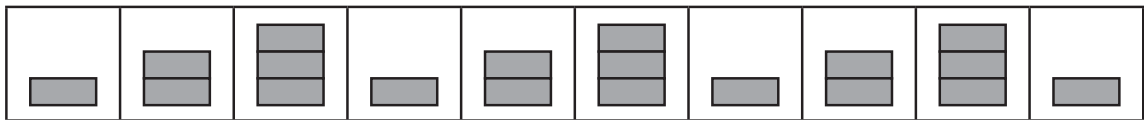
a




The rule is



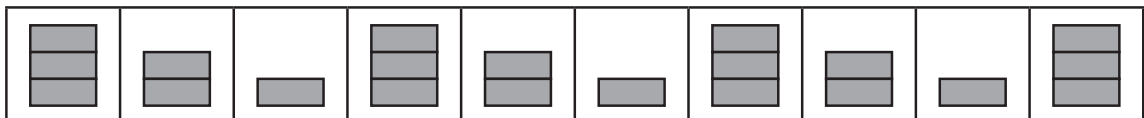
b




The rule is



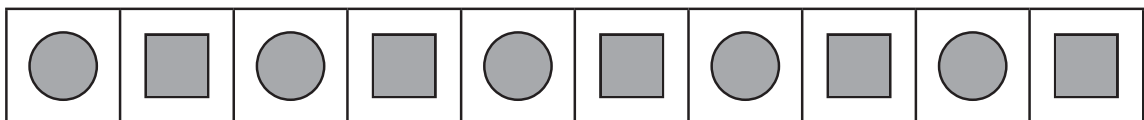
c




The rule is



d

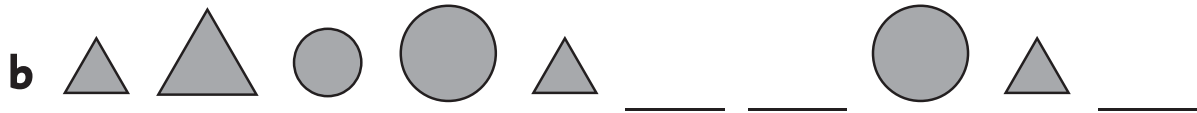


The rule is




Patterns and rules – repeating patterns

1 Parts of these patterns are missing. Draw the missing shapes.



2 Use ● ▲ ■ pattern blocks and make up a repeating pattern across your table. Then take a few blocks out. Ask a partner to work out which blocks are missing and to put them back in.



3 Record your pattern rule below.

Patterns and rules – repeating patterns

You will need: 3 different pattern blocks such as



What to do:

Using your 3 different pattern blocks, think of a rule and make a repeating pattern. Record it here.

--	--	--	--	--	--	--	--	--

What to do next:

How many **different** repeating patterns with the blocks can you make? Each one will have a different rule. You don't have to use all 3 blocks in your pattern if you don't want to. Record them here.

--	--	--	--	--	--	--	--	--

--	--	--	--	--	--	--	--	--

--	--	--	--	--	--	--	--	--

--	--	--	--	--	--	--	--	--

--	--	--	--	--	--	--	--	--

Patterns and rules – translating patterns

We can make our patterns speak in different languages.

This pattern goes ☆ ☆ △ ☆ ☆ △ Say it out loud.

We can change it to 🍎 🍎 🍊 🍎 🍎 🍊 Say it out loud.

Or 🚗 🚗 🚲 🚗 🚗 🚲 Say it out loud.

When you say the patterns, does the rhythm stay the same?

1 a Colour the △s red and the □s blue.



b Now colour the △s yellow and the □s green.



Congratulations! You have made this pattern speak another language.

2 This time change the shapes. Plan it.

I will change the △ to a ____

I will change the □ to a ____



Patterns and rules – translating patterns (continued)

3 Make your own pattern, then make it speak another language.

--	--	--	--	--	--	--	--	--	--

--	--	--	--	--	--	--	--	--	--

You will need:




a partner



pattern blocks

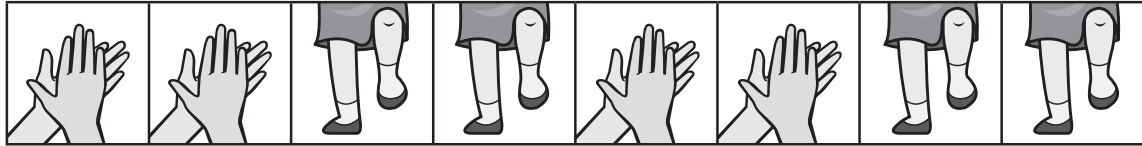
What to do:

Make a repeating pattern with blocks. Now ask your partner to make your pattern speak another language with different blocks.



Patterns and rules – body patterns


We can also make patterns with our bodies or voices.
Can you follow this pattern with your hands and feet?



We could record this pattern like this.



means



means



1 Work with a partner and design a body pattern using 2 moves.

2 Find a way to record your pattern.



means



means



Patterns and rules – number patterns

Numbers can form patterns too. What pattern is this?

10 20 30 40 50 60 70 80 90 100

It is a 10s pattern.

- 1 Fill in the missing numbers. Say the numbers you write out loud as you go.

1	2	3	4		6	7	8	9	
11	12	13	14		16	17	18	19	
21	22	23	24		26	27	28	29	
31	32	33	34		36	37	38	39	
41	42	43	44		46	47	48	49	

What pattern is it? It is a s pattern.

- 2 Count and fill in the numbers.



2



4



6











14



What pattern is it? It is a s pattern.










Patterns and rules – number patterns

We can show patterns using shapes and numbers.










							
1	2	1	2	1	2	1	2

1 Write the numbers and say the patterns out loud.

a

								
1	2							





b

								
3	2							

2 Draw faces to match the number pattern.

1	3	1	3	1	3	1	3

Patterns and rules – number patterns

You will need:  a partner  coloured pencils  counters
 sticky notes or labels

What to do:

Choose 2 numbers. Write each number on its own sticky note.

Do this 4 times. Spread the sticky notes out in a pattern.

Ask your partner to make your number pattern using counters.

Record some of the pattern below.


--	--	--	--	--	--	--	--

--	--	--	--	--	--	--	--

What to do next:

Now make a number pattern using counters.

Ask your partner to write the number pattern on sticky notes and place them below your pattern to match.



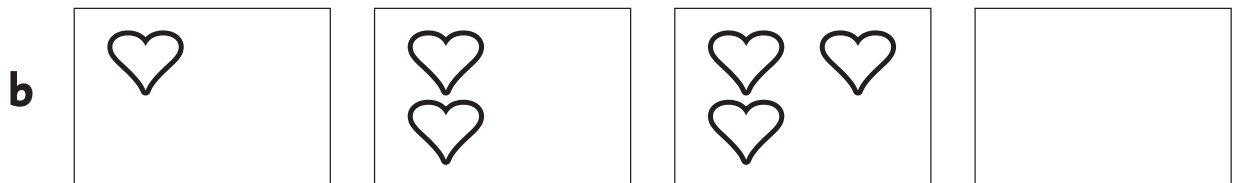
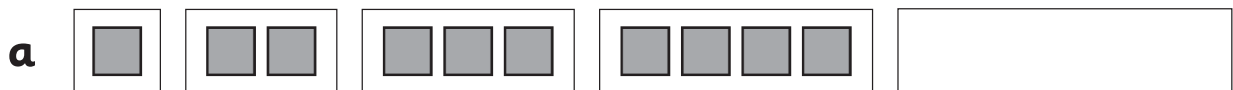
Patterns and rules – growing patterns

Patterns can grow. Look at this shape pattern.



It is getting bigger 1 ● at a time.

1 Draw the next part of each growing pattern.



2 Make your own growing pattern with blocks. Record it here.

Patterns and rules – growing patterns

Growing patterns follow very strict rules.



The rule for this growing pattern is 'add 1 .

You will need:  a partner  counters

What to do:

Make your own 'add 1 ' pattern using counters.

Put out 1 counter. 

Then put out 2 counters.  








Then put out 3 counters.   

Keep going. How big can you make your pattern grow?











Count the number of counters in your last set and write it here.

What to do next:

What is the rule?

a       

The rule is
add _____

b          


The rule is
add _____

Patterns and rules – growing patterns


You will need:  a partner  coloured pencils

What to do:


Each day this apple tree grows more apples according to the secret rule. We have shown you the apples the tree has on Days 3, 4 and 5. Work out the secret rule and draw the apples that we would see on Days 6, 7 and 8.




Day 3




Day 4




Day 5



Day 6



Day 7



Day 8

What to do next:

What is the secret rule?

Patterns and rules – growing number patterns

Number patterns can also grow. The rule for this pattern is $+ 1$.



1 What is the rule?



The rule is $+ \underline{\hspace{2cm}}$



The rule is $+ \underline{\hspace{2cm}}$



The rule is $+ \underline{\hspace{2cm}}$

2 The rule is $+2$. Write the numbers in the stars.



Patterns and rules – growing number patterns

You will need:  a partner  counters

What to do:

- a** Think of a rule for a growing number pattern. Write it down here and tell your teacher what it is. Don't let your partner see it!

The rule is

--	--

- b** Now start a counter pattern following your rule.

Ask your partner if they can work out your rule. They then build onto your pattern. Are they right? If not, give them some clues until they get it.

- c** Swap jobs.
-

What to do next:

Together, see if you can work out the rules of these patterns. You can use counters to help. A hundreds chart may also come in handy. Colour in the numbers on your chart and find the pattern.



The rule is _____



The rule is _____


Number relationships – equivalence

This is the equals sign $=$ It means the **same**.


Things can be the **same** or $=$ in lots of ways.



same length



same weight



same height

How else can things be the same?


1 Draw:

a A person who is the same height.



$=$

b A ribbon that is the same length.



$=$

2 Look at these lines.



3 black lines $=$ 1 grey line.

a Draw 2 lines to $=$ this grey line.




b Draw 4 lines to $=$ this black line



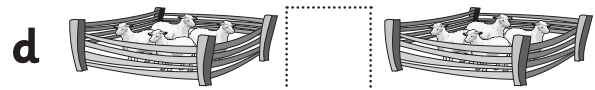
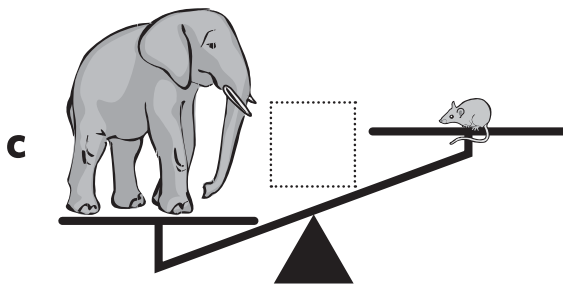

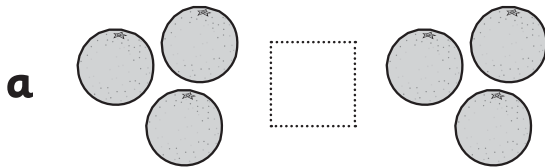
equals = the same as

Number relationships – equivalence


If things are not the same or equal, we use this sign. \neq




- 1 If they are the same write =
If they are not the same write \neq



- 2 You and your brother were given some fruit.



This is your brother's plate.



This is your plate.

Did you get the same as your brother? If not, draw some more fruit to make the plates **equal**.

Number relationships – equivalent amounts

In math we often use $=$ when we are talking about the same **amount** of things.










Are the amounts on both sides the same?








Yes, they have the same amount. 2 and 2 are the same as 4.

- 1 Write the missing numbers and draw $=$ if both boxes have the same amount. Draw \neq if they don't have the same amount.








a

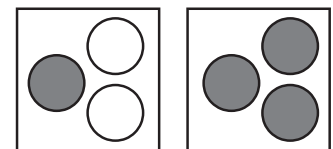
b

c




			
			

- 2 What about these boxes?
Do they have the same number of counters?



Write or tell someone what you think and why.

Number relationships – equivalent amounts

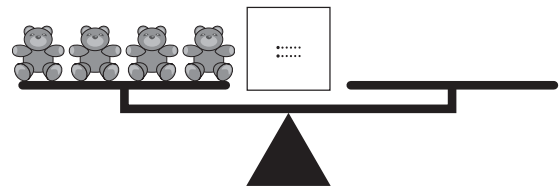
You will need:  a partner  a balance scale
 animal or teddy counters (same size)

What to do:

Put 4 blue teddies on one side of your scales. Now put 2 red and 2 yellow teddies on the other side.



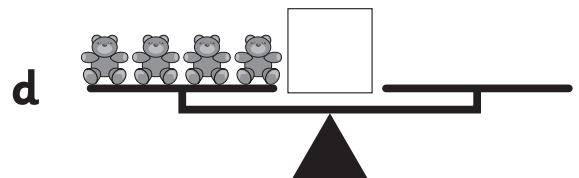

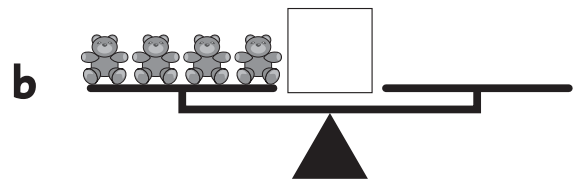
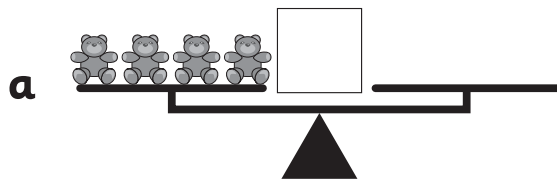
a Do they balance the blue ones?

b If they do, draw them on the other side of the scale. This means they are the same or $=$. Write $=$ in the middle.



What to do next:

Find some other amounts that are the same as 4. Record them on the scales with coloured crosses. Try 1 red and 3 green to start off with.

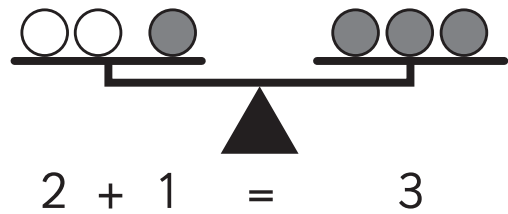


Number relationships – equivalent amounts

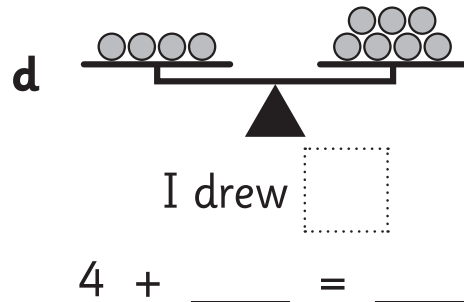
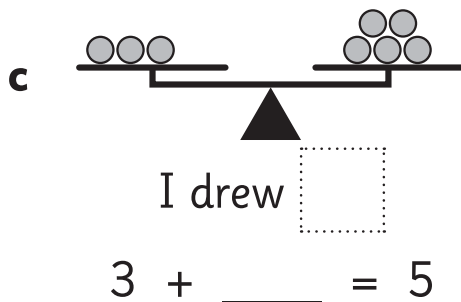
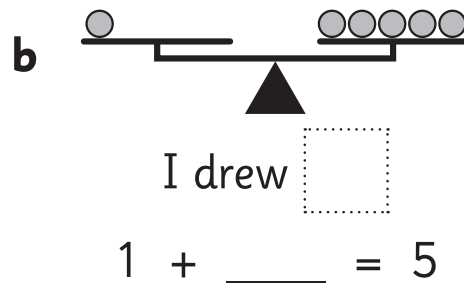
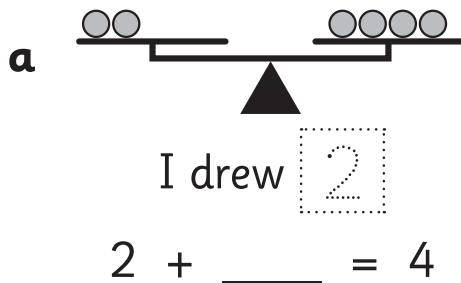
These sides are equal because they both have the **same amount**.

2 and 1 is the same as 3.

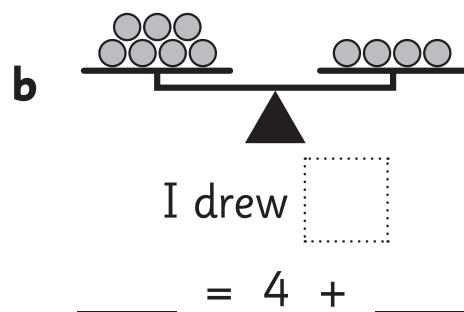
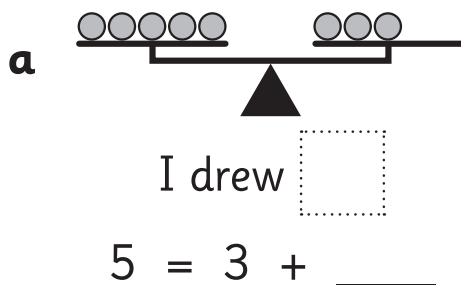
We can write this as:



- 1 Draw more counters on the **left** side to make the sides equal. Finish the problems.



- 2 Draw more counters on the **right** side to make the sides equal. Do you notice anything? Tell a partner.



Number relationships – addition combinations

We can make amounts in different ways. Look at 3.

We could use 3 grey counters and no white counters.

 $3 + 0 = 3$

We could use 2 grey counters and 1 white counter.

 $2 + 1 = 3$

We could use 1 grey counter and 2 white counters.

 $1 + 2 = 3$


We could use 0 grey counters and 3 white counters.

 $0 + 3 = 3$

You will need:  a partner  counters in 2 colours

What to do:

How many different ways can you and your partner find to make 5? Record them here.



Number relationships – addition combinations

- 1 You will need a black pencil and a red pencil. Colour the counters to help you find the missing numbers in these sentences. The first one has been done for you.

B **R**

a $6 + \underline{\text{0}} = 6$ **B** **B** **B** **B** **B** **B**

b $5 + \underline{\quad} = 6$ ☐ ☐ ☐ ☐ ☐ ☐

c $4 + \underline{\quad} = 6$ ☐ ☐ ☐ ☐ ☐ ☐

d $3 + \underline{\quad} = 6$ ☐ ☐ ☐ ☐ ☐ ☐

e $2 + \underline{\quad} = 6$ ☐ ☐ ☐ ☐ ☐ ☐

f $1 + \underline{\quad} = 6$ ☐ ☐ ☐ ☐ ☐ ☐

g $0 + \underline{\quad} = 6$ ☐ ☐ ☐ ☐ ☐ ☐

h What patterns do you notice?

-
- 2 What about if you used **3** colours instead? How could you make 6 using green, red and black pencils? Show 2 different ways.

1st way ☐ ☐ ☐ ☐ ☐ ☐ $\underline{\quad} + \underline{\quad} + \underline{\quad} = \underline{\quad}$

2nd way ☐ ☐ ☐ ☐ ☐ ☐ $\underline{\quad} + \underline{\quad} + \underline{\quad} = \underline{\quad}$



Number relationships – ordered lists

You will need:  scissors



What to do:

Cut out the kids and put them all on the climbing frame.



We can record this in the table like this. ----->

What to do next:

Now put 1 kid onto the slide.
We can record it like this. ----->

How many different ways
can you arrange the kids?
Record it in the table.

Monkey bars	Slide
5	0
4	1

Number relationships – ordered lists


You will need:  a partner  6 counters  6 stickers

What to do:

How many different ways can you make 6? Put stickers on one side of the counters. Throw the counters up in the air.

Sticker up	Sticker down

Each time you come up with a different combination, record it in the table. If you have it already, just toss again.



What to do next:

Write the different ways in order. Do you notice any patterns?

Sticker up	Sticker down

Number relationships – equivalent statements


Lucy has 3 flowers in 1 hand and 2 flowers in the other. She has 5 flowers altogether.

$$3 + 2 = 5$$



Hung has 4 flowers in 1 hand and 1 flower in the other. He also has 5 flowers.

$$4 + 1 = 5$$




They both have 5 flowers. They are the same or equal.

$$3 + 2 = 4 + 1$$

1 Draw the flowers. Finish the number sentences.

a Stacey has **5** flowers in one hand and **3** in the other hand.



$$5 + 3 = \underline{\quad}$$

Dan has **4** flowers in one hand and **4** in the other hand.




$$4 + 4 = \underline{\quad}$$

$$5 + 3 = 4 + 4$$

$$\text{They both} = \underline{\quad}$$

b Tyler has **2** flowers in one hand and **2** in the other hand.



$$2 + \underline{\quad} = \underline{\quad}$$

Ella has **3** flowers in one hand and **1** in the other hand.






$$3 + \underline{\quad} = \underline{\quad}$$

$$2 + \underline{\quad} = 3 + \underline{\quad}$$




$$\text{They both} = \underline{\quad}$$

Number relationships – equivalent statements

What is one way to make 5?


$$4 + 1 = 5$$

What is another way to make 5?


$$2 + 3 = 5$$


They both make 5 so they are
the same as each other.

$$4 + 1 = 2 + 3$$

You will need:  a partner  counters

What to do:

Choose one way to make 6. Show your partner. Ask them to find a different way to make 6. Record them both here.



6	$\underline{\quad\quad} + \underline{\quad\quad} = \underline{\quad\quad} + \underline{\quad\quad}$
---	---

What to do next:

Find 2 ways to make these numbers. Record them both here.

a

8	$\underline{\quad\quad} + \underline{\quad\quad} = \underline{\quad\quad} + \underline{\quad\quad}$
---	---

b

10	$\underline{\quad\quad} + \underline{\quad\quad} = \underline{\quad\quad} + \underline{\quad\quad}$
----	---

Number relationships – turnarounds

Does it matter in which order we **add** numbers?

- 1 Finish these addition problems. Circle the pair if the answers are the same.

a $4 + 1 = \underline{5}$

$1 + 4 = \underline{5}$

b $7 + 2 = \underline{\quad}$

$2 + 7 = \underline{\quad}$

c $3 + 6 = \underline{\quad}$

$6 + 3 = \underline{\quad}$

d $5 + 3 = \underline{\quad}$

$3 + 5 = \underline{\quad}$

e $1 + 2 = \underline{\quad}$

$2 + 1 = \underline{\quad}$

f $4 + 3 = \underline{\quad}$

$3 + 4 = \underline{\quad}$

- g** What do you notice?

- 2 Fill in the missing numbers in these turnarounds.

a $2 + 3 = 5$

$3 + \underline{\quad} = 5$

b $6 + 2 = \underline{\quad}$

$2 + \underline{\quad} = \underline{\quad}$

c $4 + 2 = \underline{\quad}$

$\underline{\quad} + \underline{\quad} = 6$

d $1 + 3 = \underline{\quad}$

$\underline{\quad} + \underline{\quad} = \underline{\quad}$

Number relationships – turnarounds

You will need:



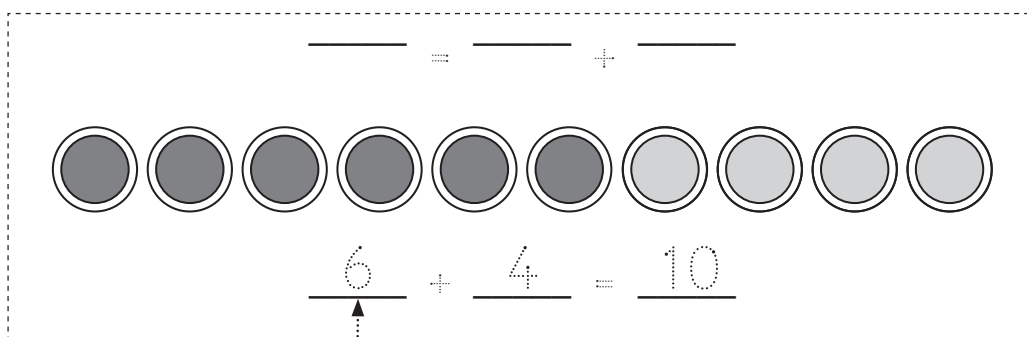
red and blue stickers or coloured pencils



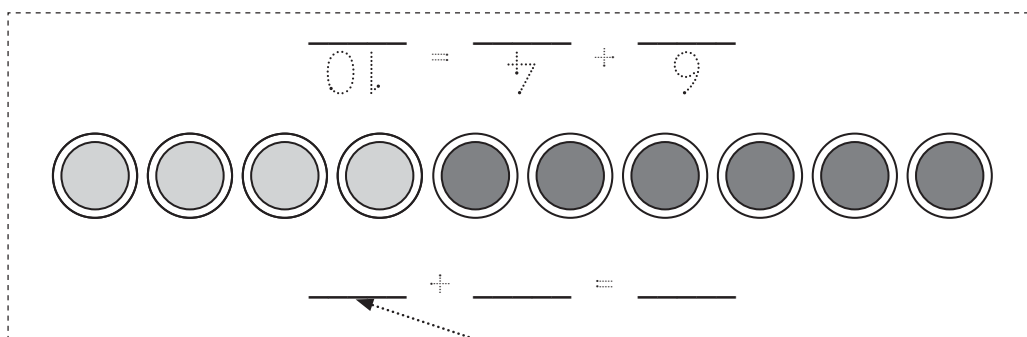
a copy of page 30

What to do:

- a** Cut out the strips on the next page.
- b** Stick 6 red stickers and 4 blue stickers into place on one strip. It should look like this.



- c** Write the fact here.
- d** Now turn the strip around so it looks like this.



- e** Write the turnaround fact here.

What to do next:

Choose different combinations of stickers and make up your own turnarounds on the other strips.

Number relationships – turnarounds

(continued)



_____ ÷ _____ = _____

○ ○ ○ ○ ○ ○ ○ ○ ○ ○

_____ + _____ = _____

○ ○ ○ ○ ○ ○ ○ ○ ○ ○

_____ ÷ _____ = _____

○ ○ ○ ○ ○ ○ ○ ○ ○ ○

_____ + _____ = _____

○ ○ ○ ○ ○ ○ ○ ○ ○ ○

_____ ÷ _____ = _____

Number relationships – zero

1 Do you know any other words for zero? Write them here.

2 What happens when we add zero to a number? Try these.

a $1 + 0 = \underline{\quad}$ **b** $3 + 0 = \underline{\quad}$ **c** $4 + 0 = \underline{\quad}$

d $2 + 0 = \underline{\quad}$ **e** $6 + 0 = \underline{\quad}$ **f** $5 + 0 = \underline{\quad}$

g What do you notice?

3 What about if we subtract zero from a number? Try these.

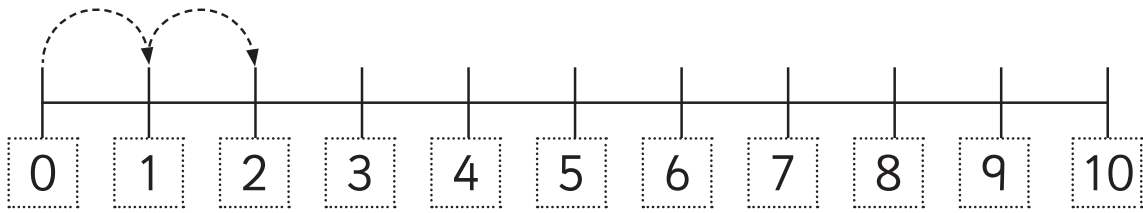
a $10 - 0 = \underline{\quad}$ **b** $7 - 0 = \underline{\quad}$ **c** $6 - 0 = \underline{\quad}$

d $9 - 0 = \underline{\quad}$ **e** $8 - 0 = \underline{\quad}$ **f** $5 - 0 = \underline{\quad}$

g What do you notice?

Number relationships – zero (continued)

4 Jump along from 0 to answer these.



a $0 + 2 = \underline{2}$ **b** $0 + 5 = \underline{\quad}$ **c** $0 + 7 = \underline{\quad}$

d $0 + 6 = \underline{\quad}$ **e** $0 + 9 = \underline{\quad}$ **f** $0 + 10 = \underline{\quad}$

g What do you notice?

5 Are you ready for some really, really hard sums? Are you sure? OK then, here they are!

a $250 + 0 = \underline{\quad}$ **b** $0 + 500 = \underline{\quad}$

c $0 + 725 = \underline{\quad}$ **d** $0 + 999 = \underline{\quad}$

WOW!
You are clever.

