

Please check the examination details below before entering your candidate information

Candidate surname

Other names

**Pearson Edexcel**  
**Level 3 GCE**

Centre Number

--	--	--	--	--

Candidate Number

--	--	--	--	--

**Thursday 13th June 2019**

Afternoon (Time: 2 hours 15 minutes)

Paper Reference **9GE0/03**

**Geography**

**Advanced**  
**Paper 3**

**You must have:**

Resource Booklet (enclosed)  
Calculator, ruler

Total Marks

### Instructions

- Use **black** ink or ball-point pen.
- **Fill in the boxes** at the top of this page with your name, centre number and candidate number.
- Answer **all** questions.
- Answer the questions in the spaces provided  
– *there may be more space than you need.*
- Calculators may be used.
- Any **calculations** must show all stages of **working out** and a **clear answer**.

### Information

- The total mark for this paper is 70.
- The marks for **each** question are shown in brackets  
– *use this as a guide as to how much time to spend on each question.*

### Advice

- You are **advised** to spend the first **15 minutes** reading the Resource Booklet.
- Read each question carefully before you start to answer it.
- Try to answer every question.
- Check your answers if you have time at the end.

Turn over ►

P58336A

©2019 Pearson Education Ltd.  
1/1/1/1/1/1/1/1/1/1/1



  
**Pearson**

Answer ALL questions. Write your answers in the spaces provided.

You must use the Resource Booklet provided and your own knowledge and understanding from across your course of study to answer the questions in this paper.

- 1 Explain how **one** theory of development can help an understanding of global patterns of power.

(4)

.....

.....

.....

.....

.....

.....

.....

.....

.....

.....

.....

.....

(Total for Question 1 = 4 marks)

- 2 (a) The table on the next page shows data for the 12 richest countries (measured using GDP per capita).

The formula for Spearman's rank correlation coefficient is given below.

$$R = 1 - \frac{6 \sum d^2}{n^3 - n}$$

DO NOT WRITE IN THIS AREA

DO NOT WRITE IN THIS AREA

DO NOT WRITE IN THIS AREA

DO NOT WRITE IN THIS AREA

DO NOT WRITE IN THIS AREA

DO NOT WRITE IN THIS AREA



Complete the table below and calculate the value of R to two decimal places where  $n=12$ .

(4)

Country (population size in millions)	GDP per capita in \$US	Rank	Military spending as a % of GDP	Rank	d	d <sup>2</sup>
United States (324.5)	57,436	10	5.7	4	6	36
Saudi Arabia (32.9)	55,158	11	15.2	1	10	100
Netherlands (17.0)	51,049	12	2.8	9	3	9
United Arab Emirates (9.4)	67,871	8	5.0	5	3	9
Switzerland (8.4)	59,561	9	1.7	10	-1	1
Singapore (5.7)	87,855	3	4.8	6	-3	9
Norway (5.3)	69,249	6	2.9	8	-2	4
Ireland (4.7)	69,231	7	0.6	12	-5	25
Kuwait (4.1)	71,887	5	8.2	2	3	9
Qatar (2.6)	127,660	1	3.2	7	-6	36
Luxembourg (0.6)	104,003	2	1.1	11	-9	81
Brunei (0.4)	76,884	4	6.6	3	1	1
$\Sigma d^2 =$						

**Table 1**

**Military spending as a % of GDP for the 12 richest countries, as measured by their GDP per capita**

Show your working. Give your answer to two decimal places.

R = .....



(b) Explain why this sample of 12 countries may be an unreliable measure of the relationship between GDP per capita and military spending as a percentage of GDP.

(4)

.....

.....

.....

.....

.....

.....

.....

.....

.....

.....

**(Total for Question 2 = 8 marks)**

DO NOT WRITE IN THIS AREA

DO NOT WRITE IN THIS AREA

DO NOT WRITE IN THIS AREA

DO NOT WRITE IN THIS AREA

DO NOT WRITE IN THIS AREA

DO NOT WRITE IN THIS AREA



3 Study Figure 1 and Figure 2 in Section A of the Resource Booklet.

Analyse the pattern of earthquakes in Japan and its surrounding region.

(8)

Area with horizontal dotted lines for writing.

DO NOT WRITE IN THIS AREA

DO NOT WRITE IN THIS AREA

DO NOT WRITE IN THIS AREA

DO NOT WRITE IN THIS AREA

DO NOT WRITE IN THIS AREA

DO NOT WRITE IN THIS AREA





4 Study Figure 3 and Figure 4 in Section A of the Resource Booklet.

Analyse the relationship between earthquake risk and population density in the Japanese archipelago.

(8)

Area with horizontal dotted lines for writing.

DO NOT WRITE IN THIS AREA

DO NOT WRITE IN THIS AREA

DO NOT WRITE IN THIS AREA

DO NOT WRITE IN THIS AREA

DO NOT WRITE IN THIS AREA

DO NOT WRITE IN THIS AREA





Handwriting practice area with 15 horizontal dotted lines.

**(Total for Question 4 = 8 marks)**

DO NOT WRITE IN THIS AREA

DO NOT WRITE IN THIS AREA

DO NOT WRITE IN THIS AREA

DO NOT WRITE IN THIS AREA

DO NOT WRITE IN THIS AREA

DO NOT WRITE IN THIS AREA





5 Study Section B in the Resource Booklet.

Evaluate the view that international trade is the main factor in the success of the Japanese economy.

(18)

Area with horizontal dotted lines for writing.

DO NOT WRITE IN THIS AREA

DO NOT WRITE IN THIS AREA

DO NOT WRITE IN THIS AREA

DO NOT WRITE IN THIS AREA

DO NOT WRITE IN THIS AREA

DO NOT WRITE IN THIS AREA



Handwriting practice area with 20 horizontal dotted lines.

DO NOT WRITE IN THIS AREA

DO NOT WRITE IN THIS AREA

DO NOT WRITE IN THIS AREA

DO NOT WRITE IN THIS AREA

DO NOT WRITE IN THIS AREA

DO NOT WRITE IN THIS AREA



DO NOT WRITE IN THIS AREA

DO NOT WRITE IN THIS AREA

DO NOT WRITE IN THIS AREA

DO NOT WRITE IN THIS AREA

DO NOT WRITE IN THIS AREA

DO NOT WRITE IN THIS AREA

Large writing area with horizontal dotted lines.





.....

.....

**(Total for Question 5 = 18 marks)**

---

DO NOT WRITE IN THIS AREA

DO NOT WRITE IN THIS AREA

DO NOT WRITE IN THIS AREA

DO NOT WRITE IN THIS AREA

DO NOT WRITE IN THIS AREA

DO NOT WRITE IN THIS AREA





Handwriting practice area with 20 sets of horizontal dotted lines.

DO NOT WRITE IN THIS AREA

DO NOT WRITE IN THIS AREA

DO NOT WRITE IN THIS AREA

DO NOT WRITE IN THIS AREA

DO NOT WRITE IN THIS AREA

DO NOT WRITE IN THIS AREA



DO NOT WRITE IN THIS AREA

DO NOT WRITE IN THIS AREA

DO NOT WRITE IN THIS AREA

DO NOT WRITE IN THIS AREA

DO NOT WRITE IN THIS AREA

DO NOT WRITE IN THIS AREA

Large writing area with horizontal dotted lines.



DO NOT WRITE IN THIS AREA

DO NOT WRITE IN THIS AREA

DO NOT WRITE IN THIS AREA

(Total for Question 6 = 24 marks)

**TOTAL FOR PAPER = 70 MARKS**





**Pearson Edexcel Level 3 GCE**

**Thursday 13th June 2019**

Afternoon (Time: 2 hour 15 minutes)

Paper Reference **9GE0/03**

**Geography**

**Advanced**

**Paper 3**

**Resource Booklet**

**Do not return this Resource Booklet with the question paper.**

*Turn over* ►

**P58336A**

©2019 Pearson Education Ltd.

1/1/1/1/1/1/1/1/1/1/1



**Pearson**



**BLANK PAGE**



## SECTION A

### Japan – a hazardous place

Japan is an archipelago made up of four main islands: Kyushu, Shikoku, Honshu, and Hokkaido. Honshu is the largest and most highly populated and provides over 80% of Japan's Gross Domestic Product (GDP).

26% of Japan's total population of 127 million live in the Greater Tokyo region on Honshu.

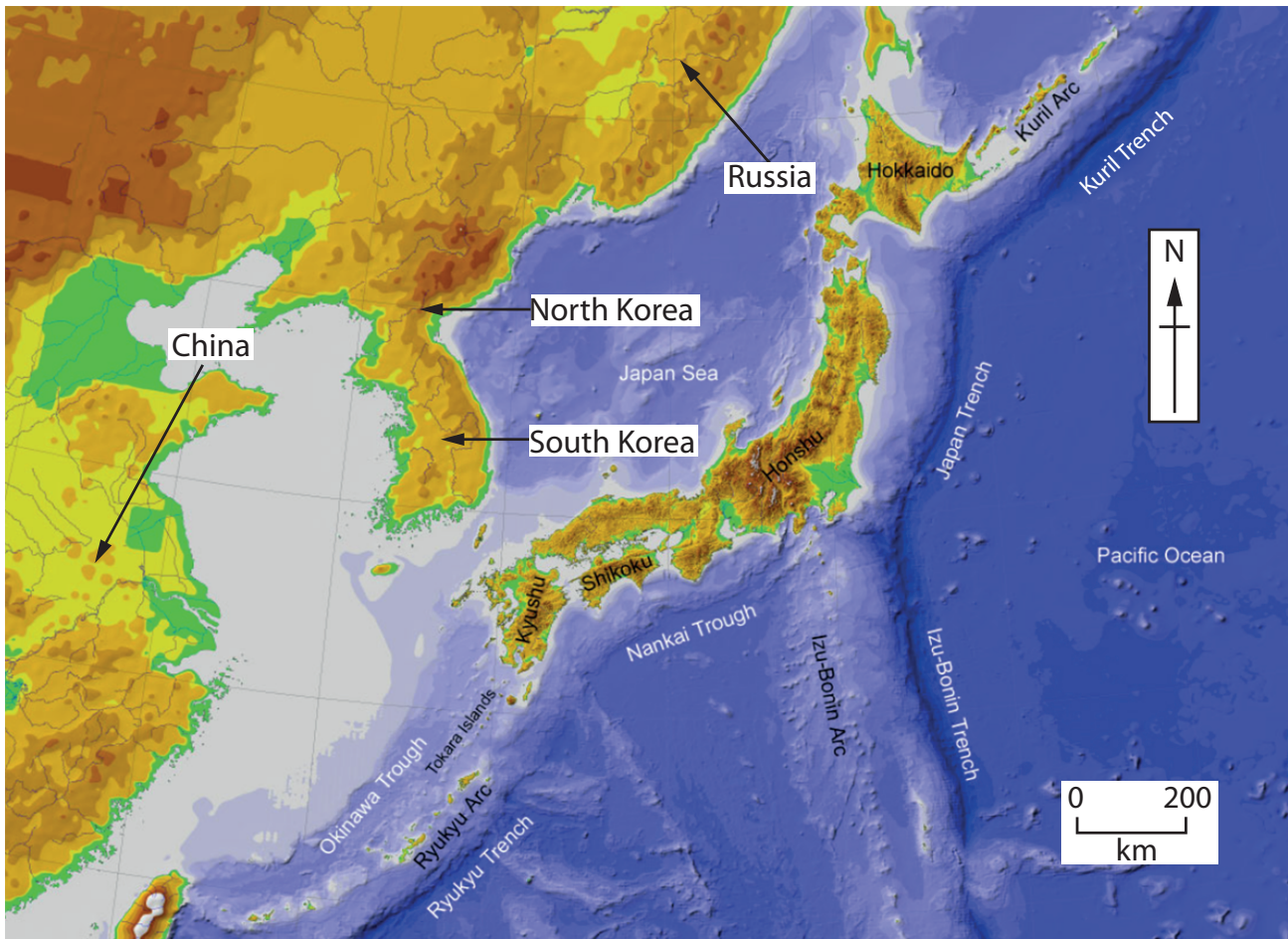
With an average population density of 340 per km<sup>2</sup> Japan is one of the most densely populated countries in the world.

The country is subject to many natural hazards; to earthquakes and associated tsunami, but also eruptions from its 110 active volcanoes – 47 of these pose an imminent threat.

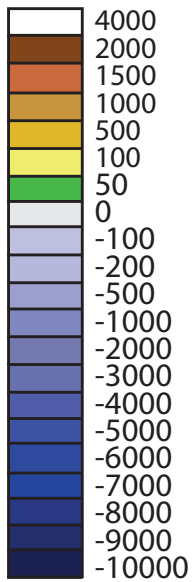
Japan's geologic history as an island-arc system means that it has no natural mineral resources.

With its mountainous interior and steep slopes, over 60% of the country is forested and very little is available for arable farming and food production.

Despite these challenges Japan has the world's third largest economy with very high standards of living. It has one of the healthiest populations resulting in the longest life expectancy globally.

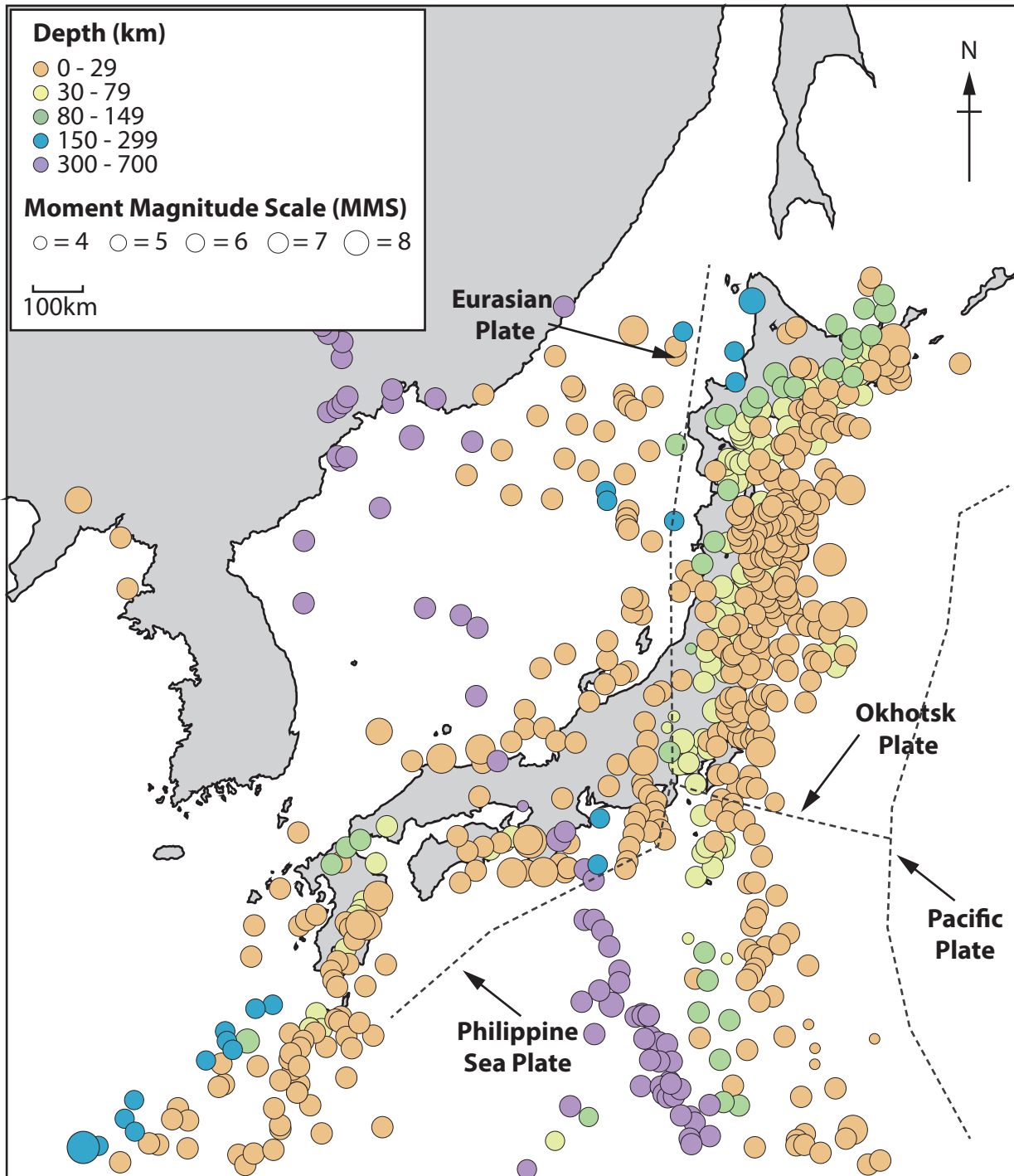


Height above sea-level and depth below sea-level in metres



**Figure 1**

**Japan in its regional setting**



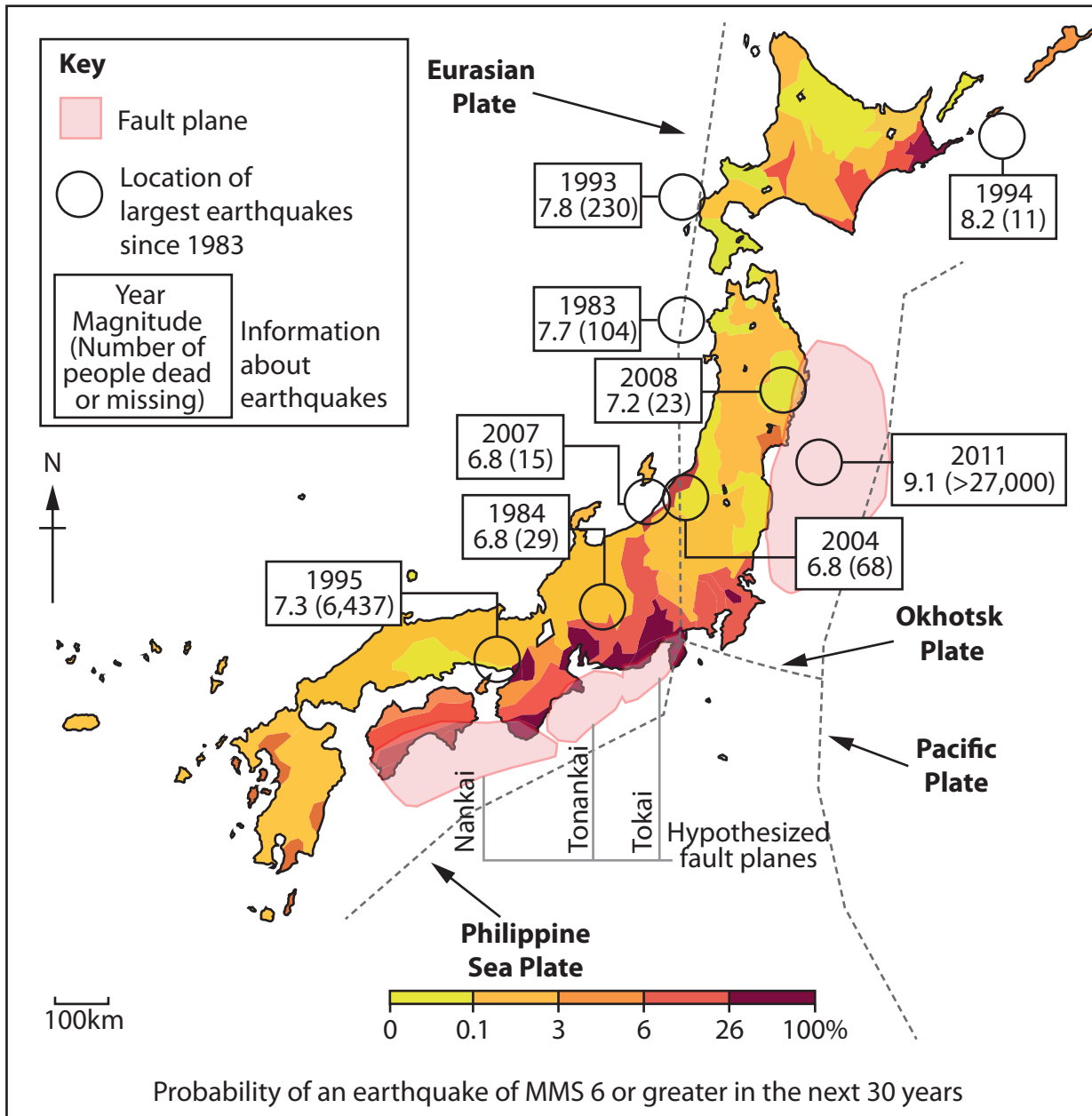
**Figure 2**

**Location and depth of large earthquakes in Japan and its surrounding region, 1960-2015**

The Japanese archipelago (islands) lie at the junction of four tectonic plates; the Pacific and the Philippine Sea oceanic plates and the Okhotsk and the Eurasian continental plates.

There are many fault planes where frequent earthquakes are generated by the subduction of the Philippine and the Pacific plates.

20% of all global earthquakes of magnitude 7 or greater (MMS scale) occur in and around Japan with 30 of these events taking place in the past century.

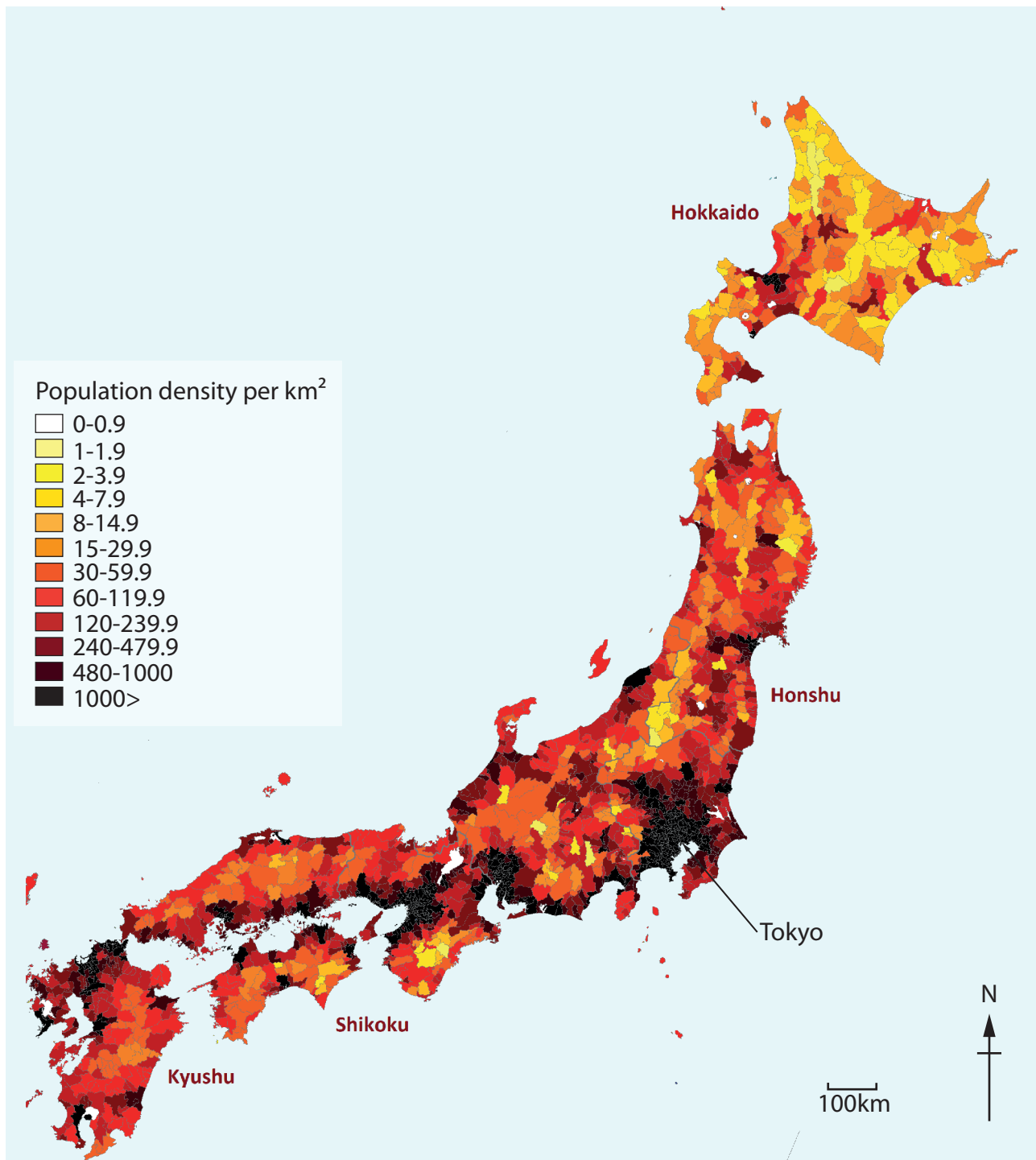


**Figure 3**  
**A map of earthquake risk**

Although Japan is widely acknowledged as the 'model' state for its level of hazard preparedness and mitigation, this comes at a high economic cost and is not without weaknesses. For example, it is estimated that over 25% of all buildings in the Nankai region (Honshu) have inadequate earthquake resistance.

The most recent catastrophic earthquake (2011 Tohoku) devastated the Japanese economy. Not only did the resulting tsunami kill nearly 30,000 people and displace about 500,000, it also caused the most serious nuclear accident since Chernobyl (Ukraine) at Fukushima.

Additionally, it destroyed over 150,000 buildings and cost over \$360 billion in short-term and longer-term economic damage. The global economy was disrupted as the production of vital parts manufactured in Japan ceased causing a bottleneck in the global supply chain for companies as diverse as Apple, Boeing and Nissan.



**Figure 4**  
**Population density in Japan**

## SECTION B

### Demography, Energy and the Economy

Japan is unusual, although not unique, amongst the world's largest economies in having a declining population.

Estimates suggest that unless current trends are reversed the population will decline by up to a third by 2060 (see Figure 5).

The population is also ageing faster than any other country (see Figure 5) with an estimated 19 million over 80 by 2060. The reasons for this are low fertility rates and a cultural resistance to allowing in-migration to compensate.

A recent World Bank report points out the problems of meeting the higher social costs of caring for the elderly with a shrinking work-force as well as a fall in domestic demand for consumer products. A few optimistic economists suggest that robotisation makes a smaller work force desirable.

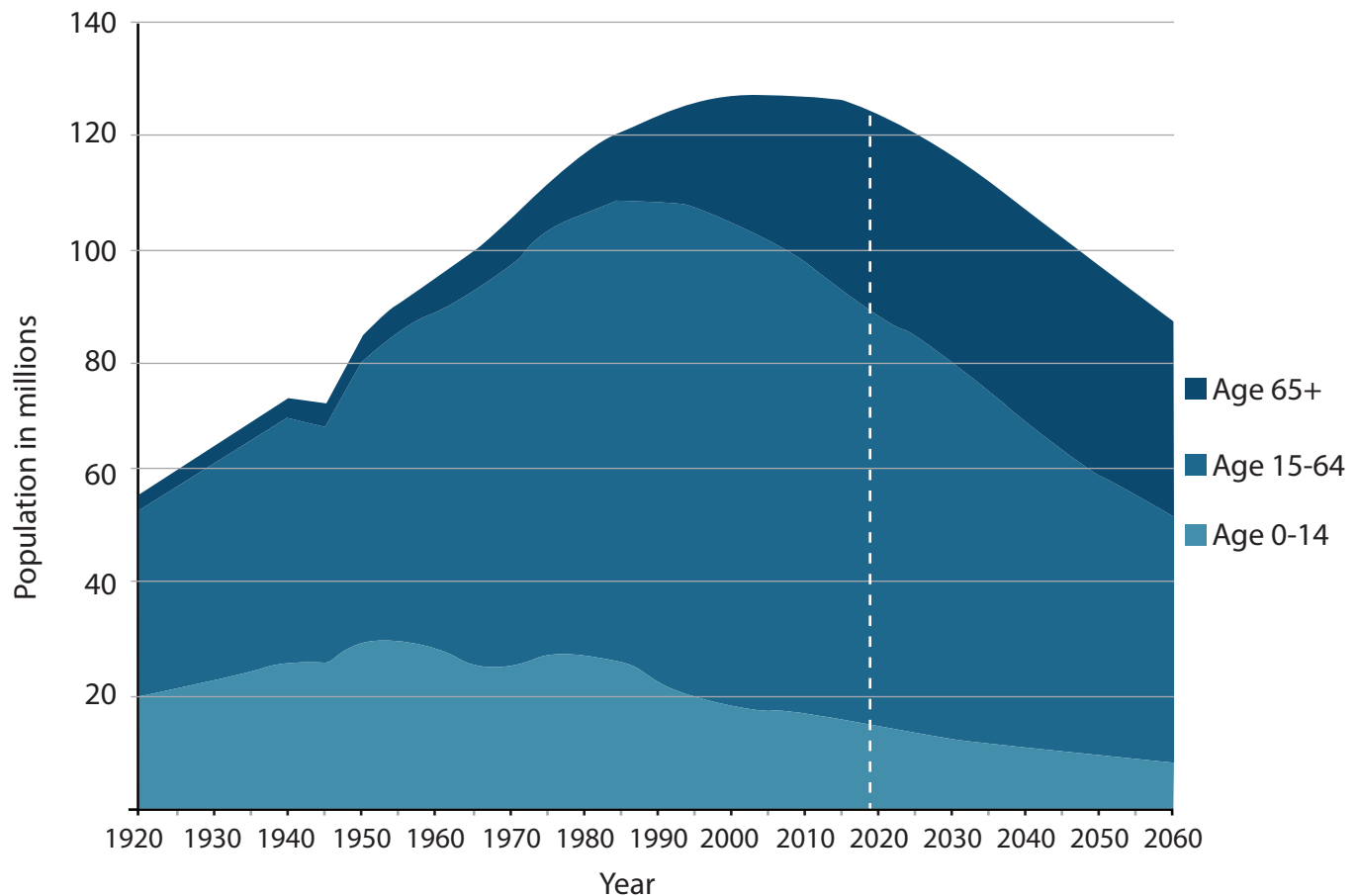


Figure 5

Past, present and projected future changes in the structure of Japan's population

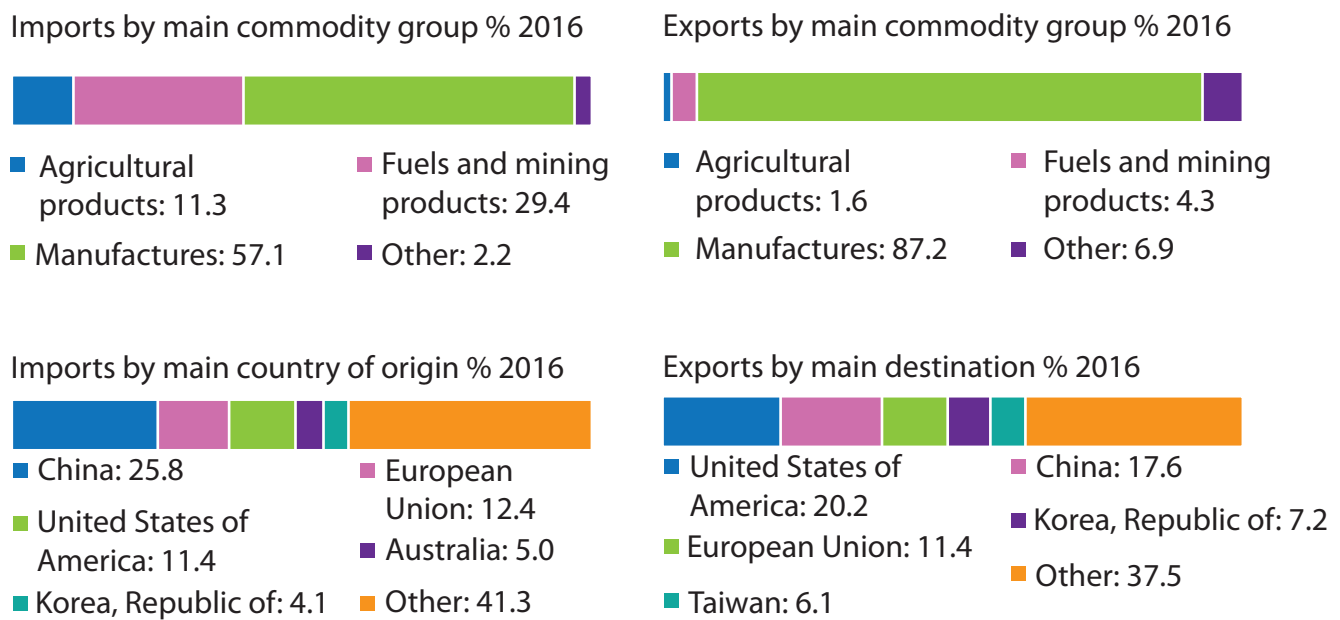


Japan's economic system contrasts with that of most of its competitors. 90% of the employees of TNC's such as Sony and Toyota are lifetime employees and the companies often provide their own schools, hospitals and retirement homes.

Japanese workers have a reputation for working very long hours with 80-hour weeks not uncommon. However, the gap between their wages and that of their bosses is the lowest of the major economies.

In the 1950s Japan developed its manufacturing base with a policy of import substitution industrialisation (ISI). ISI involved the government imposing high tariffs on imports making them expensive so replacing previously imported goods such as cars with Japan's own 'home-made' products often with government subsidies to make them even more competitive.

Once these home markets were secured, Japan began to promote free-trade policies so that it could sell its goods overseas (see Figure 6a and Figure 6b).



**Figure 6a**  
**Japan's trade profile, 2016**

Japan ranks 4th globally for the value of its exports and 5th for its imports – exporting US\$644 bn and importing US\$606 bn in 2016.

Japan has a deserved reputation for innovative hi-tech products especially in the development of robotics and renewable energy technology.

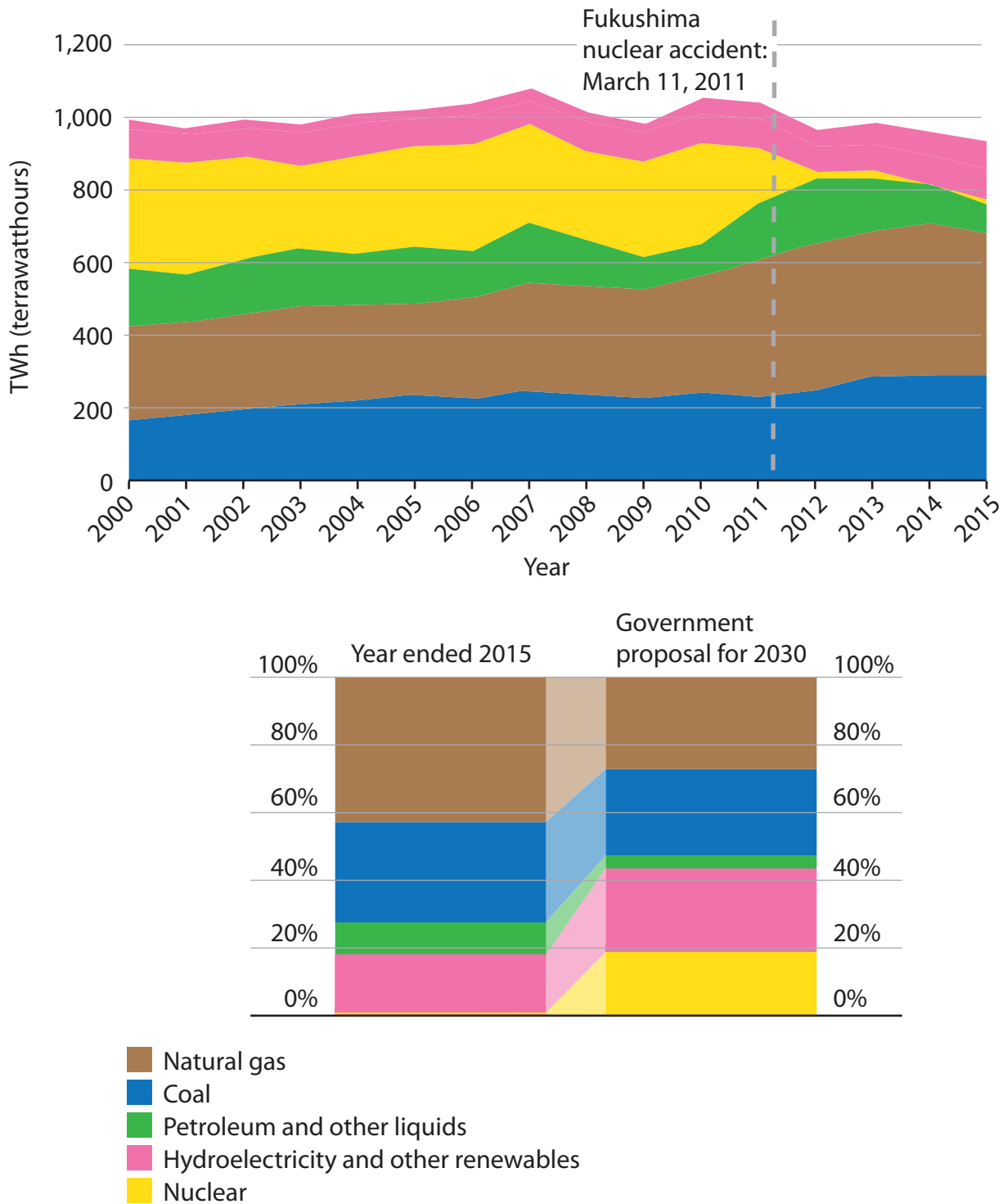
Top 5 Exports		Top 5 Imports	
Commodity	Value in US\$bn	Commodity	Value in US\$bn
Motor cars	92	Oil and petroleum	51
Parts for motor vehicles	32	Liquified natural gas	34
Electronic circuits	24	Electronic circuits	17
Laser machines	13	Medicines	17
Electronic machines	12	Coal	17

**Figure 6b**

**Japan's leading exports and imports by value, 2016**

Japan began its nuclear power programme in 1954 planning to supply at least 50 % of the country's energy needs by 2000. Initially using imported US technology, they have rapidly developed their own expertise.

The Fukushima accident caused by the 2011 tsunami led to the shutdown of almost all of Japan's nuclear power plants but in 2015 the decision was made to restart that programme alongside significant research spending on renewable energy resources.



**Figure 7**  
Japan's past and future energy mix

## SECTION C

### Japan – rising or falling in the superpower stakes?

Country	Overall ranking for globalisation	Ranked by Economic factors	Ranked by Social factors	Ranked by Political factors
USA	27	54	30	19
Japan	39	78	48	34
Russia	48	125	52	20
China	71	121	81	44
Brazil	73	124	106	9
India	107	143	147	22

Figure 8

### The globalisation rankings (on the KOF index) for six superpowers and emerging superpowers, 2016

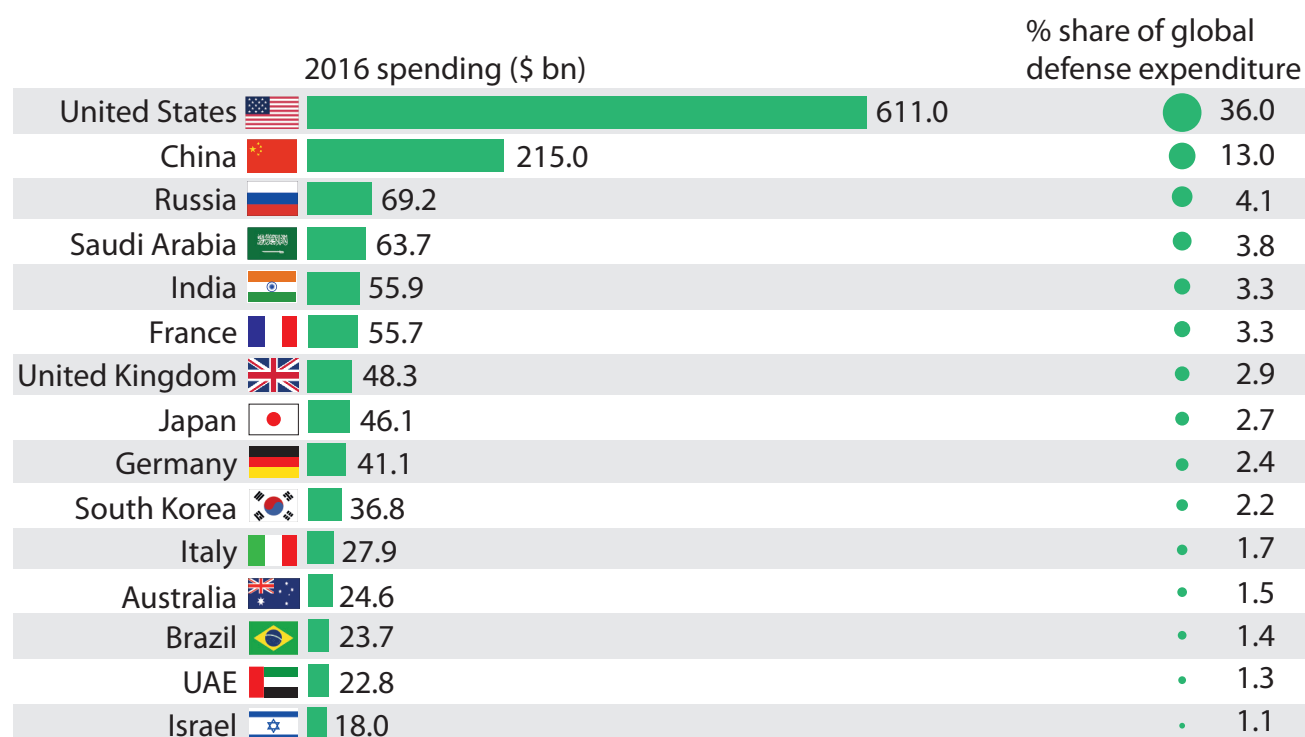


Figure 9

### Defence expenditure for the world's top 15 military powers, 2016

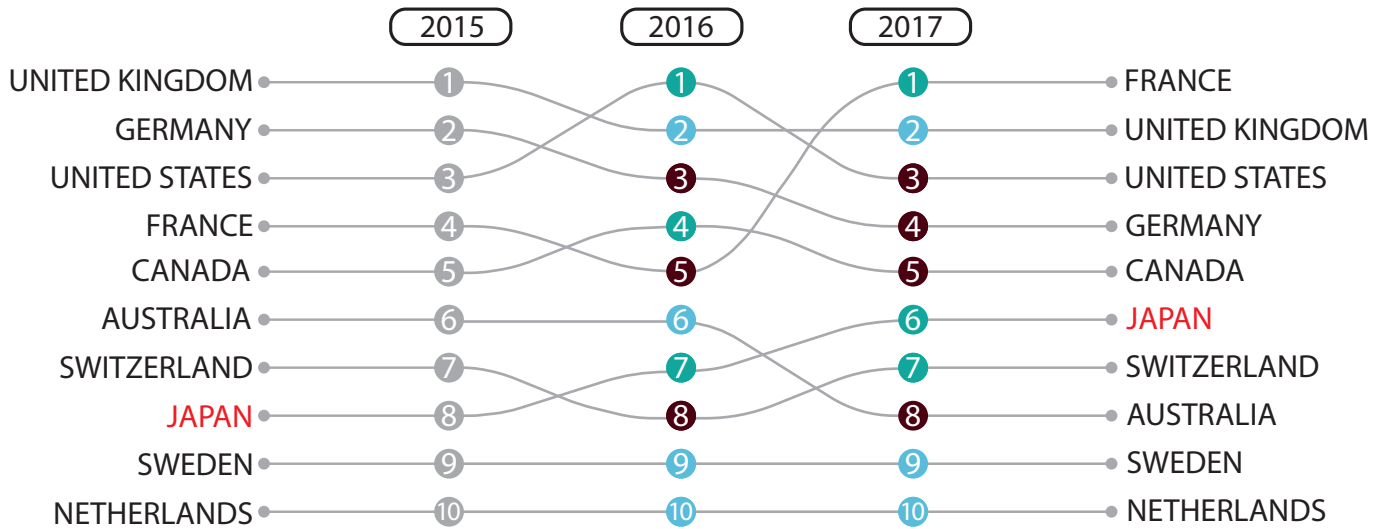


Figure 10

A 'soft' power league table showing changes in global influence measuring diplomacy, culture, education and other factors, 2015-2017

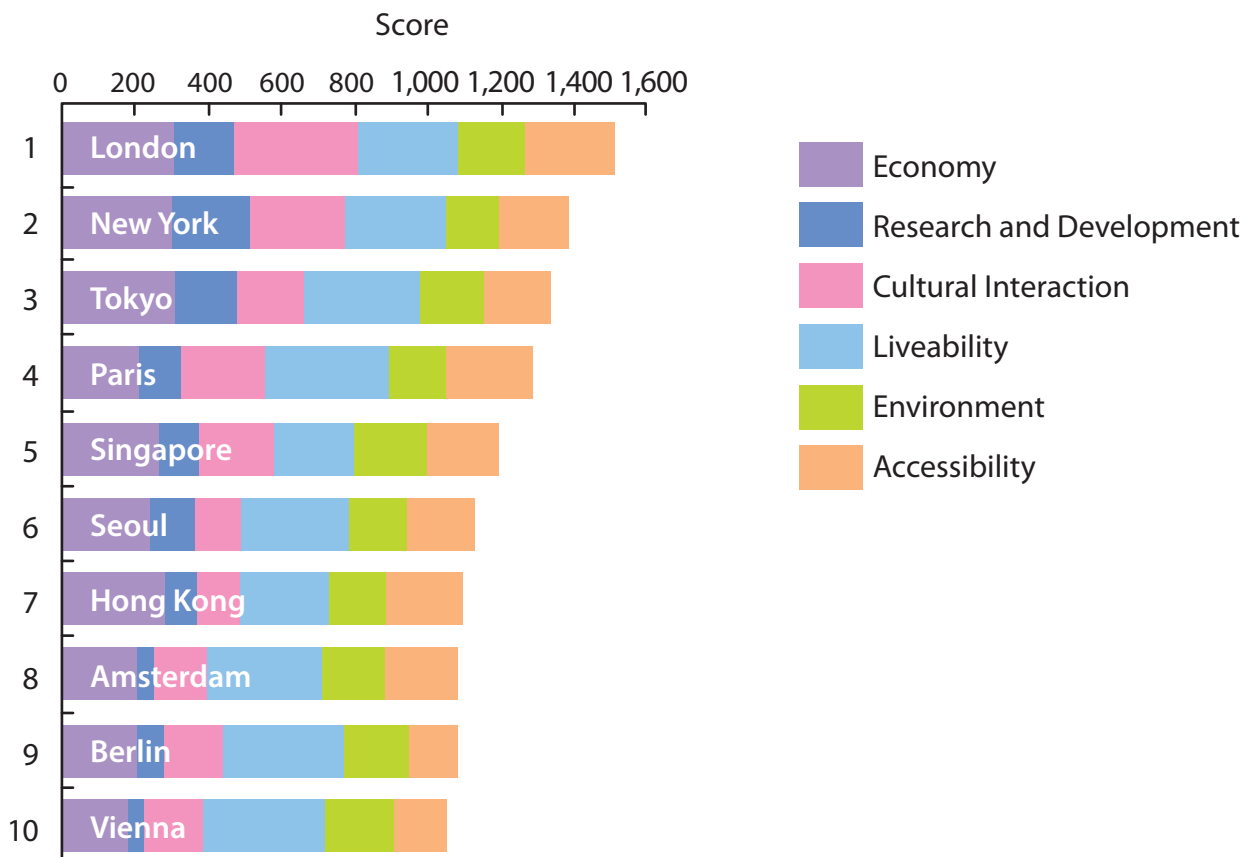


Figure 11

The results of a business survey ranking the top ten global cities in 2017

In assessing the risks from five hazards (river flooding, earthquake, wind storm, storm surge and tsunami), insurance companies have calculated that Japan has three cities in the top ten at risk globally for the number of people affected (killed, injured or displaced).

In terms of economic losses these three Japanese cities fill the first three places globally with potential GDP losses as high as 5% of the annual total.

City or city region	Total population potentially affected (in millions)
Tokyo (Japan)	57.1
Manila (Philippines)	34.6
Pearl River Delta (China)	34.5
Osaka-Kobe (Japan)	32.1
Jakarta (Indonesia)	27.7
Nagoya (Japan)	22.9
Kolkata (India)	17.9
Shanghai (China)	16.7
Los Angeles (USA)	16.4
Tehran (Iran)	15.6

**Figure 12**

**Predicted impacts for the world's 10 most hazardous cities and city regions**

**BLANK PAGE**

**BLANK PAGE**

Figure 1 - Source from: [https://www.researchgate.net/figure/Topography-and-main-geographical-regions-of-Japan-modified-from-Editorial-Group-for\\_fig3\\_308023935](https://www.researchgate.net/figure/Topography-and-main-geographical-regions-of-Japan-modified-from-Editorial-Group-for_fig3_308023935)

Figure 3 - Shake-up time for Japanese seismology', Robert J. Geller Copyright © 2011, Springer Nature

Figure 4 - Sourced from: © popdensitymap.ucoz.ru

Figure 7 - Sourced from: U.S. Energy Information Administration

Every effort has been made to contact copyright holders to obtain their permission for the use of copyright material. Pearson Education Ltd. will, if notified, be happy to rectify any errors or omissions and include any such rectifications in future editions.