

Basic Music Theory Resource Book And Worksheets



By Rodolfo Gonzalez, Ed. D.

© 2017

I. Basic Music Theory Resource Book

Table of Contents

1. Staff	p. 4
2. Treble Clef	p. 4
3. Bass Clef	p. 4
4. The Grand Staff	p. 4
5. Sharp	p. 5
6. Flat	p. 5
7. Natural	p. 5
8. Key Signature	p. 5
9. Time Signature	p. 5
10. Measure	p. 5
11. Bar Line	p. 6
12. Double Bar	p. 6
13. Repeat Sign	p. 6
14. First and Second Endings	p. 6
15. Da Capo	p. 7
16. Fine	p. 7
17. Pitch/Note/Tone	p. 7
18. Lines and Spaces: Treble Clef	p. 7
19. Lines and Spaces: Bass Clef	p. 7
20. Leger Lines	p. 7
21. Descend	p. 8
22. Ascend	p. 8
23. Scale	p. 8
24. Ascending Scale and Descending Scale	p. 8
25. Solfege Syllables and Hand Signs	p. 8
26. C Major Scale	p. 8
27. A Natural Minor Scale	p. 9
28. Fermata	p. 9
29. Round	p. 9
30. Beat	p. 9
31. Metronome	p. 9
32. Meter	p. 9
33. Notes and Rests	p. 10
34. Notes and Rests on the Staff	p. 11
35. The Piano Keyboard	p. 12
36. Intervals	p. 13
37. Key Signatures	p. 14
38. Major Key Signatures	p. 14
39. Minor Key Signatures	p. 15
40. Melody: From Song to Notation	p. 16

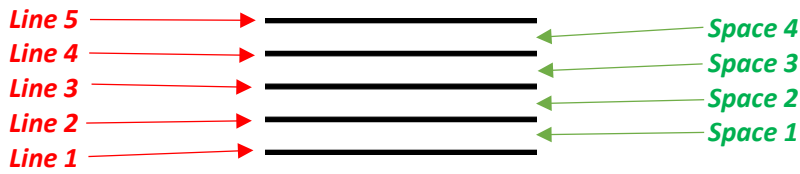
PREVIEW

II. Basic Music Theory Worksheets

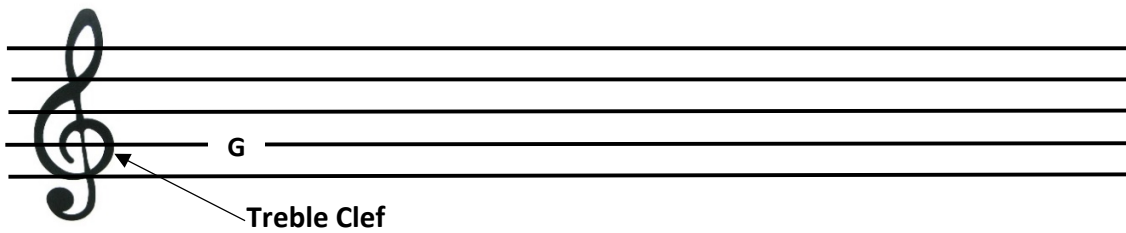
Music Theory Exercise 1: The Staff, Treble Clef, Bass Clef, and the Grand Staff	p. 18
Music Theory Exercise 2: The Sharp, Flat, Natural, and Key Signature	p. 19
Music Theory Exercise 3: The Sharp, Flat, Natural, and Key Signature	p. 20
Music Theory Exercise 4: Bar Line, Double Bar, Repeat Sign, First and Second Endings	p. 21
Music Theory Exercise 5: Da Capo, Fine, Lines and Spaces	p. 22
Music Theory Exercise 6: Leger Lines, Pitch/Note/Tone, Ascend, Descend, Scale	p. 23
Music Theory Exercise 7: Solfege Syllables, Hand Signs, and C Major Scale	p. 24
Music Theory Exercise 8: A Minor Scale, Fermata, Round, Beat, Metronome, Time Signature	p. 25
Music Theory Exercise 9: Notes and Rests	p. 26
Music Theory Exercise 10: The Piano Keyboard	p. 27
Music Theory Exercise 11: Intervals	p. 28
Music Theory Exercise 12: G and D Major Key Signatures	p. 29
Music Theory Exercise 13: A Minor and E Minor Key Signatures	p. 30
Music Theory Exercise 14: Melody from Song to Notation	p. 31

I. Basic Music Theory

1. **Staff** – 5 lines in which music notes are written.




2. **Treble Clef** – sign used to denote **G** on the staff used in writing music for high instruments (flute, trumpet, clarinet, guitar).



3. **Bass Clef** – sign used to denote **F** on the staff used in writing music for low instruments (trombone, tuba, bassoon, guitarron).



4. **The Grand Staff** – used to notate piano music.



II. Basic Music Theory Worksheets

Name: _____ **School:** _____

Class Period: _____ **Date:** _____

Music Theory Worksheet 1: The Staff, Treble Clef, Bass Clef, and the Grand Staff

1. ___ Draw a music staff. ___ Label the lines 1-5. ___ Label the spaces 1- 4.

2. ___ Draw another music staff. ___ Draw a treble clef at the beginning of the staff. ___ Draw as many treble clefs on the staff as can fit.

PREVIEW

3. ___ Draw another staff. ___ Draw a bass clef at the beginning of the staff. ___ Draw as many bass clefs on the staff as can fit.

4. ___ Draw a grand staff. ___ Connect the top a bottom staves with a bar line and a brace.

Name: _____ **School:** _____

Class Period: _____ **Date:** _____

Music Theory Worksheet 2: The Sharp, Flat, Natural, and Key Signature

1. Draw 7 sharps in the boxes below:

--	--	--	--	--	--	--

2. Draw 7 flats in the boxes below:

--	--	--	--	--	--	--

3. Draw 7 naturals in the boxes below:

--	--	--	--	--	--	--

4. Draw a grand staff. Carefully draw the seven sharps on the grand staff.

PREVIEW

5. Draw a grand staff. Carefully draw the seven flats on the grand staff.

Name: _____ **School:** _____

Class Period: _____ **Date:** _____

Music Theory Worksheet 3: The Sharp, Flat, Natural, and Key Signature

1. ___ Draw a grand staff. ___ After each clef write in 2/4 time signature 8 times.

2. ___ Draw a grand staff. ___ After each clef write in 3/4 time signature 8 times.

PREVIEW

3. ___ Draw a grand staff. ___ After each clef write in 4/4 time signature 8 times.

4. ___ Draw a grand staff. ___ Divide the grand staff into 4 measures. ___ Label measures 1, 2, 3, & 4.

Name: _____ **School:** _____

Class Period: _____ **Date:** _____

Music Theory Worksheet 4: Bar Line, Double Bar, Repeat Sign, First and Second Endings

1. ___ Draw a grand staff. ___ Divide the grand staff into 4 measures. ___ Label bar lines 1, 2, 3, & 4.

2. ___ Draw a grand staff. ___ Divide the grand staff into 4 measures. ___ Draw a double bar at the end of the grand staff. ___ Label the double bar.

PREVIEW

3. ___ Draw a grand staff. ___ Divide the grand staff into 4 measures. ___ Draw a repeat sign at the end of the grand staff. ___ Draw a repeat sign at the beginning of the grand staff.

4. ___ Draw a grand staff. ___ Divide the grand staff into 4 measures. ___ Draw a repeat sign at the end of the grand staff. ___ Draw a repeat sign at the beginning of the grand staff. ___ Finally, draw the first and second endings.