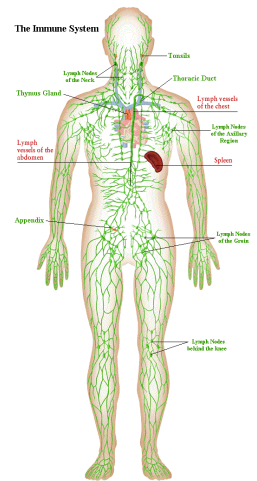


Reading Guide: Chapter 12 - Lymphatic System (pages 398-431)

1. Identify the 2 semi-independent parts of the lymphatic system:

a. _____

b. _____



Lymphatic Vessels

2. Define a. **EDEMA**: _____

b. **LYMPH**: _____

3. Describe the structure of the lymph capillaries in the lymphatic system. Compare the lymph capillaries to the vessels of the cardiovascular system.

4. True or False. (Circle one). Proteins, debris, bacteria, and other large particles can enter the lymphatic capillaries easily unlike the vessels in the cardiovascular system.

Lymph Nodes

5. What is the function of the lymph nodes? _____

6. Describe what causes "swollen glands"?

7. Draw a picture of a lymph node. In your drawing, identify the cortex, follicle, afferent lymphatic vessel, capsule, and efferent lymphatic vessel.

Other Lymphoid Organs

8. Describe the functions of the following lymphoid organs

Lymphoid Organ	Function(s)
Spleen	
Thymus	
Tonsils	
Peyer's Patches	
Appendix	

9. Describe the difference between the innate (nonspecific) immune system and the adaptive (specific) immune system.

Innate Body Defenses

10. List and describe the physical and chemical components of the **first line** of defense.

11. a. What physiological process causes redness and inflammation at the site of an injury?

b. What is the advantage of localized heat at the site of an injury?

c. What is pus? How does it form?

12. The body's second line of defense includes various cell types and responses. Complete the chart below describing the different types of second line of defense and their functions.

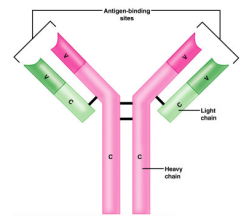
Cellular/Chemical Defense	Job (what does it do? how does it accomplish its job?)
Phagocytes	
Natural killer cells	
Inflammatory response	
Complement proteins	
Interferons	
Fever	

Adaptive Body Defenses

13. How is the third line of defense different from the first two? In other words, what are the 3 important aspects of the adaptive (specific) defense?

14. Describe the difference between humoral (antibody-mediated) immunity and cellular (cell-mediated) immunity?

15. Define **ANTIGEN**: _____



16. Complete the following chart comparing a primary immune response and a secondary immune response.

Type of Immune Response	Happens when...	Speed of response?	Cells involved?
Primary humoral			
Secondary humoral			

17. a) Distinguish between active and passive immunity.

b) Distinguish between naturally acquired and artificially acquired immunity.

c) Describe how one might develop artificially acquired passive immunity. _____

18. What are VACCINES? Give 5 examples of diseases for which we already have vaccines.



19. Define the following terms:

a. Neutralization: _____

b. Agglutination: _____

c. Precipitation: _____

20. In the table below, describe the functions of the following cells in immune response.

Cell	Function
B Cell	
Plasma Cell	
Helper T Cell	
Cytotoxic T Cell	
Regulatory T Cell	
Memory Cell	

21. What are two measures taken to reduce the chances of rejection of a transplanted organ or transplanted tissue?

- 1) _____
- 2) _____

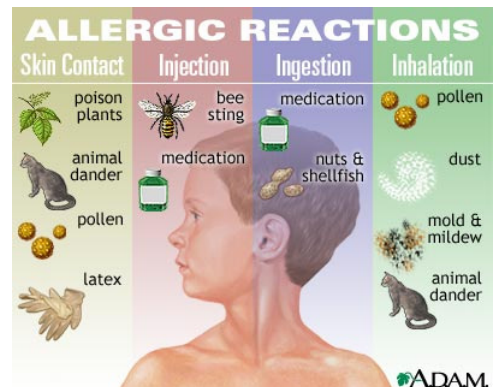
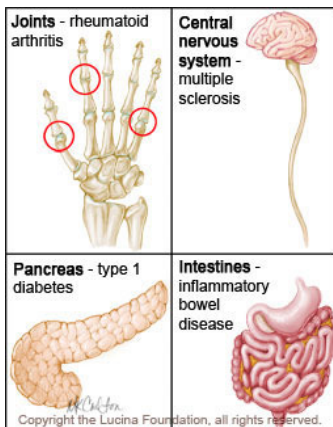
22. a. What is meant by **AUTOIMMUNITY**?

b. What conditions / events might result in autoimmunity?

23. a. What are allergies? _____

b. What are some common **ALLERGENS**? _____

c. What is **ANAPHYLATIC SHOCK**? _____

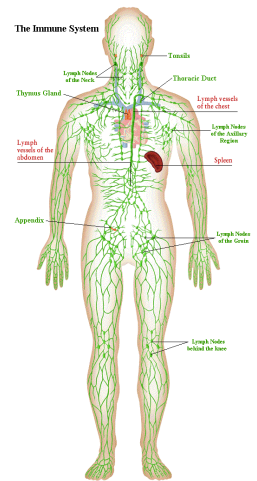


Reading Guide: Chapter 12 - Lymphatic System (pages 398-431)

1. Identify the 2 semi-independent parts of the lymphatic system:

a. _____

b. _____



Lymphatic Vessels

2. Define a. **EDEMA**: _____

b. **LYMPH**: _____

3. Describe the structure of the lymph capillaries in the lymphatic system. Compare the lymph capillaries to the vessels of the cardiovascular system.

4. True or False. (Circle one). Proteins, debris, bacteria, and other large particles can enter the lymphatic capillaries easily unlike the vessels in the cardiovascular system.

Lymph Nodes

5. What is the function of the lymph nodes? _____

6. Describe what causes "swollen glands"?

7. Draw a picture of a lymph node. In your drawing, identify the cortex, follicle, afferent lymphatic vessel, capsule, and efferent lymphatic vessel.

Other Lymphoid Organs

8. Describe the functions of the following lymphoid organs

Lymphoid Organ	Function(s)
Spleen	
Thymus	
Tonsils	
Peyer's Patches	
Appendix	

9. Describe the difference between the innate (nonspecific) immune system and the adaptive (specific) immune system.

Innate Body Defenses

10. List and describe the physical and chemical components of the **first line** of defense.

11. a. What physiological process causes redness and inflammation at the site of an injury?

b. What is the advantage of localized heat at the site of an injury?

c. What is pus? How does it form?

12. The body's second line of defense includes various cell types and responses. Complete the chart below describing the different types of second line of defense and their functions.

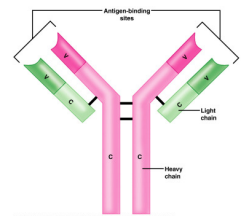
Cellular/Chemical Defense	Job (what does it do? how does it accomplish its job?)
Phagocytes	
Natural killer cells	
Inflammatory response	
Complement proteins	
Interferons	
Fever	

Adaptive Body Defenses

13. How is the third line of defense different from the first two? In other words, what are the 3 important aspects of the adaptive (specific) defense?

14. Describe the difference between humoral (antibody-mediated) immunity and cellular (cell-mediated) immunity?

15. Define **ANTIGEN**: _____



16. Complete the following chart comparing a primary immune response and a secondary immune response.

Type of Immune Response	Happens when...	Speed of response?	Cells involved?
Primary humoral			
Secondary humoral			

17. a) Distinguish between active and passive immunity.

b) Distinguish between naturally acquired and artificially acquired immunity.

c) Describe how one might develop artificially acquired passive immunity. _____

18. What are VACCINES? Give 5 examples of diseases for which we already have vaccines.



19. Define the following terms:

a. Neutralization: _____

b. Agglutination: _____

c. Precipitation: _____

20. In the table below, describe the functions of the following cells in immune response.

Cell	Function
B Cell	
Plasma Cell	
Helper T Cell	
Cytotoxic T Cell	
Regulatory T Cell	
Memory Cell	

21. What are two measures taken to reduce the chances of rejection of a transplanted organ or transplanted tissue?

- 1) _____
- 2) _____

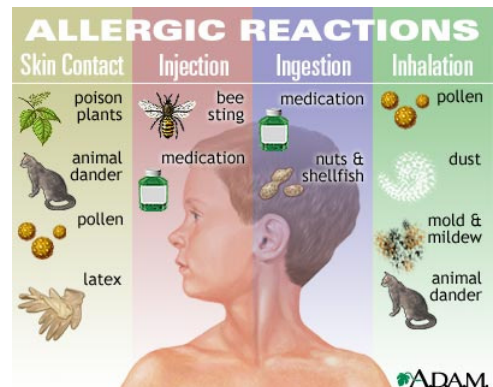
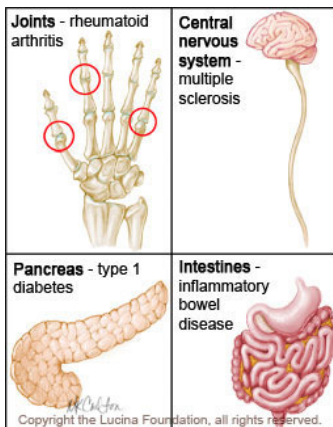
22. a. What is meant by **AUTOIMMUNITY**?

b. What conditions / events might result in autoimmunity?

23. a. What are allergies? _____

b. What are some common **ALLERGENS**? _____

c. What is **ANAPHYLATIC SHOCK**? _____

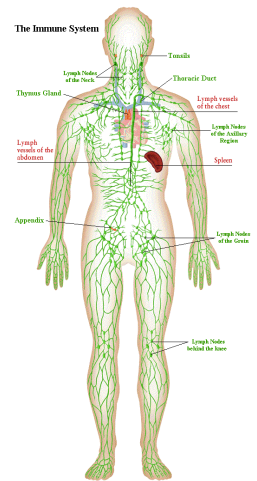


Reading Guide: Chapter 12 - Lymphatic System (pages 398-431)

1. Identify the 2 semi-independent parts of the lymphatic system:

a. _____

b. _____



Lymphatic Vessels

2. Define a. **EDEMA**: _____

b. **LYMPH**: _____

3. Describe the structure of the lymph capillaries in the lymphatic system. Compare the lymph capillaries to the vessels of the cardiovascular system.

4. True or False. (Circle one). Proteins, debris, bacteria, and other large particles can enter the lymphatic capillaries easily unlike the vessels in the cardiovascular system.

Lymph Nodes

5. What is the function of the lymph nodes? _____

6. Describe what causes "swollen glands"?

7. Draw a picture of a lymph node. In your drawing, identify the cortex, follicle, afferent lymphatic vessel, capsule, and efferent lymphatic vessel.

Other Lymphoid Organs

8. Describe the functions of the following lymphoid organs

Lymphoid Organ	Function(s)
Spleen	
Thymus	
Tonsils	
Peyer's Patches	
Appendix	

9. Describe the difference between the innate (nonspecific) immune system and the adaptive (specific) immune system.

Innate Body Defenses

10. List and describe the physical and chemical components of the **first line** of defense.

11. a. What physiological process causes redness and inflammation at the site of an injury?

b. What is the advantage of localized heat at the site of an injury?

c. What is pus? How does it form?

12. The body's second line of defense includes various cell types and responses. Complete the chart below describing the different types of second line of defense and their functions.

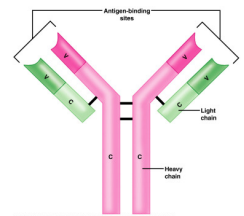
Cellular/Chemical Defense	Job (what does it do? how does it accomplish its job?)
Phagocytes	
Natural killer cells	
Inflammatory response	
Complement proteins	
Interferons	
Fever	

Adaptive Body Defenses

13. How is the third line of defense different from the first two? In other words, what are the 3 important aspects of the adaptive (specific) defense?

14. Describe the difference between humoral (antibody-mediated) immunity and cellular (cell-mediated) immunity?

15. Define **ANTIGEN**: _____



16. Complete the following chart comparing a primary immune response and a secondary immune response.

Type of Immune Response	Happens when...	Speed of response?	Cells involved?
Primary humoral			
Secondary humoral			

17. a) Distinguish between active and passive immunity.

b) Distinguish between naturally acquired and artificially acquired immunity.

c) Describe how one might develop artificially acquired passive immunity. _____

18. What are VACCINES? Give 5 examples of diseases for which we already have vaccines.



19. Define the following terms:

a. Neutralization: _____

b. Agglutination: _____

c. Precipitation: _____

20. In the table below, describe the functions of the following cells in immune response.

Cell	Function
B Cell	
Plasma Cell	
Helper T Cell	
Cytotoxic T Cell	
Regulatory T Cell	
Memory Cell	

21. What are two measures taken to reduce the chances of rejection of a transplanted organ or transplanted tissue?

- 1) _____
- 2) _____

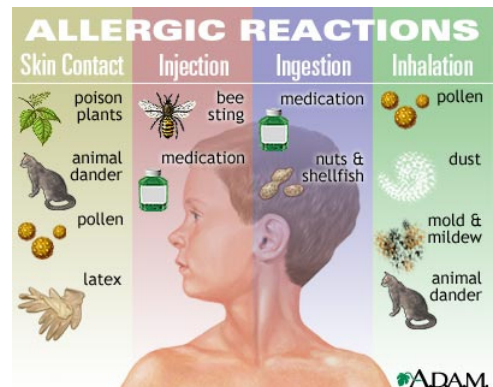
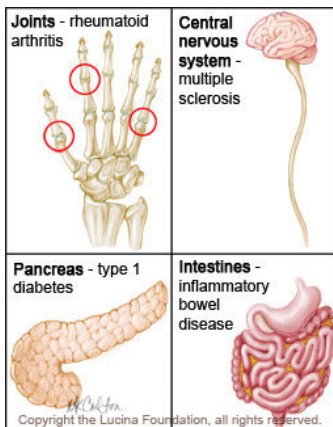
22. a. What is meant by **AUTOIMMUNITY**?

b. What conditions / events might result in autoimmunity?

23. a. What are allergies? _____

b. What are some common **ALLERGENS**? _____

c. What is **ANAPHYLATIC SHOCK**? _____

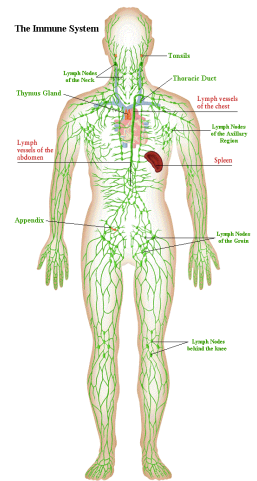


Reading Guide: Chapter 12 - Lymphatic System (pages 398-431)

1. Identify the 2 semi-independent parts of the lymphatic system:

a. _____

b. _____



Lymphatic Vessels

2. Define a. **EDEMA**: _____

b. **LYMPH**: _____

3. Describe the structure of the lymph capillaries in the lymphatic system. Compare the lymph capillaries to the vessels of the cardiovascular system.

4. True or False. (Circle one). Proteins, debris, bacteria, and other large particles can enter the lymphatic capillaries easily unlike the vessels in the cardiovascular system.

Lymph Nodes

5. What is the function of the lymph nodes? _____

6. Describe what causes "swollen glands"?

7. Draw a picture of a lymph node. In your drawing, identify the cortex, follicle, afferent lymphatic vessel, capsule, and efferent lymphatic vessel.

Other Lymphoid Organs

8. Describe the functions of the following lymphoid organs

Lymphoid Organ	Function(s)
Spleen	
Thymus	
Tonsils	
Peyer's Patches	
Appendix	

9. Describe the difference between the innate (nonspecific) immune system and the adaptive (specific) immune system.

Innate Body Defenses

10. List and describe the physical and chemical components of the **first line** of defense.

11. a. What physiological process causes redness and inflammation at the site of an injury?

b. What is the advantage of localized heat at the site of an injury?

c. What is pus? How does it form?

12. The body's second line of defense includes various cell types and responses. Complete the chart below describing the different types of second line of defense and their functions.

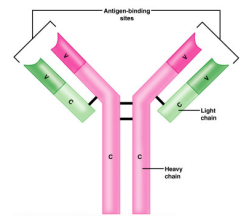
Cellular/Chemical Defense	Job (what does it do? how does it accomplish its job?)
Phagocytes	
Natural killer cells	
Inflammatory response	
Complement proteins	
Interferons	
Fever	

Adaptive Body Defenses

13. How is the third line of defense different from the first two? In other words, what are the 3 important aspects of the adaptive (specific) defense?

14. Describe the difference between humoral (antibody-mediated) immunity and cellular (cell-mediated) immunity?

15. Define **ANTIGEN**: _____



16. Complete the following chart comparing a primary immune response and a secondary immune response.

Type of Immune Response	Happens when...	Speed of response?	Cells involved?
Primary humoral			
Secondary humoral			

17. a) Distinguish between active and passive immunity.

b) Distinguish between naturally acquired and artificially acquired immunity.

c) Describe how one might develop artificially acquired passive immunity. _____

18. What are VACCINES? Give 5 examples of diseases for which we already have vaccines.



19. Define the following terms:

a. Neutralization: _____

b. Agglutination: _____

c. Precipitation: _____

20. In the table below, describe the functions of the following cells in immune response.

Cell	Function
B Cell	
Plasma Cell	
Helper T Cell	
Cytotoxic T Cell	
Regulatory T Cell	
Memory Cell	

21. What are two measures taken to reduce the chances of rejection of a transplanted organ or transplanted tissue?

- 1) _____
- 2) _____

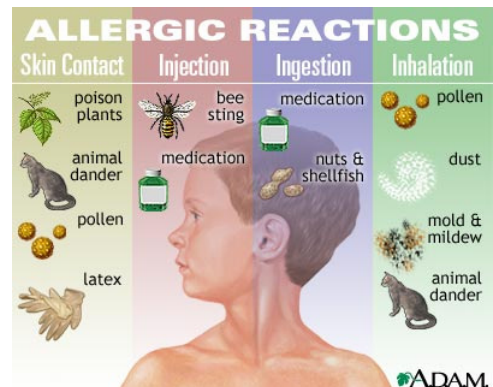
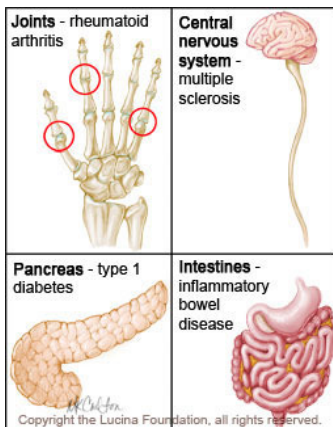
22. a. What is meant by **AUTOIMMUNITY**?

b. What conditions / events might result in autoimmunity?

23. a. What are allergies? _____

b. What are some common **ALLERGENS**? _____

c. What is **ANAPHYLATIC SHOCK**? _____

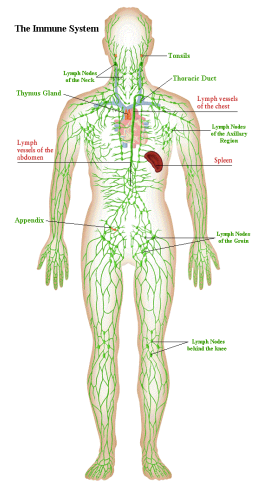


Reading Guide: Chapter 12 - Lymphatic System (pages 398-431)

1. Identify the 2 semi-independent parts of the lymphatic system:

a. _____

b. _____



Lymphatic Vessels

2. Define a. **EDEMA**: _____

b. **LYMPH**: _____

3. Describe the structure of the lymph capillaries in the lymphatic system. Compare the lymph capillaries to the vessels of the cardiovascular system.

4. True or False. (Circle one). Proteins, debris, bacteria, and other large particles can enter the lymphatic capillaries easily unlike the vessels in the cardiovascular system.

Lymph Nodes

5. What is the function of the lymph nodes? _____

6. Describe what causes "swollen glands"?

7. Draw a picture of a lymph node. In your drawing, identify the cortex, follicle, afferent lymphatic vessel, capsule, and efferent lymphatic vessel.

Other Lymphoid Organs

8. Describe the functions of the following lymphoid organs

Lymphoid Organ	Function(s)
Spleen	
Thymus	
Tonsils	
Peyer's Patches	
Appendix	

9. Describe the difference between the innate (nonspecific) immune system and the adaptive (specific) immune system.

Innate Body Defenses

10. List and describe the physical and chemical components of the **first line** of defense.

11. a. What physiological process causes redness and inflammation at the site of an injury?

b. What is the advantage of localized heat at the site of an injury?

c. What is pus? How does it form?

12. The body's second line of defense includes various cell types and responses. Complete the chart below describing the different types of second line of defense and their functions.

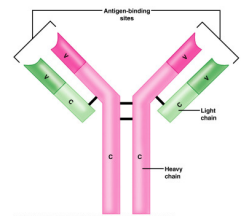
Cellular/Chemical Defense	Job (what does it do? how does it accomplish its job?)
Phagocytes	
Natural killer cells	
Inflammatory response	
Complement proteins	
Interferons	
Fever	

Adaptive Body Defenses

13. How is the third line of defense different from the first two? In other words, what are the 3 important aspects of the adaptive (specific) defense?

14. Describe the difference between humoral (antibody-mediated) immunity and cellular (cell-mediated) immunity?

15. Define **ANTIGEN**: _____



16. Complete the following chart comparing a primary immune response and a secondary immune response.

Type of Immune Response	Happens when...	Speed of response?	Cells involved?
Primary humoral			
Secondary humoral			

17. a) Distinguish between active and passive immunity.

b) Distinguish between naturally acquired and artificially acquired immunity.

c) Describe how one might develop artificially acquired passive immunity. _____

18. What are VACCINES? Give 5 examples of diseases for which we already have vaccines.



19. Define the following terms:

a. Neutralization: _____

b. Agglutination: _____

c. Precipitation: _____

20. In the table below, describe the functions of the following cells in immune response.

Cell	Function
B Cell	
Plasma Cell	
Helper T Cell	
Cytotoxic T Cell	
Regulatory T Cell	
Memory Cell	

21. What are two measures taken to reduce the chances of rejection of a transplanted organ or transplanted tissue?

- 1) _____
- 2) _____

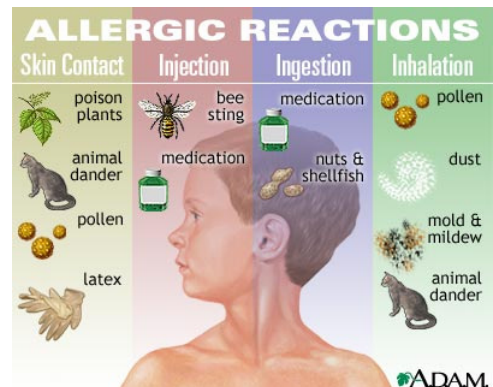
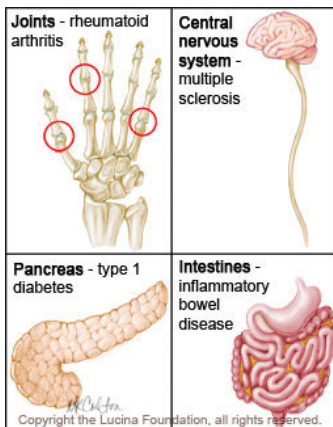
22. a. What is meant by **AUTOIMMUNITY**?

b. What conditions / events might result in autoimmunity?

23. a. What are allergies? _____

b. What are some common **ALLERGENS**? _____

c. What is **ANAPHYLATIC SHOCK**? _____

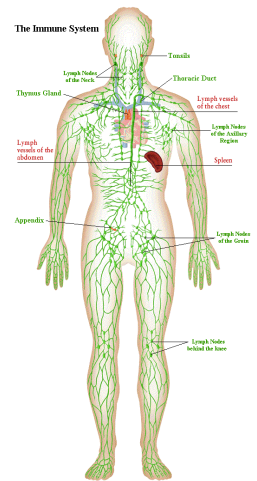


Reading Guide: Chapter 12 - Lymphatic System (pages 398-431)

1. Identify the 2 semi-independent parts of the lymphatic system:

a. _____

b. _____



Lymphatic Vessels

2. Define a. **EDEMA**: _____

b. **LYMPH**: _____

3. Describe the structure of the lymph capillaries in the lymphatic system. Compare the lymph capillaries to the vessels of the cardiovascular system.

4. True or False. (Circle one). Proteins, debris, bacteria, and other large particles can enter the lymphatic capillaries easily unlike the vessels in the cardiovascular system.

Lymph Nodes

5. What is the function of the lymph nodes? _____

6. Describe what causes "swollen glands"?

7. Draw a picture of a lymph node. In your drawing, identify the cortex, follicle, afferent lymphatic vessel, capsule, and efferent lymphatic vessel.

Other Lymphoid Organs

8. Describe the functions of the following lymphoid organs

Lymphoid Organ	Function(s)
Spleen	
Thymus	
Tonsils	
Peyer's Patches	
Appendix	

9. Describe the difference between the innate (nonspecific) immune system and the adaptive (specific) immune system.

Innate Body Defenses

10. List and describe the physical and chemical components of the **first line** of defense.

11. a. What physiological process causes redness and inflammation at the site of an injury?

b. What is the advantage of localized heat at the site of an injury?

c. What is pus? How does it form?

12. The body's second line of defense includes various cell types and responses. Complete the chart below describing the different types of second line of defense and their functions.

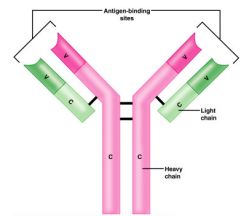
Cellular/Chemical Defense	Job (what does it do? how does it accomplish its job?)
Phagocytes	
Natural killer cells	
Inflammatory response	
Complement proteins	
Interferons	
Fever	

Adaptive Body Defenses

13. How is the third line of defense different from the first two? In other words, what are the 3 important aspects of the adaptive (specific) defense?

14. Describe the difference between humoral (antibody-mediated) immunity and cellular (cell-mediated) immunity?

15. Define **ANTIGEN**: _____



16. Complete the following chart comparing a primary immune response and a secondary immune response.

Type of Immune Response	Happens when...	Speed of response?	Cells involved?
Primary humoral			
Secondary humoral			

17. a) Distinguish between active and passive immunity.

b) Distinguish between naturally acquired and artificially acquired immunity.

c) Describe how one might develop artificially acquired passive immunity. _____

18. What are VACCINES? Give 5 examples of diseases for which we already have vaccines.



19. Define the following terms:

a. Neutralization: _____

b. Agglutination: _____

c. Precipitation: _____

20. In the table below, describe the functions of the following cells in immune response.

Cell	Function
B Cell	
Plasma Cell	
Helper T Cell	
Cytotoxic T Cell	
Regulatory T Cell	
Memory Cell	

21. What are two measures taken to reduce the chances of rejection of a transplanted organ or transplanted tissue?

- 1) _____
- 2) _____

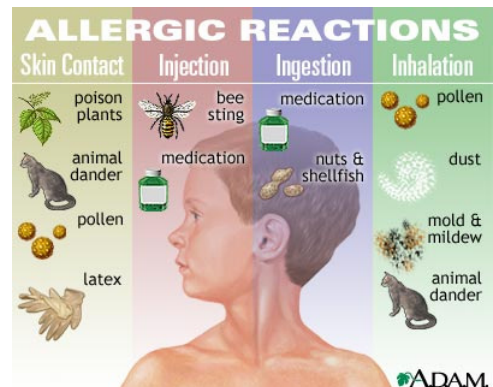
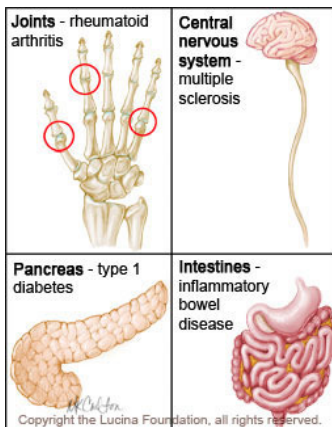
22. a. What is meant by **AUTOIMMUNITY**?

b. What conditions / events might result in autoimmunity?

23. a. What are allergies? _____

b. What are some common **ALLERGENS**? _____

c. What is **ANAPHYLATIC SHOCK**? _____

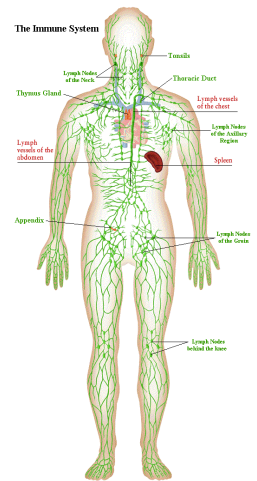


Reading Guide: Chapter 12 - Lymphatic System (pages 398-431)

1. Identify the 2 semi-independent parts of the lymphatic system:

a. _____

b. _____



Lymphatic Vessels

2. Define a. **EDEMA**: _____

b. **LYMPH**: _____

3. Describe the structure of the lymph capillaries in the lymphatic system. Compare the lymph capillaries to the vessels of the cardiovascular system.

4. True or False. (Circle one). Proteins, debris, bacteria, and other large particles can enter the lymphatic capillaries easily unlike the vessels in the cardiovascular system.

Lymph Nodes

5. What is the function of the lymph nodes? _____

6. Describe what causes "swollen glands"?

7. Draw a picture of a lymph node. In your drawing, identify the cortex, follicle, afferent lymphatic vessel, capsule, and efferent lymphatic vessel.

Other Lymphoid Organs

8. Describe the functions of the following lymphoid organs

Lymphoid Organ	Function(s)
Spleen	
Thymus	
Tonsils	
Peyer's Patches	
Appendix	

9. Describe the difference between the innate (nonspecific) immune system and the adaptive (specific) immune system.

Innate Body Defenses

10. List and describe the physical and chemical components of the **first line** of defense.

11. a. What physiological process causes redness and inflammation at the site of an injury?

b. What is the advantage of localized heat at the site of an injury?

c. What is pus? How does it form?

12. The body's second line of defense includes various cell types and responses. Complete the chart below describing the different types of second line of defense and their functions.

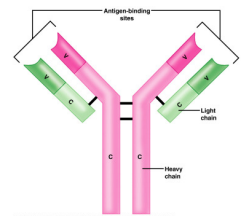
Cellular/Chemical Defense	Job (what does it do? how does it accomplish its job?)
Phagocytes	
Natural killer cells	
Inflammatory response	
Complement proteins	
Interferons	
Fever	

Adaptive Body Defenses

13. How is the third line of defense different from the first two? In other words, what are the 3 important aspects of the adaptive (specific) defense?

14. Describe the difference between humoral (antibody-mediated) immunity and cellular (cell-mediated) immunity?

15. Define **ANTIGEN**: _____



16. Complete the following chart comparing a primary immune response and a secondary immune response.

Type of Immune Response	Happens when...	Speed of response?	Cells involved?
Primary humoral			
Secondary humoral			

17. a) Distinguish between active and passive immunity.

b) Distinguish between naturally acquired and artificially acquired immunity.

c) Describe how one might develop artificially acquired passive immunity. _____

18. What are VACCINES? Give 5 examples of diseases for which we already have vaccines.



19. Define the following terms:

a. Neutralization: _____

b. Agglutination: _____

c. Precipitation: _____

20. In the table below, describe the functions of the following cells in immune response.

Cell	Function
B Cell	
Plasma Cell	
Helper T Cell	
Cytotoxic T Cell	
Regulatory T Cell	
Memory Cell	

21. What are two measures taken to reduce the chances of rejection of a transplanted organ or transplanted tissue?

- 1) _____
- 2) _____

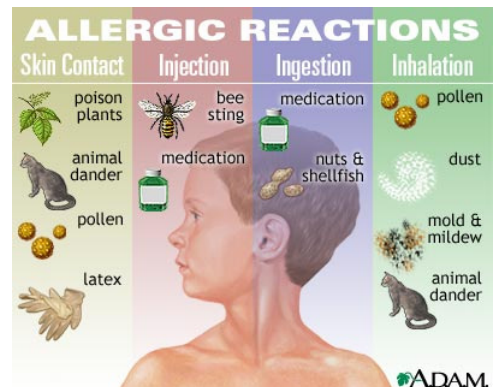
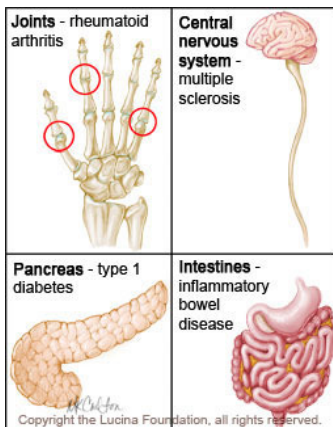
22. a. What is meant by **AUTOIMMUNITY**?

b. What conditions / events might result in autoimmunity?

23. a. What are allergies? _____

b. What are some common **ALLERGENS**? _____

c. What is **ANAPHYLATIC SHOCK**? _____

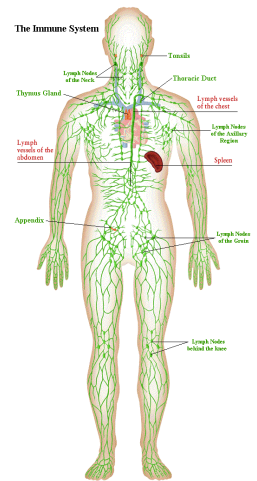


Reading Guide: Chapter 12 - Lymphatic System (pages 398-431)

1. Identify the 2 semi-independent parts of the lymphatic system:

a. _____

b. _____



Lymphatic Vessels

2. Define a. **EDEMA**: _____

b. **LYMPH**: _____

3. Describe the structure of the lymph capillaries in the lymphatic system. Compare the lymph capillaries to the vessels of the cardiovascular system.

4. True or False. (Circle one). Proteins, debris, bacteria, and other large particles can enter the lymphatic capillaries easily unlike the vessels in the cardiovascular system.

Lymph Nodes

5. What is the function of the lymph nodes? _____

6. Describe what causes "swollen glands"?

7. Draw a picture of a lymph node. In your drawing, identify the cortex, follicle, afferent lymphatic vessel, capsule, and efferent lymphatic vessel.

Other Lymphoid Organs

8. Describe the functions of the following lymphoid organs

Lymphoid Organ	Function(s)
Spleen	
Thymus	
Tonsils	
Peyer's Patches	
Appendix	

9. Describe the difference between the innate (nonspecific) immune system and the adaptive (specific) immune system.

Innate Body Defenses

10. List and describe the physical and chemical components of the **first line** of defense.

11. a. What physiological process causes redness and inflammation at the site of an injury?

b. What is the advantage of localized heat at the site of an injury?

c. What is pus? How does it form?

12. The body's second line of defense includes various cell types and responses. Complete the chart below describing the different types of second line of defense and their functions.

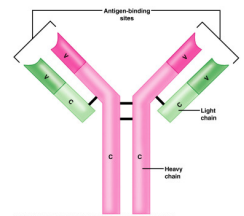
Cellular/Chemical Defense	Job (what does it do? how does it accomplish its job?)
Phagocytes	
Natural killer cells	
Inflammatory response	
Complement proteins	
Interferons	
Fever	

Adaptive Body Defenses

13. How is the third line of defense different from the first two? In other words, what are the 3 important aspects of the adaptive (specific) defense?

14. Describe the difference between humoral (antibody-mediated) immunity and cellular (cell-mediated) immunity?

15. Define **ANTIGEN**: _____



16. Complete the following chart comparing a primary immune response and a secondary immune response.

Type of Immune Response	Happens when...	Speed of response?	Cells involved?
Primary humoral			
Secondary humoral			

17. a) Distinguish between active and passive immunity.

b) Distinguish between naturally acquired and artificially acquired immunity.

c) Describe how one might develop artificially acquired passive immunity. _____

18. What are VACCINES? Give 5 examples of diseases for which we already have vaccines.



19. Define the following terms:

a. Neutralization: _____

b. Agglutination: _____

c. Precipitation: _____

20. In the table below, describe the functions of the following cells in immune response.

Cell	Function
B Cell	
Plasma Cell	
Helper T Cell	
Cytotoxic T Cell	
Regulatory T Cell	
Memory Cell	

21. What are two measures taken to reduce the chances of rejection of a transplanted organ or transplanted tissue?

- 1) _____
- 2) _____

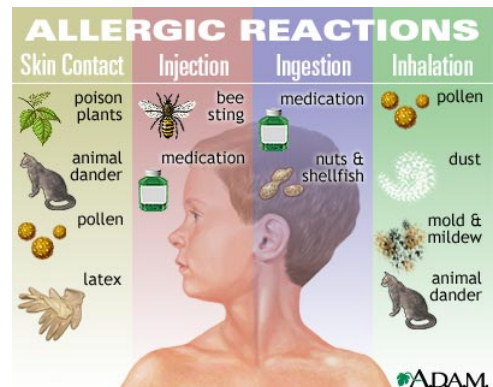
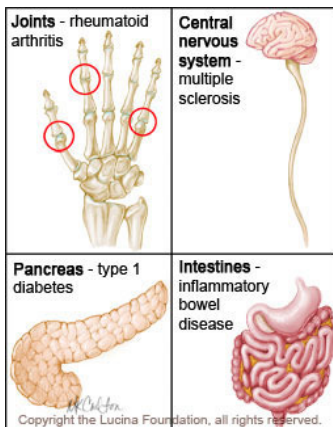
22. a. What is meant by **AUTOIMMUNITY**?

b. What conditions / events might result in autoimmunity?

23. a. What are allergies? _____

b. What are some common **ALLERGENS**? _____

c. What is **ANAPHYLATIC SHOCK**? _____

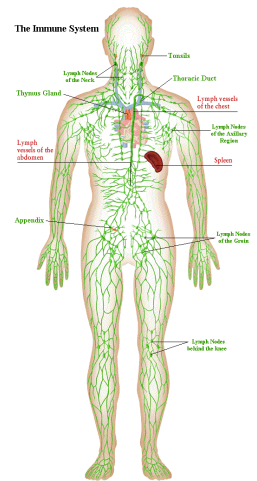


Reading Guide: Chapter 12 - Lymphatic System (pages 398-431)

1. Identify the 2 semi-independent parts of the lymphatic system:

a. _____

b. _____



Lymphatic Vessels

2. Define a. **EDEMA**: _____

b. **LYMPH**: _____

3. Describe the structure of the lymph capillaries in the lymphatic system. Compare the lymph capillaries to the vessels of the cardiovascular system.

4. True or False. (Circle one). Proteins, debris, bacteria, and other large particles can enter the lymphatic capillaries easily unlike the vessels in the cardiovascular system.

Lymph Nodes

5. What is the function of the lymph nodes? _____

6. Describe what causes "swollen glands"?

7. Draw a picture of a lymph node. In your drawing, identify the cortex, follicle, afferent lymphatic vessel, capsule, and efferent lymphatic vessel.

Other Lymphoid Organs

8. Describe the functions of the following lymphoid organs

Lymphoid Organ	Function(s)
Spleen	
Thymus	
Tonsils	
Peyer's Patches	
Appendix	

9. Describe the difference between the innate (nonspecific) immune system and the adaptive (specific) immune system.

Innate Body Defenses

10. List and describe the physical and chemical components of the **first line** of defense.

11. a. What physiological process causes redness and inflammation at the site of an injury?

b. What is the advantage of localized heat at the site of an injury?

c. What is pus? How does it form?

12. The body's second line of defense includes various cell types and responses. Complete the chart below describing the different types of second line of defense and their functions.

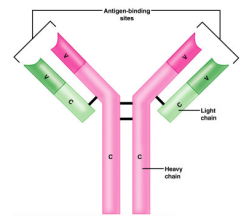
Cellular/Chemical Defense	Job (what does it do? how does it accomplish its job?)
Phagocytes	
Natural killer cells	
Inflammatory response	
Complement proteins	
Interferons	
Fever	

Adaptive Body Defenses

13. How is the third line of defense different from the first two? In other words, what are the 3 important aspects of the adaptive (specific) defense?

14. Describe the difference between humoral (antibody-mediated) immunity and cellular (cell-mediated) immunity?

15. Define **ANTIGEN**: _____



16. Complete the following chart comparing a primary immune response and a secondary immune response.

Type of Immune Response	Happens when...	Speed of response?	Cells involved?
Primary humoral			
Secondary humoral			

17. a) Distinguish between active and passive immunity.

b) Distinguish between naturally acquired and artificially acquired immunity.

c) Describe how one might develop artificially acquired passive immunity. _____

18. What are VACCINES? Give 5 examples of diseases for which we already have vaccines.



19. Define the following terms:

a. Neutralization: _____

b. Agglutination: _____

c. Precipitation: _____

20. In the table below, describe the functions of the following cells in immune response.

Cell	Function
B Cell	
Plasma Cell	
Helper T Cell	
Cytotoxic T Cell	
Regulatory T Cell	
Memory Cell	

21. What are two measures taken to reduce the chances of rejection of a transplanted organ or transplanted tissue?

- 1) _____
- 2) _____

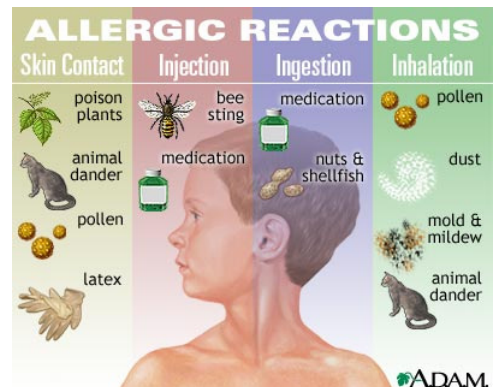
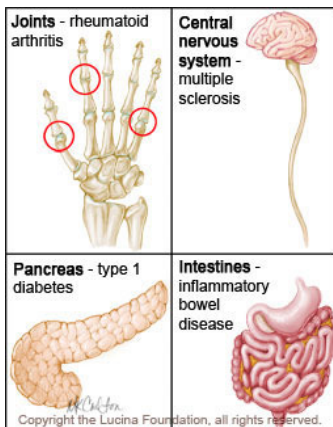
22. a. What is meant by **AUTOIMMUNITY**?

b. What conditions / events might result in autoimmunity?

23. a. What are allergies? _____

b. What are some common **ALLERGENS**? _____

c. What is **ANAPHYLATIC SHOCK**? _____

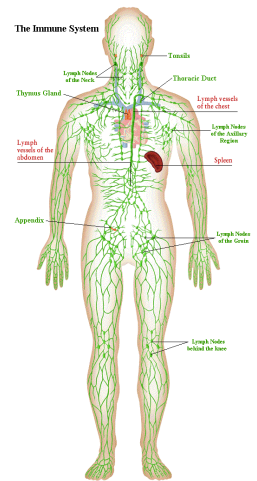


Reading Guide: Chapter 12 - Lymphatic System (pages 398-431)

1. Identify the 2 semi-independent parts of the lymphatic system:

a. _____

b. _____



Lymphatic Vessels

2. Define a. **EDEMA**: _____

b. **LYMPH**: _____

3. Describe the structure of the lymph capillaries in the lymphatic system. Compare the lymph capillaries to the vessels of the cardiovascular system.

4. True or False. (Circle one). Proteins, debris, bacteria, and other large particles can enter the lymphatic capillaries easily unlike the vessels in the cardiovascular system.

Lymph Nodes

5. What is the function of the lymph nodes? _____

6. Describe what causes "swollen glands"?

7. Draw a picture of a lymph node. In your drawing, identify the cortex, follicle, afferent lymphatic vessel, capsule, and efferent lymphatic vessel.

Other Lymphoid Organs

8. Describe the functions of the following lymphoid organs

Lymphoid Organ	Function(s)
Spleen	
Thymus	
Tonsils	
Peyer's Patches	
Appendix	

9. Describe the difference between the innate (nonspecific) immune system and the adaptive (specific) immune system.

Innate Body Defenses

10. List and describe the physical and chemical components of the **first line** of defense.

11. a. What physiological process causes redness and inflammation at the site of an injury?

b. What is the advantage of localized heat at the site of an injury?

c. What is pus? How does it form?

12. The body's second line of defense includes various cell types and responses. Complete the chart below describing the different types of second line of defense and their functions.

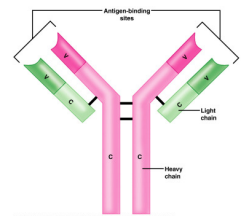
Cellular/Chemical Defense	Job (what does it do? how does it accomplish its job?)
Phagocytes	
Natural killer cells	
Inflammatory response	
Complement proteins	
Interferons	
Fever	

Adaptive Body Defenses

13. How is the third line of defense different from the first two? In other words, what are the 3 important aspects of the adaptive (specific) defense?

14. Describe the difference between humoral (antibody-mediated) immunity and cellular (cell-mediated) immunity?

15. Define **ANTIGEN**: _____



16. Complete the following chart comparing a primary immune response and a secondary immune response.

Type of Immune Response	Happens when...	Speed of response?	Cells involved?
Primary humoral			
Secondary humoral			

17. a) Distinguish between active and passive immunity.

b) Distinguish between naturally acquired and artificially acquired immunity.

c) Describe how one might develop artificially acquired passive immunity. _____

18. What are VACCINES? Give 5 examples of diseases for which we already have vaccines.



19. Define the following terms:

a. Neutralization: _____

b. Agglutination: _____

c. Precipitation: _____

20. In the table below, describe the functions of the following cells in immune response.

Cell	Function
B Cell	
Plasma Cell	
Helper T Cell	
Cytotoxic T Cell	
Regulatory T Cell	
Memory Cell	

21. What are two measures taken to reduce the chances of rejection of a transplanted organ or transplanted tissue?

- 1) _____
- 2) _____

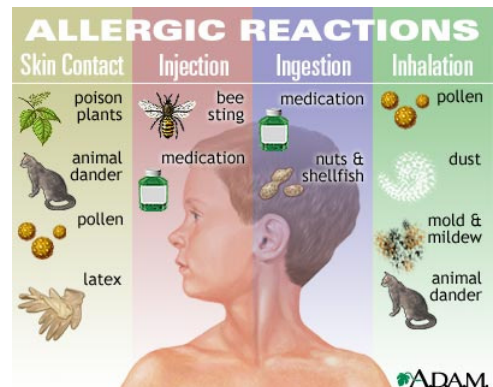
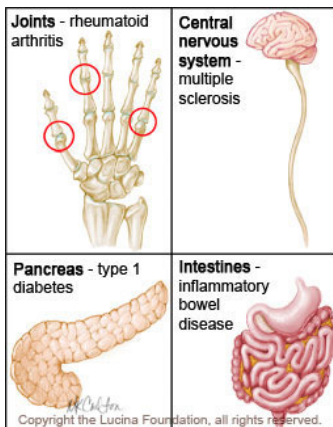
22. a. What is meant by **AUTOIMMUNITY**?

b. What conditions / events might result in autoimmunity?

23. a. What are allergies? _____

b. What are some common **ALLERGENS**? _____

c. What is **ANAPHYLATIC SHOCK**? _____

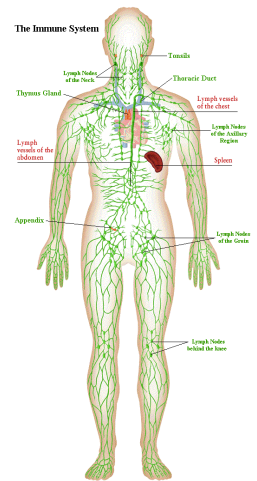


Reading Guide: Chapter 12 - Lymphatic System (pages 398-431)

1. Identify the 2 semi-independent parts of the lymphatic system:

a. _____

b. _____



Lymphatic Vessels

2. Define a. **EDEMA**: _____

b. **LYMPH**: _____

3. Describe the structure of the lymph capillaries in the lymphatic system. Compare the lymph capillaries to the vessels of the cardiovascular system.

4. True or False. (Circle one). Proteins, debris, bacteria, and other large particles can enter the lymphatic capillaries easily unlike the vessels in the cardiovascular system.

Lymph Nodes

5. What is the function of the lymph nodes? _____

6. Describe what causes "swollen glands"?

7. Draw a picture of a lymph node. In your drawing, identify the cortex, follicle, afferent lymphatic vessel, capsule, and efferent lymphatic vessel.

Other Lymphoid Organs

8. Describe the functions of the following lymphoid organs

Lymphoid Organ	Function(s)
Spleen	
Thymus	
Tonsils	
Peyer's Patches	
Appendix	

9. Describe the difference between the innate (nonspecific) immune system and the adaptive (specific) immune system.

Innate Body Defenses

10. List and describe the physical and chemical components of the **first line** of defense.

11. a. What physiological process causes redness and inflammation at the site of an injury?

b. What is the advantage of localized heat at the site of an injury?

c. What is pus? How does it form?

12. The body's second line of defense includes various cell types and responses. Complete the chart below describing the different types of second line of defense and their functions.

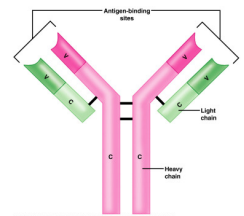
Cellular/Chemical Defense	Job (what does it do? how does it accomplish its job?)
Phagocytes	
Natural killer cells	
Inflammatory response	
Complement proteins	
Interferons	
Fever	

Adaptive Body Defenses

13. How is the third line of defense different from the first two? In other words, what are the 3 important aspects of the adaptive (specific) defense?

14. Describe the difference between humoral (antibody-mediated) immunity and cellular (cell-mediated) immunity?

15. Define **ANTIGEN**: _____



16. Complete the following chart comparing a primary immune response and a secondary immune response.

Type of Immune Response	Happens when...	Speed of response?	Cells involved?
Primary humoral			
Secondary humoral			

17. a) Distinguish between active and passive immunity.

b) Distinguish between naturally acquired and artificially acquired immunity.

c) Describe how one might develop artificially acquired passive immunity. _____

18. What are VACCINES? Give 5 examples of diseases for which we already have vaccines.



19. Define the following terms:

a. Neutralization: _____

b. Agglutination: _____

c. Precipitation: _____

20. In the table below, describe the functions of the following cells in immune response.

Cell	Function
B Cell	
Plasma Cell	
Helper T Cell	
Cytotoxic T Cell	
Regulatory T Cell	
Memory Cell	

21. What are two measures taken to reduce the chances of rejection of a transplanted organ or transplanted tissue?

- 1) _____
- 2) _____

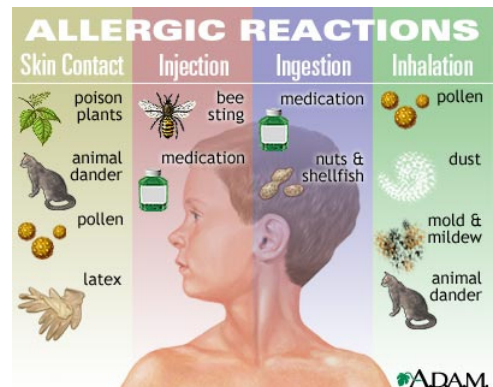
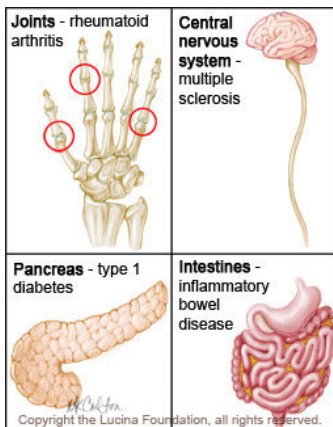
22. a. What is meant by **AUTOIMMUNITY**?

b. What conditions / events might result in autoimmunity?

23. a. What are allergies? _____

b. What are some common **ALLERGENS**? _____

c. What is **ANAPHYLATIC SHOCK**? _____

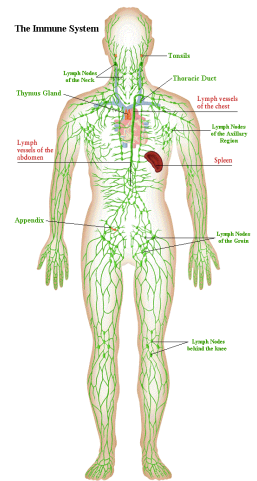


Reading Guide: Chapter 12 - Lymphatic System (pages 398-431)

1. Identify the 2 semi-independent parts of the lymphatic system:

a. _____

b. _____



Lymphatic Vessels

2. Define a. **EDEMA**: _____

b. **LYMPH**: _____

3. Describe the structure of the lymph capillaries in the lymphatic system. Compare the lymph capillaries to the vessels of the cardiovascular system.

4. True or False. (Circle one). Proteins, debris, bacteria, and other large particles can enter the lymphatic capillaries easily unlike the vessels in the cardiovascular system.

Lymph Nodes

5. What is the function of the lymph nodes? _____

6. Describe what causes "swollen glands"?

7. Draw a picture of a lymph node. In your drawing, identify the cortex, follicle, afferent lymphatic vessel, capsule, and efferent lymphatic vessel.

Other Lymphoid Organs

8. Describe the functions of the following lymphoid organs

Lymphoid Organ	Function(s)
Spleen	
Thymus	
Tonsils	
Peyer's Patches	
Appendix	

9. Describe the difference between the innate (nonspecific) immune system and the adaptive (specific) immune system.

Innate Body Defenses

10. List and describe the physical and chemical components of the **first line** of defense.

11. a. What physiological process causes redness and inflammation at the site of an injury?

b. What is the advantage of localized heat at the site of an injury?

c. What is pus? How does it form?

12. The body's second line of defense includes various cell types and responses. Complete the chart below describing the different types of second line of defense and their functions.

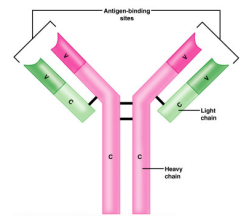
Cellular/Chemical Defense	Job (what does it do? how does it accomplish its job?)
Phagocytes	
Natural killer cells	
Inflammatory response	
Complement proteins	
Interferons	
Fever	

Adaptive Body Defenses

13. How is the third line of defense different from the first two? In other words, what are the 3 important aspects of the adaptive (specific) defense?

14. Describe the difference between humoral (antibody-mediated) immunity and cellular (cell-mediated) immunity?

15. Define **ANTIGEN**: _____



16. Complete the following chart comparing a primary immune response and a secondary immune response.

Type of Immune Response	Happens when...	Speed of response?	Cells involved?
Primary humoral			
Secondary humoral			

17. a) Distinguish between active and passive immunity.

b) Distinguish between naturally acquired and artificially acquired immunity.

c) Describe how one might develop artificially acquired passive immunity. _____

18. What are VACCINES? Give 5 examples of diseases for which we already have vaccines.



19. Define the following terms:

a. Neutralization: _____

b. Agglutination: _____

c. Precipitation: _____

20. In the table below, describe the functions of the following cells in immune response.

Cell	Function
B Cell	
Plasma Cell	
Helper T Cell	
Cytotoxic T Cell	
Regulatory T Cell	
Memory Cell	

21. What are two measures taken to reduce the chances of rejection of a transplanted organ or transplanted tissue?

- 1) _____
- 2) _____

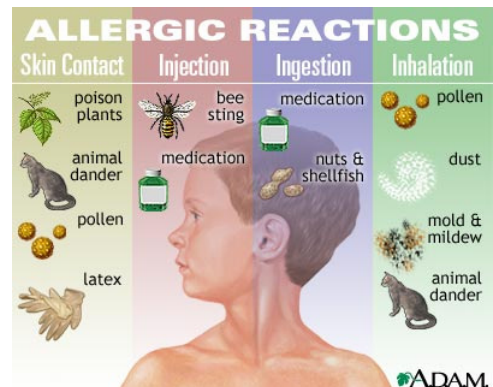
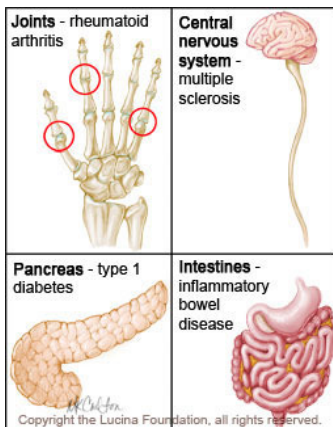
22. a. What is meant by **AUTOIMMUNITY**?

b. What conditions / events might result in autoimmunity?

23. a. What are allergies? _____

b. What are some common **ALLERGENS**? _____

c. What is **ANAPHYLATIC SHOCK**? _____

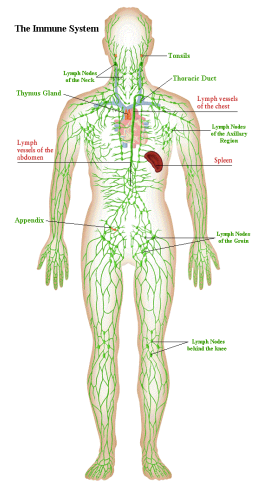


Reading Guide: Chapter 12 - Lymphatic System (pages 398-431)

1. Identify the 2 semi-independent parts of the lymphatic system:

a. _____

b. _____



Lymphatic Vessels

2. Define a. **EDEMA**: _____

b. **LYMPH**: _____

3. Describe the structure of the lymph capillaries in the lymphatic system. Compare the lymph capillaries to the vessels of the cardiovascular system.

4. True or False. (Circle one). Proteins, debris, bacteria, and other large particles can enter the lymphatic capillaries easily unlike the vessels in the cardiovascular system.

Lymph Nodes

5. What is the function of the lymph nodes? _____

6. Describe what causes "swollen glands"?

7. Draw a picture of a lymph node. In your drawing, identify the cortex, follicle, afferent lymphatic vessel, capsule, and efferent lymphatic vessel.

Other Lymphoid Organs

8. Describe the functions of the following lymphoid organs

Lymphoid Organ	Function(s)
Spleen	
Thymus	
Tonsils	
Peyer's Patches	
Appendix	

9. Describe the difference between the innate (nonspecific) immune system and the adaptive (specific) immune system.

Innate Body Defenses

10. List and describe the physical and chemical components of the **first line** of defense.

11. a. What physiological process causes redness and inflammation at the site of an injury?

b. What is the advantage of localized heat at the site of an injury?

c. What is pus? How does it form?

12. The body's second line of defense includes various cell types and responses. Complete the chart below describing the different types of second line of defense and their functions.

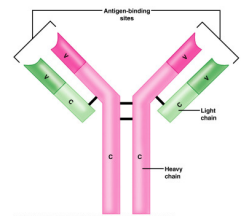
Cellular/Chemical Defense	Job (what does it do? how does it accomplish its job?)
Phagocytes	
Natural killer cells	
Inflammatory response	
Complement proteins	
Interferons	
Fever	

Adaptive Body Defenses

13. How is the third line of defense different from the first two? In other words, what are the 3 important aspects of the adaptive (specific) defense?

14. Describe the difference between humoral (antibody-mediated) immunity and cellular (cell-mediated) immunity?

15. Define **ANTIGEN**: _____



16. Complete the following chart comparing a primary immune response and a secondary immune response.

Type of Immune Response	Happens when...	Speed of response?	Cells involved?
Primary humoral			
Secondary humoral			

17. a) Distinguish between active and passive immunity.

b) Distinguish between naturally acquired and artificially acquired immunity.

c) Describe how one might develop artificially acquired passive immunity. _____

18. What are VACCINES? Give 5 examples of diseases for which we already have vaccines.



19. Define the following terms:

a. Neutralization: _____

b. Agglutination: _____

c. Precipitation: _____

20. In the table below, describe the functions of the following cells in immune response.

Cell	Function
B Cell	
Plasma Cell	
Helper T Cell	
Cytotoxic T Cell	
Regulatory T Cell	
Memory Cell	

21. What are two measures taken to reduce the chances of rejection of a transplanted organ or transplanted tissue?

- 1) _____
- 2) _____

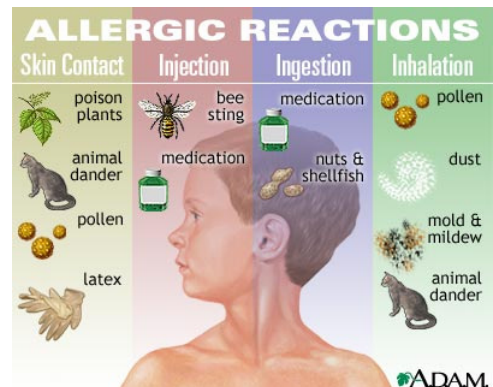
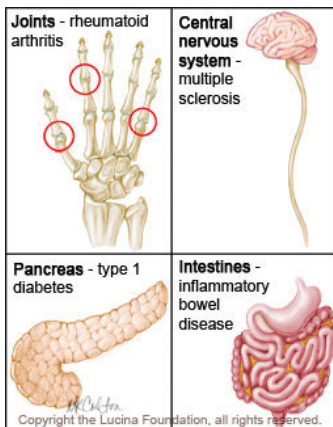
22. a. What is meant by **AUTOIMMUNITY**?

b. What conditions / events might result in autoimmunity?

23. a. What are allergies? _____

b. What are some common **ALLERGENS**? _____

c. What is **ANAPHYLATIC SHOCK**? _____

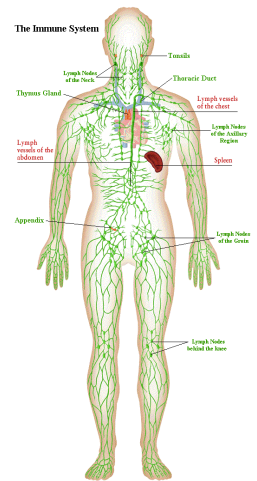


Reading Guide: Chapter 12 - Lymphatic System (pages 398-431)

1. Identify the 2 semi-independent parts of the lymphatic system:

a. _____

b. _____



Lymphatic Vessels

2. Define a. **EDEMA**: _____

b. **LYMPH**: _____

3. Describe the structure of the lymph capillaries in the lymphatic system. Compare the lymph capillaries to the vessels of the cardiovascular system.

4. True or False. (Circle one). Proteins, debris, bacteria, and other large particles can enter the lymphatic capillaries easily unlike the vessels in the cardiovascular system.

Lymph Nodes

5. What is the function of the lymph nodes? _____

6. Describe what causes "swollen glands"?

7. Draw a picture of a lymph node. In your drawing, identify the cortex, follicle, afferent lymphatic vessel, capsule, and efferent lymphatic vessel.

Other Lymphoid Organs

8. Describe the functions of the following lymphoid organs

Lymphoid Organ	Function(s)
Spleen	
Thymus	
Tonsils	
Peyer's Patches	
Appendix	

9. Describe the difference between the innate (nonspecific) immune system and the adaptive (specific) immune system.

Innate Body Defenses

10. List and describe the physical and chemical components of the **first line** of defense.

11. a. What physiological process causes redness and inflammation at the site of an injury?

b. What is the advantage of localized heat at the site of an injury?

c. What is pus? How does it form?

12. The body's second line of defense includes various cell types and responses. Complete the chart below describing the different types of second line of defense and their functions.

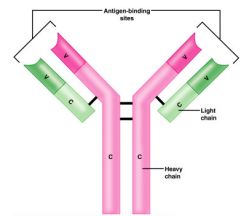
Cellular/Chemical Defense	Job (what does it do? how does it accomplish its job?)
Phagocytes	
Natural killer cells	
Inflammatory response	
Complement proteins	
Interferons	
Fever	

Adaptive Body Defenses

13. How is the third line of defense different from the first two? In other words, what are the 3 important aspects of the adaptive (specific) defense?

14. Describe the difference between humoral (antibody-mediated) immunity and cellular (cell-mediated) immunity?

15. Define **ANTIGEN**: _____



16. Complete the following chart comparing a primary immune response and a secondary immune response.

Type of Immune Response	Happens when...	Speed of response?	Cells involved?
Primary humoral			
Secondary humoral			

17. a) Distinguish between active and passive immunity.

b) Distinguish between naturally acquired and artificially acquired immunity.

c) Describe how one might develop artificially acquired passive immunity. _____

18. What are VACCINES? Give 5 examples of diseases for which we already have vaccines.



19. Define the following terms:

a. Neutralization: _____

b. Agglutination: _____

c. Precipitation: _____

20. In the table below, describe the functions of the following cells in immune response.

Cell	Function
B Cell	
Plasma Cell	
Helper T Cell	
Cytotoxic T Cell	
Regulatory T Cell	
Memory Cell	

21. What are two measures taken to reduce the chances of rejection of a transplanted organ or transplanted tissue?

- 1) _____
- 2) _____

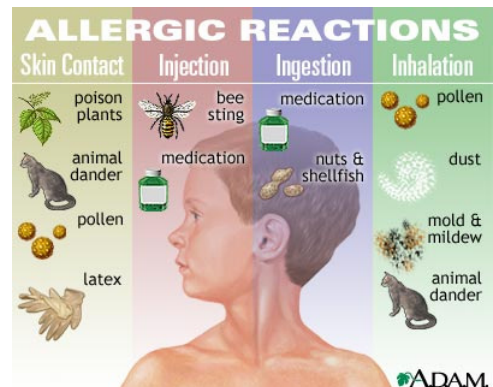
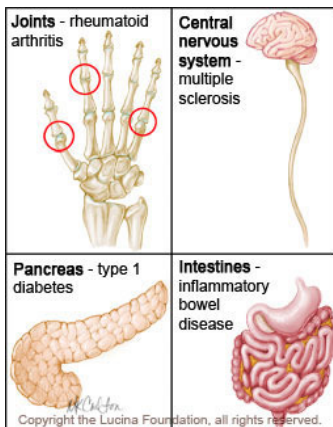
22. a. What is meant by **AUTOIMMUNITY**?

b. What conditions / events might result in autoimmunity?

23. a. What are allergies? _____

b. What are some common **ALLERGENS**? _____

c. What is **ANAPHYLATIC SHOCK**? _____

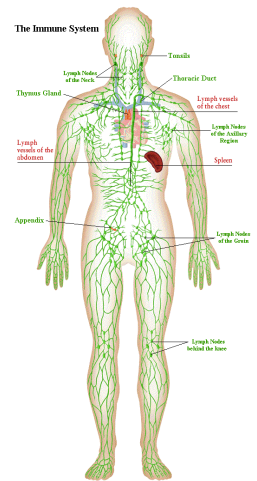


Reading Guide: Chapter 12 - Lymphatic System (pages 398-431)

1. Identify the 2 semi-independent parts of the lymphatic system:

a. _____

b. _____



Lymphatic Vessels

2. Define a. **EDEMA**: _____

b. **LYMPH**: _____

3. Describe the structure of the lymph capillaries in the lymphatic system. Compare the lymph capillaries to the vessels of the cardiovascular system.

4. True or False. (Circle one). Proteins, debris, bacteria, and other large particles can enter the lymphatic capillaries easily unlike the vessels in the cardiovascular system.

Lymph Nodes

5. What is the function of the lymph nodes? _____

6. Describe what causes "swollen glands"?

7. Draw a picture of a lymph node. In your drawing, identify the cortex, follicle, afferent lymphatic vessel, capsule, and efferent lymphatic vessel.

Other Lymphoid Organs

8. Describe the functions of the following lymphoid organs

Lymphoid Organ	Function(s)
Spleen	
Thymus	
Tonsils	
Peyer's Patches	
Appendix	

9. Describe the difference between the innate (nonspecific) immune system and the adaptive (specific) immune system.

Innate Body Defenses

10. List and describe the physical and chemical components of the **first line** of defense.

11. a. What physiological process causes redness and inflammation at the site of an injury?

b. What is the advantage of localized heat at the site of an injury?

c. What is pus? How does it form?

12. The body's second line of defense includes various cell types and responses. Complete the chart below describing the different types of second line of defense and their functions.

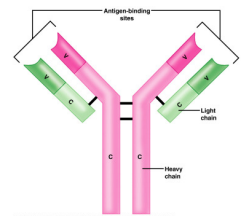
Cellular/Chemical Defense	Job (what does it do? how does it accomplish its job?)
Phagocytes	
Natural killer cells	
Inflammatory response	
Complement proteins	
Interferons	
Fever	

Adaptive Body Defenses

13. How is the third line of defense different from the first two? In other words, what are the 3 important aspects of the adaptive (specific) defense?

14. Describe the difference between humoral (antibody-mediated) immunity and cellular (cell-mediated) immunity?

15. Define **ANTIGEN**: _____



16. Complete the following chart comparing a primary immune response and a secondary immune response.

Type of Immune Response	Happens when...	Speed of response?	Cells involved?
Primary humoral			
Secondary humoral			

17. a) Distinguish between active and passive immunity.

b) Distinguish between naturally acquired and artificially acquired immunity.

c) Describe how one might develop artificially acquired passive immunity. _____

18. What are VACCINES? Give 5 examples of diseases for which we already have vaccines.



19. Define the following terms:

a. Neutralization: _____

b. Agglutination: _____

c. Precipitation: _____

20. In the table below, describe the functions of the following cells in immune response.

Cell	Function
B Cell	
Plasma Cell	
Helper T Cell	
Cytotoxic T Cell	
Regulatory T Cell	
Memory Cell	

21. What are two measures taken to reduce the chances of rejection of a transplanted organ or transplanted tissue?

- 1) _____
- 2) _____

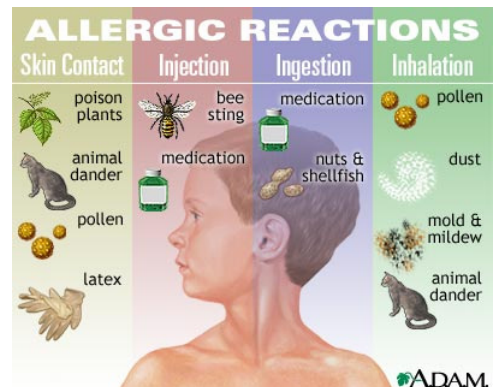
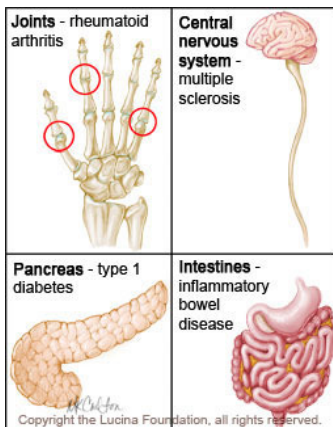
22. a. What is meant by **AUTOIMMUNITY**?

b. What conditions / events might result in autoimmunity?

23. a. What are allergies? _____

b. What are some common **ALLERGENS**? _____

c. What is **ANAPHYLATIC SHOCK**? _____

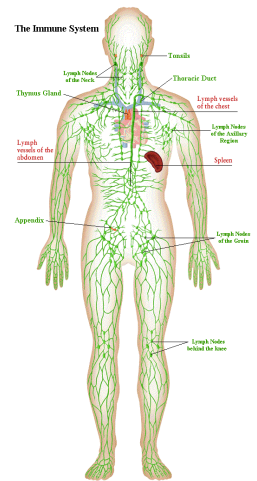


Reading Guide: Chapter 12 - Lymphatic System (pages 398-431)

1. Identify the 2 semi-independent parts of the lymphatic system:

a. _____

b. _____



Lymphatic Vessels

2. Define a. **EDEMA**: _____

b. **LYMPH**: _____

3. Describe the structure of the lymph capillaries in the lymphatic system. Compare the lymph capillaries to the vessels of the cardiovascular system.

4. True or False. (Circle one). Proteins, debris, bacteria, and other large particles can enter the lymphatic capillaries easily unlike the vessels in the cardiovascular system.

Lymph Nodes

5. What is the function of the lymph nodes? _____

6. Describe what causes "swollen glands"?

7. Draw a picture of a lymph node. In your drawing, identify the cortex, follicle, afferent lymphatic vessel, capsule, and efferent lymphatic vessel.

Other Lymphoid Organs

8. Describe the functions of the following lymphoid organs

Lymphoid Organ	Function(s)
Spleen	
Thymus	
Tonsils	
Peyer's Patches	
Appendix	

9. Describe the difference between the innate (nonspecific) immune system and the adaptive (specific) immune system.

Innate Body Defenses

10. List and describe the physical and chemical components of the **first line** of defense.

11. a. What physiological process causes redness and inflammation at the site of an injury?

b. What is the advantage of localized heat at the site of an injury?

c. What is pus? How does it form?

12. The body's second line of defense includes various cell types and responses. Complete the chart below describing the different types of second line of defense and their functions.

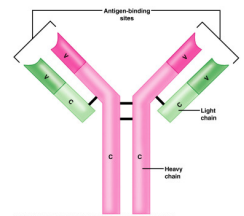
Cellular/Chemical Defense	Job (what does it do? how does it accomplish its job?)
Phagocytes	
Natural killer cells	
Inflammatory response	
Complement proteins	
Interferons	
Fever	

Adaptive Body Defenses

13. How is the third line of defense different from the first two? In other words, what are the 3 important aspects of the adaptive (specific) defense?

14. Describe the difference between humoral (antibody-mediated) immunity and cellular (cell-mediated) immunity?

15. Define **ANTIGEN**: _____



16. Complete the following chart comparing a primary immune response and a secondary immune response.

Type of Immune Response	Happens when...	Speed of response?	Cells involved?
Primary humoral			
Secondary humoral			

17. a) Distinguish between active and passive immunity.

b) Distinguish between naturally acquired and artificially acquired immunity.

c) Describe how one might develop artificially acquired passive immunity. _____

18. What are VACCINES? Give 5 examples of diseases for which we already have vaccines.



19. Define the following terms:

a. Neutralization: _____

b. Agglutination: _____

c. Precipitation: _____

20. In the table below, describe the functions of the following cells in immune response.

Cell	Function
B Cell	
Plasma Cell	
Helper T Cell	
Cytotoxic T Cell	
Regulatory T Cell	
Memory Cell	

21. What are two measures taken to reduce the chances of rejection of a transplanted organ or transplanted tissue?

- 1) _____
- 2) _____

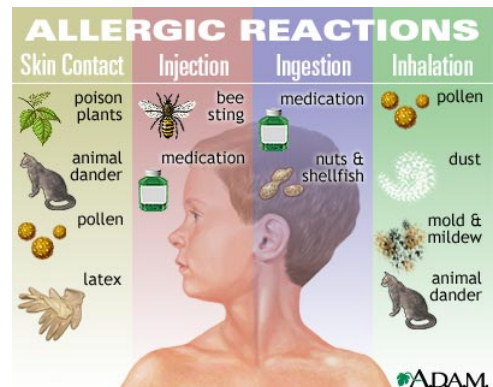
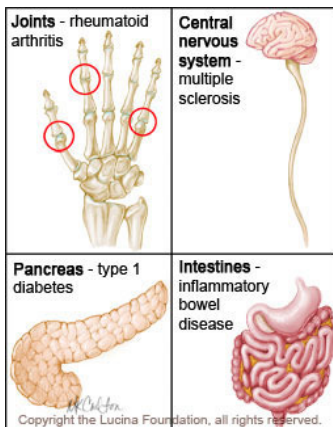
22. a. What is meant by **AUTOIMMUNITY**?

b. What conditions / events might result in autoimmunity?

23. a. What are allergies? _____

b. What are some common **ALLERGENS**? _____

c. What is **ANAPHYLATIC SHOCK**? _____

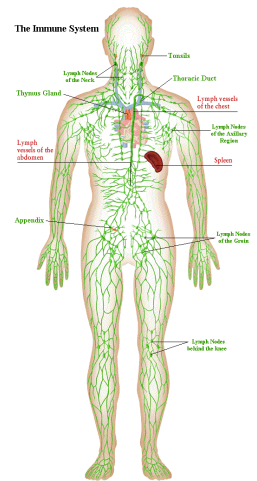


Reading Guide: Chapter 12 - Lymphatic System (pages 398-431)

1. Identify the 2 semi-independent parts of the lymphatic system:

a. _____

b. _____



Lymphatic Vessels

2. Define a. **EDEMA**: _____

b. **LYMPH**: _____

3. Describe the structure of the lymph capillaries in the lymphatic system. Compare the lymph capillaries to the vessels of the cardiovascular system.

4. True or False. (Circle one). Proteins, debris, bacteria, and other large particles can enter the lymphatic capillaries easily unlike the vessels in the cardiovascular system.

Lymph Nodes

5. What is the function of the lymph nodes? _____

6. Describe what causes "swollen glands"?

7. Draw a picture of a lymph node. In your drawing, identify the cortex, follicle, afferent lymphatic vessel, capsule, and efferent lymphatic vessel.

Other Lymphoid Organs

8. Describe the functions of the following lymphoid organs

Lymphoid Organ	Function(s)
Spleen	
Thymus	
Tonsils	
Peyer's Patches	
Appendix	

9. Describe the difference between the innate (nonspecific) immune system and the adaptive (specific) immune system.

Innate Body Defenses

10. List and describe the physical and chemical components of the **first line** of defense.

11. a. What physiological process causes redness and inflammation at the site of an injury?

b. What is the advantage of localized heat at the site of an injury?

c. What is pus? How does it form?

12. The body's second line of defense includes various cell types and responses. Complete the chart below describing the different types of second line of defense and their functions.

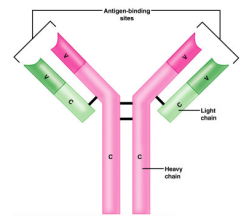
Cellular/Chemical Defense	Job (what does it do? how does it accomplish its job?)
Phagocytes	
Natural killer cells	
Inflammatory response	
Complement proteins	
Interferons	
Fever	

Adaptive Body Defenses

13. How is the third line of defense different from the first two? In other words, what are the 3 important aspects of the adaptive (specific) defense?

14. Describe the difference between humoral (antibody-mediated) immunity and cellular (cell-mediated) immunity?

15. Define **ANTIGEN**: _____



16. Complete the following chart comparing a primary immune response and a secondary immune response.

Type of Immune Response	Happens when...	Speed of response?	Cells involved?
Primary humoral			
Secondary humoral			

17. a) Distinguish between active and passive immunity.

b) Distinguish between naturally acquired and artificially acquired immunity.

c) Describe how one might develop artificially acquired passive immunity. _____

18. What are VACCINES? Give 5 examples of diseases for which we already have vaccines.



19. Define the following terms:

a. Neutralization: _____

b. Agglutination: _____

c. Precipitation: _____

20. In the table below, describe the functions of the following cells in immune response.

Cell	Function
B Cell	
Plasma Cell	
Helper T Cell	
Cytotoxic T Cell	
Regulatory T Cell	
Memory Cell	

21. What are two measures taken to reduce the chances of rejection of a transplanted organ or transplanted tissue?

- 1) _____
- 2) _____

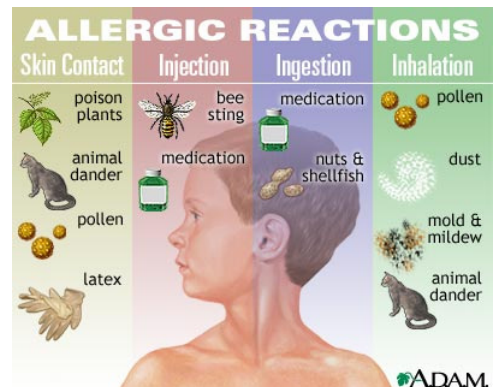
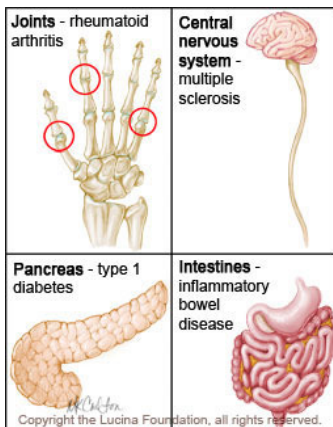
22. a. What is meant by **AUTOIMMUNITY**?

b. What conditions / events might result in autoimmunity?

23. a. What are allergies? _____

b. What are some common **ALLERGENS**? _____

c. What is **ANAPHYLATIC SHOCK**? _____

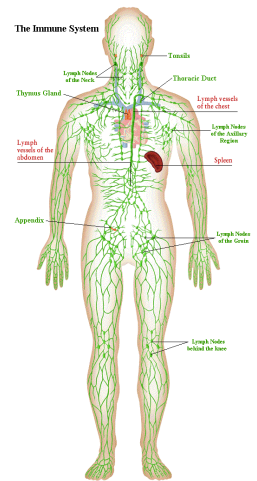


Reading Guide: Chapter 12 - Lymphatic System (pages 398-431)

1. Identify the 2 semi-independent parts of the lymphatic system:

a. _____

b. _____



Lymphatic Vessels

2. Define a. **EDEMA**: _____

b. **LYMPH**: _____

3. Describe the structure of the lymph capillaries in the lymphatic system. Compare the lymph capillaries to the vessels of the cardiovascular system.

4. True or False. (Circle one). Proteins, debris, bacteria, and other large particles can enter the lymphatic capillaries easily unlike the vessels in the cardiovascular system.

Lymph Nodes

5. What is the function of the lymph nodes? _____

6. Describe what causes "swollen glands"?

7. Draw a picture of a lymph node. In your drawing, identify the cortex, follicle, afferent lymphatic vessel, capsule, and efferent lymphatic vessel.

Other Lymphoid Organs

8. Describe the functions of the following lymphoid organs

Lymphoid Organ	Function(s)
Spleen	
Thymus	
Tonsils	
Peyer's Patches	
Appendix	

9. Describe the difference between the innate (nonspecific) immune system and the adaptive (specific) immune system.

Innate Body Defenses

10. List and describe the physical and chemical components of the **first line** of defense.

11. a. What physiological process causes redness and inflammation at the site of an injury?

b. What is the advantage of localized heat at the site of an injury?

c. What is pus? How does it form?

12. The body's second line of defense includes various cell types and responses. Complete the chart below describing the different types of second line of defense and their functions.

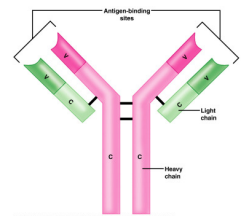
Cellular/Chemical Defense	Job (what does it do? how does it accomplish its job?)
Phagocytes	
Natural killer cells	
Inflammatory response	
Complement proteins	
Interferons	
Fever	

Adaptive Body Defenses

13. How is the third line of defense different from the first two? In other words, what are the 3 important aspects of the adaptive (specific) defense?

14. Describe the difference between humoral (antibody-mediated) immunity and cellular (cell-mediated) immunity?

15. Define **ANTIGEN**: _____



16. Complete the following chart comparing a primary immune response and a secondary immune response.

Type of Immune Response	Happens when...	Speed of response?	Cells involved?
Primary humoral			
Secondary humoral			

17. a) Distinguish between active and passive immunity.

b) Distinguish between naturally acquired and artificially acquired immunity.

c) Describe how one might develop artificially acquired passive immunity. _____

18. What are VACCINES? Give 5 examples of diseases for which we already have vaccines.



19. Define the following terms:

a. Neutralization: _____

b. Agglutination: _____

c. Precipitation: _____

20. In the table below, describe the functions of the following cells in immune response.

Cell	Function
B Cell	
Plasma Cell	
Helper T Cell	
Cytotoxic T Cell	
Regulatory T Cell	
Memory Cell	

21. What are two measures taken to reduce the chances of rejection of a transplanted organ or transplanted tissue?

- 1) _____
- 2) _____

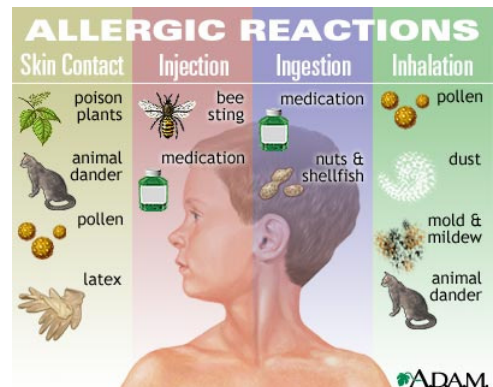
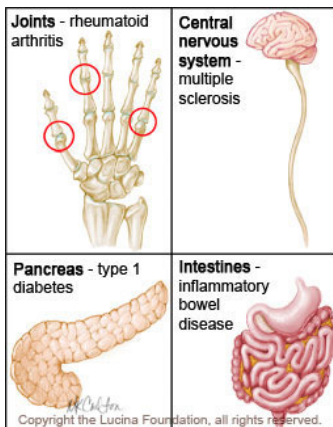
22. a. What is meant by **AUTOIMMUNITY**?

b. What conditions / events might result in autoimmunity?

23. a. What are allergies? _____

b. What are some common **ALLERGENS**? _____

c. What is **ANAPHYLATIC SHOCK**? _____

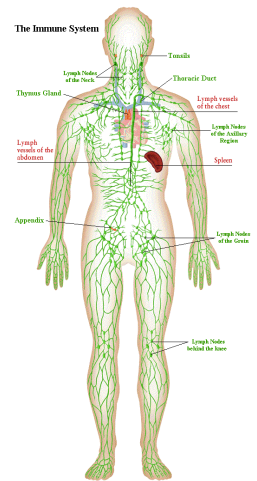


Reading Guide: Chapter 12 - Lymphatic System (pages 398-431)

1. Identify the 2 semi-independent parts of the lymphatic system:

a. _____

b. _____



Lymphatic Vessels

2. Define a. **EDEMA**: _____

b. **LYMPH**: _____

3. Describe the structure of the lymph capillaries in the lymphatic system. Compare the lymph capillaries to the vessels of the cardiovascular system.

4. True or False. (Circle one). Proteins, debris, bacteria, and other large particles can enter the lymphatic capillaries easily unlike the vessels in the cardiovascular system.

Lymph Nodes

5. What is the function of the lymph nodes? _____

6. Describe what causes "swollen glands"?

7. Draw a picture of a lymph node. In your drawing, identify the cortex, follicle, afferent lymphatic vessel, capsule, and efferent lymphatic vessel.

Other Lymphoid Organs

8. Describe the functions of the following lymphoid organs

Lymphoid Organ	Function(s)
Spleen	
Thymus	
Tonsils	
Peyer's Patches	
Appendix	

9. Describe the difference between the innate (nonspecific) immune system and the adaptive (specific) immune system.

Innate Body Defenses

10. List and describe the physical and chemical components of the **first line** of defense.

11. a. What physiological process causes redness and inflammation at the site of an injury?

b. What is the advantage of localized heat at the site of an injury?

c. What is pus? How does it form?

12. The body's second line of defense includes various cell types and responses. Complete the chart below describing the different types of second line of defense and their functions.

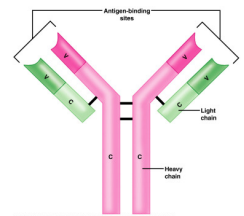
Cellular/Chemical Defense	Job (what does it do? how does it accomplish its job?)
Phagocytes	
Natural killer cells	
Inflammatory response	
Complement proteins	
Interferons	
Fever	

Adaptive Body Defenses

13. How is the third line of defense different from the first two? In other words, what are the 3 important aspects of the adaptive (specific) defense?

14. Describe the difference between humoral (antibody-mediated) immunity and cellular (cell-mediated) immunity?

15. Define **ANTIGEN**: _____



16. Complete the following chart comparing a primary immune response and a secondary immune response.

Type of Immune Response	Happens when...	Speed of response?	Cells involved?
Primary humoral			
Secondary humoral			

17. a) Distinguish between active and passive immunity.

b) Distinguish between naturally acquired and artificially acquired immunity.

c) Describe how one might develop artificially acquired passive immunity. _____

18. What are VACCINES? Give 5 examples of diseases for which we already have vaccines.



19. Define the following terms:

a. Neutralization: _____

b. Agglutination: _____

c. Precipitation: _____

20. In the table below, describe the functions of the following cells in immune response.

Cell	Function
B Cell	
Plasma Cell	
Helper T Cell	
Cytotoxic T Cell	
Regulatory T Cell	
Memory Cell	

21. What are two measures taken to reduce the chances of rejection of a transplanted organ or transplanted tissue?

- 1) _____
- 2) _____

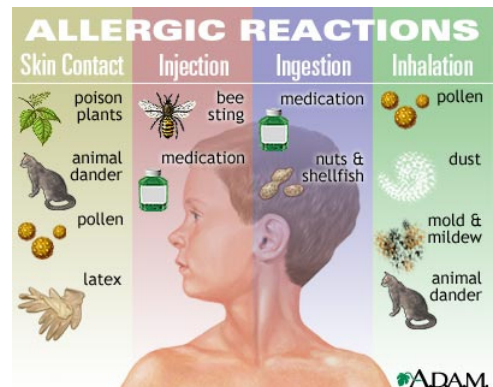
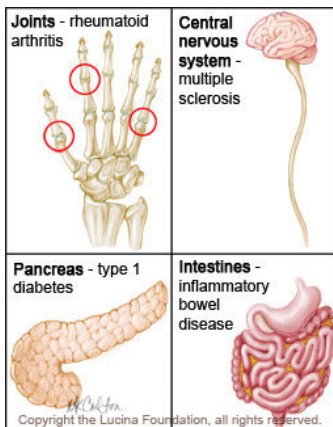
22. a. What is meant by **AUTOIMMUNITY**?

b. What conditions / events might result in autoimmunity?

23. a. What are allergies? _____

b. What are some common **ALLERGENS**? _____

c. What is **ANAPHYLATIC SHOCK**? _____

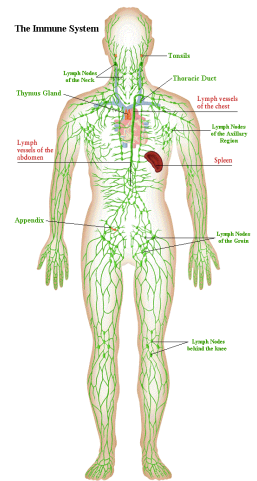


Reading Guide: Chapter 12 - Lymphatic System (pages 398-431)

1. Identify the 2 semi-independent parts of the lymphatic system:

a. _____

b. _____



Lymphatic Vessels

2. Define a. **EDEMA**: _____

b. **LYMPH**: _____

3. Describe the structure of the lymph capillaries in the lymphatic system. Compare the lymph capillaries to the vessels of the cardiovascular system.

4. True or False. (Circle one). Proteins, debris, bacteria, and other large particles can enter the lymphatic capillaries easily unlike the vessels in the cardiovascular system.

Lymph Nodes

5. What is the function of the lymph nodes? _____

6. Describe what causes "swollen glands"?

7. Draw a picture of a lymph node. In your drawing, identify the cortex, follicle, afferent lymphatic vessel, capsule, and efferent lymphatic vessel.

Other Lymphoid Organs

8. Describe the functions of the following lymphoid organs

Lymphoid Organ	Function(s)
Spleen	
Thymus	
Tonsils	
Peyer's Patches	
Appendix	

9. Describe the difference between the innate (nonspecific) immune system and the adaptive (specific) immune system.

Innate Body Defenses

10. List and describe the physical and chemical components of the **first line** of defense.

11. a. What physiological process causes redness and inflammation at the site of an injury?

b. What is the advantage of localized heat at the site of an injury?

c. What is pus? How does it form?

12. The body's second line of defense includes various cell types and responses. Complete the chart below describing the different types of second line of defense and their functions.

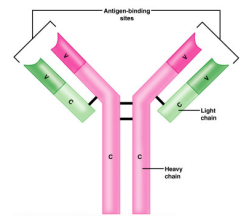
Cellular/Chemical Defense	Job (what does it do? how does it accomplish its job?)
Phagocytes	
Natural killer cells	
Inflammatory response	
Complement proteins	
Interferons	
Fever	

Adaptive Body Defenses

13. How is the third line of defense different from the first two? In other words, what are the 3 important aspects of the adaptive (specific) defense?

14. Describe the difference between humoral (antibody-mediated) immunity and cellular (cell-mediated) immunity?

15. Define **ANTIGEN**: _____



16. Complete the following chart comparing a primary immune response and a secondary immune response.

Type of Immune Response	Happens when...	Speed of response?	Cells involved?
Primary humoral			
Secondary humoral			

17. a) Distinguish between active and passive immunity.

b) Distinguish between naturally acquired and artificially acquired immunity.

c) Describe how one might develop artificially acquired passive immunity. _____

18. What are VACCINES? Give 5 examples of diseases for which we already have vaccines.



19. Define the following terms:

a. Neutralization: _____

b. Agglutination: _____

c. Precipitation: _____

20. In the table below, describe the functions of the following cells in immune response.

Cell	Function
B Cell	
Plasma Cell	
Helper T Cell	
Cytotoxic T Cell	
Regulatory T Cell	
Memory Cell	

21. What are two measures taken to reduce the chances of rejection of a transplanted organ or transplanted tissue?

- 1) _____
- 2) _____

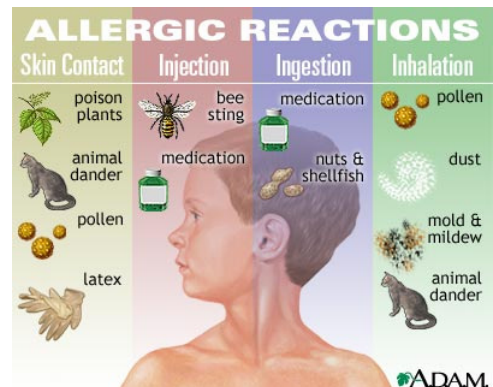
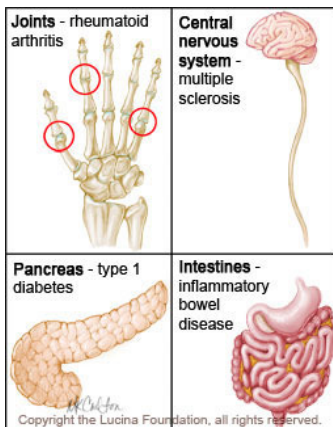
22. a. What is meant by **AUTOIMMUNITY**?

b. What conditions / events might result in autoimmunity?

23. a. What are allergies? _____

b. What are some common **ALLERGENS**? _____

c. What is **ANAPHYLATIC SHOCK**? _____

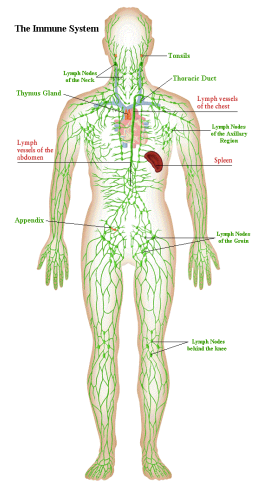


Reading Guide: Chapter 12 - Lymphatic System (pages 398-431)

1. Identify the 2 semi-independent parts of the lymphatic system:

a. _____

b. _____



Lymphatic Vessels

2. Define a. **EDEMA**: _____

b. **LYMPH**: _____

3. Describe the structure of the lymph capillaries in the lymphatic system. Compare the lymph capillaries to the vessels of the cardiovascular system.

4. True or False. (Circle one). Proteins, debris, bacteria, and other large particles can enter the lymphatic capillaries easily unlike the vessels in the cardiovascular system.

Lymph Nodes

5. What is the function of the lymph nodes? _____

6. Describe what causes "swollen glands"?

7. Draw a picture of a lymph node. In your drawing, identify the cortex, follicle, afferent lymphatic vessel, capsule, and efferent lymphatic vessel.

Other Lymphoid Organs

8. Describe the functions of the following lymphoid organs

Lymphoid Organ	Function(s)
Spleen	
Thymus	
Tonsils	
Peyer's Patches	
Appendix	

9. Describe the difference between the innate (nonspecific) immune system and the adaptive (specific) immune system.

Innate Body Defenses

10. List and describe the physical and chemical components of the **first line** of defense.

11. a. What physiological process causes redness and inflammation at the site of an injury?

b. What is the advantage of localized heat at the site of an injury?

c. What is pus? How does it form?

12. The body's second line of defense includes various cell types and responses. Complete the chart below describing the different types of second line of defense and their functions.

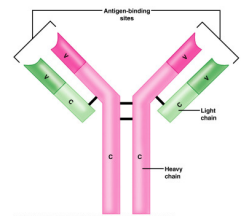
Cellular/Chemical Defense	Job (what does it do? how does it accomplish its job?)
Phagocytes	
Natural killer cells	
Inflammatory response	
Complement proteins	
Interferons	
Fever	

Adaptive Body Defenses

13. How is the third line of defense different from the first two? In other words, what are the 3 important aspects of the adaptive (specific) defense?

14. Describe the difference between humoral (antibody-mediated) immunity and cellular (cell-mediated) immunity?

15. Define **ANTIGEN**: _____



16. Complete the following chart comparing a primary immune response and a secondary immune response.

Type of Immune Response	Happens when...	Speed of response?	Cells involved?
Primary humoral			
Secondary humoral			

17. a) Distinguish between active and passive immunity.

b) Distinguish between naturally acquired and artificially acquired immunity.

c) Describe how one might develop artificially acquired passive immunity. _____

18. What are VACCINES? Give 5 examples of diseases for which we already have vaccines.



19. Define the following terms:

a. Neutralization: _____

b. Agglutination: _____

c. Precipitation: _____

20. In the table below, describe the functions of the following cells in immune response.

Cell	Function
B Cell	
Plasma Cell	
Helper T Cell	
Cytotoxic T Cell	
Regulatory T Cell	
Memory Cell	

21. What are two measures taken to reduce the chances of rejection of a transplanted organ or transplanted tissue?

- 1) _____
- 2) _____

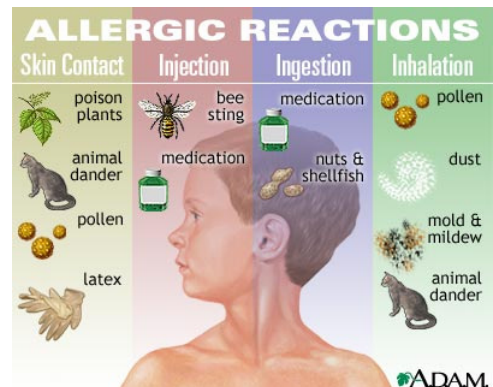
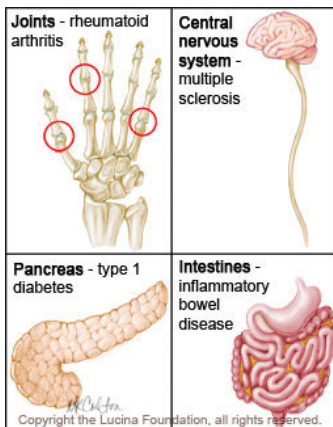
22. a. What is meant by **AUTOIMMUNITY**?

b. What conditions / events might result in autoimmunity?

23. a. What are allergies? _____

b. What are some common **ALLERGENS**? _____

c. What is **ANAPHYLATIC SHOCK**? _____

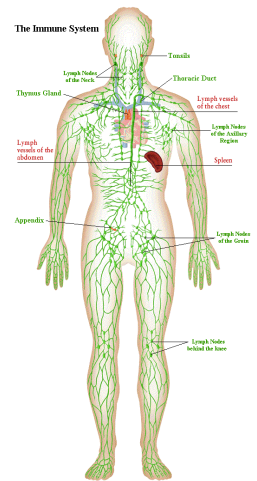


Reading Guide: Chapter 12 - Lymphatic System (pages 398-431)

1. Identify the 2 semi-independent parts of the lymphatic system:

a. _____

b. _____



Lymphatic Vessels

2. Define a. **EDEMA**: _____

b. **LYMPH**: _____

3. Describe the structure of the lymph capillaries in the lymphatic system. Compare the lymph capillaries to the vessels of the cardiovascular system.

4. True or False. (Circle one). Proteins, debris, bacteria, and other large particles can enter the lymphatic capillaries easily unlike the vessels in the cardiovascular system.

Lymph Nodes

5. What is the function of the lymph nodes? _____

6. Describe what causes "swollen glands"?

7. Draw a picture of a lymph node. In your drawing, identify the cortex, follicle, afferent lymphatic vessel, capsule, and efferent lymphatic vessel.

Other Lymphoid Organs

8. Describe the functions of the following lymphoid organs

Lymphoid Organ	Function(s)
Spleen	
Thymus	
Tonsils	
Peyer's Patches	
Appendix	

9. Describe the difference between the innate (nonspecific) immune system and the adaptive (specific) immune system.

Innate Body Defenses

10. List and describe the physical and chemical components of the **first line** of defense.

11. a. What physiological process causes redness and inflammation at the site of an injury?

b. What is the advantage of localized heat at the site of an injury?

c. What is pus? How does it form?

12. The body's second line of defense includes various cell types and responses. Complete the chart below describing the different types of second line of defense and their functions.

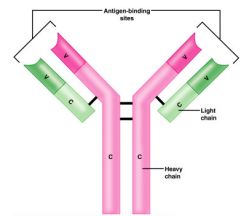
Cellular/Chemical Defense	Job (what does it do? how does it accomplish its job?)
Phagocytes	
Natural killer cells	
Inflammatory response	
Complement proteins	
Interferons	
Fever	

Adaptive Body Defenses

13. How is the third line of defense different from the first two? In other words, what are the 3 important aspects of the adaptive (specific) defense?

14. Describe the difference between humoral (antibody-mediated) immunity and cellular (cell-mediated) immunity?

15. Define **ANTIGEN**: _____



16. Complete the following chart comparing a primary immune response and a secondary immune response.

Type of Immune Response	Happens when...	Speed of response?	Cells involved?
Primary humoral			
Secondary humoral			

17. a) Distinguish between active and passive immunity.

b) Distinguish between naturally acquired and artificially acquired immunity.

c) Describe how one might develop artificially acquired passive immunity. _____

18. What are VACCINES? Give 5 examples of diseases for which we already have vaccines.



19. Define the following terms:

a. Neutralization: _____

b. Agglutination: _____

c. Precipitation: _____

20. In the table below, describe the functions of the following cells in immune response.

Cell	Function
B Cell	
Plasma Cell	
Helper T Cell	
Cytotoxic T Cell	
Regulatory T Cell	
Memory Cell	

21. What are two measures taken to reduce the chances of rejection of a transplanted organ or transplanted tissue?

- 1) _____
- 2) _____

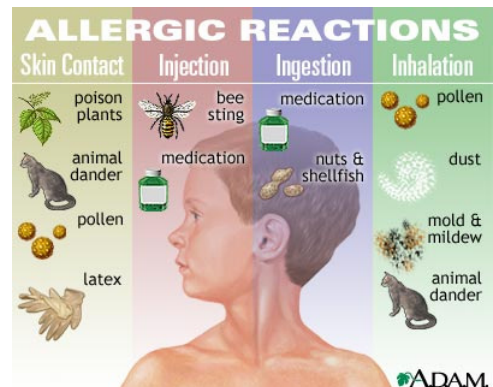
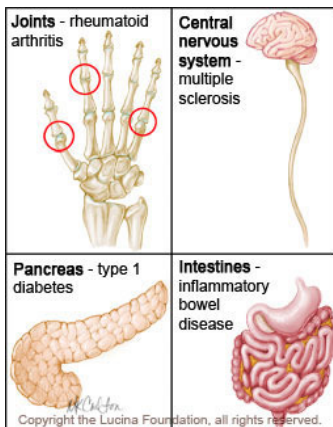
22. a. What is meant by **AUTOIMMUNITY**?

b. What conditions / events might result in autoimmunity?

23. a. What are allergies? _____

b. What are some common **ALLERGENS**? _____

c. What is **ANAPHYLATIC SHOCK**? _____

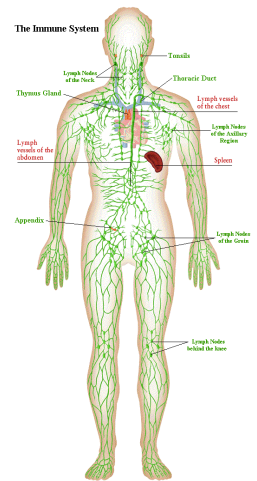


Reading Guide: Chapter 12 - Lymphatic System (pages 398-431)

1. Identify the 2 semi-independent parts of the lymphatic system:

a. _____

b. _____



Lymphatic Vessels

2. Define a. **EDEMA**: _____

b. **LYMPH**: _____

3. Describe the structure of the lymph capillaries in the lymphatic system. Compare the lymph capillaries to the vessels of the cardiovascular system.

4. True or False. (Circle one). Proteins, debris, bacteria, and other large particles can enter the lymphatic capillaries easily unlike the vessels in the cardiovascular system.

Lymph Nodes

5. What is the function of the lymph nodes? _____

6. Describe what causes "swollen glands"?

7. Draw a picture of a lymph node. In your drawing, identify the cortex, follicle, afferent lymphatic vessel, capsule, and efferent lymphatic vessel.

Other Lymphoid Organs

8. Describe the functions of the following lymphoid organs

Lymphoid Organ	Function(s)
Spleen	
Thymus	
Tonsils	
Peyer's Patches	
Appendix	

9. Describe the difference between the innate (nonspecific) immune system and the adaptive (specific) immune system.

Innate Body Defenses

10. List and describe the physical and chemical components of the **first line** of defense.

11. a. What physiological process causes redness and inflammation at the site of an injury?

b. What is the advantage of localized heat at the site of an injury?

c. What is pus? How does it form?

12. The body's second line of defense includes various cell types and responses. Complete the chart below describing the different types of second line of defense and their functions.

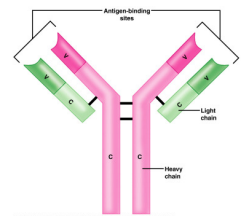
Cellular/Chemical Defense	Job (what does it do? how does it accomplish its job?)
Phagocytes	
Natural killer cells	
Inflammatory response	
Complement proteins	
Interferons	
Fever	

Adaptive Body Defenses

13. How is the third line of defense different from the first two? In other words, what are the 3 important aspects of the adaptive (specific) defense?

14. Describe the difference between humoral (antibody-mediated) immunity and cellular (cell-mediated) immunity?

15. Define **ANTIGEN**: _____



16. Complete the following chart comparing a primary immune response and a secondary immune response.

Type of Immune Response	Happens when...	Speed of response?	Cells involved?
Primary humoral			
Secondary humoral			

17. a) Distinguish between active and passive immunity.

b) Distinguish between naturally acquired and artificially acquired immunity.

c) Describe how one might develop artificially acquired passive immunity. _____

18. What are VACCINES? Give 5 examples of diseases for which we already have vaccines.



19. Define the following terms:

a. Neutralization: _____

b. Agglutination: _____

c. Precipitation: _____

20. In the table below, describe the functions of the following cells in immune response.

Cell	Function
B Cell	
Plasma Cell	
Helper T Cell	
Cytotoxic T Cell	
Regulatory T Cell	
Memory Cell	

21. What are two measures taken to reduce the chances of rejection of a transplanted organ or transplanted tissue?

- 1) _____
- 2) _____

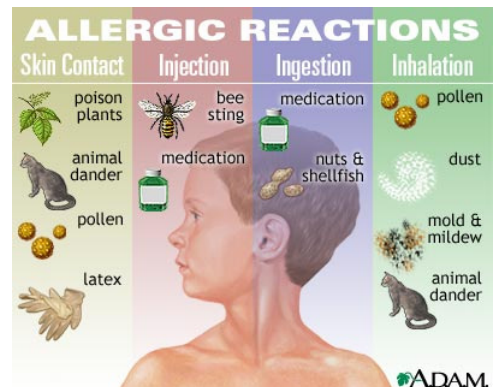
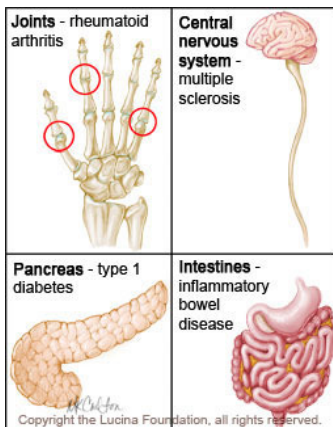
22. a. What is meant by **AUTOIMMUNITY**?

b. What conditions / events might result in autoimmunity?

23. a. What are allergies? _____

b. What are some common **ALLERGENS**? _____

c. What is **ANAPHYLATIC SHOCK**? _____

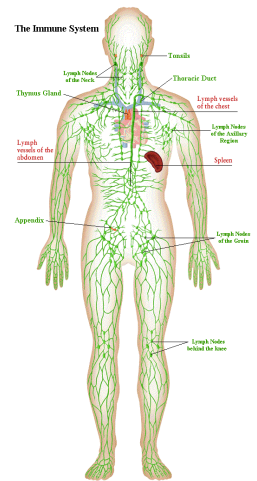


Reading Guide: Chapter 12 - Lymphatic System (pages 398-431)

1. Identify the 2 semi-independent parts of the lymphatic system:

a. _____

b. _____



Lymphatic Vessels

2. Define a. **EDEMA**: _____

b. **LYMPH**: _____

3. Describe the structure of the lymph capillaries in the lymphatic system. Compare the lymph capillaries to the vessels of the cardiovascular system.

4. True or False. (Circle one). Proteins, debris, bacteria, and other large particles can enter the lymphatic capillaries easily unlike the vessels in the cardiovascular system.

Lymph Nodes

5. What is the function of the lymph nodes? _____

6. Describe what causes "swollen glands"?

7. Draw a picture of a lymph node. In your drawing, identify the cortex, follicle, afferent lymphatic vessel, capsule, and efferent lymphatic vessel.

Other Lymphoid Organs

8. Describe the functions of the following lymphoid organs

Lymphoid Organ	Function(s)
Spleen	
Thymus	
Tonsils	
Peyer's Patches	
Appendix	

9. Describe the difference between the innate (nonspecific) immune system and the adaptive (specific) immune system.

Innate Body Defenses

10. List and describe the physical and chemical components of the **first line** of defense.

11. a. What physiological process causes redness and inflammation at the site of an injury?

b. What is the advantage of localized heat at the site of an injury?

c. What is pus? How does it form?

12. The body's second line of defense includes various cell types and responses. Complete the chart below describing the different types of second line of defense and their functions.

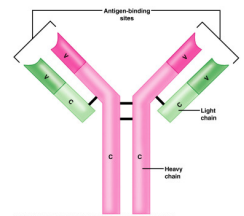
Cellular/Chemical Defense	Job (what does it do? how does it accomplish its job?)
Phagocytes	
Natural killer cells	
Inflammatory response	
Complement proteins	
Interferons	
Fever	

Adaptive Body Defenses

13. How is the third line of defense different from the first two? In other words, what are the 3 important aspects of the adaptive (specific) defense?

14. Describe the difference between humoral (antibody-mediated) immunity and cellular (cell-mediated) immunity?

15. Define **ANTIGEN**: _____



16. Complete the following chart comparing a primary immune response and a secondary immune response.

Type of Immune Response	Happens when...	Speed of response?	Cells involved?
Primary humoral			
Secondary humoral			

17. a) Distinguish between active and passive immunity.

b) Distinguish between naturally acquired and artificially acquired immunity.

c) Describe how one might develop artificially acquired passive immunity. _____

18. What are VACCINES? Give 5 examples of diseases for which we already have vaccines.



19. Define the following terms:

a. Neutralization: _____

b. Agglutination: _____

c. Precipitation: _____

20. In the table below, describe the functions of the following cells in immune response.

Cell	Function
B Cell	
Plasma Cell	
Helper T Cell	
Cytotoxic T Cell	
Regulatory T Cell	
Memory Cell	

21. What are two measures taken to reduce the chances of rejection of a transplanted organ or transplanted tissue?

- 1) _____
- 2) _____

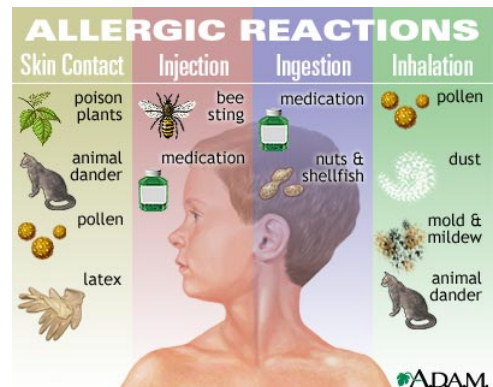
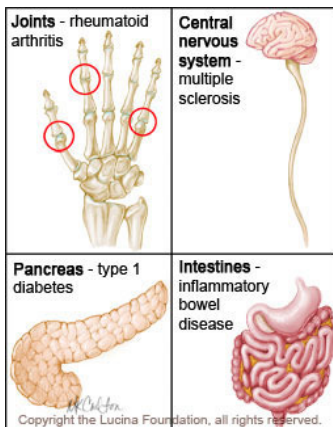
22. a. What is meant by **AUTOIMMUNITY**?

b. What conditions / events might result in autoimmunity?

23. a. What are allergies? _____

b. What are some common **ALLERGENS**? _____

c. What is **ANAPHYLATIC SHOCK**? _____

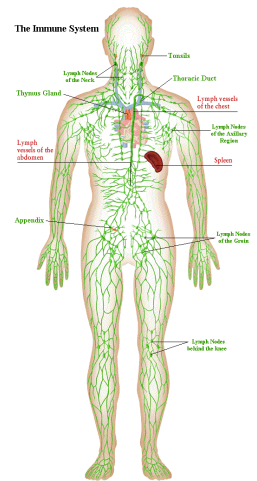


Reading Guide: Chapter 12 - Lymphatic System (pages 398-431)

1. Identify the 2 semi-independent parts of the lymphatic system:

a. _____

b. _____



Lymphatic Vessels

2. Define a. **EDEMA**: _____

b. **LYMPH**: _____

3. Describe the structure of the lymph capillaries in the lymphatic system. Compare the lymph capillaries to the vessels of the cardiovascular system.

4. True or False. (Circle one). Proteins, debris, bacteria, and other large particles can enter the lymphatic capillaries easily unlike the vessels in the cardiovascular system.

Lymph Nodes

5. What is the function of the lymph nodes? _____

6. Describe what causes "swollen glands"?

7. Draw a picture of a lymph node. In your drawing, identify the cortex, follicle, afferent lymphatic vessel, capsule, and efferent lymphatic vessel.

Other Lymphoid Organs

8. Describe the functions of the following lymphoid organs

Lymphoid Organ	Function(s)
Spleen	
Thymus	
Tonsils	
Peyer's Patches	
Appendix	

9. Describe the difference between the innate (nonspecific) immune system and the adaptive (specific) immune system.

Innate Body Defenses

10. List and describe the physical and chemical components of the **first line** of defense.

11. a. What physiological process causes redness and inflammation at the site of an injury?

b. What is the advantage of localized heat at the site of an injury?

c. What is pus? How does it form?

12. The body's second line of defense includes various cell types and responses. Complete the chart below describing the different types of second line of defense and their functions.

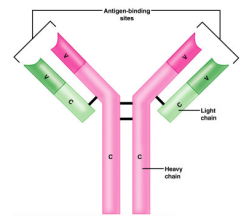
Cellular/Chemical Defense	Job (what does it do? how does it accomplish its job?)
Phagocytes	
Natural killer cells	
Inflammatory response	
Complement proteins	
Interferons	
Fever	

Adaptive Body Defenses

13. How is the third line of defense different from the first two? In other words, what are the 3 important aspects of the adaptive (specific) defense?

14. Describe the difference between humoral (antibody-mediated) immunity and cellular (cell-mediated) immunity?

15. Define **ANTIGEN**: _____



16. Complete the following chart comparing a primary immune response and a secondary immune response.

Type of Immune Response	Happens when...	Speed of response?	Cells involved?
Primary humoral			
Secondary humoral			

17. a) Distinguish between active and passive immunity.

b) Distinguish between naturally acquired and artificially acquired immunity.

c) Describe how one might develop artificially acquired passive immunity. _____

18. What are VACCINES? Give 5 examples of diseases for which we already have vaccines.



19. Define the following terms:

a. Neutralization: _____

b. Agglutination: _____

c. Precipitation: _____

20. In the table below, describe the functions of the following cells in immune response.

Cell	Function
B Cell	
Plasma Cell	
Helper T Cell	
Cytotoxic T Cell	
Regulatory T Cell	
Memory Cell	

21. What are two measures taken to reduce the chances of rejection of a transplanted organ or transplanted tissue?

- 1) _____
- 2) _____

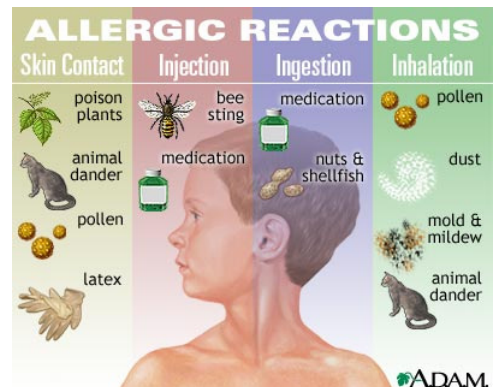
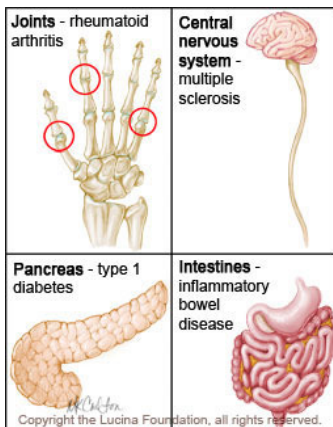
22. a. What is meant by **AUTOIMMUNITY**?

b. What conditions / events might result in autoimmunity?

23. a. What are allergies? _____

b. What are some common **ALLERGENS**? _____

c. What is **ANAPHYLATIC SHOCK**? _____

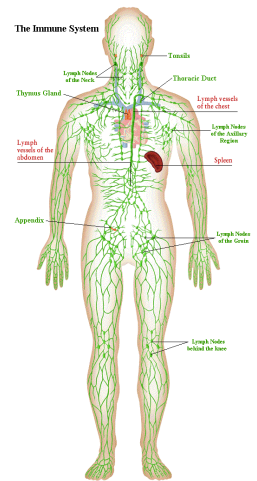


Reading Guide: Chapter 12 - Lymphatic System (pages 398-431)

1. Identify the 2 semi-independent parts of the lymphatic system:

a. _____

b. _____



Lymphatic Vessels

2. Define a. **EDEMA**: _____

b. **LYMPH**: _____

3. Describe the structure of the lymph capillaries in the lymphatic system. Compare the lymph capillaries to the vessels of the cardiovascular system.

4. True or False. (Circle one). Proteins, debris, bacteria, and other large particles can enter the lymphatic capillaries easily unlike the vessels in the cardiovascular system.

Lymph Nodes

5. What is the function of the lymph nodes? _____

6. Describe what causes "swollen glands"?

7. Draw a picture of a lymph node. In your drawing, identify the cortex, follicle, afferent lymphatic vessel, capsule, and efferent lymphatic vessel.

Other Lymphoid Organs

8. Describe the functions of the following lymphoid organs

Lymphoid Organ	Function(s)
Spleen	
Thymus	
Tonsils	
Peyer's Patches	
Appendix	

9. Describe the difference between the innate (nonspecific) immune system and the adaptive (specific) immune system.

Innate Body Defenses

10. List and describe the physical and chemical components of the **first line** of defense.

11. a. What physiological process causes redness and inflammation at the site of an injury?

b. What is the advantage of localized heat at the site of an injury?

c. What is pus? How does it form?

12. The body's second line of defense includes various cell types and responses. Complete the chart below describing the different types of second line of defense and their functions.

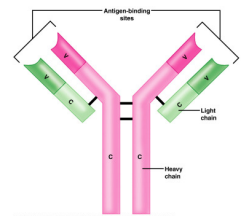
Cellular/Chemical Defense	Job (what does it do? how does it accomplish its job?)
Phagocytes	
Natural killer cells	
Inflammatory response	
Complement proteins	
Interferons	
Fever	

Adaptive Body Defenses

13. How is the third line of defense different from the first two? In other words, what are the 3 important aspects of the adaptive (specific) defense?

14. Describe the difference between humoral (antibody-mediated) immunity and cellular (cell-mediated) immunity?

15. Define **ANTIGEN**: _____



16. Complete the following chart comparing a primary immune response and a secondary immune response.

Type of Immune Response	Happens when...	Speed of response?	Cells involved?
Primary humoral			
Secondary humoral			

17. a) Distinguish between active and passive immunity.

b) Distinguish between naturally acquired and artificially acquired immunity.

c) Describe how one might develop artificially acquired passive immunity. _____

18. What are VACCINES? Give 5 examples of diseases for which we already have vaccines.



19. Define the following terms:

a. Neutralization: _____

b. Agglutination: _____

c. Precipitation: _____

20. In the table below, describe the functions of the following cells in immune response.

Cell	Function
B Cell	
Plasma Cell	
Helper T Cell	
Cytotoxic T Cell	
Regulatory T Cell	
Memory Cell	

21. What are two measures taken to reduce the chances of rejection of a transplanted organ or transplanted tissue?

- 1) _____
- 2) _____

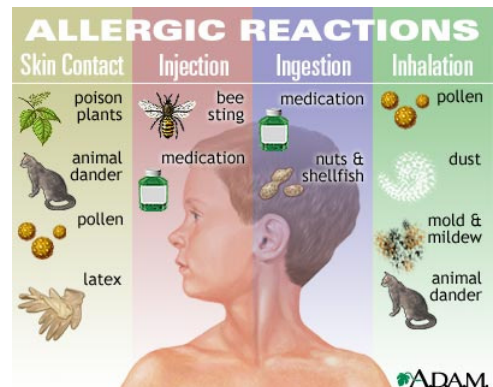
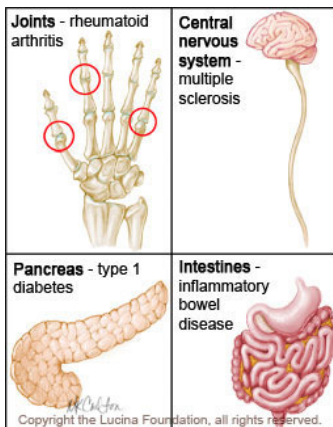
22. a. What is meant by **AUTOIMMUNITY**?

b. What conditions / events might result in autoimmunity?

23. a. What are allergies? _____

b. What are some common **ALLERGENS**? _____

c. What is **ANAPHYLATIC SHOCK**? _____

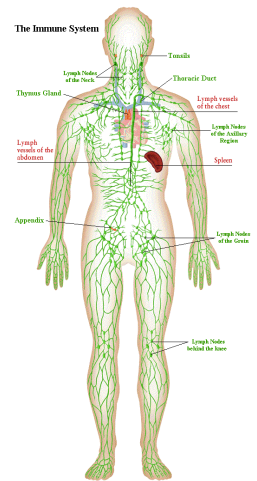


Reading Guide: Chapter 12 - Lymphatic System (pages 398-431)

1. Identify the 2 semi-independent parts of the lymphatic system:

a. _____

b. _____



Lymphatic Vessels

2. Define a. **EDEMA**: _____

b. **LYMPH**: _____

3. Describe the structure of the lymph capillaries in the lymphatic system. Compare the lymph capillaries to the vessels of the cardiovascular system.

4. True or False. (Circle one). Proteins, debris, bacteria, and other large particles can enter the lymphatic capillaries easily unlike the vessels in the cardiovascular system.

Lymph Nodes

5. What is the function of the lymph nodes? _____

6. Describe what causes "swollen glands"?

7. Draw a picture of a lymph node. In your drawing, identify the cortex, follicle, afferent lymphatic vessel, capsule, and efferent lymphatic vessel.

Other Lymphoid Organs

8. Describe the functions of the following lymphoid organs

Lymphoid Organ	Function(s)
Spleen	
Thymus	
Tonsils	
Peyer's Patches	
Appendix	

9. Describe the difference between the innate (nonspecific) immune system and the adaptive (specific) immune system.

Innate Body Defenses

10. List and describe the physical and chemical components of the **first line** of defense.

11. a. What physiological process causes redness and inflammation at the site of an injury?

b. What is the advantage of localized heat at the site of an injury?

c. What is pus? How does it form?

12. The body's second line of defense includes various cell types and responses. Complete the chart below describing the different types of second line of defense and their functions.

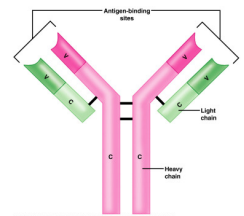
Cellular/Chemical Defense	Job (what does it do? how does it accomplish its job?)
Phagocytes	
Natural killer cells	
Inflammatory response	
Complement proteins	
Interferons	
Fever	

Adaptive Body Defenses

13. How is the third line of defense different from the first two? In other words, what are the 3 important aspects of the adaptive (specific) defense?

14. Describe the difference between humoral (antibody-mediated) immunity and cellular (cell-mediated) immunity?

15. Define **ANTIGEN**: _____



16. Complete the following chart comparing a primary immune response and a secondary immune response.

Type of Immune Response	Happens when...	Speed of response?	Cells involved?
Primary humoral			
Secondary humoral			

17. a) Distinguish between active and passive immunity.

b) Distinguish between naturally acquired and artificially acquired immunity.

c) Describe how one might develop artificially acquired passive immunity. _____

18. What are VACCINES? Give 5 examples of diseases for which we already have vaccines.



19. Define the following terms:

a. Neutralization: _____

b. Agglutination: _____

c. Precipitation: _____

20. In the table below, describe the functions of the following cells in immune response.

Cell	Function
B Cell	
Plasma Cell	
Helper T Cell	
Cytotoxic T Cell	
Regulatory T Cell	
Memory Cell	

21. What are two measures taken to reduce the chances of rejection of a transplanted organ or transplanted tissue?

- 1) _____
- 2) _____

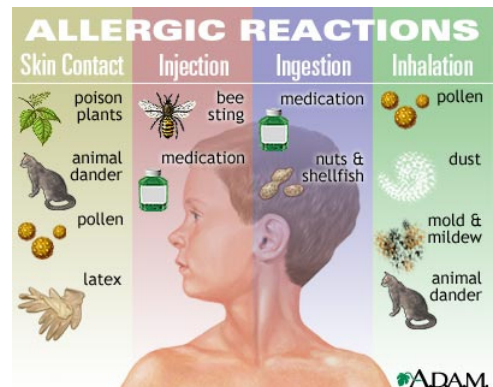
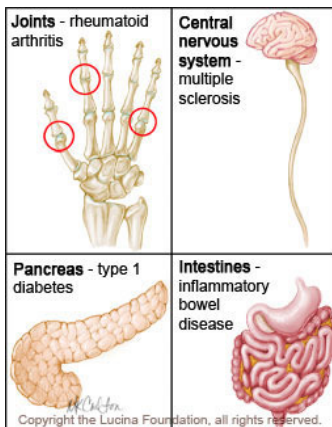
22. a. What is meant by **AUTOIMMUNITY**?

b. What conditions / events might result in autoimmunity?

23. a. What are allergies? _____

b. What are some common **ALLERGENS**? _____

c. What is **ANAPHYLATIC SHOCK**? _____

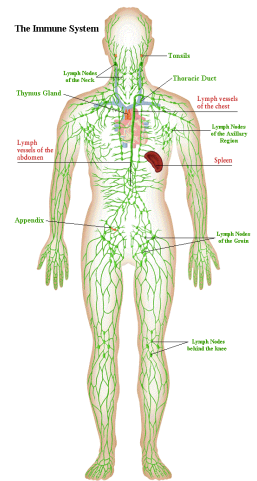


Reading Guide: Chapter 12 - Lymphatic System (pages 398-431)

1. Identify the 2 semi-independent parts of the lymphatic system:

a. _____

b. _____



Lymphatic Vessels

2. Define a. **EDEMA**: _____

b. **LYMPH**: _____

3. Describe the structure of the lymph capillaries in the lymphatic system. Compare the lymph capillaries to the vessels of the cardiovascular system.

4. True or False. (Circle one). Proteins, debris, bacteria, and other large particles can enter the lymphatic capillaries easily unlike the vessels in the cardiovascular system.

Lymph Nodes

5. What is the function of the lymph nodes? _____

6. Describe what causes "swollen glands"?

7. Draw a picture of a lymph node. In your drawing, identify the cortex, follicle, afferent lymphatic vessel, capsule, and efferent lymphatic vessel.

Other Lymphoid Organs

8. Describe the functions of the following lymphoid organs

Lymphoid Organ	Function(s)
Spleen	
Thymus	
Tonsils	
Peyer's Patches	
Appendix	

9. Describe the difference between the innate (nonspecific) immune system and the adaptive (specific) immune system.

Innate Body Defenses

10. List and describe the physical and chemical components of the **first line** of defense.

11. a. What physiological process causes redness and inflammation at the site of an injury?

b. What is the advantage of localized heat at the site of an injury?

c. What is pus? How does it form?

12. The body's second line of defense includes various cell types and responses. Complete the chart below describing the different types of second line of defense and their functions.

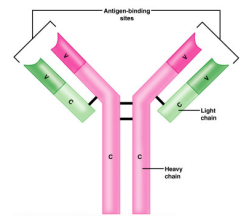
Cellular/Chemical Defense	Job (what does it do? how does it accomplish its job?)
Phagocytes	
Natural killer cells	
Inflammatory response	
Complement proteins	
Interferons	
Fever	

Adaptive Body Defenses

13. How is the third line of defense different from the first two? In other words, what are the 3 important aspects of the adaptive (specific) defense?

14. Describe the difference between humoral (antibody-mediated) immunity and cellular (cell-mediated) immunity?

15. Define **ANTIGEN**: _____



16. Complete the following chart comparing a primary immune response and a secondary immune response.

Type of Immune Response	Happens when...	Speed of response?	Cells involved?
Primary humoral			
Secondary humoral			

17. a) Distinguish between active and passive immunity.

b) Distinguish between naturally acquired and artificially acquired immunity.

c) Describe how one might develop artificially acquired passive immunity. _____

18. What are VACCINES? Give 5 examples of diseases for which we already have vaccines.



19. Define the following terms:

a. Neutralization: _____

b. Agglutination: _____

c. Precipitation: _____

20. In the table below, describe the functions of the following cells in immune response.

Cell	Function
B Cell	
Plasma Cell	
Helper T Cell	
Cytotoxic T Cell	
Regulatory T Cell	
Memory Cell	

21. What are two measures taken to reduce the chances of rejection of a transplanted organ or transplanted tissue?

- 1) _____
- 2) _____

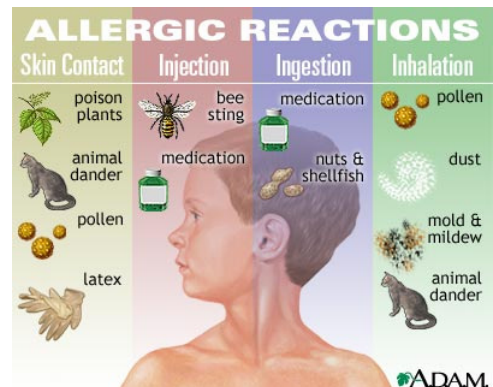
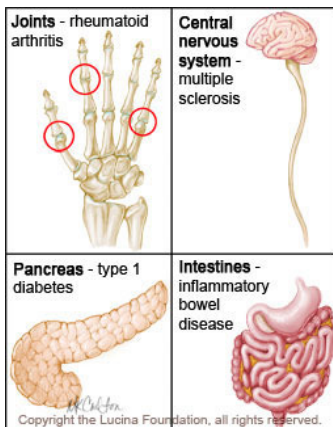
22. a. What is meant by **AUTOIMMUNITY**?

b. What conditions / events might result in autoimmunity?

23. a. What are allergies? _____

b. What are some common **ALLERGENS**? _____

c. What is **ANAPHYLATIC SHOCK**? _____

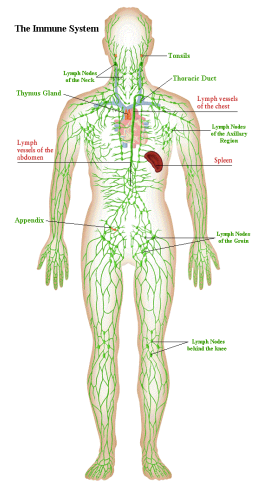


Reading Guide: Chapter 12 - Lymphatic System (pages 398-431)

1. Identify the 2 semi-independent parts of the lymphatic system:

a. _____

b. _____



Lymphatic Vessels

2. Define a. **EDEMA**: _____

b. **LYMPH**: _____

3. Describe the structure of the lymph capillaries in the lymphatic system. Compare the lymph capillaries to the vessels of the cardiovascular system.

4. True or False. (Circle one). Proteins, debris, bacteria, and other large particles can enter the lymphatic capillaries easily unlike the vessels in the cardiovascular system.

Lymph Nodes

5. What is the function of the lymph nodes? _____

6. Describe what causes "swollen glands"?

7. Draw a picture of a lymph node. In your drawing, identify the cortex, follicle, afferent lymphatic vessel, capsule, and efferent lymphatic vessel.

Other Lymphoid Organs

8. Describe the functions of the following lymphoid organs

Lymphoid Organ	Function(s)
Spleen	
Thymus	
Tonsils	
Peyer's Patches	
Appendix	

9. Describe the difference between the innate (nonspecific) immune system and the adaptive (specific) immune system.

Innate Body Defenses

10. List and describe the physical and chemical components of the **first line** of defense.

11. a. What physiological process causes redness and inflammation at the site of an injury?

b. What is the advantage of localized heat at the site of an injury?

c. What is pus? How does it form?

12. The body's second line of defense includes various cell types and responses. Complete the chart below describing the different types of second line of defense and their functions.

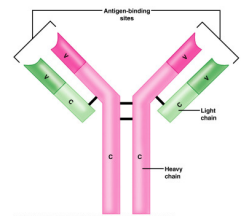
Cellular/Chemical Defense	Job (what does it do? how does it accomplish its job?)
Phagocytes	
Natural killer cells	
Inflammatory response	
Complement proteins	
Interferons	
Fever	

Adaptive Body Defenses

13. How is the third line of defense different from the first two? In other words, what are the 3 important aspects of the adaptive (specific) defense?

14. Describe the difference between humoral (antibody-mediated) immunity and cellular (cell-mediated) immunity?

15. Define **ANTIGEN**: _____



16. Complete the following chart comparing a primary immune response and a secondary immune response.

Type of Immune Response	Happens when...	Speed of response?	Cells involved?
Primary humoral			
Secondary humoral			

17. a) Distinguish between active and passive immunity.

b) Distinguish between naturally acquired and artificially acquired immunity.

c) Describe how one might develop artificially acquired passive immunity. _____

18. What are VACCINES? Give 5 examples of diseases for which we already have vaccines.



19. Define the following terms:

a. Neutralization: _____

b. Agglutination: _____

c. Precipitation: _____

20. In the table below, describe the functions of the following cells in immune response.

Cell	Function
B Cell	
Plasma Cell	
Helper T Cell	
Cytotoxic T Cell	
Regulatory T Cell	
Memory Cell	

21. What are two measures taken to reduce the chances of rejection of a transplanted organ or transplanted tissue?

- 1) _____
- 2) _____

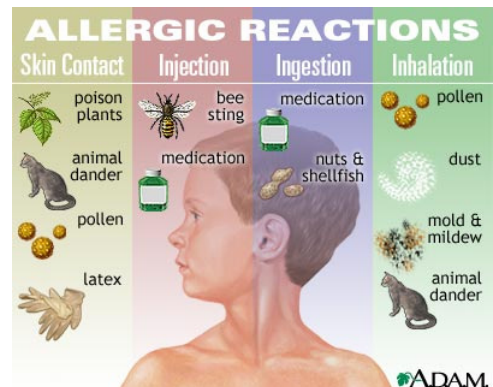
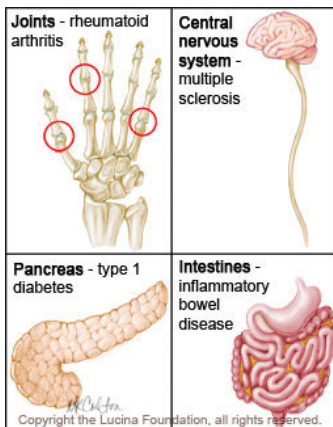
22. a. What is meant by **AUTOIMMUNITY**?

b. What conditions / events might result in autoimmunity?

23. a. What are allergies? _____

b. What are some common **ALLERGENS**? _____

c. What is **ANAPHYLATIC SHOCK**? _____

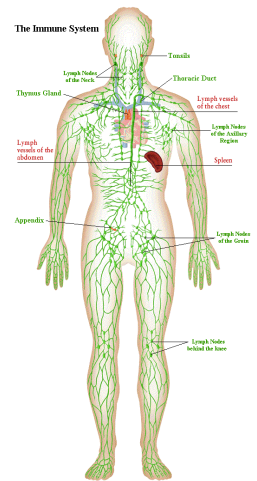


Reading Guide: Chapter 12 - Lymphatic System (pages 398-431)

1. Identify the 2 semi-independent parts of the lymphatic system:

a. _____

b. _____



Lymphatic Vessels

2. Define a. **EDEMA**: _____

b. **LYMPH**: _____

3. Describe the structure of the lymph capillaries in the lymphatic system. Compare the lymph capillaries to the vessels of the cardiovascular system.

4. True or False. (Circle one). Proteins, debris, bacteria, and other large particles can enter the lymphatic capillaries easily unlike the vessels in the cardiovascular system.

Lymph Nodes

5. What is the function of the lymph nodes? _____

6. Describe what causes "swollen glands"?

7. Draw a picture of a lymph node. In your drawing, identify the cortex, follicle, afferent lymphatic vessel, capsule, and efferent lymphatic vessel.

Other Lymphoid Organs

8. Describe the functions of the following lymphoid organs

Lymphoid Organ	Function(s)
Spleen	
Thymus	
Tonsils	
Peyer's Patches	
Appendix	

9. Describe the difference between the innate (nonspecific) immune system and the adaptive (specific) immune system.

Innate Body Defenses

10. List and describe the physical and chemical components of the **first line** of defense.

11. a. What physiological process causes redness and inflammation at the site of an injury?

b. What is the advantage of localized heat at the site of an injury?

c. What is pus? How does it form?

12. The body's second line of defense includes various cell types and responses. Complete the chart below describing the different types of second line of defense and their functions.

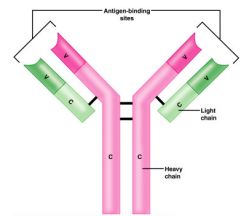
Cellular/Chemical Defense	Job (what does it do? how does it accomplish its job?)
Phagocytes	
Natural killer cells	
Inflammatory response	
Complement proteins	
Interferons	
Fever	

Adaptive Body Defenses

13. How is the third line of defense different from the first two? In other words, what are the 3 important aspects of the adaptive (specific) defense?

14. Describe the difference between humoral (antibody-mediated) immunity and cellular (cell-mediated) immunity?

15. Define **ANTIGEN**: _____



16. Complete the following chart comparing a primary immune response and a secondary immune response.

Type of Immune Response	Happens when...	Speed of response?	Cells involved?
Primary humoral			
Secondary humoral			

17. a) Distinguish between active and passive immunity.

b) Distinguish between naturally acquired and artificially acquired immunity.

c) Describe how one might develop artificially acquired passive immunity. _____

18. What are VACCINES? Give 5 examples of diseases for which we already have vaccines.



19. Define the following terms:

a. Neutralization: _____

b. Agglutination: _____

c. Precipitation: _____

20. In the table below, describe the functions of the following cells in immune response.

Cell	Function
B Cell	
Plasma Cell	
Helper T Cell	
Cytotoxic T Cell	
Regulatory T Cell	
Memory Cell	

21. What are two measures taken to reduce the chances of rejection of a transplanted organ or transplanted tissue?

- 1) _____
- 2) _____

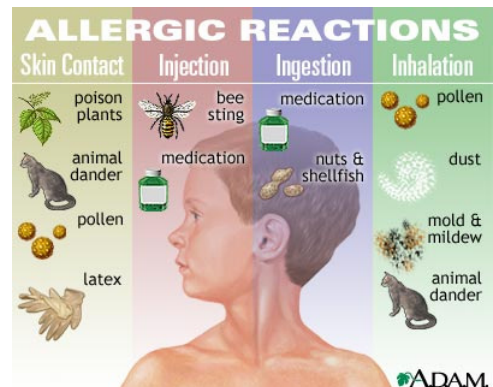
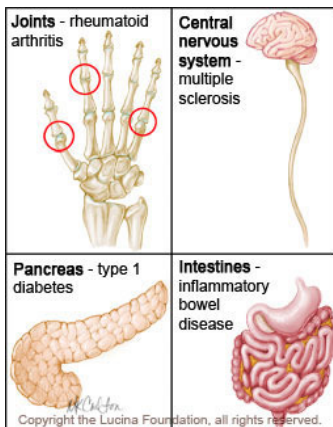
22. a. What is meant by **AUTOIMMUNITY**?

b. What conditions / events might result in autoimmunity?

23. a. What are allergies? _____

b. What are some common **ALLERGENS**? _____

c. What is **ANAPHYLATIC SHOCK**? _____

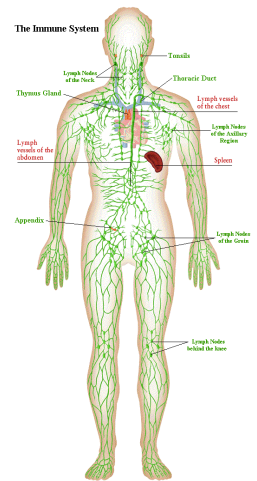


Reading Guide: Chapter 12 - Lymphatic System (pages 398-431)

1. Identify the 2 semi-independent parts of the lymphatic system:

a. _____

b. _____



Lymphatic Vessels

2. Define a. **EDEMA**: _____

b. **LYMPH**: _____

3. Describe the structure of the lymph capillaries in the lymphatic system. Compare the lymph capillaries to the vessels of the cardiovascular system.

4. True or False. (Circle one). Proteins, debris, bacteria, and other large particles can enter the lymphatic capillaries easily unlike the vessels in the cardiovascular system.

Lymph Nodes

5. What is the function of the lymph nodes? _____

6. Describe what causes "swollen glands"?

7. Draw a picture of a lymph node. In your drawing, identify the cortex, follicle, afferent lymphatic vessel, capsule, and efferent lymphatic vessel.

Other Lymphoid Organs

8. Describe the functions of the following lymphoid organs

Lymphoid Organ	Function(s)
Spleen	
Thymus	
Tonsils	
Peyer's Patches	
Appendix	

9. Describe the difference between the innate (nonspecific) immune system and the adaptive (specific) immune system.

Innate Body Defenses

10. List and describe the physical and chemical components of the **first line** of defense.

11. a. What physiological process causes redness and inflammation at the site of an injury?

b. What is the advantage of localized heat at the site of an injury?

c. What is pus? How does it form?

12. The body's second line of defense includes various cell types and responses. Complete the chart below describing the different types of second line of defense and their functions.

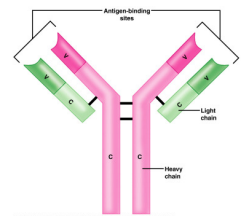
Cellular/Chemical Defense	Job (what does it do? how does it accomplish its job?)
Phagocytes	
Natural killer cells	
Inflammatory response	
Complement proteins	
Interferons	
Fever	

Adaptive Body Defenses

13. How is the third line of defense different from the first two? In other words, what are the 3 important aspects of the adaptive (specific) defense?

14. Describe the difference between humoral (antibody-mediated) immunity and cellular (cell-mediated) immunity?

15. Define **ANTIGEN**: _____



16. Complete the following chart comparing a primary immune response and a secondary immune response.

Type of Immune Response	Happens when...	Speed of response?	Cells involved?
Primary humoral			
Secondary humoral			

17. a) Distinguish between active and passive immunity.

b) Distinguish between naturally acquired and artificially acquired immunity.

c) Describe how one might develop artificially acquired passive immunity. _____

18. What are VACCINES? Give 5 examples of diseases for which we already have vaccines.



19. Define the following terms:

a. Neutralization: _____

b. Agglutination: _____

c. Precipitation: _____

20. In the table below, describe the functions of the following cells in immune response.

Cell	Function
B Cell	
Plasma Cell	
Helper T Cell	
Cytotoxic T Cell	
Regulatory T Cell	
Memory Cell	

21. What are two measures taken to reduce the chances of rejection of a transplanted organ or transplanted tissue?

- 1) _____
- 2) _____

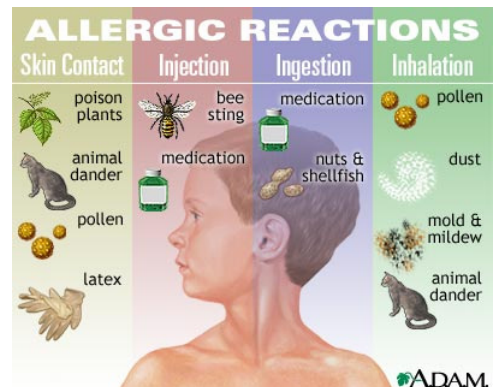
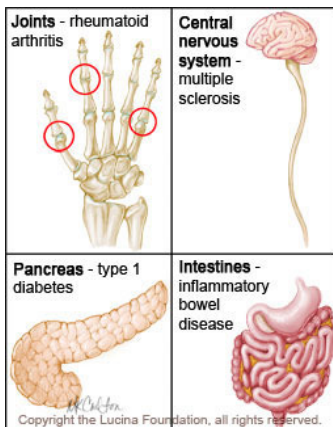
22. a. What is meant by **AUTOIMMUNITY**?

b. What conditions / events might result in autoimmunity?

23. a. What are allergies? _____

b. What are some common **ALLERGENS**? _____

c. What is **ANAPHYLATIC SHOCK**? _____

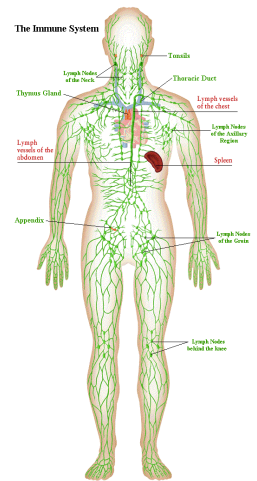


Reading Guide: Chapter 12 - Lymphatic System (pages 398-431)

1. Identify the 2 semi-independent parts of the lymphatic system:

a. _____

b. _____



Lymphatic Vessels

2. Define a. **EDEMA**: _____

b. **LYMPH**: _____

3. Describe the structure of the lymph capillaries in the lymphatic system. Compare the lymph capillaries to the vessels of the cardiovascular system.

4. True or False. (Circle one). Proteins, debris, bacteria, and other large particles can enter the lymphatic capillaries easily unlike the vessels in the cardiovascular system.

Lymph Nodes

5. What is the function of the lymph nodes? _____

6. Describe what causes "swollen glands"?

7. Draw a picture of a lymph node. In your drawing, identify the cortex, follicle, afferent lymphatic vessel, capsule, and efferent lymphatic vessel.

Other Lymphoid Organs

8. Describe the functions of the following lymphoid organs

Lymphoid Organ	Function(s)
Spleen	
Thymus	
Tonsils	
Peyer's Patches	
Appendix	

9. Describe the difference between the innate (nonspecific) immune system and the adaptive (specific) immune system.

Innate Body Defenses

10. List and describe the physical and chemical components of the **first line** of defense.

11. a. What physiological process causes redness and inflammation at the site of an injury?

b. What is the advantage of localized heat at the site of an injury?

c. What is pus? How does it form?

12. The body's second line of defense includes various cell types and responses. Complete the chart below describing the different types of second line of defense and their functions.

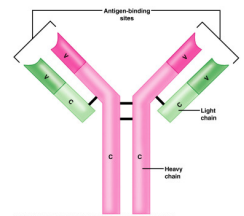
Cellular/Chemical Defense	Job (what does it do? how does it accomplish its job?)
Phagocytes	
Natural killer cells	
Inflammatory response	
Complement proteins	
Interferons	
Fever	

Adaptive Body Defenses

13. How is the third line of defense different from the first two? In other words, what are the 3 important aspects of the adaptive (specific) defense?

14. Describe the difference between humoral (antibody-mediated) immunity and cellular (cell-mediated) immunity?

15. Define **ANTIGEN**: _____



16. Complete the following chart comparing a primary immune response and a secondary immune response.

Type of Immune Response	Happens when...	Speed of response?	Cells involved?
Primary humoral			
Secondary humoral			

17. a) Distinguish between active and passive immunity.

b) Distinguish between naturally acquired and artificially acquired immunity.

c) Describe how one might develop artificially acquired passive immunity. _____

18. What are VACCINES? Give 5 examples of diseases for which we already have vaccines.



19. Define the following terms:

a. Neutralization: _____

b. Agglutination: _____

c. Precipitation: _____

20. In the table below, describe the functions of the following cells in immune response.

Cell	Function
B Cell	
Plasma Cell	
Helper T Cell	
Cytotoxic T Cell	
Regulatory T Cell	
Memory Cell	

21. What are two measures taken to reduce the chances of rejection of a transplanted organ or transplanted tissue?

- 1) _____
- 2) _____

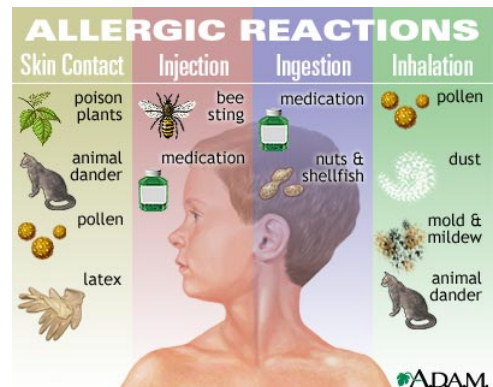
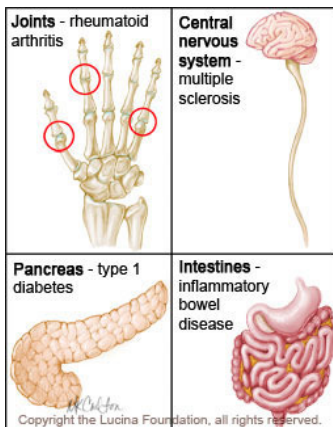
22. a. What is meant by **AUTOIMMUNITY**?

b. What conditions / events might result in autoimmunity?

23. a. What are allergies? _____

b. What are some common **ALLERGENS**? _____

c. What is **ANAPHYLATIC SHOCK**? _____

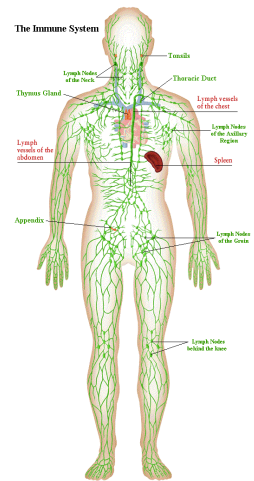


Reading Guide: Chapter 12 - Lymphatic System (pages 398-431)

1. Identify the 2 semi-independent parts of the lymphatic system:

a. _____

b. _____



Lymphatic Vessels

2. Define a. **EDEMA**: _____

b. **LYMPH**: _____

3. Describe the structure of the lymph capillaries in the lymphatic system. Compare the lymph capillaries to the vessels of the cardiovascular system.

4. True or False. (Circle one). Proteins, debris, bacteria, and other large particles can enter the lymphatic capillaries easily unlike the vessels in the cardiovascular system.

Lymph Nodes

5. What is the function of the lymph nodes? _____

6. Describe what causes "swollen glands"?

7. Draw a picture of a lymph node. In your drawing, identify the cortex, follicle, afferent lymphatic vessel, capsule, and efferent lymphatic vessel.

Other Lymphoid Organs

8. Describe the functions of the following lymphoid organs

Lymphoid Organ	Function(s)
Spleen	
Thymus	
Tonsils	
Peyer's Patches	
Appendix	

9. Describe the difference between the innate (nonspecific) immune system and the adaptive (specific) immune system.

Innate Body Defenses

10. List and describe the physical and chemical components of the **first line** of defense.

11. a. What physiological process causes redness and inflammation at the site of an injury?

b. What is the advantage of localized heat at the site of an injury?

c. What is pus? How does it form?

12. The body's second line of defense includes various cell types and responses. Complete the chart below describing the different types of second line of defense and their functions.

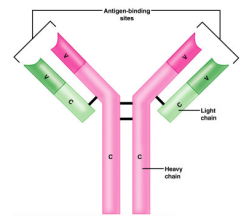
Cellular/Chemical Defense	Job (what does it do? how does it accomplish its job?)
Phagocytes	
Natural killer cells	
Inflammatory response	
Complement proteins	
Interferons	
Fever	

Adaptive Body Defenses

13. How is the third line of defense different from the first two? In other words, what are the 3 important aspects of the adaptive (specific) defense?

14. Describe the difference between humoral (antibody-mediated) immunity and cellular (cell-mediated) immunity?

15. Define **ANTIGEN**: _____



16. Complete the following chart comparing a primary immune response and a secondary immune response.

Type of Immune Response	Happens when...	Speed of response?	Cells involved?
Primary humoral			
Secondary humoral			

17. a) Distinguish between active and passive immunity.

b) Distinguish between naturally acquired and artificially acquired immunity.

c) Describe how one might develop artificially acquired passive immunity. _____

18. What are VACCINES? Give 5 examples of diseases for which we already have vaccines.



19. Define the following terms:

a. Neutralization: _____

b. Agglutination: _____

c. Precipitation: _____

20. In the table below, describe the functions of the following cells in immune response.

Cell	Function
B Cell	
Plasma Cell	
Helper T Cell	
Cytotoxic T Cell	
Regulatory T Cell	
Memory Cell	

21. What are two measures taken to reduce the chances of rejection of a transplanted organ or transplanted tissue?

- 1) _____
- 2) _____

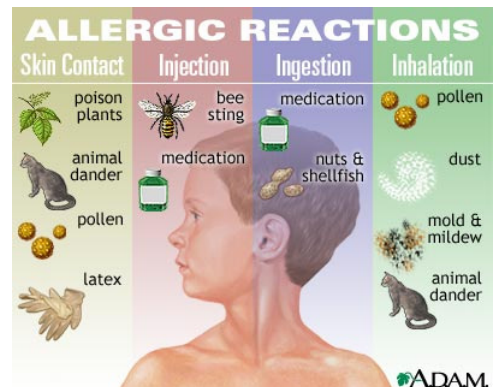
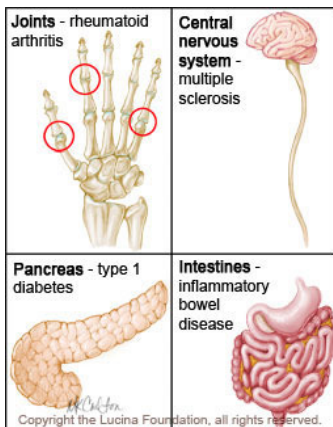
22. a. What is meant by **AUTOIMMUNITY**?

b. What conditions / events might result in autoimmunity?

23. a. What are allergies? _____

b. What are some common **ALLERGENS**? _____

c. What is **ANAPHYLATIC SHOCK**? _____

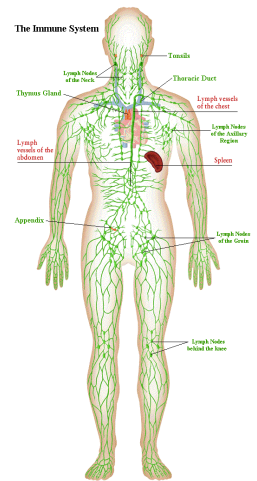


Reading Guide: Chapter 12 - Lymphatic System (pages 398-431)

1. Identify the 2 semi-independent parts of the lymphatic system:

a. _____

b. _____



Lymphatic Vessels

2. Define a. **EDEMA**: _____

b. **LYMPH**: _____

3. Describe the structure of the lymph capillaries in the lymphatic system. Compare the lymph capillaries to the vessels of the cardiovascular system.

4. True or False. (Circle one). Proteins, debris, bacteria, and other large particles can enter the lymphatic capillaries easily unlike the vessels in the cardiovascular system.

Lymph Nodes

5. What is the function of the lymph nodes? _____

6. Describe what causes "swollen glands"?

7. Draw a picture of a lymph node. In your drawing, identify the cortex, follicle, afferent lymphatic vessel, capsule, and efferent lymphatic vessel.

Other Lymphoid Organs

8. Describe the functions of the following lymphoid organs

Lymphoid Organ	Function(s)
Spleen	
Thymus	
Tonsils	
Peyer's Patches	
Appendix	

9. Describe the difference between the innate (nonspecific) immune system and the adaptive (specific) immune system.

Innate Body Defenses

10. List and describe the physical and chemical components of the **first line** of defense.

11. a. What physiological process causes redness and inflammation at the site of an injury?

b. What is the advantage of localized heat at the site of an injury?

c. What is pus? How does it form?

12. The body's second line of defense includes various cell types and responses. Complete the chart below describing the different types of second line of defense and their functions.

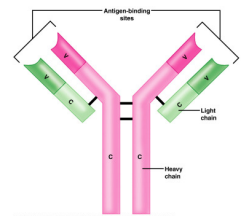
Cellular/Chemical Defense	Job (what does it do? how does it accomplish its job?)
Phagocytes	
Natural killer cells	
Inflammatory response	
Complement proteins	
Interferons	
Fever	

Adaptive Body Defenses

13. How is the third line of defense different from the first two? In other words, what are the 3 important aspects of the adaptive (specific) defense?

14. Describe the difference between humoral (antibody-mediated) immunity and cellular (cell-mediated) immunity?

15. Define **ANTIGEN**: _____



16. Complete the following chart comparing a primary immune response and a secondary immune response.

Type of Immune Response	Happens when...	Speed of response?	Cells involved?
Primary humoral			
Secondary humoral			

17. a) Distinguish between active and passive immunity.

b) Distinguish between naturally acquired and artificially acquired immunity.

c) Describe how one might develop artificially acquired passive immunity. _____

18. What are VACCINES? Give 5 examples of diseases for which we already have vaccines.



19. Define the following terms:

a. Neutralization: _____

b. Agglutination: _____

c. Precipitation: _____

20. In the table below, describe the functions of the following cells in immune response.

Cell	Function
B Cell	
Plasma Cell	
Helper T Cell	
Cytotoxic T Cell	
Regulatory T Cell	
Memory Cell	

21. What are two measures taken to reduce the chances of rejection of a transplanted organ or transplanted tissue?

- 1) _____
- 2) _____

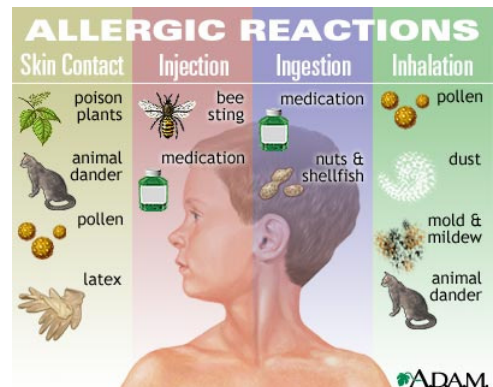
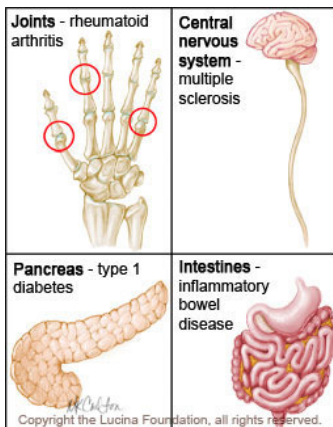
22. a. What is meant by **AUTOIMMUNITY**?

b. What conditions / events might result in autoimmunity?

23. a. What are allergies? _____

b. What are some common **ALLERGENS**? _____

c. What is **ANAPHYLATIC SHOCK**? _____

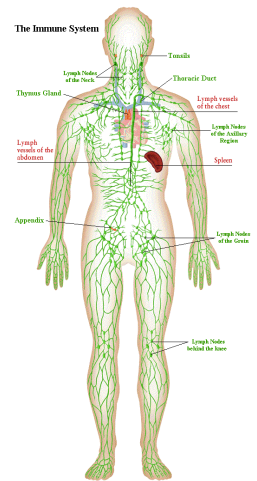


Reading Guide: Chapter 12 - Lymphatic System (pages 398-431)

1. Identify the 2 semi-independent parts of the lymphatic system:

a. _____

b. _____



Lymphatic Vessels

2. Define a. **EDEMA**: _____

b. **LYMPH**: _____

3. Describe the structure of the lymph capillaries in the lymphatic system. Compare the lymph capillaries to the vessels of the cardiovascular system.

4. True or False. (Circle one). Proteins, debris, bacteria, and other large particles can enter the lymphatic capillaries easily unlike the vessels in the cardiovascular system.

Lymph Nodes

5. What is the function of the lymph nodes? _____

6. Describe what causes "swollen glands"?

7. Draw a picture of a lymph node. In your drawing, identify the cortex, follicle, afferent lymphatic vessel, capsule, and efferent lymphatic vessel.

Other Lymphoid Organs

8. Describe the functions of the following lymphoid organs

Lymphoid Organ	Function(s)
Spleen	
Thymus	
Tonsils	
Peyer's Patches	
Appendix	

9. Describe the difference between the innate (nonspecific) immune system and the adaptive (specific) immune system.

Innate Body Defenses

10. List and describe the physical and chemical components of the **first line** of defense.

11. a. What physiological process causes redness and inflammation at the site of an injury?

b. What is the advantage of localized heat at the site of an injury?

c. What is pus? How does it form?

12. The body's second line of defense includes various cell types and responses. Complete the chart below describing the different types of second line of defense and their functions.

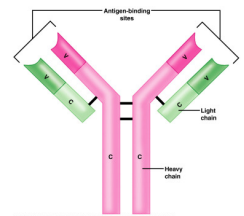
Cellular/Chemical Defense	Job (what does it do? how does it accomplish its job?)
Phagocytes	
Natural killer cells	
Inflammatory response	
Complement proteins	
Interferons	
Fever	

Adaptive Body Defenses

13. How is the third line of defense different from the first two? In other words, what are the 3 important aspects of the adaptive (specific) defense?

14. Describe the difference between humoral (antibody-mediated) immunity and cellular (cell-mediated) immunity?

15. Define **ANTIGEN**: _____



16. Complete the following chart comparing a primary immune response and a secondary immune response.

Type of Immune Response	Happens when...	Speed of response?	Cells involved?
Primary humoral			
Secondary humoral			

17. a) Distinguish between active and passive immunity.

b) Distinguish between naturally acquired and artificially acquired immunity.

c) Describe how one might develop artificially acquired passive immunity. _____

18. What are VACCINES? Give 5 examples of diseases for which we already have vaccines.



19. Define the following terms:

a. Neutralization: _____

b. Agglutination: _____

c. Precipitation: _____

20. In the table below, describe the functions of the following cells in immune response.

Cell	Function
B Cell	
Plasma Cell	
Helper T Cell	
Cytotoxic T Cell	
Regulatory T Cell	
Memory Cell	

21. What are two measures taken to reduce the chances of rejection of a transplanted organ or transplanted tissue?

- 1) _____
- 2) _____

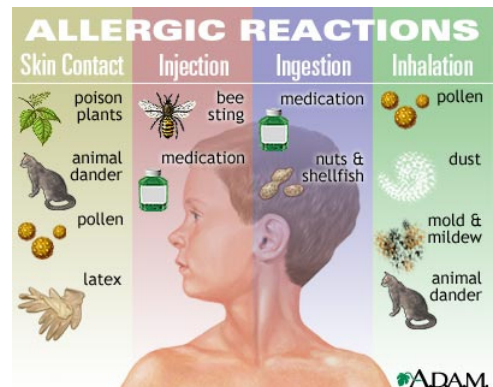
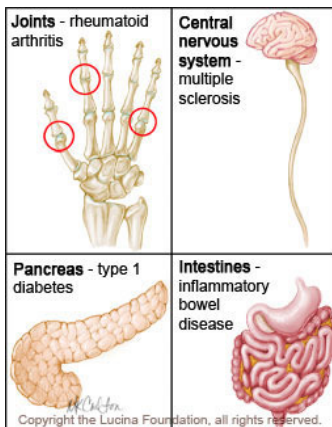
22. a. What is meant by **AUTOIMMUNITY**?

b. What conditions / events might result in autoimmunity?

23. a. What are allergies? _____

b. What are some common **ALLERGENS**? _____

c. What is **ANAPHYLATIC SHOCK**? _____

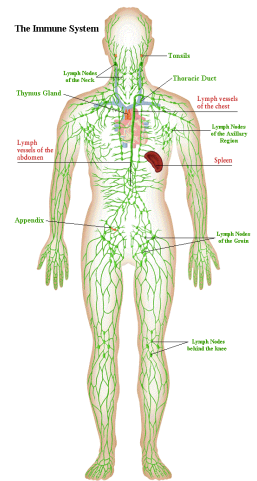


Reading Guide: Chapter 12 - Lymphatic System (pages 398-431)

1. Identify the 2 semi-independent parts of the lymphatic system:

a. _____

b. _____



Lymphatic Vessels

2. Define a. **EDEMA**: _____

b. **LYMPH**: _____

3. Describe the structure of the lymph capillaries in the lymphatic system. Compare the lymph capillaries to the vessels of the cardiovascular system.

4. True or False. (Circle one). Proteins, debris, bacteria, and other large particles can enter the lymphatic capillaries easily unlike the vessels in the cardiovascular system.

Lymph Nodes

5. What is the function of the lymph nodes? _____

6. Describe what causes "swollen glands"?

7. Draw a picture of a lymph node. In your drawing, identify the cortex, follicle, afferent lymphatic vessel, capsule, and efferent lymphatic vessel.

Other Lymphoid Organs

8. Describe the functions of the following lymphoid organs

Lymphoid Organ	Function(s)
Spleen	
Thymus	
Tonsils	
Peyer's Patches	
Appendix	

9. Describe the difference between the innate (nonspecific) immune system and the adaptive (specific) immune system.

Innate Body Defenses

10. List and describe the physical and chemical components of the **first line** of defense.

11. a. What physiological process causes redness and inflammation at the site of an injury?

b. What is the advantage of localized heat at the site of an injury?

c. What is pus? How does it form?

12. The body's second line of defense includes various cell types and responses. Complete the chart below describing the different types of second line of defense and their functions.

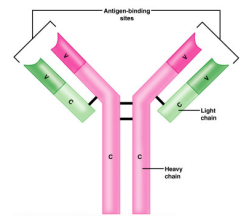
Cellular/Chemical Defense	Job (what does it do? how does it accomplish its job?)
Phagocytes	
Natural killer cells	
Inflammatory response	
Complement proteins	
Interferons	
Fever	

Adaptive Body Defenses

13. How is the third line of defense different from the first two? In other words, what are the 3 important aspects of the adaptive (specific) defense?

14. Describe the difference between humoral (antibody-mediated) immunity and cellular (cell-mediated) immunity?

15. Define **ANTIGEN**: _____



16. Complete the following chart comparing a primary immune response and a secondary immune response.

Type of Immune Response	Happens when...	Speed of response?	Cells involved?
Primary humoral			
Secondary humoral			

17. a) Distinguish between active and passive immunity.

b) Distinguish between naturally acquired and artificially acquired immunity.

c) Describe how one might develop artificially acquired passive immunity. _____

18. What are VACCINES? Give 5 examples of diseases for which we already have vaccines.



19. Define the following terms:

a. Neutralization: _____

b. Agglutination: _____

c. Precipitation: _____

20. In the table below, describe the functions of the following cells in immune response.

Cell	Function
B Cell	
Plasma Cell	
Helper T Cell	
Cytotoxic T Cell	
Regulatory T Cell	
Memory Cell	

21. What are two measures taken to reduce the chances of rejection of a transplanted organ or transplanted tissue?

- 1) _____
- 2) _____

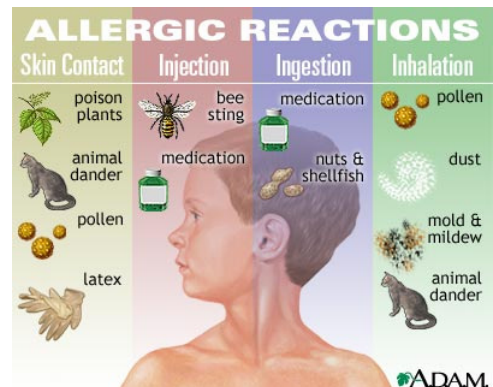
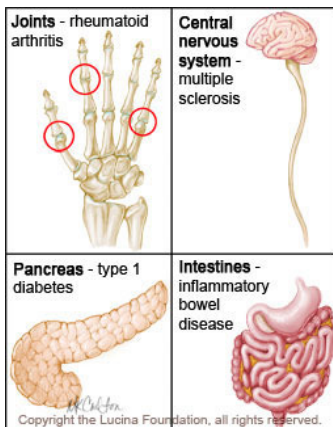
22. a. What is meant by **AUTOIMMUNITY**?

b. What conditions / events might result in autoimmunity?

23. a. What are allergies? _____

b. What are some common **ALLERGENS**? _____

c. What is **ANAPHYLATIC SHOCK**? _____

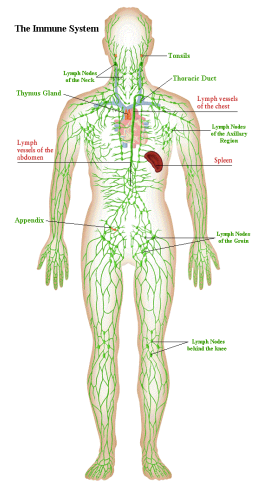


Reading Guide: Chapter 12 - Lymphatic System (pages 398-431)

1. Identify the 2 semi-independent parts of the lymphatic system:

a. _____

b. _____



Lymphatic Vessels

2. Define a. **EDEMA**: _____

b. **LYMPH**: _____

3. Describe the structure of the lymph capillaries in the lymphatic system. Compare the lymph capillaries to the vessels of the cardiovascular system.

4. True or False. (Circle one). Proteins, debris, bacteria, and other large particles can enter the lymphatic capillaries easily unlike the vessels in the cardiovascular system.

Lymph Nodes

5. What is the function of the lymph nodes? _____

6. Describe what causes "swollen glands"?

7. Draw a picture of a lymph node. In your drawing, identify the cortex, follicle, afferent lymphatic vessel, capsule, and efferent lymphatic vessel.

Other Lymphoid Organs

8. Describe the functions of the following lymphoid organs

Lymphoid Organ	Function(s)
Spleen	
Thymus	
Tonsils	
Peyer's Patches	
Appendix	

9. Describe the difference between the innate (nonspecific) immune system and the adaptive (specific) immune system.

Innate Body Defenses

10. List and describe the physical and chemical components of the **first line** of defense.

11. a. What physiological process causes redness and inflammation at the site of an injury?

b. What is the advantage of localized heat at the site of an injury?

c. What is pus? How does it form?

12. The body's second line of defense includes various cell types and responses. Complete the chart below describing the different types of second line of defense and their functions.

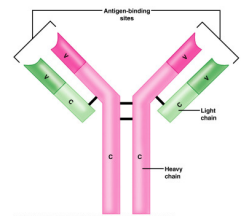
Cellular/Chemical Defense	Job (what does it do? how does it accomplish its job?)
Phagocytes	
Natural killer cells	
Inflammatory response	
Complement proteins	
Interferons	
Fever	

Adaptive Body Defenses

13. How is the third line of defense different from the first two? In other words, what are the 3 important aspects of the adaptive (specific) defense?

14. Describe the difference between humoral (antibody-mediated) immunity and cellular (cell-mediated) immunity?

15. Define **ANTIGEN**: _____



16. Complete the following chart comparing a primary immune response and a secondary immune response.

Type of Immune Response	Happens when...	Speed of response?	Cells involved?
Primary humoral			
Secondary humoral			

17. a) Distinguish between active and passive immunity.

b) Distinguish between naturally acquired and artificially acquired immunity.

c) Describe how one might develop artificially acquired passive immunity. _____

18. What are VACCINES? Give 5 examples of diseases for which we already have vaccines.



19. Define the following terms:

a. Neutralization: _____

b. Agglutination: _____

c. Precipitation: _____

20. In the table below, describe the functions of the following cells in immune response.

Cell	Function
B Cell	
Plasma Cell	
Helper T Cell	
Cytotoxic T Cell	
Regulatory T Cell	
Memory Cell	

21. What are two measures taken to reduce the chances of rejection of a transplanted organ or transplanted tissue?

- 1) _____
- 2) _____

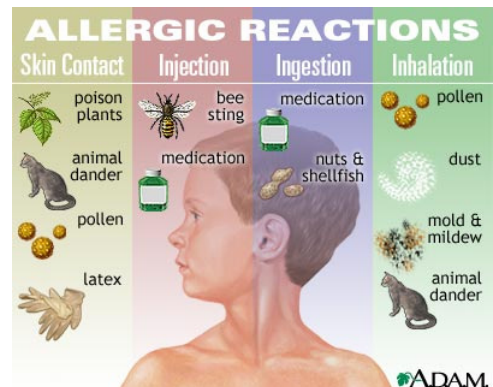
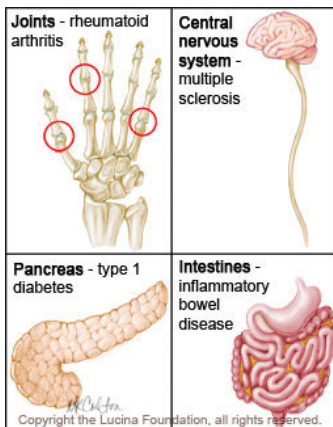
22. a. What is meant by **AUTOIMMUNITY**?

b. What conditions / events might result in autoimmunity?

23. a. What are allergies? _____

b. What are some common **ALLERGENS**? _____

c. What is **ANAPHYLATIC SHOCK**? _____

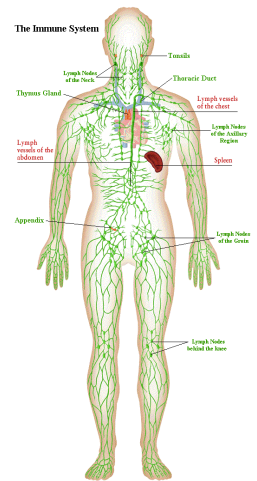


Reading Guide: Chapter 12 - Lymphatic System (pages 398-431)

1. Identify the 2 semi-independent parts of the lymphatic system:

a. _____

b. _____



Lymphatic Vessels

2. Define a. **EDEMA**: _____

b. **LYMPH**: _____

3. Describe the structure of the lymph capillaries in the lymphatic system. Compare the lymph capillaries to the vessels of the cardiovascular system.

4. True or False. (Circle one). Proteins, debris, bacteria, and other large particles can enter the lymphatic capillaries easily unlike the vessels in the cardiovascular system.

Lymph Nodes

5. What is the function of the lymph nodes? _____

6. Describe what causes "swollen glands"?

7. Draw a picture of a lymph node. In your drawing, identify the cortex, follicle, afferent lymphatic vessel, capsule, and efferent lymphatic vessel.

Other Lymphoid Organs

8. Describe the functions of the following lymphoid organs

Lymphoid Organ	Function(s)
Spleen	
Thymus	
Tonsils	
Peyer's Patches	
Appendix	

9. Describe the difference between the innate (nonspecific) immune system and the adaptive (specific) immune system.

Innate Body Defenses

10. List and describe the physical and chemical components of the **first line** of defense.

11. a. What physiological process causes redness and inflammation at the site of an injury?

b. What is the advantage of localized heat at the site of an injury?

c. What is pus? How does it form?

12. The body's second line of defense includes various cell types and responses. Complete the chart below describing the different types of second line of defense and their functions.

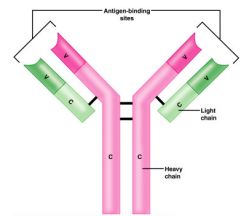
Cellular/Chemical Defense	Job (what does it do? how does it accomplish its job?)
Phagocytes	
Natural killer cells	
Inflammatory response	
Complement proteins	
Interferons	
Fever	

Adaptive Body Defenses

13. How is the third line of defense different from the first two? In other words, what are the 3 important aspects of the adaptive (specific) defense?

14. Describe the difference between humoral (antibody-mediated) immunity and cellular (cell-mediated) immunity?

15. Define **ANTIGEN**: _____



16. Complete the following chart comparing a primary immune response and a secondary immune response.

Type of Immune Response	Happens when...	Speed of response?	Cells involved?
Primary humoral			
Secondary humoral			

17. a) Distinguish between active and passive immunity.

b) Distinguish between naturally acquired and artificially acquired immunity.

c) Describe how one might develop artificially acquired passive immunity. _____

18. What are VACCINES? Give 5 examples of diseases for which we already have vaccines.



19. Define the following terms:

a. Neutralization: _____

b. Agglutination: _____

c. Precipitation: _____

20. In the table below, describe the functions of the following cells in immune response.

Cell	Function
B Cell	
Plasma Cell	
Helper T Cell	
Cytotoxic T Cell	
Regulatory T Cell	
Memory Cell	

21. What are two measures taken to reduce the chances of rejection of a transplanted organ or transplanted tissue?

- 1) _____
- 2) _____

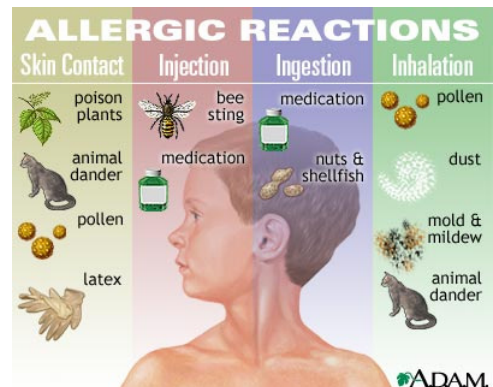
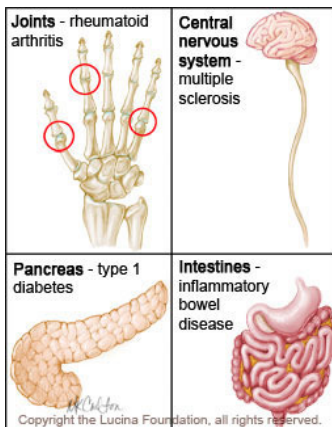
22. a. What is meant by **AUTOIMMUNITY**?

b. What conditions / events might result in autoimmunity?

23. a. What are allergies? _____

b. What are some common **ALLERGENS**? _____

c. What is **ANAPHYLATIC SHOCK**? _____

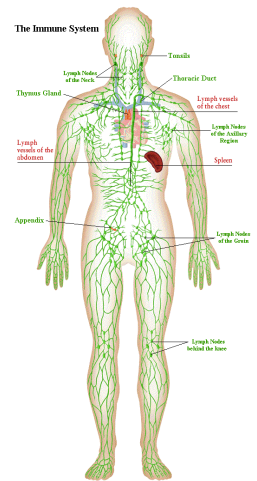


Reading Guide: Chapter 12 - Lymphatic System (pages 398-431)

1. Identify the 2 semi-independent parts of the lymphatic system:

a. _____

b. _____



Lymphatic Vessels

2. Define a. **EDEMA**: _____

b. **LYMPH**: _____

3. Describe the structure of the lymph capillaries in the lymphatic system. Compare the lymph capillaries to the vessels of the cardiovascular system.

4. True or False. (Circle one). Proteins, debris, bacteria, and other large particles can enter the lymphatic capillaries easily unlike the vessels in the cardiovascular system.

Lymph Nodes

5. What is the function of the lymph nodes? _____

6. Describe what causes "swollen glands"?

7. Draw a picture of a lymph node. In your drawing, identify the cortex, follicle, afferent lymphatic vessel, capsule, and efferent lymphatic vessel.

Other Lymphoid Organs

8. Describe the functions of the following lymphoid organs

Lymphoid Organ	Function(s)
Spleen	
Thymus	
Tonsils	
Peyer's Patches	
Appendix	

9. Describe the difference between the innate (nonspecific) immune system and the adaptive (specific) immune system.

Innate Body Defenses

10. List and describe the physical and chemical components of the **first line** of defense.

11. a. What physiological process causes redness and inflammation at the site of an injury?

b. What is the advantage of localized heat at the site of an injury?

c. What is pus? How does it form?

12. The body's second line of defense includes various cell types and responses. Complete the chart below describing the different types of second line of defense and their functions.

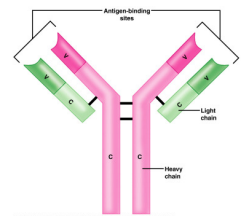
Cellular/Chemical Defense	Job (what does it do? how does it accomplish its job?)
Phagocytes	
Natural killer cells	
Inflammatory response	
Complement proteins	
Interferons	
Fever	

Adaptive Body Defenses

13. How is the third line of defense different from the first two? In other words, what are the 3 important aspects of the adaptive (specific) defense?

14. Describe the difference between humoral (antibody-mediated) immunity and cellular (cell-mediated) immunity?

15. Define **ANTIGEN**: _____



16. Complete the following chart comparing a primary immune response and a secondary immune response.

Type of Immune Response	Happens when...	Speed of response?	Cells involved?
Primary humoral			
Secondary humoral			

17. a) Distinguish between active and passive immunity.

b) Distinguish between naturally acquired and artificially acquired immunity.

c) Describe how one might develop artificially acquired passive immunity. _____

18. What are VACCINES? Give 5 examples of diseases for which we already have vaccines.



19. Define the following terms:

a. Neutralization: _____

b. Agglutination: _____

c. Precipitation: _____

20. In the table below, describe the functions of the following cells in immune response.

Cell	Function
B Cell	
Plasma Cell	
Helper T Cell	
Cytotoxic T Cell	
Regulatory T Cell	
Memory Cell	

21. What are two measures taken to reduce the chances of rejection of a transplanted organ or transplanted tissue?

- 1) _____
- 2) _____

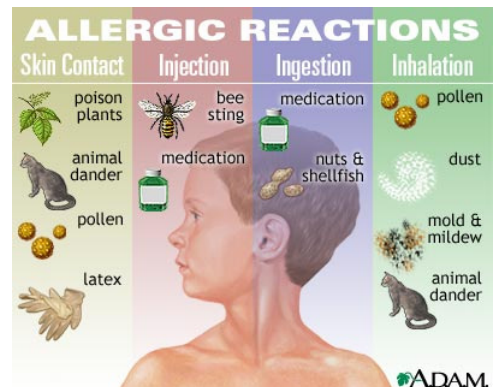
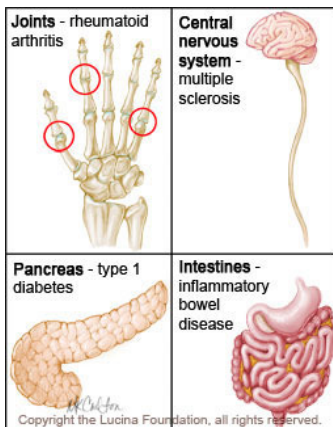
22. a. What is meant by **AUTOIMMUNITY**?

b. What conditions / events might result in autoimmunity?

23. a. What are allergies? _____

b. What are some common **ALLERGENS**? _____

c. What is **ANAPHYLATIC SHOCK**? _____

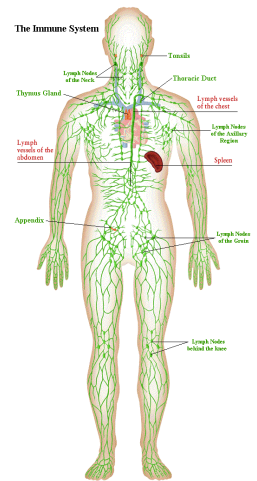


Reading Guide: Chapter 12 - Lymphatic System (pages 398-431)

1. Identify the 2 semi-independent parts of the lymphatic system:

a. _____

b. _____



Lymphatic Vessels

2. Define a. **EDEMA**: _____

b. **LYMPH**: _____

3. Describe the structure of the lymph capillaries in the lymphatic system. Compare the lymph capillaries to the vessels of the cardiovascular system.

4. True or False. (Circle one). Proteins, debris, bacteria, and other large particles can enter the lymphatic capillaries easily unlike the vessels in the cardiovascular system.

Lymph Nodes

5. What is the function of the lymph nodes? _____

6. Describe what causes "swollen glands"?

7. Draw a picture of a lymph node. In your drawing, identify the cortex, follicle, afferent lymphatic vessel, capsule, and efferent lymphatic vessel.

Other Lymphoid Organs

8. Describe the functions of the following lymphoid organs

Lymphoid Organ	Function(s)
Spleen	
Thymus	
Tonsils	
Peyer's Patches	
Appendix	

9. Describe the difference between the innate (nonspecific) immune system and the adaptive (specific) immune system.

Innate Body Defenses

10. List and describe the physical and chemical components of the **first line** of defense.

11. a. What physiological process causes redness and inflammation at the site of an injury?

b. What is the advantage of localized heat at the site of an injury?

c. What is pus? How does it form?

12. The body's second line of defense includes various cell types and responses. Complete the chart below describing the different types of second line of defense and their functions.

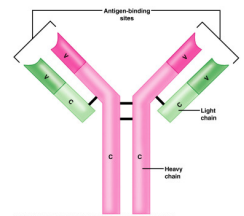
Cellular/Chemical Defense	Job (what does it do? how does it accomplish its job?)
Phagocytes	
Natural killer cells	
Inflammatory response	
Complement proteins	
Interferons	
Fever	

Adaptive Body Defenses

13. How is the third line of defense different from the first two? In other words, what are the 3 important aspects of the adaptive (specific) defense?

14. Describe the difference between humoral (antibody-mediated) immunity and cellular (cell-mediated) immunity?

15. Define **ANTIGEN**: _____



16. Complete the following chart comparing a primary immune response and a secondary immune response.

Type of Immune Response	Happens when...	Speed of response?	Cells involved?
Primary humoral			
Secondary humoral			

17. a) Distinguish between active and passive immunity.

b) Distinguish between naturally acquired and artificially acquired immunity.

c) Describe how one might develop artificially acquired passive immunity. _____

18. What are VACCINES? Give 5 examples of diseases for which we already have vaccines.



19. Define the following terms:

a. Neutralization: _____

b. Agglutination: _____

c. Precipitation: _____

20. In the table below, describe the functions of the following cells in immune response.

Cell	Function
B Cell	
Plasma Cell	
Helper T Cell	
Cytotoxic T Cell	
Regulatory T Cell	
Memory Cell	

21. What are two measures taken to reduce the chances of rejection of a transplanted organ or transplanted tissue?

- 1) _____
- 2) _____

22. a. What is meant by **AUTOIMMUNITY**?

b. What conditions / events might result in autoimmunity?

23. a. What are allergies? _____

b. What are some common **ALLERGENS**? _____

c. What is **ANAPHYLATIC SHOCK**? _____

