


Skip Counting Practice

2s through 15s



Thank you so much for downloading

Skip Counting Practice

2s through 15s

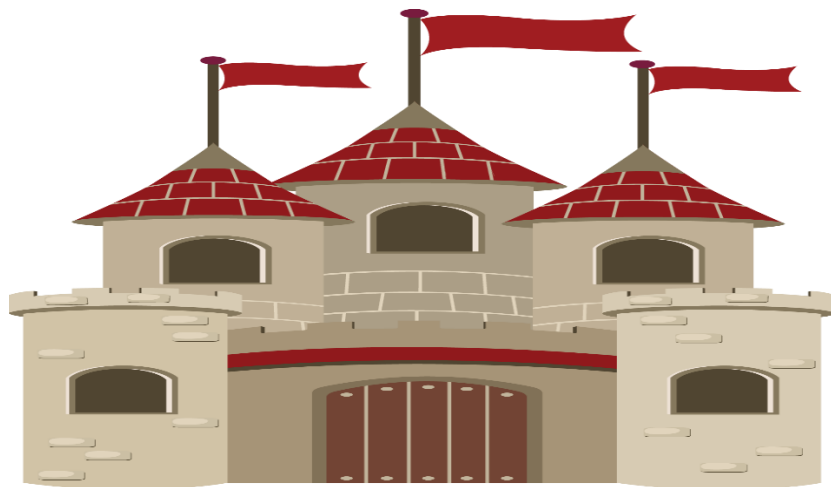
Copyright 2018 Aurie Good (Our Good Life)

All rights reserved by the author. Permission is granted to
the individual

purchaser to reproduce student materials in this project
pack for noncommercial individual or classroom use only.

All other digital duplication, electronic transmission or
posting of the contents contained, printing, photocopying,
and/or distribution of copies of content is prohibited.

For more fun educational ideas,
please visit [Our Good Family](#) where
we strive to take the stress out of learning
and add in lots of fun and laughter.



Name: _____

Date: _____



1. Count by 2's

2, 4, 6, _____, _____, _____, _____, _____, _____
_____, _____, _____, _____, _____

2. What is 2 LESS THAN 10? _____

3. What is 2 MORE THAN 12? _____

4. SUBTRACT 2 from 28. What is your answer? _____

5. What is 2 MORE THAN 14? _____

6. What is 2 LESS THAN 24? _____

7. SUBTRACT 2 from 8. What is your answer? _____

8. Count by 2's. Circle the numbers that you say.

20	2	17	30	9
8	13	4	22	5

Name: _____

Date: _____



1. Count by 3's

3, 6, 9, _____, _____, _____, _____, _____, _____
_____, _____, _____, _____, _____

2. What is 3 LESS THAN 15? _____

3. What is 3 MORE THAN 24? _____

4. SUBTRACT 3 from 39. What is your answer? _____

5. What is 3 MORE THAN 18? _____

6. What is 3 LESS THAN 15? _____

7. SUBTRACT 3 from 30. What is your answer? _____

8. Count by 3's. Circle the numbers that you say.

30

42

9

28

9

8

15

4

22

33

Name: _____

Date: _____



1. Count by 4's

4, 8, 12, _____, _____, _____, _____, _____, _____
_____, _____, _____, _____, _____

2. What is 4 LESS THAN 40? _____

3. What is 4 MORE THAN 12? _____

4. SUBTRACT 4 from 32. What is your answer? _____

5. What is 4 MORE THAN 20? _____

6. What is 4 LESS THAN 60? _____

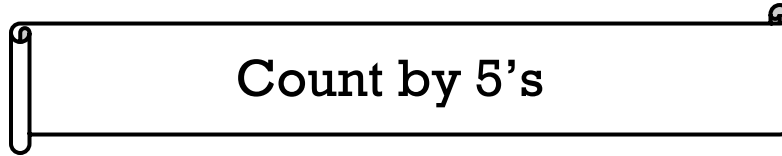
7. SUBTRACT 4 from 48. What is your answer? _____

8. Count by 4's. Circle the numbers that you say.

16	30	8	42	37
13	28	4	24	9

Name: _____

Date: _____



1. Count by 5's

5, 10, 15, _____, _____, _____, _____, _____, _____,

_____ , _____ , _____ , _____ , _____ , _____

2. What is 5 LESS THAN 50? _____

3. What is 5 MORE THAN 70? _____

4. SUBTRACT 5 from 10. What is your answer? _____

5. What is 5 MORE THAN 45? _____

6. What is 5 LESS THAN 35? _____

7. SUBTRACT 5 from 60. What is your answer? _____

8. Count by 5's. Circle the numbers that you say.

15

30

6

38

5

25

38

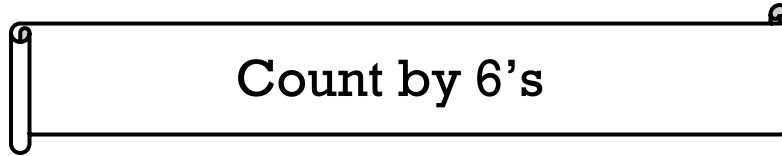
2

40

55

Name: _____

Date: _____



1. Count by 6's

6, 12, 18, _____, _____, _____, _____, _____, _____,

_____ , _____ , _____ , _____ , _____ , _____

2. What is 6 LESS THAN 36? _____

3. What is 6 MORE THAN 48? _____

4. SUBTRACT 6 from 78. What is your answer? _____

5. What is 6 MORE THAN 54? _____

6. What is 6 LESS THAN 12? _____

7. SUBTRACT 6 from 60. What is your answer? _____

8. Count by 6's. Circle the numbers that you say.

18

36

5

48

9

24

90

2

72

6

Name: _____

Date: _____

Count by 7's

1. Count by 7's

7, 14, 21, _____, _____, _____, _____, _____,

_____ , _____ , _____ , _____ , _____ , _____

2. What is 7 LESS THAN 35? _____

3. What is 7 MORE THAN 70? _____

4. SUBTRACT 7 from 49. What is your answer? _____

5. What is 7 MORE THAN 28? _____

6. What is 7 LESS THAN 21? _____

7. SUBTRACT 7 from 91. What is your answer? _____

8. Count by 7's. Circle the numbers that you say.

21

35

8

70

7

75

84

14

28

1

Name: _____

Date: _____



1. Count by 8's

8, 16, 24, _____, _____, _____, _____, _____,

_____ , _____ , _____ , _____ , _____ , _____

2. What is 8 LESS THAN 96? _____

3. What is 8 MORE THAN 24? _____

4. SUBTRACT 8 from 120. What is your answer? _____

5. What is 8 MORE THAN 16? _____

6. What is 8 LESS THAN 56? _____

7. SUBTRACT 8 from 88. What is your answer? _____

8. Count by 8's. Circle the numbers that you say.

16

38

9

72

7

75

64

2

24

8

Name: _____

Date: _____



1. Count by 9's

9, 18, 27, _____, _____, _____, _____, _____, _____,

_____ , _____ , _____ , _____ , _____ , _____

2. What is 9 LESS THAN 18? _____

3. What is 9 MORE THAN 45? _____

4. SUBTRACT 9 from 81. What is your answer? _____

5. What is 9 MORE THAN 99? _____

6. What is 9 LESS THAN 72? _____

7. SUBTRACT 9 from 63. What is your answer? _____

8. Count by 9's. Circle the numbers that you say.

18

37

9

81

2

90

63

7

27

108

Name: _____

Date: _____



1. Count by 10's

10, 20, 30, _____, _____, _____, _____, _____, _____,

_____ , _____ , _____ , _____ , _____ , _____

2. What is 10 LESS THAN 150? _____

3. What is 10 MORE THAN 100? _____

4. SUBTRACT 10 from 50. What is your answer? _____

5. What is 10 MORE THAN 80? _____

6. What is 10 LESS THAN 120? _____

7. SUBTRACT 10 from 70. What is your answer? _____

8. Count by 10's. Circle the numbers that you say.

20

37

10

40

21

130

60

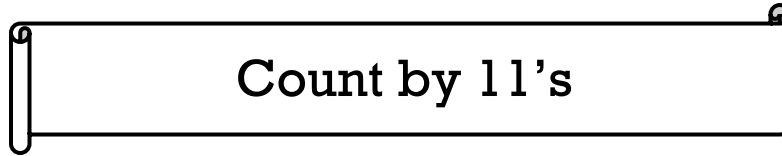
25

80

120

Name: _____

Date: _____



1. Count by 11's

11, 22, 33, _____, _____, _____, _____, _____, _____,

_____ , _____ , _____ , _____ , _____ , _____

2. What is 11 LESS THAN 33? _____

3. What is 11 MORE THAN 77? _____

4. SUBTRACT 11 from 99. What is your answer? _____

5. What is 11 MORE THAN 88? _____

6. What is 11 LESS THAN 121? _____

7. SUBTRACT 11 from 14. What is your answer? _____

8. Count by 11's. Circle the numbers that you say.

11

28

55

88

97

66

80

99

33

22

Name: _____

Date: _____



1. Count by 12's

12, 24, 36, _____, _____, _____, _____, _____,

_____, _____, _____, _____, _____, _____

2. What is 12 LESS THAN 168? _____

3. What is 12 MORE THAN 96? _____

4. SUBTRACT 12 from 36. What is your answer? _____

5. What is 12 MORE THAN 132? _____

6. What is 12 LESS THAN 60? _____

7. SUBTRACT 12 from 72. What is your answer? _____

8. Count by 12's. Circle the numbers that you say.

18

120

96

36

24

25

60

99

72

22

Name: _____

Date: _____



1. Count by 13's

13, 26, 39, _____, _____, _____, _____, _____,

_____, _____, _____, _____, _____, _____

2. What is 13 LESS THAN 130? _____

3. What is 13 MORE THAN 52? _____

4. SUBTRACT 13 from 117. What is your answer? _____

5. What is 13 MORE THAN 39? _____

6. What is 13 LESS THAN 195? _____

7. SUBTRACT 13 from 169. What is your answer? _____

8. Count by 13's. Circle the numbers that you say.

13

25

78

36

117

25

65

99

64

156

Name: _____

Date: _____



1. Count by 14's

14, 28, 42, _____, _____, _____, _____, _____,

_____ , _____ , _____ , _____ , _____ , _____

2. What is 14 LESS THAN 84? _____

3. What is 14 MORE THAN 140? _____

4. SUBTRACT 14 from 210. What is your answer? _____

5. What is 14 MORE THAN 28? _____

6. What is 14 LESS THAN 70? _____

7. SUBTRACT 14 from 182. What is your answer? _____

8. Count by 14's. Circle the numbers that you say.

42

25

70

140

168

96

84

17

64

126

Name: _____

Date: _____



1. Count by 15's

15, 30, 45, _____, _____, _____, _____, _____,

_____, _____, _____, _____, _____, _____

2. What is 15 LESS THAN 150? _____

3. What is 15 MORE THAN 60? _____

4. SUBTRACT 15 from 135. What is your answer? _____

5. What is 15 MORE THAN 108? _____

6. What is 15 LESS THAN 225? _____

7. SUBTRACT 15 from 120. What is your answer? _____

8. Count by 15's. Circle the numbers that you say.

225

25

60

154

105

90

30

17

225

210