

# 2<sup>nd</sup> Grade - Money Word Problems

**2**  
**BONUS**  
**Coin**  
**Worksheets**  
**included!**

**2 Worksheets**  
**for No frills**  
**Practice**

**Common Core**  
**2.MD.8**

## **This no frills practice is designed specifically for 2.MD.8:**

Solve word problems involving dollar bills, quarters, dimes, nickels, and pennies, using \$ and ¢ symbols appropriately.

**There are 2 worksheets of money word problems:**

**The words are the same in these 2 versions - just the numbers and names are changed for the ten problems.**

**The first worksheet has 3 problems that total over a dollar.**

**The second worksheet only involves coins (not bills) and all problems have sums less than a dollar.**

**★ I threw in 2 BONUS worksheets that are related, but don't fit the standard because they aren't "word problems"**

Suggestions for use:

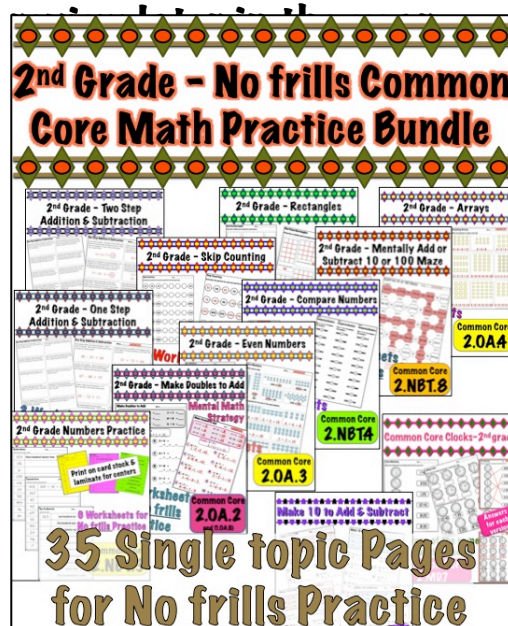
**\*Do one version in class & send the other home for practice**

**\*Print an answer sheet for students to check their own work**

**\*Do one version now and save one for**

This is part of a series of my "no-frills" Common Core Math Practice for 2<sup>nd</sup> grade. Each page addresses a single topic. The whole series is available as a bundle. I will continue to add more standards. Buy it now & re-download it for free as I update it.

These money problems will increase it to 39 pages.



# Money Word Problems

Name \_\_\_\_\_

If you have 3 dollar bills, 3 dimes, and 3 pennies, how much money do you have ?

Jason added 2 quarters and 6 nickels to his piggy bank, how much money did he add?

Marly bought some snacks at the store and got 2 quarters, 1 dime, and 3 pennies for change. How much change did she get?

Ashley threw a nickel and 3 pennies into the wishing well. Amanda threw in 1 dime and 2 pennies. How much money did the girls throw into the wishing well?

If you have 4 quarters, 2 dimes, and 2 nickels, how much money do you have?

Javier found 3 nickels, 1 quarter, and 6 pennies under the couch cushions. How much money was lost in the couch?

Madeline had 2 quarters, 4 dimes, and 3 pennies in her pocket. How much money did she have?

Tyler put 4 dimes and 4 nickels in the donation jar. How much did he donate?

Santiago has one dollar bill, 2 quarters and 3 pennies. Layla has 2 dollar bills and 3 pennies. How much money do they have combined?

The bus driver collected all the coins she found on the bus. At the end of the month she had 5 quarters, 6 dimes, and 3 nickels. How much money did the students lose on the bus?

# Money Word Problems

Name \_\_\_\_\_

If you have 1 quarter, 2 dimes, and 3 pennies, how much money do you have ?

Gary added 3 quarters and 4 nickels to his piggy bank, how much money did he add?

Hannah bought some snacks at the store and got 2 quarters, 1 nickel, and 2 pennies for change. How much change did she get?

Kyra threw a dime and 4 pennies into the wishing well. Alicia threw in 2 nickels and 2 pennies. How much money did the girls throw into the wishing well?

If you have 2 quarters, 2 dimes, and 3 nickels, how much money do you have?

Marquis found 2 nickels, 3 quarters, and 4 pennies under the couch cushions. How much money was lost in the couch?

Makayla had 1 quarter, 3 dimes, and 5 pennies in her pocket. How much money did she have?

Cameron put 4 dimes and 2 quarters in the donation jar. How much did he donate?

Tanner has 1 quarter and 3 pennies. Trey has 3 dimes and 2 nickels. How much money do they have combined?

The bus driver collected all the coins he found on the bus. At the end of the week he had 2 quarters, 2 dimes, and 4 nickels. How much money did the students lose on the bus?

# Coins

Name \_\_\_\_\_

Use these symbols to draw two ways to make each amount.

Q for quarters    D for dimes    N for nickels    P for pennies

18¢



26¢



80¢



71¢



57¢



# Coins

Name \_\_\_\_\_

Use these symbols to draw two ways to make each amount.

Q for quarters    D for dimes    N for nickels    P for pennies

14¢



35¢



90¢



61¢



46¢



# Money Word Problems

Name \_\_\_\_\_ **Answers**

If you have 3 dollar bills, 3 dimes, and 3 pennies, how much money do you have ?

$$\$3 + 10\text{¢} + 10\text{¢} + 10\text{¢} + 1\text{¢} + 1\text{¢} + 1\text{¢}$$

**\$3 and 33¢ or \$3.33**

Jason added 2 quarters and 6 nickels to his piggy bank, how much money did he add?

$$25\text{¢} + 25\text{¢} + 5\text{¢} + 5\text{¢} + 5\text{¢} + 5\text{¢} + 5\text{¢} + 5\text{¢}$$

**80¢**

Marly bought some snacks at the store and got 2 quarters, 1 dime, and 3 pennies for change. How much change did she get?

$$25\text{¢} + 25\text{¢} + 10\text{¢} + 1\text{¢} + 1\text{¢} + 1\text{¢}$$

**63¢**

Ashley threw a nickel and 3 pennies into the wishing well. Amanda threw in 1 dime and 2 pennies. How much money did the girls throw into the wishing well?

$$5\text{¢} + 1\text{¢} + 1\text{¢} + 1\text{¢} + 10\text{¢} + 1\text{¢} + 1\text{¢}$$

**20¢**

If you have 4 quarters, 2 dimes, and 2 nickels, how much money do you have?

$$25\text{¢} + 25\text{¢} + 25\text{¢} + 25\text{¢} + 10\text{¢} + 10\text{¢} + 5\text{¢} + 5\text{¢}$$

**\$1 and 30¢ or \$1.30**

Javier found 3 nickels, 1 quarter, and 6 pennies under the couch cushions. How much money was lost in the couch?

$$5\text{¢} + 5\text{¢} + 5\text{¢} + 25\text{¢} + 1\text{¢} + 1\text{¢} + 1\text{¢} + 1\text{¢} + 1\text{¢} + 1\text{¢}$$

**46¢**

Madeline had 2 quarters, 4 dimes, and 3 pennies in her pocket. How much money did she have?

$$25\text{¢} + 25\text{¢} + 10\text{¢} + 10\text{¢} + 10\text{¢} + 10\text{¢} + 1\text{¢} + 1\text{¢} + 1\text{¢}$$

**93¢**

Tyler put 4 dimes and 4 nickels in the donation jar. How much did he donate?

$$10\text{¢} + 10\text{¢} + 10\text{¢} + 10\text{¢} + 5\text{¢} + 5\text{¢} + 5\text{¢} + 5\text{¢}$$

**60¢**

Santiago has one dollar bill, 2 quarters and 3 pennies. Layla has 2 dollar bills and 3 pennies. How much money do they have combined?

$$\$1 + 25\text{¢} + 25\text{¢} + 1\text{¢} + 1\text{¢} + 1\text{¢} + \$2 + 1\text{¢} + 1\text{¢} + 1\text{¢}$$

**\$3 and 56¢ or \$3.56**

The bus driver collected all the coins she found on the bus. At the end of the month she had 5 quarters, 6 dimes, and 3 nickels. How much money did the students lose on the bus?

$$25\text{¢} + 25\text{¢} + 25\text{¢} + 25\text{¢} + 25\text{¢} + 10\text{¢} + 10\text{¢} + 10\text{¢} + 10\text{¢} + 10\text{¢} + 5\text{¢} + 5\text{¢} + 5\text{¢}$$

**\$2 or 200¢**

# Money Word Problems

Name \_\_\_\_\_ **Answers**

If you have 1 quarter, 2 dimes, and 3 pennies, how much money do you have ?

$$25\text{¢} + 10\text{¢} + 10\text{¢} + 1\text{¢} + 1\text{¢} + 1\text{¢}$$

**48¢**

Gary added 3 quarters and 4 nickels to his piggy bank, how much money did he add?

$$25\text{¢} + 25\text{¢} + 25\text{¢} + 5\text{¢} + 5\text{¢} + 5\text{¢} + 5\text{¢}$$

**95¢**

Hannah bought some snacks at the store and got 2 quarters, 1 nickel, and 2 pennies for change. How much change did she get?

$$25\text{¢} + 25\text{¢} + 5\text{¢} + 1\text{¢} + 1\text{¢}$$

**57¢**

Kyra threw a dime and 4 pennies into the wishing well. Alicia threw in 2 nickels and 2 pennies. How much money did the girls throw into the wishing well?

$$10\text{¢} + 1\text{¢} + 1\text{¢} + 1\text{¢} + 1\text{¢} + 5\text{¢} + 5\text{¢} + 1\text{¢} + 1\text{¢}$$

**26¢**

If you have 2 quarters, 2 dimes, and 3 nickels, how much money do you have?

$$25\text{¢} + 25\text{¢} + 10\text{¢} + 10\text{¢} + 5\text{¢} + 5\text{¢} + 5\text{¢}$$

**85¢**

Marquis found 2 nickels, 3 quarters, and 4 pennies under the couch cushions. How much money was lost in the couch?

$$5\text{¢} + 5\text{¢} + 25\text{¢} + 25\text{¢} + 25\text{¢} + 1\text{¢} + 1\text{¢} + 1\text{¢} + 1\text{¢}$$

**89¢**

Makayla had 1 quarter, 3 dimes, and 5 pennies in her pocket. How much money did she have?

$$25\text{¢} + 10\text{¢} + 10\text{¢} + 10\text{¢} + 1\text{¢} + 1\text{¢} + 1\text{¢} + 1\text{¢} + 1\text{¢}$$

**60¢**

Cameron put 4 dimes and 2 quarters in the donation jar. How much did he donate?

$$10\text{¢} + 10\text{¢} + 10\text{¢} + 10\text{¢} + 25\text{¢} + 25\text{¢}$$

**90¢**

Tanner has 1 quarter and 3 pennies. Trey has 3 dimes and 2 nickels. How much money do they have combined?

$$25\text{¢} + 1\text{¢} + 1\text{¢} + 1\text{¢} + 10\text{¢} + 10\text{¢} + 10\text{¢} + 5\text{¢} + 5\text{¢}$$

**68¢**

The bus driver collected all the coins he found on the bus. At the end of the week he had 2 quarters, 2 dimes, and 4 nickels. How much money did the students lose on the bus?

$$25\text{¢} + 25\text{¢} + 10\text{¢} + 10\text{¢} + 5\text{¢} + 5\text{¢} + 5\text{¢} + 5\text{¢}$$

**90¢**





# Coins

Name \_\_\_\_\_

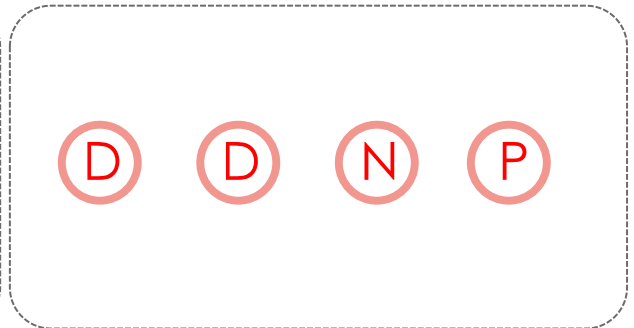
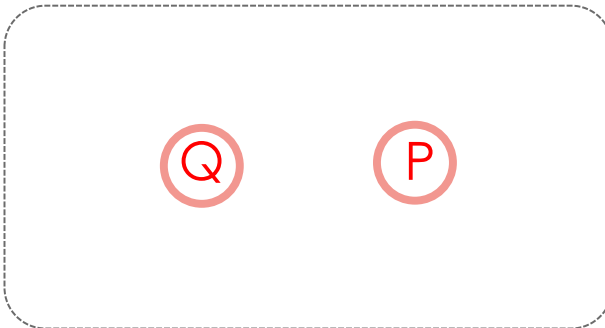
Use these symbols to draw two ways to make each amount.

Q for quarters    D for dimes    N for nickels    P for pennies


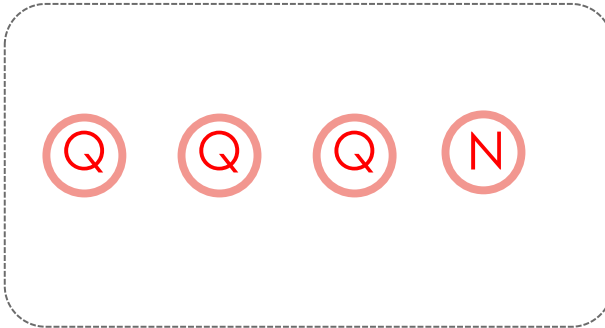
18¢





26¢





80¢



71¢



57¢





# Coins

Name \_\_\_\_\_

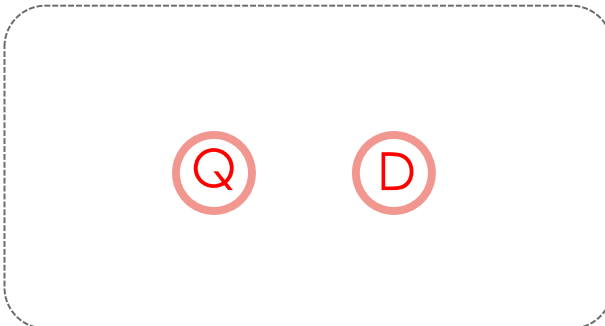
Use these symbols to draw two ways to make each amount.

Q for quarters    D for dimes    N for nickels    P for pennies

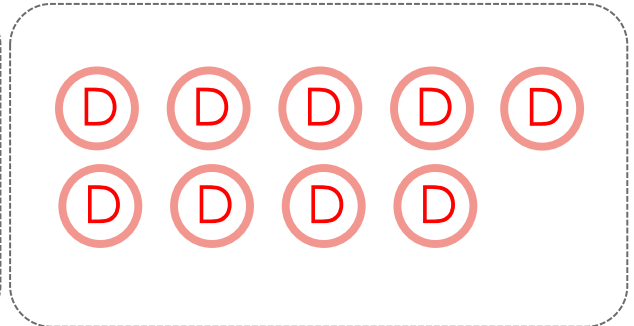
14¢



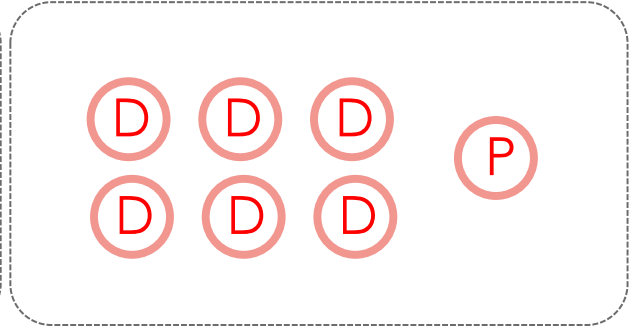

35¢




90¢



61¢



46¢



**THANKS !**

If you like this please visit my TpT Store to leave feedback:



<http://teacherspayteachers.com/Store/Lisa-Tarman>

**Lisa Tarman**

Check out my other 2<sup>nd</sup> grade products:

**2<sup>nd</sup> Grade Math Flipchart**

**Begin or End Blend Flipchart**

Students determine if word **BEGINS** or **ENDS** with the blend and slide the picture

ch  
sk  
sh  
st

**Which Blend?**

Students slide picture to starting blend

3 interactive slides:  
br, cr, tr, dr  
ch, sh, wh, th  
cl, bl, gl, fl

**Counting Rectangular Arrays**

8 pairs of cards to match

Optional sheet for recording answers

$4 + 4 = 8$   
 $5 + 5 = 10$   
 $4 + 4 + 4 = 12$

**2<sup>nd</sup> Grade Math Flipchart**

CC.2.OA.2 - Know from memory all sums of two one-digit numbers

$6 + 5 =$        $1 + 8 =$

CC.2.OA.3 - Determine whether a group of objects (up to 20) has an odd or even number of members by counting

**2.AO.3**

**2.AO.4**

**Christmas Array Counting Worksheet**

Grayscale for students

Simple worksheet for Common Core **2.OA.4**

Color Answers & Color Copy for Teacher to Project

**Halloween Array Counting Worksheet**

Grayscale for students

Simple worksheet for Common Core **2.OA.4**

Color Answers & Color Copy for Teacher to Project

**2<sup>nd</sup> Grade - Mentally Add or Subtract 10 or 100 Maze**

5 Worksheets for No frills Practice

Common Core **2.NBT.8**